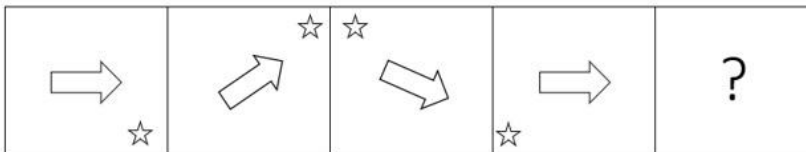


Constable GD in CAPFs SSF Rifleman GD in Assam Rifles and Sepoy in NCB Examination 2022

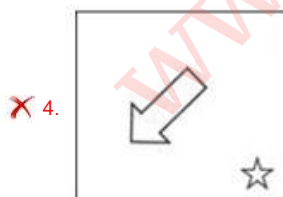
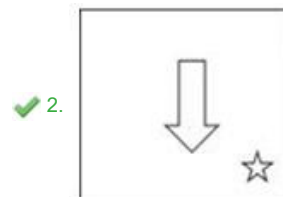
Roll Number	www.govtjobsalert.in
Candidate Name	www.govtjobsalert.in
Venue Name	ION Digital Zone iDZ Kuanwala
Exam Date	08/02/2023
Exam Time	9:00 AM - 10:00 AM
Subject	Constable GD Examination 2022

Section : Part-A-General Intelligence and Reasoning

Q.1 Select the figure from among the given options that can replace the question mark (?) in the following series.



Ans



Question ID : 26433080754
Status : Answered
Chosen Option : 2

Q.2 Three statements are given, followed by three conclusions numbered I, II and III. Assuming the statements to be true, even if they seem to be at variance with commonly known facts, decide which of the conclusions logically follow(s) from the statements.

Statements:

Some lamps are clocks.

All clocks are books.

Some books are stones.

Conclusions:

I. Some lamps are stones.

II. Some books are lamps.

III. Some clocks are stones.

Ans 1. Only conclusions I and III follow

2. Only conclusion II follows

3. Only conclusions I and II follow

4. All conclusions follow

Question ID : 26433090988

Status : Answered

Chosen Option : 2

Q.3 Select the option that is related to the third word in the same way as the second word is related to the first word. (The words must be considered as meaningful English words and must not be related to each other based on the number of letters/number of consonants/vowels in the word)
Cricket : Bat :: Badminton : ?

Ans 1. Ball

2. Stick

3. Player

4. Racket

Question ID : 26433067804

Status : Answered

Chosen Option : 4

Q.4 Which of the following numbers will replace the question mark (?) in the given series?
600, 120, 30, 10, ?

Ans 1. 5

2. 1

3. 15

4. 12

Question ID : 26433082014

Status : Answered

Chosen Option : 1

Q.5 Seven people, A, B, C, D, E, F and G are sitting in a straight line, facing north. Only two people sit to the right of E. Only two people sit between E and A. B sits second to the right of A. D sits to the immediate right of F. C sits at one of the positions to the left of G. Who sits at the extreme left end of the line?

Ans 1. F

2. A

3. B

4. C

Question ID : 26433092418

Status : Answered

Chosen Option : 4

Q.6 Which two signs should be interchanged to make the below equation mathematically correct?

$$165 - 15 \div 5 + 6 \times 16 = 102$$

- Ans
- 1. - and +
 - 2. + and ×
 - 3. + and ÷
 - 4. ÷ and -

Question ID : 264330117555
 Status : Answered
 Chosen Option : 4

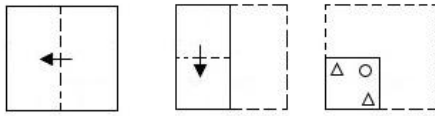
Q.7 Select the option that is related to the fifth number in the same way as the second number is related to the first number and the fourth number is related to the third number.

$$76 : 16 :: 56 : 12 :: 21 : ?$$

- Ans
- 1. 18
 - 2. 5
 - 3. 7
 - 4. 11

Question ID : 26433069427
 Status : Not Answered
 Chosen Option : --

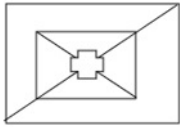
Q.8 A paper is folded and cut as shown below. How will it appear when unfolded?



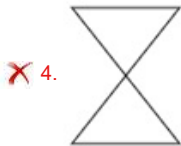
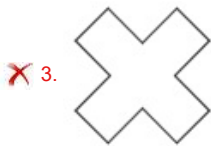
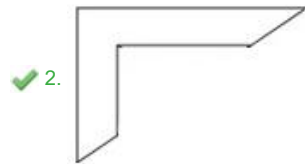
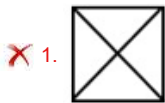
- Ans
- 1.
 - 2.
 - 3.
 - 4.

Question ID : 26433090086
 Status : Answered
 Chosen Option : 3

Q.9 Select the option that is embedded in the given figure (rotation is NOT allowed).



Ans



Question ID : 26433082898
Status : Answered
Chosen Option : 2

Q.10 In a certain code language, 'MAKE' is written as '32' and 'QUAD' is written as '45'. How will 'SELF' be written as in that language?

- Ans 1. 42
 2. 46
 3. 40
 4. 44

Question ID : 26433069646
Status : Answered
Chosen Option : 4

Q.11 Select the letter-cluster from among the given options that can replace the question mark (?) in the following series.
GZT, ZSM, SLF, LEY, ?

- Ans 1. EXR
 2. GXP
 3. GXR
 4. EXP

Question ID : 26433079036
Status : Answered
Chosen Option : 1

Q.12 In a certain code language, 'BRIGHT' is written as 'JSCVJI' and 'BROKEN' is written as 'PSCPGM'. How will 'BUDGET' be written as in that language?

- Ans
- 1. EVCTEG
 - 2. TEGDUB
 - 3. DUBTEG
 - 4. EVCVGI

Question ID : 26433090039
Status : Answered
Chosen Option : 4

Q.13 Select the option that is related to the third word in the same way as the second word is related to the first word. (The words must be considered as meaningful English words and must not be related to each other based on the number of letters/number of consonants/vowels in the word)
Fast : Slow :: Up : ?

- Ans
- 1. Huge
 - 2. Down
 - 3. Great
 - 4. Sky

Question ID : 26433082939
Status : Answered
Chosen Option : 2

Q.14 Which option represents the correct order of the given words as they would appear in the English dictionary?

1. lastly
2. latex
3. large
4. laminate
5. ladle

- Ans
- 1. 5,4,3,1,2
 - 2. 5,1,3,4,2
 - 3. 5,4,3,2,1
 - 4. 5,2,3,1,4

Question ID : 26433069328
Status : Answered
Chosen Option : 1

Q.15 Which of the following terms will replace the question mark (?) in the given series?
RLMT, QNJX, PPGb, ORDF, ?

- Ans
- 1. UTNB
 - 2. ATUN
 - 3. TNUA
 - 4. NTAJ

Question ID : 26433068986
Status : Answered
Chosen Option : 4

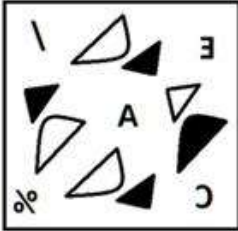
Q.16 Which of the following figures is the exact mirror image of the given problem figure when the mirror is held at the right side?

Problem figure:

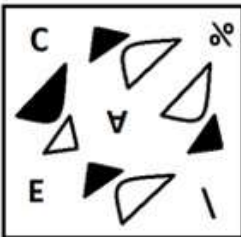


Ans

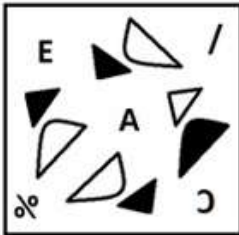
✓ 1.



✗ 2.



✗ 3.



✗ 4.



Question ID : 26433087089

Status : Answered

Chosen Option : 1

Q.17 Which two numbers(not digits) should be interchanged in the following equation to make it correct?

$$540 + 225 \div 15 \times 25 - 260 = 415$$

Ans ✓ 1. 15 and 25

✗ 2. 225 and 260

✗ 3. 15 and 260

✗ 4. 225 and 25

Question ID : 26433090139

Status : Answered

Chosen Option : 1

Q.18 'A + B' means 'A is the brother of B'.
'A - B' means 'A is the mother of B'.
'A × B' means 'A is the husband of B'.
'A ÷ B' means 'A is the sister of B'.
'A @ B' means 'A is the son of B'.
If J @ K × L - M ÷ N, how is J related to N?

- Ans
- 1. Sister's son
 - 2. Brother
 - 3. Sister's husband
 - 4. Mother's sister

Question ID : 26433086998
Status : Answered
Chosen Option : 2

Q.19 Which of the following options will replace the question mark (?) in the given series?
176, 326, 526, 776, ?, 1426, 1826

- Ans
- 1. 976
 - 2. 1276
 - 3. 1076
 - 4. 1176

Question ID : 26433089437
Status : Answered
Chosen Option : 3

Q.20 Seven people L, M, N, O, P, Q, and R are sitting in a row facing the North. R and P are sitting at the ends of the row. N is sitting to the immediate right of P. M is sitting to the third left of R. O is sitting to the immediate right of M. L is sitting between N and M. Who is sitting to the immediate left of R?

- Ans
- 1. L
 - 2. M
 - 3. P
 - 4. Q

Question ID : 26433074629
Status : Answered
Chosen Option : 4

Section : Part-B-General Knowledge and General awareness

Q.1 Who among the following became the President of Indian National Congress, a political party, in October 2022?

- Ans
- 1. Shashi Tharoor
 - 2. Sonia Gandhi
 - 3. Mallikarjun Kharge
 - 4. Sunil Jakhar

Question ID : 264330114959
Status : Answered
Chosen Option : 3

Q.2 How many players are there in a Field Hockey team?

- Ans** 1. 11
 2. 12
 3. 10
 4. 8

Question ID : 264330116302
Status : **Answered**
Chosen Option : 1

Q.3 Kalamandalam Kallyanikutty Amma received fame and recognition for her work in_____.

- Ans** 1. Kuchipudi
 2. Creative dance
 3. Mohiniyattam
 4. Sattriya

Question ID : 264330115885
Status : **Marked For Review**
Chosen Option : 3

Q.4 Who led the Bharat Jodo Yatra 2022?

- Ans** 1. Sonia Gandhi
 2. Tarun Gandhi
 3. Rahul Gandhi
 4. Priyanka Gandhi

Question ID : 264330115045
Status : **Answered**
Chosen Option : 3

Q.5 Who among the following is the composer of Prayag Prashasti or the Allahabad Pillar in praise of Gupta ruler Samudra Gupta?

- Ans** 1. Harishena
 2. Kalidasa
 3. Vishakhadatta
 4. Bhasa

Question ID : 26433099150
Status : **Answered**
Chosen Option : 1

Q.6 Match the following:

- a) National Highways i) Zila Parishad
b) State Highways ii) State Public Works Department
c) Border Roads iii) Central Public Works Department
d) District Roads iv) Border Roads Organisation

- Ans** 1. a-iv,b-iii,c-i,d-ii
 2. a-ii,b-iii,c-iv,d-i
 3. a-iii,b-ii,c-i,d-iv
 4. a-iii,b-ii,c-iv,d-i

Question ID : 264330115589
Status : **Answered**
Chosen Option : 4

Q.7 In the expenditure method, GDP \equiv Sum total of all the final _____ received by the firms in the economy.

- Ans
- 1. revenue
 - 2. income
 - 3. sales
 - 4. expenditures

Question ID : 264330115342
Status : Marked For Review
Chosen Option : 1

Q.8 Which of the following is a risk with regard to the Green Revolution?

- Ans
- 1. Increase in the farmers income
 - 2. Increased disparities between small and big farmers
 - 3. Increase in food grain production
 - 4. Increase in productivity in food grains

Question ID : 26433054628
Status : Answered
Chosen Option : 2

Q.9 What is the name of the Southernmost tip of India?

- Ans
- 1. Indira Col
 - 2. Indira Point
 - 3. Karakoram
 - 4. Point Calimere

Question ID : 264330116013
Status : Marked For Review
Chosen Option : 2

Q.10 Criminal law amendment act 2018, increased minimum punishment for rape of women from 7 to _____ years.

- Ans
- 1. 9
 - 2. 11
 - 3. 8
 - 4. 10

Question ID : 264330116231
Status : Answered
Chosen Option : 4

Q.11 Under the Indian Constitution, the Supreme Court can issue _____ for the enforcement of any of the rights conferred by Part III.

- Ans
- 1. Writs
 - 2. Notifications
 - 3. Decrees
 - 4. Ordinances

Question ID : 264330115643
Status : Answered
Chosen Option : 1

Q.12 Who has the power to recommend for the imposition of Constitutional Emergency in a state?

- Ans
- 1. The Vice President of India
 - 2. The Prime Minister of India
 - 3. The Home Minister of India
 - 4. The Governor of that state

Question ID : 26433090678
Status : Answered
Chosen Option : 4

Q.13 How many deities are worshipped in Kharchi Puja of Tripura?

- Ans
- 1. 9
 - 2. 8
 - 3. 14
 - 4. 13

Question ID : 264330106216
Status : Answered
Chosen Option : 4

Q.14 The green plants in a terrestrial ecosystem capture about _____ of the energy of sunlight that falls on their leaves and convert it into food energy.

- Ans
- 1. 25%
 - 2. 10%
 - 3. 50%
 - 4. 1%

Question ID : 264330115261
Status : Marked For Review
Chosen Option : 3

Q.15 The athletes while throwing the discus have to remain inside a circle of how many diameter?

- Ans
- 1. 2 meters
 - 2. 2.5 meters
 - 3. 3.5 meters
 - 4. 3 meters

Question ID : 264330115945
Status : Answered
Chosen Option : 2

Q.16 Who among the following authors incorporated the song Vande Mataram into his novel?

- Ans
- 1. Murugam Periyar
 - 2. Lal Makhan Singh
 - 3. Vir Singh Salgaonkar
 - 4. Bankim Chandra Chattopadhyay

Question ID : 26433091466
Status : Answered
Chosen Option : 4

Q.17 Who among the following personalities is an exponent of Indian classical dance?

- Ans
- 1. Zakir Hussain
 - 2. Amjad Ali Khan
 - 3. Rani Karnaa
 - 4. Sukanya Ramgopal

Question ID : 26433070806
Status : Marked For Review
Chosen Option : 3

Q.18 This underemployment is hidden in contrast to someone who does not have a job and is clearly visible as unemployed. Hence, it is also called _____.

- Ans
- 1. Cyclic unemployment
 - 2. Frictional unemployment
 - 3. Open employment
 - 4. Disguised employment

Question ID : 264330116083
Status : Marked For Review
Chosen Option : 4

Q.19 Maximum number of electrons that can filled in a shell is given by _____ where n is orbit number.

- Ans
- 1. $2n^3$
 - 2. $3n^2$
 - 3. $2n^2$
 - 4. $3n^3$

Question ID : 264330115178
Status : Answered
Chosen Option : 3

Q.20 In India, white revolution is also known as _____.

- Ans
- 1. operation dairy
 - 2. operation dam
 - 3. operation flood
 - 4. operation milk

Question ID : 264330115421
Status : Answered
Chosen Option : 3

Section : Part-C-Elementary Mathematics

Q.1 If y varies directly with x, and $y = 16$ when $x = 24$, then find the value of y when $x = 45$.

- Ans
- 1. 24
 - 2. 40
 - 3. 30
 - 4. 45

Question ID : 26433074994
Status : Answered
Chosen Option : 3

Q.2 What is the rate of compound interest per annum, if a sum becomes $\frac{64}{27}$ times in 3 years?

Ans

1. $21\frac{1}{3}$ percent

2. $16\frac{1}{3}$ percent

3. $25\frac{1}{4}$ percent

4. $33\frac{1}{3}$ percent

Question ID : 26433079876

Status : Answered

Chosen Option : 4

Q.3 A man purchased a table marked at ₹500 at two successive discounts of 8% and 25% respectively. He spent ₹32 on transportation and sold the table for ₹500. What is the amount he gained?

Ans

1. ₹130

2. ₹120

3. ₹123

4. ₹124

Question ID : 26433075348

Status : Answered

Chosen Option : 3

Q.4 A cuboid has sides in the ratio 3 : 4 : 5 and its volume is 480 cubic units. The difference between the largest and the smallest side is _____ units.

Ans

1. 3

2. 4

3. 5

4. 6

Question ID : 26433071270

Status : Answered

Chosen Option : 2

Q.5 10 kg of superior quality of rice is mixed with 5 kg of inferior quality of rice. The prices of superior quality and inferior quality rice are ₹85 and ₹46, respectively. Find the average price per kg of the mixture

Ans

1. ₹72

2. ₹73

3. ₹75

4. ₹74

Question ID : 26433076172

Status : Answered

Chosen Option : 1

Q.6 Amisha walks 3 km at a speed of 2 km/h, runs 7 km at a speed of 4 km/h and goes another 32 km by bus. If the speed of the bus is 28 km/h, then find Amisha's average speed for the whole journey.

- Ans
- 1. $\frac{392}{41}$ km/h
 - 2. $\frac{394}{41}$ km/h
 - 3. $\frac{391}{41}$ km/h
 - 4. $\frac{393}{41}$ km/h

Question ID : 26433092158
Status : Answered
Chosen Option : 1

Q.7 Rakhi sold a TV to Sujata at a profit of 10%. Urmila sold that TV to Rakhi at a profit of 20%. How much did Sujata pay to buy the TV if the cost price for Urmila was Rs.50,000?

- Ans
- 1. Rs.66,000
 - 2. Rs.72,000
 - 3. Rs.78,000
 - 4. Rs.65,000

Question ID : 26433075058
Status : Answered
Chosen Option : 1

Q.8 P can do a piece of work in 20 days and Q can do it in 25 days. If they work on it together for 4 days, then what percentage of work will be left?

- Ans
- 1. 68%
 - 2. 52%
 - 3. 64%
 - 4. 36%

Question ID : 26433075955
Status : Answered
Chosen Option : 3

Q.9 A certain sum amounts to Rs.7,200 in 2 years at 6% per annum compound interest, compounded annually. Find the sum (in Rs., to the nearest integer).

- Ans
- 1. Rs.6,400
 - 2. Rs.6,449
 - 3. Rs.6,408
 - 4. Rs.6,507

Question ID : 26433076041
Status : Answered
Chosen Option : 3

Q.10 A government servant spends 76% of his income. If his income is increased by 14%, and his expenditure is increased by 10%, then find the percentage increase in his savings. (Correct to 2 decimal places)

- Ans
- 1. 24.33%
 - 2. 27.66%
 - 3. 26.67%
 - 4. 28.33%

Question ID : 26433080156
Status : Answered
Chosen Option : 3

Q.11 What is the largest number which can divide 187, 233 and 279, leaving the same remainder in each case?

- Ans
- 1. 30
 - 2. 36
 - 3. 46
 - 4. 56

Question ID : 26433082341
Status : Answered
Chosen Option : 3

Q.12 Two trains of lengths 257.5 m and 272.5 m, travelling in opposite directions crossed each other in 15.9 sec. What is their approximate combined speed per hour?

- Ans
- 1. 150 km/h
 - 2. 136 km/h
 - 3. 145 km/h
 - 4. 120 km/h

Question ID : 26433075922
Status : Answered
Chosen Option : 4

Q.13 There was 20% discount on VIP bags. Anupam bought a bag. He also got an additional 8% discount for paying cash. If he paid ₹2,208, then what was the price tag on the bag?

- Ans
- 1. ₹2,300
 - 2. ₹2,500
 - 3. ₹2,600
 - 4. ₹3,000

Question ID : 26433080174
Status : Answered
Chosen Option : 4

Q.14 A seller marked the price 25% more than its cost price. If he allows a discount of 42%, then find his loss percent.

- Ans
- 1. 33.5%
 - 2. 27.5%
 - 3. 30%
 - 4. 8.5%

Question ID : 26433074927
Status : Answered
Chosen Option : 2

Q.15 The value of a motorbike depreciates by 10% per annum. What will be the value of the motorbike after 36 months, if its current value is Rs.1,00,000?

- Ans
- 1. 70900
 - 2. 71900
 - 3. 72900
 - 4. 73900

Question ID : 26433071358
Status : Answered
Chosen Option : 3

Q.16 If three solid spheres of metal whose radii are 1cm, 6 cm and 8 cm are melted to form another solid sphere, then the surface area of new sphere (in cm^2) is:

- Ans
- 1. 364π
 - 2. 243π
 - 3. 324π
 - 4. 642π

Question ID : 26433075896
Status : Answered
Chosen Option : 3

Q.17 A train is moving at a uniform speed of 80km/h. How much distance is covered by the train in 30 minutes?

- Ans
- 1. 40 km
 - 2. 50 km
 - 3. 70 km
 - 4. 60 km

Question ID : 26433074951
Status : Answered
Chosen Option : 1

Q.18 Pooja, Neha, and Manoj can do a piece of work in 16, 22, and 20 days respectively. On which day will the work get finished if Pooja is assisted by both Neha and Manoj on every second day?

- Ans
- 1. 10th day
 - 2. 8th day
 - 3. 9th day
 - 4. 7th day

Question ID : 264330116915
Status : Answered
Chosen Option : 2

Q.19 If $36 \div 2 + y \times 3 - 22 = 8$, then find the value of y .

- Ans 1. 8
 2. 4
 3. 2
 4. 1

Question ID : 26433079763
Status : Answered
Chosen Option : 2

Q.20 The length of a train is 150 metres. In 3 seconds, it passes a man travelling at 2 km/h in the same direction as the train. Determine the train's speed.

- Ans 1. 176 km/h
 2. 191 km/h
 3. 168 km/h
 4. 182 km/h

Question ID : 26433075853
Status : Answered
Chosen Option : 4

Section : Part-D-English

Q.1 Select the most appropriate option to fill in the blanks in the given sentence.

My teacher said, "Time _____ like an arrow, and fruit _____ like bananas".

- Ans 1. wings
 2. travels
 3. flies
 4. glides

Question ID : 26433084770
Status : Answered
Chosen Option : 3

Q.2 Select the appropriate idiom that can replace the underlined phrase in the following sentence.

It was a great chance. You missed out an opportunity.

- Ans 1. are in the middle of nowhere
 2. are a blessing in disguise
 3. are dead as a dodo
 4. missed the boat

Question ID : 26433072363
Status : Answered
Chosen Option : 4

Q.3 Select the most appropriate synonym of the given word.

Grandeur

- Ans 1. Magnificence
 2. Liable
 3. Commotion
 4. Power

Question ID : 26433087916
Status : Answered
Chosen Option : 1

Q.4 Select the most appropriate option that can substitute the underlined segment in the given sentence.

In spite of all her air and graces, she had very few talents

- Ans 1. airing her grace
 2. airs and graces
 3. airs and grace
 4. airing her graces

Question ID : 26433071934
Status : Answered
Chosen Option : 2

Q.5 Select the most appropriate synonym of the underlined word.

He paused several times while delivering the speech.

- Ans 1. persisted
 2. stammered
 3. left
 4. halted

Question ID : 26433088492
Status : Answered
Chosen Option : 4

Q.6 Select the most appropriate synonym of the underlined word in the given sentence.

The decision taken by the director is a/(an) judicious one.

- Ans 1. honest
 2. irrational
 3. thoughtful
 4. foolish

Question ID : 26433092108
Status : Answered
Chosen Option : 3

Q.7 The sentence given below has one misspelt word. Spot the INCORRECTLY spelt word and select its correct spelling.

Clouds are a kaleidoscope of shapes, sizes, patterns and colours.

- Ans** 1. Kaleidoscope
 2. Kaleidascope
 3. Caliedoscope
 4. Caledoscope

Question ID : 26433073546
Status : Answered
Chosen Option : 1

Q.8 Select the most appropriate option to substitute the underlined segment in the given sentence.

Water pollution not only endangers human health but also our environment.

- Ans** 1. only causes
 2. only harms
 3. only shatters
 4. only clashes

Question ID : 26433089829
Status : Answered
Chosen Option : 2

Q.9 Select the most appropriate ANTONYM of the given word.

Relevant

- Ans** 1. Insignificant
 2. Ignorant
 3. Compact
 4. Applicable

Question ID : 26433090785
Status : Answered
Chosen Option : 1

Q.10 Select the most appropriate option to fill in the blank.

David always takes extra effort and _____ the assignments on time.

- Ans** 1. submit
 2. submitted
 3. submits
 4. may submit

Question ID : 26433089300
Status : Answered
Chosen Option : 3

Q.11 Select the most appropriate ANTONYM of the given word.

Prompt

- Ans 1. Attentive
 2. Initiate
 3. Delayed
 4. Efficient

Question ID : 26433090795
Status : Answered
Chosen Option : 3

Q.12 Select the most appropriate option that can substitute the underlined segment in the given sentence. If there is no need to substitute it, select 'No substitution'.

When he hand in his homework, he forgot to give the teacher the last page.

- Ans 1. When he handed his homework,
 2. When he has handed in his homework,
 3. No substitution
 4. When he handed in his homework,

Question ID : 264330101024
Status : Answered
Chosen Option : 1

Q.13 Select the most appropriate synonym of the given word to fill in the blank in the sentence.

Propel

Paddles are used to _____ the boat.

- Ans 1. rush
 2. move
 3. carry
 4. run

Question ID : 26433060554
Status : Answered
Chosen Option : 2

Q.14 Select the most appropriate option that can substitute the underlined segment in the given sentence.

Heather studied really hard during six days in order to crack the entrance examination.

- Ans 1. studied really hard underneath six days
 2. studied really hard during those six days
 3. studied real hard during six days
 4. studied really hard during that six days

Question ID : 26433091774
Status : Answered
Chosen Option : 2

Q.15 Select the most appropriate option to fill in the blank.

Competition and cooperation are the most _____ elements of a company's success story.

- Ans
- 1. insignificant
 - 2. useless
 - 3. inappropriate
 - 4. important

Question ID : 26433073787

Status : Answered

Chosen Option : 4

Comprehension:

In the following passage, some words have been deleted. Read the passage carefully and select the most appropriate option to fill in each blank.

Outside, the world had become a formless, (1)_____ with no shape, while the house itself seemed to have twisted and stretched. There was sticky web-stuff (2)_____ to her arm, and she wiped it off as best as she could. The other mother was waiting for her, standing on the grass with her arms (3)_____. Her black button eyes were expressionless, but her lips were pressed tightly in a cold (4)_____. When she saw Myna she reached (5)_____ one long white hand, and she crooked a finger.

SubQuestion No : 16

Q.16 Select the most appropriate option to fill in blank number 1.

- Ans
- 1. ambiguous
 - 2. advent
 - 3. ambivalent
 - 4. amorphous

Question ID : 26433091407

Status : Answered

Chosen Option : 4

Comprehension:

In the following passage, some words have been deleted. Read the passage carefully and select the most appropriate option to fill in each blank.

Outside, the world had become a formless, (1)_____ with no shape, while the house itself seemed to have twisted and stretched. There was sticky web-stuff (2)_____ to her arm, and she wiped it off as best as she could. The other mother was waiting for her, standing on the grass with her arms (3)_____. Her black button eyes were expressionless, but her lips were pressed tightly in a cold (4)_____. When she saw Myna she reached (5)_____ one long white hand, and she crooked a finger.

SubQuestion No : 17

Q.17 Select the most appropriate option to fill in blank number 2.

- Ans
- 1. unmoor
 - 2. clung
 - 3. dried
 - 4. manumit

Question ID : 26433091408

Status : Answered

Chosen Option : 2

Comprehension:

In the following passage, some words have been deleted. Read the passage carefully and select the most appropriate option to fill in each blank.

Outside, the world had become a formless, (1)_____ with no shape, while the house itself seemed to have twisted and stretched. There was sticky web-stuff (2)_____ to her arm, and she wiped it off as best as she could. The other mother was waiting for her, standing on the grass with her arms (3)_____. Her black button eyes were expressionless, but her lips were pressed tightly in a cold (4)_____. When she saw Myna she reached (5)_____ one long white hand, and she crooked a finger.

SubQuestion No : 18

Q.18 Select the most appropriate option to fill in blank number 3.

- Ans**
- 1. joined
 - 2. entwined
 - 3. entangled
 - 4. folded

Question ID : 26433091409
Status : Answered
Chosen Option : 4

Comprehension:

In the following passage, some words have been deleted. Read the passage carefully and select the most appropriate option to fill in each blank.

Outside, the world had become a formless, (1)_____ with no shape, while the house itself seemed to have twisted and stretched. There was sticky web-stuff (2)_____ to her arm, and she wiped it off as best as she could. The other mother was waiting for her, standing on the grass with her arms (3)_____. Her black button eyes were expressionless, but her lips were pressed tightly in a cold (4)_____. When she saw Myna she reached (5)_____ one long white hand, and she crooked a finger.

SubQuestion No : 19

Q.19 Select the most appropriate option to fill in blank number 4.

- Ans**
- 1. serenity
 - 2. calmness
 - 3. fury
 - 4. quietude

Question ID : 26433091410
Status : Answered
Chosen Option : 3

Comprehension:

In the following passage, some words have been deleted. Read the passage carefully and select the most appropriate option to fill in each blank.

Outside, the world had become a formless, (1)_____ with no shape, while the house itself seemed to have twisted and stretched. There was sticky web-stuff (2)_____ to her arm, and she wiped it off as best as she could. The other mother was waiting for her, standing on the grass with her arms (3)_____. Her black button eyes were expressionless, but her lips were pressed tightly in a cold (4)_____. When she saw Myna she reached (5)_____ one long white hand, and she crooked a finger.

SubQuestion No : 20

Q.20 Select the most appropriate option to fill in blank number 5.

- Ans**
- 1. by
 - 2. out
 - 3. of
 - 4. in

Question ID : 26433091411
Status : Answered
Chosen Option : 2

Q.1 निम्नलिखित में से शुद्ध वाक्य कौन-सा है?

- Ans 1. सब तरह के वर्ग के लोग सभा में उपस्थित थे।
 2. यह बात कहने में अनन्या को संकोच न होगा।
 3. इस बात को कहने में अनन्या को संकोच न होगा।
 4. बाजार में झुंडों के झुण्ड जानवर खड़े थे।

Question ID : 26433066997
Status : Not Answered
Chosen Option : --

Q.2 विकल्पों में दिए गए किस वाक्य में निम्न शब्द के पर्यायवाची का प्रयोग किया गया है?
गणेश

- Ans 1. हम पुरंदर की पूजा करते हैं।
 2. हमें गजानन की पूजा करनी चाहिए।
 3. हमें शशिशेखर की अर्चना करनी चाहिए।
 4. हमें पीताम्बर की अर्चना करनी चाहिए।

Question ID : 26433066932
Status : Not Answered
Chosen Option : --

Q.3 निम्न वाक्य में रेखांकित शब्द के स्थान पर सर्वोचित शब्द का चयन कीजिए।
चंद्रगुप्त ऐतिहासिक मरुभूमि पर लिखा गया नाटक है।

- Ans 1. रूपांतरण
 2. पृष्ठभूमि
 3. शैली
 4. भाषा

Question ID : 26433065699
Status : Not Answered
Chosen Option : --

Q.4 'इन्द्र' का पर्यायवाची शब्द इनमें से क्या होगा?

- Ans 1. शक्र
 2. पिनाकी
 3. मनोज
 4. पंचबाण

Question ID : 26433066904
Status : Not Answered
Chosen Option : --

Q.5 दिए गए मुहावरे में रेखांकित अंश के स्थान पर सबसे उपयुक्त विकल्प कौन-सा होगा?
सिर पर आदमी सवार होना।

- Ans 1. इंसान
 2. भगवान
 3. भूत
 4. जानवर

Question ID : 26433066745
Status : Not Answered
Chosen Option : --

Q.6 निम्नलिखित वाक्य के रिक्त स्थान की पूर्ति उचित संज्ञा शब्द से करें।
डॉक्टर _____ का परीक्षण करता है।

- Ans
- 1. कुछ
 - 2. रोगी
 - 3. नीरस
 - 4. अपने-आप

Question ID : 26433085021
Status : Not Answered
Chosen Option : --

Q.7 दानव का स्वरूप कुरूप है और ईश्वर का _____।
उपरोक्त वाक्य में रिक्त स्थान की पूर्ति 'कुरूप' के विलोम शब्द से करें।

- Ans
- 1. स्वरूप
 - 2. सुंदर
 - 3. भौंडा
 - 4. रूप

Question ID : 26433080878
Status : Not Answered
Chosen Option : --

Q.8 निम्न वाक्यांश के लिए उपयुक्त एक शब्द क्या होगा?
जिसके पाणि में चक्र है

- Ans
- 1. चक्रपाणि
 - 2. चतुर्दिक
 - 3. चक्रधर
 - 4. चक्राकार

Question ID : 26433070084
Status : Not Answered
Chosen Option : --

Q.9 निम्नलिखित मुहावरे में गलत शब्द है-
आकाश-पत्तल एक कर देना

- Ans
- 1. देना
 - 2. पत्तल
 - 3. आकाश
 - 4. एक

Question ID : 26433062812
Status : Not Answered
Chosen Option : --

Q.10 विकल्पों में से कौन सा शब्द निम्न वाक्य में रेखांकित अंश के स्थान पर आ सकता है?
इस समय उनकी आयु 70 वर्ष है।

- Ans
- 1. जीवन
 - 2. जन्मतिथि
 - 3. स्थिति
 - 4. उम्र

Question ID : 26433066877
Status : Not Answered
Chosen Option : --

Q.11 'विरचि' के लिए समानार्थी शब्द चुनकर निम्न वाक्य पूर्ण कीजिए।
राक्षस को _____ से वरदान मिला।

- Ans
- 1. विष्णु
 - 2. शंकर
 - 3. ब्रह्मा
 - 4. गणेश

Question ID : 26433063099
Status : Not Answered
Chosen Option : --

Q.12 निम्नलिखित में से कौन-सा वाक्य संज्ञा के प्रयोग की दृष्टि से शुद्ध है?

- Ans
- 1. विश्वजीत को सफल होने की उम्मीद नहीं है।
 - 2. विश्वजीत को सफल होने की जिजीविषा नहीं है।
 - 3. विश्वजीत को सफल होने की निराशा नहीं है।
 - 4. विश्वजीत को सफल होने की हताशा है।

Question ID : 26433066959
Status : Not Answered
Chosen Option : --

Q.13 मेरे सिवाय अनेक को एकाआध पुरस्कार अवश्य मिला।
उपरोक्त वाक्य में रेखांकित शब्द के स्थान पर आने वाले सर्वोचित विकल्प का चयन कीजिए।

- Ans
- 1. प्रत्येक
 - 2. किन्ही
 - 3. कुछ
 - 4. सबको

Question ID : 26433084956
Status : Not Answered
Chosen Option : --

Q.14 'कक्ष से बाहर _____ नियमों का पालन करें।' वाक्य में रिक्त स्थान की पूर्ति शुद्ध शब्द द्वारा कीजिए।

- Ans
- 1. उल्लेखित
 - 2. उलेखित
 - 3. उल्लेकित
 - 4. उल्लिखित

Question ID : 26433069701
Status : Not Answered
Chosen Option : --

Q.15 निम्नलिखित वाक्यांश के लिए एक सार्थक शब्द चुनिए।
जो बाएँ और दाएँ दोनों हाथों से तीर चला ले

- Ans
- 1. सहोदर
 - 2. सव्यसाची
 - 3. शाक्त
 - 4. मुक्तहस्त

Question ID : 26433062733
Status : Not Answered
Chosen Option : --

Comprehension:

निम्नलिखित गद्यांश में से कुछ शब्द हटा दिए गए हैं। दिए गए विकल्पों की सहायता से रिक्त स्थानों की पूर्ति कीजिए। प्रत्येक संख्या के लिए उपयुक्त विकल्प का चयन कीजिए।
सर्दियों में लूसी ने दो बच्चों 1. _____ जन्म दिया, किंतु उनमें से 2. _____ तो शीत के कारण मर गया और दूसरा उस ठिठुराने वाले परिवेश से जूझने लगा। चार-3. _____ दिन के 4. _____ को छोड़कर लूसी फिर दुकान 5. _____ आने-जाने लगी थी।

SubQuestion No : 16**Q.16 रिक्त स्थान 1 की पूर्ति के लिए सर्वाधिक उपयुक्त विकल्प का चयन कीजिए।**

- Ans** 1. को
 2. के
 3. का
 4. की

Question ID : 26433079686
Status : Not Answered
Chosen Option : --

Comprehension:

निम्नलिखित गद्यांश में से कुछ शब्द हटा दिए गए हैं। दिए गए विकल्पों की सहायता से रिक्त स्थानों की पूर्ति कीजिए। प्रत्येक संख्या के लिए उपयुक्त विकल्प का चयन कीजिए।
सर्दियों में लूसी ने दो बच्चों 1. _____ जन्म दिया, किंतु उनमें से 2. _____ तो शीत के कारण मर गया और दूसरा उस ठिठुराने वाले परिवेश से जूझने लगा। चार-3. _____ दिन के 4. _____ को छोड़कर लूसी फिर दुकान 5. _____ आने-जाने लगी थी।

SubQuestion No : 17**Q.17 रिक्त स्थान 2 की पूर्ति के लिए सर्वाधिक उपयुक्त विकल्प का चयन कीजिए।**

- Ans** 1. कुछ
 2. अनेक
 3. कोई
 4. एक

Question ID : 26433079687
Status : Not Answered
Chosen Option : --

Comprehension:

निम्नलिखित गद्यांश में से कुछ शब्द हटा दिए गए हैं। दिए गए विकल्पों की सहायता से रिक्त स्थानों की पूर्ति कीजिए। प्रत्येक संख्या के लिए उपयुक्त विकल्प का चयन कीजिए।
सर्दियों में लूसी ने दो बच्चों 1. _____ जन्म दिया, किंतु उनमें से 2. _____ तो शीत के कारण मर गया और दूसरा उस ठिठुराने वाले परिवेश से जूझने लगा। चार-3. _____ दिन के 4. _____ को छोड़कर लूसी फिर दुकान 5. _____ आने-जाने लगी थी।

SubQuestion No : 18**Q.18 रिक्त स्थान 3 की पूर्ति के लिए सर्वाधिक उपयुक्त विकल्प का चयन कीजिए।**

- Ans** 1. तीन
 2. पाँच
 3. सात
 4. छह

Question ID : 26433079688
Status : Not Answered
Chosen Option : --

Comprehension:

निम्नलिखित गद्यांश में से कुछ शब्द हटा दिए गए हैं। दिए गए विकल्पों की सहायता से रिक्त स्थानों की पूर्ति कीजिए। प्रत्येक संख्या के लिए उपयुक्त विकल्प का चयन कीजिए।
सर्दियों में लूसी ने दो बच्चों 1. _____ जन्म दिया, किंतु उनमें से 2. _____ तो शीत के कारण मर गया और दूसरा उस ठिठुराने वाले परिवेश से जूझने लगा। चार-3. _____ दिन के 4. _____ को छोड़कर लूसी फिर दुकान 5. _____ आने-जाने लगी थी।

SubQuestion No : 19

Q.19 रिक्त स्थान 4 की पूर्ति के लिए सर्वाधिक उपयुक्त विकल्प का चयन कीजिए।

- Ans
- 1. चूजे
 - 2. आदमी
 - 3. दोस्त
 - 4. बच्चे

Question ID : 26433079689

Status : Not Answered

Chosen Option : --

Comprehension:

निम्नलिखित गद्यांश में से कुछ शब्द हटा दिए गए हैं। दिए गए विकल्पों की सहायता से रिक्त स्थानों की पूर्ति कीजिए। प्रत्येक संख्या के लिए उपयुक्त विकल्प का चयन कीजिए।
सर्दियों में लूसी ने दो बच्चों 1. _____ जन्म दिया, किंतु उनमें से 2. _____ तो शीत के कारण मर गया और दूसरा उस ठिठुराने वाले परिवेश से जूझने लगा। चार-3. _____ दिन के 4. _____ को छोड़कर लूसी फिर दुकान 5. _____ आने-जाने लगी थी।

SubQuestion No : 20

Q.20 रिक्त स्थान 5 की पूर्ति के लिए सर्वाधिक उपयुक्त विकल्प का चयन कीजिए।

- Ans
- 1. सब
 - 2. भर
 - 3. तक
 - 4. के सामने

Question ID : 26433079690

Status : Not Answered

Chosen Option : --