

Constable GD in CAPFs SSF Rifleman GD in Assam Rifles and Sepoy in NCB Examination 2022

Roll Number	www.govtjobsalert.in
Candidate Name	www.govtjobsalert.in
Venue Name	iON Digital Zone iDZ Gegal Industrial Area
Exam Date	16/01/2023
Exam Time	5:15 PM - 6:15 PM
Subject	Constable GD Examination 2022

Section : Part-A-General Intelligence and Reasoning

Q.1 Select the number from among the given options that can replace the question mark (?) in the following series.
784, 568, 443, ?, 352

- Ans
- 1. 382
 - 2. 361
 - 3. 427
 - 4. 379

Question ID : 26433074535
Status : Answered
Chosen Option : 4

Q.2 X and Z are sisters. Y is the brother of Z. S is the daughter of Z. T is the brother of S. T is married to U. How is Y related to S?

- Ans
- 1. Father
 - 2. Mother's brother
 - 3. Brother
 - 4. Mother's father

Question ID : 26433074600
Status : Answered
Chosen Option : 2

Q.3 Which of the following numbers will replace the question mark (?) in the given series?
8, 17, 36, ?, 154

- Ans
- 1. 57
 - 2. 86
 - 3. 46
 - 4. 75

Question ID : 26433076737
Status : Answered
Chosen Option : 4

Q.4 Three different positions of the same dice are shown. Find the number on the face opposite the face showing '3'.

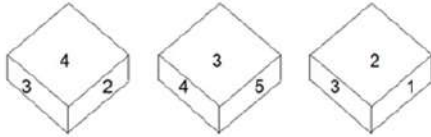


Figure 1 Figure 2 Figure 3

- Ans**
- 1. 4
 - 2. 2
 - 3. 5
 - 4. 6

Question ID : 26433089453
 Status : Answered
 Chosen Option : 4

Q.5 Select the correct mirror image of the given figure when the mirror is placed at MN as shown below.



- Ans**
- 1. YmoIloRt2s
 - 2. YmoIorT2s
 - 3. YmoIorT2s
 - 4. YmoIorT2s

Question ID : 26433085561
 Status : Answered
 Chosen Option : 2

Q.6 Which option represents the correct order of the given words as they would appear in the English dictionary?

- 1 dream
- 2 drown
- 3 drone
- 4 dropped
- 5 drama

- Ans**
- 1. 5,2,3,1,4
 - 2. 5,3,1,4,2
 - 3. 5,4,3,1,2
 - 4. 5,1,3,4,2

Question ID : 26433069289
 Status : Answered
 Chosen Option : 4

Q.7 Which of the following letter-clusters will replace the question mark (?) in the given series?

YSEA, WQGC, UOIE, ?, QKMI

- Ans
- 1. SMLH
 - 2. RMLG
 - 3. SMKG
 - 4. RMLH

Question ID : 26433076439
Status : Answered
Chosen Option : 3

Q.8 Three statements are given followed by two conclusions. Assuming the statements to be true, even if they seem to be at variance with commonly known facts, decide which of the conclusions logically follow(s) from the statements.

Statements:

Some trains are buses.

No bus is a car.

Some cars are bikes.

Conclusions:

1. Some bikes are cars.

2. Some bikes are trains.

- Ans
- 1. Neither conclusion 1 nor 2 follows.
 - 2. Only conclusion 2 follows.
 - 3. Both conclusions 1 and 2 follow.
 - 4. Only conclusion 1 follows.

Question ID : 26433089423
Status : Answered
Chosen Option : 4

Q.9 Which two numbers (not digits), from the given options, should be interchanged to make the given equation correct?

$$158 - 64 \times 6 \div 2 = 4 \times 15 \div 3$$

- Ans
- 1. 15 and 158
 - 2. 64 and 6
 - 3. 64 and 4
 - 4. 6 and 4

Question ID : 26433082479
Status : Answered
Chosen Option : 4

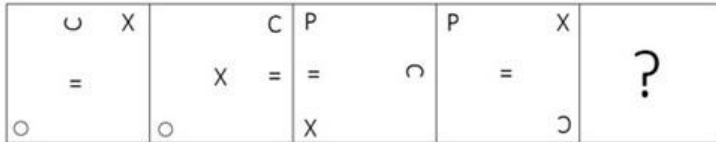
Q.10 Which letter-cluster will replace the question mark (?) to complete the given series?

ABDG, DEGJ, ?, JKMP, MNPS

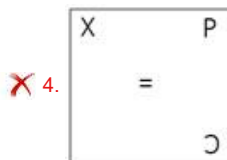
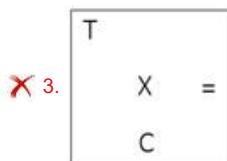
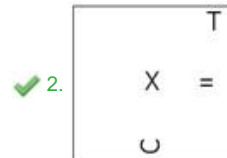

- Ans
- 1. FHIK
 - 2. GHKM
 - 3. GHJM
 - 4. FGIL

Question ID : 26433067717
Status : Answered
Chosen Option : 3

Q.11 Which figure should replace the question mark (?) if the series were to be continued?



Ans



Question ID : 26433076641
 Status : Answered
 Chosen Option : 2

Q.12 Six students are sitting around a circular table facing the centre. F is an immediate neighbour of A. D sits second to the right of E. B is an immediate neighbour of E and sits second to the right of C. F sits second to the right of D. A is not an immediate neighbour of E. Who is sitting between D and E?

- Ans
- ✗ 1. C
 - ✗ 2. F
 - ✓ 3. B
 - ✗ 4. A

Question ID : 26433092766
 Status : Not Answered
 Chosen Option : --

Q.13 Five people A, B, C, D, and E are sitting in a straight row facing the North. A is sitting to the immediate left of C. Only C is sitting between A and E. B is sitting to the right of E. D is sitting to the right of B. Who is sitting at the extreme left of the row?

- Ans
- ✗ 1. D
 - ✗ 2. C
 - ✓ 3. A
 - ✗ 4. B

Question ID : 26433074621
 Status : Not Answered
 Chosen Option : --

Q.14 Which two signs should be interchanged to make the below equation mathematically correct?

$$72 - 36 \times 4 \div 6 + 24 = 42$$

- Ans 1. ÷ and x
 2. + and -
 3. - and ÷
 4. × and +

Question ID : 264330117535
Status : Answered
Chosen Option : 1

Q.15 Select the option that is related to the third word in the same way as the second word is related to the first word. (The words must be considered as meaningful English words and must not be related to each other based on the number of letters/number of consonants/vowels in the word.)

Resistance : Ohm :: Energy : ?

- Ans 1. Volt
 2. Strength
 3. Watt
 4. Joule

Question ID : 26433067370
Status : Answered
Chosen Option : 4

Q.16 Select the option that is related to the fifth letter-cluster in the same way as the second letter-cluster is related to the first letter-cluster and the fourth letter-cluster is related to the third letter-cluster.

LEAP : KFZQ :: CLOS : BMNT :: EJOT : ?

- Ans 1. KCNS
 2. DKNU
 3. KDZO
 4. DKNS

Question ID : 26433080462
Status : Answered
Chosen Option : 2

Q.17 In a certain code language, 'STORK' is written as 'URROO' and 'ASHES' is written as 'CQKBW'. How will 'BUNKE' be written in that language?

- Ans 1. DRPGI
 2. DSPHG
 3. DSQGI
 4. DSQHI

Question ID : 26433069607
Status : Answered
Chosen Option : 4

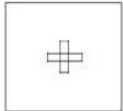
Q.18 Select the option that is related to the fifth number in the same way as the second number is related to the first number and the fourth number is related to the third number.

46 : 11 :: 30 : 7 :: 50 : ?

- Ans
- 1. 8
 - 2. 13
 - 3. 12
 - 4. 9

Question ID : 26433069417
Status : Answered
Chosen Option : 3

Q.19 Select the option figure in which the question figure is embedded(Rotation is not allowed).



Ans

- 1.
- 2.
- 3.
- 4.

Question ID : 26433070206
Status : Answered
Chosen Option : 2

Q.20 In a code language, 'LEAF' is written as 'EZDK' and 'PLANT' is written as 'SMZKO', how will 'FLOWER' be written in that language?

- Ans
- 1. QDVNKD
 - 2. QDVNKE
 - 3. QDWNKE
 - 4. EDVNKE

Question ID : 26433079392
Status : Answered
Chosen Option : 4

Q.1 In India, Inter-religion marriages are performed under this Act:

- Ans**
- 1. Indian Succession Act
 - 2. Hindu Marriage and Adoption Act
 - 3. Civil Procedure Code
 - 4. Special Marriage Act

Question ID : 264330116223
Status : Answered
Chosen Option : 4

Q.2 The green revolution in India started in the late 1960s in _____.

- Ans**
- 1. Maharashtra
 - 2. Punjab
 - 3. Uttarakhand
 - 4. Andhra Pradesh

Question ID : 264330116157
Status : Answered
Chosen Option : 2

Q.3 What are the industrially developed urban centers usually surrounded by?

- Ans**
- 1. agricultural urban hinterland
 - 2. agricultural rural hinterland
 - 3. Coastal hinterland
 - 4. seaport hinterland

Question ID : 264330115569
Status : Answered
Chosen Option : 1

Q.4 What is the term used for people who regularly move in and out of poverty line?

- Ans**
- 1. Occasionally poor
 - 2. Usually Poor
 - 3. Chronic poor
 - 4. Churning poor

Question ID : 264330116077
Status : Answered
Chosen Option : 1

Q.5 The _____ allocates ranks and portfolios to the ministers in the states.

- Ans**
- 1. speaker
 - 2. governor
 - 3. chief minister
 - 4. head of the political party

Question ID : 26433086673
Status : Answered
Chosen Option : 3

Q.6 Identify a dwarf planet from the following list.

- Ans 1. Neptune
 2. Mercury
 3. Mars
 4. Pluto

Question ID : 26433087885
Status : Answered
Chosen Option : 4

Q.7 _____ Fundamental duties are listed in Article _____ of Part IV A of the Indian Constitution.

- Ans 1. 11; 51A
 2. 11; 52A
 3. 13; 52A
 4. 13; 51A

Question ID : 26433089910
Status : Answered
Chosen Option : 1

Q.8 2020 Summer Paralympics was hosted by _____.

- Ans 1. Korea
 2. Russia
 3. Japan
 4. France

Question ID : 264330115915
Status : Not Answered
Chosen Option : --

Q.9 The term "LBW" is related to which sport?

- Ans 1. Cricket
 2. Volleyball
 3. Football
 4. Badminton

Question ID : 264330116291
Status : Answered
Chosen Option : 1

Q.10 The person or entity writing the cheque is known as the payer or _____.

- Ans 1. drawee
 2. producer
 3. drawer
 4. seller

Question ID : 264330115322
Status : Answered
Chosen Option : 1

Q.11 Sher Khan defeated Humayun at Chausa in _____.

Ans 1. 1539

2. 1537

3. 1541

4. 1545

Question ID : 264330115703
Status : Answered
Chosen Option : 1

Q.12 Which of the following was a provincial capital under the rule of Ashoka?

I. Taxila

II. Ujjain

Ans 1. Neither I nor II

2. Only II

3. Both I and II

4. Only I

Question ID : 26433085216
Status : Not Answered
Chosen Option : --

Q.13 Who has been appointed as the 16th Attorney General of India in September 2022?

Ans 1. Mukul Rohatgi

2. Goolam Essaji Vahanvati

3. R Venkataramani

4. Kotayan Katankot Venugopal

Question ID : 264330115025
Status : Answered
Chosen Option : 3

Q.14 Who was the Presidential candidate of India by opposition parties in June 2022?

Ans 1. Sonia Gandhi

2. Jairam Ramesh

3. Yashwant Sinha

4. Draupadi Murmu

Question ID : 264330114920
Status : Answered
Chosen Option : 3

Q.15 Which of the following organization governs the international trade?

Ans 1. International Labor Organization

2. United Nations Educational, Scientific and Cultural Organization

3. Securities and Exchange Board of India

4. World Trade Organization

Question ID : 264330115384
Status : Answered
Chosen Option : 4

Q.16 A specific place of an organism in the food chain is called as _____.

- Ans
- 1. standing crop
 - 2. biomass
 - 3. consumer
 - 4. trophic level

Question ID : 264330115253
Status : Answered
Chosen Option : 4

Q.17 _____ is the chemical formula of ethanoic Acid.

- Ans
- 1. CH_2COOH
 - 2. CH_2OH
 - 3. CH_3COOH
 - 4. CH_3OH

Question ID : 264330115155
Status : Answered
Chosen Option : 1

Q.18 Makar Sankranti marks the beginning of 'Uttarayana' and is celebrated on _____.

- Ans
- 1. 20th January
 - 2. 16th March
 - 3. 14th January
 - 4. 15th February

Question ID : 264330115096
Status : Answered
Chosen Option : 3

Q.19 Which of the following dance types is NOT associated with Jharkhand?

- Ans
- 1. Agni
 - 2. Phagua
 - 3. Mardana Jhumar
 - 4. Lavani

Question ID : 26433071688
Status : Answered
Chosen Option : 4

Q.20 Which among the following Indian Classical Dancer has been awarded Sangeet Natak Akademi Fellow (Akademi Ratna)?

- Ans
- 1. Tankeswar Hazarika Borbayan
 - 2. Sarodi Saikia
 - 3. Sonal Mansingh
 - 4. Jogen Dutta Bayan

Question ID : 264330115877
Status : Not Answered
Chosen Option : --

Q.1 The ratio of the weight of Ram, Shyam and Mohan is 7 : 8 : 5 respectively. The average weight of Ram, Shyam and Mohan is 80 kg. What is the average weight of Ram and Shyam ?

- Ans
- 1. 95 kg
 - 2. 80 kg
 - 3. 90 kg
 - 4. 85 kg

Question ID : 26433075526
Status : Answered
Chosen Option : 3

Q.2 In a 500 m race, P runs at 2 kmph. P gives Q a head start of 20 m and still beats him by 60 seconds. Find the speed of Q.

- Ans
- 1. 1.6 kmph
 - 2. 1.8 kmph
 - 3. 1.9 kmph
 - 4. 1.5 kmph

Question ID : 26433080243
Status : Answered
Chosen Option : 2

Q.3 A batsman scored 96 runs which included 2 boundaries and 6 sixes. What percent of his total score did he make by running between the wickets?

- Ans
- 1. 52.68 percent
 - 2. 54.16 percent
 - 3. 64.18 percent
 - 4. 72.16 percent

Question ID : 264330116827
Status : Answered
Chosen Option : 2

Q.4 The cost of painting a solid cone at 30 paise per cm^2 is ₹660. Find the radius of the cone if its slant height is 15 cm. (Use $\pi = \frac{22}{7}$)

- Ans
- 1. 50 cm
 - 2. 40 cm
 - 3. 30 cm
 - 4. 20 cm

Question ID : 26433080071
Status : Answered
Chosen Option : 4

Q.5 Manoj invests Rs.57,695, which is 11% of his annual income, in mutual funds. What is his monthly income? (Rounded up to 2 decimal places)

- Ans
- 1. Rs.43,708.33
 - 2. Rs.63,441.99
 - 3. Rs.77,266.54
 - 4. Rs.54,329.89

Question ID : 26433082711
Status : Answered
Chosen Option : 1

Q.6 Find the value of $60 \div 5 \times \left(\frac{9}{8} \text{ of } \frac{4}{3} \div \frac{3}{4} \text{ of } \frac{2}{3}\right)$.

- Ans
- 1. 48
 - 2. 24
 - 3. 12
 - 4. 36

Question ID : 26433074976
Status : Answered
Chosen Option : 4

Q.7 If 9 persons can do a job in 18 days, then 18 persons with twice the efficiency can do the same job in:

- Ans
- 1. $\frac{9}{2}$ days
 - 2. $\frac{5}{2}$ days
 - 3. $\frac{11}{2}$ days
 - 4. $\frac{7}{2}$ days

Question ID : 26433080137
Status : Answered
Chosen Option : 1

Q.8 A sphere of radius 6 m is cut into two equal halves. Find the volume of each hemisphere so formed.

(Use $\pi = \frac{22}{7}$)

- Ans
- 1. 331.14 m³
 - 2. 452.57 m³
 - 3. 562.18 m³
 - 4. 531.11 m³

Question ID : 26433080066
Status : Answered
Chosen Option : 2

Q.9 The marked price of a toy is Rs.1,600. If the shopkeeper declares a discount of 10% and then 10% cash discount, then what is the selling price of the toy?

- Ans
- 1. Rs.1,096
 - 2. Rs.1,296
 - 3. Rs.1,240
 - 4. Rs.1,088

Question ID : 26433075661
Status : Answered
Chosen Option : 2

Q.10 The valuation of a house depreciates at the rate of 10% in a year, compared to its value at the beginning of that year. If the current value of the house is ₹40,00,000, then what will be the value of house after three years?

- Ans 1. ₹29,16,000
 2. ₹28,00,000
 3. ₹29,06,000
 4. ₹29,26,000

Question ID : 26433075885
Status : Answered
Chosen Option : 1

Q.11 Reeta says that she sells her goods at the cost price. If she uses 80 gram weight instead of 100 gram, then what is her profit percentage?

- Ans 1. 10%
 2. 25%
 3. 15%
 4. 20%

Question ID : 26433075654
Status : Answered
Chosen Option : 2

Q.12 Find the fourth proportional of s^3 , s^2t , and st^2 .

- Ans 1. t^3
 2. st
 3. t^2
 4. s^2t^2

Question ID : 26433080329
Status : Answered
Chosen Option : 1

Q.13 Suman and Arun together can finish a piece of work in 96 days, Arun and Rahul in 48 days, and Rahul and Suman in 80 days, then Rahul, Suman, and Arun jointly can finish the same work in approximately how many days?

- Ans 1. 55 days
 2. 44 days
 3. 54 days
 4. 46 days

Question ID : 264330116907
Status : Answered
Chosen Option : 4

Q.14 Regularly, a shop offers a 12% discount on the marked price. During festive seasons, it offers a successive discount of 10% and the owner still earns a profit of 5%. What would have been the profit in percentage if only 4% successive discount is offered with regular discount?

- Ans
- 1. 11%
 - 2. 12.5%
 - 3. 11.5%
 - 4. 12%

Question ID : 26433085449
Status : Not Answered
Chosen Option : --

Q.15 The average weight of 10 persons increases by 7.9 kg when a new person replaces one of them weighing 20 kg. What is the weight of the new person?

- Ans
- 1. 170 kg
 - 2. 86 kg
 - 3. 99 kg
 - 4. 72 kg

Question ID : 26433079996
Status : Answered
Chosen Option : 3

Q.16 Anand can row 8 km/h in still water. It takes him thrice as long to row up as to row down the stream. Find the speed of the stream.

- Ans
- 1. 4 km/h
 - 2. 3 km/h
 - 3. 4.5 km/h
 - 4. 3.5 km/h

Question ID : 26433080197
Status : Answered
Chosen Option : 1

Q.17 What is the third proportional of $5x^2$ and $3xy$?

- Ans
- 1. $\frac{(9y^2)}{5}$
 - 2. $\frac{(9x^2y^2)}{5}$
 - 3. $\frac{(9xy)}{5x}$
 - 4. $\frac{(9x^2)}{5}$

Question ID : 26433076226
Status : Answered
Chosen Option : 1

Q.18 On a certain principal, the compound interest, compounded annually, for the second year at 20% per annum is Rs.1,300. The principal is (consider nearest integral value):

- Ans
- 1. Rs.5,600
 - 2. Rs.5,400
 - 3. Rs.5,416
 - 4. Rs.4,416

Question ID : 26433075390
Status : Not Answered
Chosen Option : --

Q.19 Two cars start taking laps of a circular track of 3.6 kms at the same time of 12:00 PM. They start from the same point and they are moving in the same direction. Their speeds are 72 kmph and 90 kmph respectively. At what time will the cars meet again?

- Ans
- 1. 12:12 PM
 - 2. 12:06 PM
 - 3. 12:03 PM
 - 4. 12:09 PM

Question ID : 264330116637
Status : Not Answered
Chosen Option : --

Q.20 A shopkeeper sells oil at ₹200 per litre, which he purchased for ₹160 per litre, but he gives only 800 ml of oil instead of 1 litre while selling. Find the actual percentage of profit.

- Ans
- 1. 56.25%
 - 2. 54.25%
 - 3. 52.25%
 - 4. 58.25%

Question ID : 26433080108
Status : Answered
Chosen Option : 1

Section : Part-D-English

Q.1 Select the most appropriate meaning of the underlined idiom in the following sentence.

The local police were working hand in glove with Federal Bureau of Investigation to find the reasons behind the murder.

- Ans
- 1. To have liking for each other
 - 2. To be in close association
 - 3. In keeping with
 - 4. To progress at equal rate

Question ID : 26433073877
Status : Answered
Chosen Option : 2

Q.2 Select the most appropriate spelling that can correctly substitute the misspelt underlined segment in the given sentence.

Who will adjudicate on this matter?

- Ans**
- 1. addjudicate
 - 2. adjjudicate
 - 3. adjudccate
 - 4. adjudicate

Question ID : 26433071938
Status : Answered
Chosen Option : 4

Q.3 Select the most appropriate synonym of the given word.

Timid

- Ans**
- 1. Fearful
 - 2. Bold
 - 3. Adventurous
 - 4. Forthcoming

Question ID : 26433073686
Status : Answered
Chosen Option : 1

Q.4 Select the most appropriate ANTONYM of the given word.

Disdain

- Ans**
- 1. Antipathy
 - 2. Scorn
 - 3. Dislike
 - 4. Respect

Question ID : 26433072663
Status : Answered
Chosen Option : 4

Q.5 Select the most appropriate synonym of the underlined word.

The price of fuel is declining as the elections are approaching.

- Ans**
- 1. Extending
 - 2. Exalting
 - 3. Increasing
 - 4. Decreasing

Question ID : 26433084684
Status : Answered
Chosen Option : 4

Q.6 The following sentence has been divided into parts. One of them may contain an error. Select the part that contains the error from the given options. If you don't find any error, mark 'No error' as your answer.

The blind man can perform / wonderfully well even though / he was old now.

- Ans** 1. he was old now
 2. No error
 3. The blind man can perform
 4. wonderfully well even though

Question ID : 26433073764
Status : Answered
Chosen Option : 1

Q.7 Select the most appropriate meaning of the given idiom.

Bounce something off someone

- Ans** 1. Distribute materials to the poor and the needy
 2. Discuss ideas with someone to get their views
 3. Select members for something without their consent
 4. Throw stones at others without any reason

Question ID : 26433073489
Status : Answered
Chosen Option : 3

Q.8 Select the most appropriate option that can substitute the underlined segment in the given sentence.

An unexpected power failure which happened besides the recording disheartened all of them.

- Ans** 1. happened during the recording
 2. happened until the recording
 3. happened among the recording
 4. happen between the recording

Question ID : 264330100990
Status : Answered
Chosen Option : 1

Q.9 Identify from the following options the word which is OPPOSITE in meaning to the given word.

Valiant

- Ans** 1. Cowardly
 2. Similar
 3. Heroic
 4. Dull

Question ID : 26433088817
Status : Answered
Chosen Option : 1

Q.10 Select the most appropriate synonym of the word given in brackets to fill in the blank.

The soldiers exhibited their _____ (courage) during the war.

- Ans
- 1. anchor
 - 2. valour
 - 3. candour
 - 4. timidity

Question ID : 26433089075
Status : Answered
Chosen Option : 2

Q.11 Select the most appropriate option to fill in the blank.

He fell unconscious due to a snake bite, so the doctor quickly gave him _____.

- Ans
- 1. the antibiotic
 - 2. the antigen
 - 3. the antidote
 - 4. the antiquary

Question ID : 26433084653
Status : Answered
Chosen Option : 3

Q.12 The sentence given below has one misspelt word. Spot the INCORRECTLY spelt word and select its correct spelling.

He picked up his lugage and crossed the road.

- Ans
- 1. Laggage
 - 2. Luggage
 - 3. Lugaze
 - 4. Lagage

Question ID : 26433073556
Status : Answered
Chosen Option : 2

Q.13 Select the correct pair of homonyms to fill in the blanks.

The Prime Minister _____ the nation asking for the _____ of the traitors.

- Ans
- 1. meant, mean
 - 2. address, addressed
 - 3. mean, meant
 - 4. addressed, address

Question ID : 26433061050
Status : Answered
Chosen Option : 4

Q.14 Select the most appropriate homonym to fill in the blank.

I think he is the _____ person for this job.

- Ans
- 1. write
 - 2. rite
 - 3. right
 - 4. wright

Question ID : 26433060049
Status : Answered
Chosen Option : 3

Q.15 Select the word segment that substitutes (replaces) the bracketed word segment correctly and completes the sentence meaningfully.

People in temperate (country pay little attention) to mangroves.

- Ans
- 1. country pays little attention
 - 2. countries pays little attention
 - 3. countries pay little attention
 - 4. country paid little attention

Question ID : 26433088960

Status : Answered

Chosen Option : 3

Comprehension:

In the following passage, some words have been deleted. Read the passage carefully and select the most appropriate option to fill in each blank.

While stone sculptures and reliefs (1)_____ the exterior of great religious monuments for many centuries, bronze sculptures of the gods were probably a later development. In southern India, kings and queens of the Chola dynasty were well- known patrons of great Hindu (2)_____. Marvellous bronze sculptures were worshipped in the temple context, and carried through the streets in (3)_____ during religious festivals. Such great temple festivals, involving massive carts that transport divine images, still (4)_____ today throughout India, and major celebrations may draw hundreds of thousands of participants. Such images were popular during the Chola dynasty because people increasingly wanted a more intimate, emotional relationship with the gods. These ideas were (5)_____ to the religious movement known as 'Bhakti', a personal and emotional experience of divinity.

SubQuestion No : 16

Q.16 Select the most appropriate option to fill in blank number 1.

- Ans
- 1. monitored
 - 2. overshadowed
 - 3. ornamented
 - 4. ruined

Question ID : 26433072736

Status : Answered

Chosen Option : 3

Comprehension:

In the following passage, some words have been deleted. Read the passage carefully and select the most appropriate option to fill in each blank.

While stone sculptures and reliefs (1)_____ the exterior of great religious monuments for many centuries, bronze sculptures of the gods were probably a later development. In southern India, kings and queens of the Chola dynasty were well- known patrons of great Hindu (2)_____. Marvellous bronze sculptures were worshipped in the temple context, and carried through the streets in (3)_____ during religious festivals. Such great temple festivals, involving massive carts that transport divine images, still (4)_____ today throughout India, and major celebrations may draw hundreds of thousands of participants. Such images were popular during the Chola dynasty because people increasingly wanted a more intimate, emotional relationship with the gods. These ideas were (5)_____ to the religious movement known as 'Bhakti', a personal and emotional experience of divinity.

SubQuestion No : 17

Q.17 Select the most appropriate option to fill in blank number 2.

- Ans
- 1. regulations
 - 2. saints
 - 3. states
 - 4. temples

Question ID : 26433072737

Status : Answered

Chosen Option : 4

Comprehension:

In the following passage, some words have been deleted. Read the passage carefully and select the most appropriate option to fill in each blank.

While stone sculptures and reliefs (1)_____ the exterior of great religious monuments for many centuries, bronze sculptures of the gods were probably a later development. In southern India, kings and queens of the Chola dynasty were well- known patrons of great Hindu (2)_____. Marvellous bronze sculptures were worshipped in the temple context, and carried through the streets in (3)_____ during religious festivals. Such great temple festivals, involving massive carts that transport divine images, still (4)_____ today throughout India, and major celebrations may draw hundreds of thousands of participants. Such images were popular during the Chola dynasty because people increasingly wanted a more intimate, emotional relationship with the gods. These ideas were (5)_____ to the religious movement known as 'Bhakti', a personal and emotional experience of divinity.

SubQuestion No : 18

Q.18 Select the most appropriate option to fill in blank number 3.

- Ans**
- 1. vessels
 - 2. competitions
 - 3. patterns
 - 4. processions

Question ID : 26433072738
Status : Answered
Chosen Option : 4

Comprehension:

In the following passage, some words have been deleted. Read the passage carefully and select the most appropriate option to fill in each blank.

While stone sculptures and reliefs (1)_____ the exterior of great religious monuments for many centuries, bronze sculptures of the gods were probably a later development. In southern India, kings and queens of the Chola dynasty were well- known patrons of great Hindu (2)_____. Marvellous bronze sculptures were worshipped in the temple context, and carried through the streets in (3)_____ during religious festivals. Such great temple festivals, involving massive carts that transport divine images, still (4)_____ today throughout India, and major celebrations may draw hundreds of thousands of participants. Such images were popular during the Chola dynasty because people increasingly wanted a more intimate, emotional relationship with the gods. These ideas were (5)_____ to the religious movement known as 'Bhakti', a personal and emotional experience of divinity.

SubQuestion No : 19

Q.19 Select the most appropriate option to fill in blank number 4.

- Ans**
- 1. occur
 - 2. accede
 - 3. herald
 - 4. inspire

Question ID : 26433072739
Status : Answered
Chosen Option : 1

Comprehension:

In the following passage, some words have been deleted. Read the passage carefully and select the most appropriate option to fill in each blank.

While stone sculptures and reliefs (1)_____ the exterior of great religious monuments for many centuries, bronze sculptures of the gods were probably a later development. In southern India, kings and queens of the Chola dynasty were well- known patrons of great Hindu (2)_____. Marvellous bronze sculptures were worshipped in the temple context, and carried through the streets in (3)_____ during religious festivals. Such great temple festivals, involving massive carts that transport divine images, still (4)_____ today throughout India, and major celebrations may draw hundreds of thousands of participants. Such images were popular during the Chola dynasty because people increasingly wanted a more intimate, emotional relationship with the gods. These ideas were (5)_____ to the religious movement known as 'Bhakti', a personal and emotional experience of divinity.

SubQuestion No : 20

Q.20 Select the most appropriate option to fill in blank number 5.

- Ans**
- 1. analogous
 - 2. foreign
 - 3. contrary
 - 4. central

Question ID : 26433072740
Status : Answered
Chosen Option : 1

Section : Part-D-Hindi

Q.1 निम्नलिखित में से कौन सा एक अकर्मक क्रिया का उदाहरण नहीं है?

- Ans**
- 1. सीता खाना बनाती है।
 - 2. सोना चमकता है।
 - 3. हनसा रोती है।
 - 4. अशोक हंसता है।

Question ID : 26433085042
Status : Not Answered
Chosen Option : --

Q.2 निम्नलिखित विकल्पों में से 'ऐसे स्थान का वास जहाँ कोई पता न पा सके' वाक्यांश के लिए एक सार्थक शब्द क्या होगा ?

- Ans**
- 1. निकटवास
 - 2. निवास
 - 3. दूरस्थ
 - 4. अज्ञातवास

Question ID : 26433062533
Status : Not Answered
Chosen Option : --

Q.3 निम्नलिखित विकल्पों में से किस एक वाक्य में विशेषण का उचित प्रयोग किया गया है?

- Ans**
- 1. मोहन गाँव में रहता है।
 - 2. रमेश घर में है।
 - 3. उसका घोड़ा सुन्दर है।
 - 4. सोहन प्रयागराज में है।

Question ID : 26433062963
Status : Not Answered
Chosen Option : --

Q.4 'उपकरण' के एकार्थी शब्द चयन कर निम्न वाक्य वाक्य में रिक्त स्थान की पूर्ति कीजिए।
आप सारे _____ को एकत्रित कीजिए।

- Ans
- 1. वस्तुओं
 - 2. उपादानों
 - 3. साधनाओं
 - 4. उदाहरणों

Question ID : 26433063082
Status : Not Answered
Chosen Option : --

Q.5 निम्नलिखित विकल्पों में से 'कान भरना' मुहावरे का अर्थ क्या है?

- Ans
- 1. बुराई करना
 - 2. सम्मान करना
 - 3. भलाई करना
 - 4. निरादर करना

Question ID : 26433062550
Status : Not Answered
Chosen Option : --

Q.6 निम्नलिखित विकल्पों में से 'जिसका एक-एक शब्द मिलता हो' वाक्यांश के लिए एक सार्थक शब्द कौन सा है?

- Ans
- 1. समदर्शी
 - 2. अथाह
 - 3. शब्दशः
 - 4. सहगान

Question ID : 264330109528
Status : Not Answered
Chosen Option : --

Q.7 'जंगल का राजा शेर होता है।' वाक्य में प्रयुक्त 'जंगल' शब्द का पर्यायवाची शब्द नहीं है-

- Ans
- 1. अयस
 - 2. विपिन
 - 3. कानन
 - 4. कांतार

Question ID : 26433069740
Status : Not Answered
Chosen Option : --

Q.8 निम्नलिखित वाक्य में रेखांकित शब्द का, विकल्पों में दिए गये शब्दों में से कौन-सा शब्द पर्यायवाची नहीं है?
मेरे जीवन का यही एकमात्र 'लक्ष्य' है।

- Ans
- 1. भवन
 - 2. उद्देश
 - 3. मंजिल
 - 4. निशाना

Question ID : 26433085069
Status : Not Answered
Chosen Option : --

Q.9 एक दिन के उपवास के बाद मोहन के पेट में _____ कूदने लगे।
उपरोक्त वाक्य में रिक्त स्थान की पूर्ति उचित शब्द द्वारा कीजिए।

- Ans 1. मेढ़क
 2. चूहे
 3. कुत्ते
 4. बिल्ली

Question ID : 26433062617
Status : Not Answered
Chosen Option : --

Q.10 निम्नलिखित में से शुद्ध वाक्य है-

- Ans 1. कई खिलाड़ी वहां जम हो गए।
 2. कई खिड़की वहां जमा हो गए।
 3. कई खिलाड़ी वहां जमा हो गए।
 4. कई खिलाड़ी वह जमा हो गए।

Question ID : 26433066841
Status : Not Answered
Chosen Option : --

Q.11 नीचे दिए गए वाक्य के शुद्ध रूप का चयन विकल्पों में से कीजिए।
वह चारपाई पर बिछोना बिछा दिया।

- Ans 1. वह चारपाई में बिछोना बिछा दी।
 2. उसने चारपाई पर बिछौना बिछा दिया।
 3. उसने चारपाई में बिछोना बिछाए।
 4. वह चारपाई में बिछोना बिछा दिया।

Question ID : 26433063071
Status : Not Answered
Chosen Option : --

Q.12 राजपथ से झाकियाँ वापस लौट गयीं।
इस गलत वाक्य के बदले सही वाक्य का चयन कीजिए।

- Ans 1. राजपथ से झाकियाँ लौट गयीं।
 2. राजपथ से झाकियाँ सारी फूट पड़ी।
 3. राजपथ से एक झाकियाँ निकल पड़ी।
 4. राजपथ से झाकियाँ वापस लौट गईं।

Question ID : 26433062695
Status : Not Answered
Chosen Option : --

Q.13 निम्नलिखित वाक्य में रेखांकित खंड के स्थान पर प्रयुक्त होने वाले सबसे उपयुक्त विकल्प का चयन कीजिए।
आपकी घड़ी में कितनी बजे हैं?

- Ans 1. कितने
 2. किते
 3. कब
 4. कैसे

Question ID : 26433079573
Status : Not Answered
Chosen Option : --

Q.14 'आदि से अंत तक' वाक्यांश के लिए एक शब्द क्या होगा?

- Ans 1. अभ्याख्यान
 2. आपादमस्तक
 3. प्रारम्भिक
 4. आद्योपान्त

Question ID : 26433070050
Status : Not Answered
Chosen Option : --

Q.15 निम्नलिखित वाक्य में रेखांकित शब्द के विलोम शब्द का प्रयोग करके रिक्त स्थान की पूर्ति कीजिए।
ऊपर से सोने का स्वभाव स्थिर है जबकि वास्तव में वह _____ है।

- Ans 1. अचल
 2. जागरण
 3. सूक्ष्म
 4. चंचल

Question ID : 26433091347
Status : Not Answered
Chosen Option : --

Comprehension:

निम्नलिखित गद्यांश में कुछ शब्दों को हटा दिया गया है। दिए गए विकल्पों की सहायता से रिक्त स्थानों की पूर्ति कीजिए। प्रत्येक संख्या के लिए सबसे उपयुक्त विकल्प का चयन कीजिए।
बुद्धिजीवी से तात्पर्य उन व्यक्तियों से है जो 1. _____ का अधिक उपयोग करके जीवन चलाते हैं अर्थात् 2. _____ अर्जित करते हैं। समाज में मुख्यतः दो प्रकार के व्यक्ति हैं- एक वे जो अपने जीवन में 3. _____ श्रम अधिक करते हैं और दूसरे वे जो शारीरिक श्रम की अपेक्षा 4. _____ बल से काम करते हैं। समाज के लिए दोनों की 5. _____ भूमिका है।

SubQuestion No : 16

Q.16 रिक्त स्थान 1 की पूर्ति के लिए सबसे उपयुक्त विकल्प का चयन कीजिए।

- Ans 1. बल
 2. बुद्धि
 3. दिखावे
 4. दृष्टि

Question ID : 264330111017
Status : Not Answered
Chosen Option : --

Comprehension:

निम्नलिखित गद्यांश में कुछ शब्दों को हटा दिया गया है। दिए गए विकल्पों की सहायता से रिक्त स्थानों की पूर्ति कीजिए। प्रत्येक संख्या के लिए सबसे उपयुक्त विकल्प का चयन कीजिए।
बुद्धिजीवी से तात्पर्य उन व्यक्तियों से है जो 1. _____ का अधिक उपयोग करके जीवन चलाते हैं अर्थात् 2. _____ अर्जित करते हैं। समाज में मुख्यतः दो प्रकार के व्यक्ति हैं- एक वे जो अपने जीवन में 3. _____ श्रम अधिक करते हैं और दूसरे वे जो शारीरिक श्रम की अपेक्षा 4. _____ बल से काम करते हैं। समाज के लिए दोनों की 5. _____ भूमिका है।

SubQuestion No : 17

Q.17 रिक्त स्थान 2 की पूर्ति के लिए सबसे उपयुक्त विकल्प का चयन कीजिए।

- Ans 1. श्रम
 2. जीविका
 3. भूमिका
 4. परिवर्तन

Question ID : 264330111018
Status : Not Answered
Chosen Option : --

Comprehension:

निम्नलिखित गद्यांश में कुछ शब्दों को हटा दिया गया है। दिए गए विकल्पों की सहायता से रिक्त स्थानों की पूर्ति कीजिए। प्रत्येक संख्या के लिए सबसे उपयुक्त विकल्प का चयन कीजिए।
बुद्धिजीवी से तात्पर्य उन व्यक्तियों से है जो 1. _____ का अधिक उपयोग करके जीवन चलाते हैं अर्थात 2. _____ अर्जित करते हैं। समाज में मुख्यतः दो प्रकार के व्यक्ति हैं- एक वे जो अपने जीवन में 3. _____ श्रम अधिक करते हैं और दूसरे वे जो शारीरिक श्रम की अपेक्षा 4. _____ बल से काम करते हैं। समाज के लिए दोनों की 5. _____ भूमिका है।

SubQuestion No : 18**Q.18 रिक्त स्थान 3 की पूर्ति के लिए सबसे उपयुक्त विकल्प का चयन कीजिए।**

- Ans 1. शारीरिक
 2. दिखावा
 3. मज़दूरी
 4. प्राचीन

Question ID : 264330111019
Status : Not Answered
Chosen Option : --

Comprehension:

निम्नलिखित गद्यांश में कुछ शब्दों को हटा दिया गया है। दिए गए विकल्पों की सहायता से रिक्त स्थानों की पूर्ति कीजिए। प्रत्येक संख्या के लिए सबसे उपयुक्त विकल्प का चयन कीजिए।
बुद्धिजीवी से तात्पर्य उन व्यक्तियों से है जो 1. _____ का अधिक उपयोग करके जीवन चलाते हैं अर्थात 2. _____ अर्जित करते हैं। समाज में मुख्यतः दो प्रकार के व्यक्ति हैं- एक वे जो अपने जीवन में 3. _____ श्रम अधिक करते हैं और दूसरे वे जो शारीरिक श्रम की अपेक्षा 4. _____ बल से काम करते हैं। समाज के लिए दोनों की 5. _____ भूमिका है।

SubQuestion No : 19**Q.19 रिक्त स्थान 4 की पूर्ति के लिए सबसे उपयुक्त विकल्प का चयन कीजिए।**

- Ans 1. बड़े
 2. बुद्धि
 3. बाहु
 4. शस्त्र

Question ID : 264330111020
Status : Not Answered
Chosen Option : --

Comprehension:

निम्नलिखित गद्यांश में कुछ शब्दों को हटा दिया गया है। दिए गए विकल्पों की सहायता से रिक्त स्थानों की पूर्ति कीजिए। प्रत्येक संख्या के लिए सबसे उपयुक्त विकल्प का चयन कीजिए।
बुद्धिजीवी से तात्पर्य उन व्यक्तियों से है जो 1. _____ का अधिक उपयोग करके जीवन चलाते हैं अर्थात 2. _____ अर्जित करते हैं। समाज में मुख्यतः दो प्रकार के व्यक्ति हैं- एक वे जो अपने जीवन में 3. _____ श्रम अधिक करते हैं और दूसरे वे जो शारीरिक श्रम की अपेक्षा 4. _____ बल से काम करते हैं। समाज के लिए दोनों की 5. _____ भूमिका है।

SubQuestion No : 20**Q.20 रिक्त स्थान 5 की पूर्ति के लिए सबसे उपयुक्त विकल्प का चयन कीजिए।**

- Ans 1. चिंतित
 2. विवश
 3. अनिवार्य
 4. कम

Question ID : 264330111021
Status : Not Answered
Chosen Option : --