

Constable GD in CAPFs SSF Rifleman GD in Assam Rifles and Sepoy in NCB Examination 2022

Roll Number	www.govtjobsalert.in
Candidate Name	www.govtjobsalert.in
Venue Name	Pawan Ganga Educational Centre 1
Exam Date	13/01/2023
Exam Time	2:30 PM - 3:30 PM
Subject	Constable GD Examination 2022

Section : Part-A-General Intelligence and Reasoning

Q.1 Read the given statements and conclusions carefully. Assuming that the information given in the statements is true, even if it appears to be at variance with commonly known facts, decide which of the given conclusions logically follow(s) from the statements.

STATEMENTS:

A. All pencils are sticks. B. Some sticks are notes.

C. All diaries are notes.

CONCLUSIONS:

I. Some notes are diaries. II. Some sticks are pencils.

III. Some diaries are sticks.

- Ans**
- 1. Only conclusion II follows.
 - 2. Only conclusion III follows.
 - 3. Both conclusions I and II follow.
 - 4. Both conclusions I and III follow.

Question ID : 26433081633
Status : Answered
Chosen Option : 3

Q.2 Select the number from among the given options that can replace the question mark (?) in the following series.
120, 121, 128, 141, 160, ?

- Ans**
- 1. 190
 - 2. 198
 - 3. 180
 - 4. 185

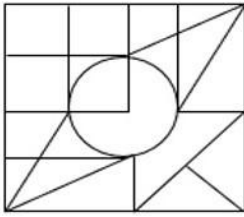
Question ID : 26433078920
Status : Answered
Chosen Option : 4

Q.3 'A + B' means 'A is the brother of B'
'A - B' means 'A is the mother of B'
'A × B' means 'A is the husband of B'
'A ÷ B' means 'A is the sister of B'
If $P \div Q - R + S - T \times U$, then which of the following statements is NOT correct?

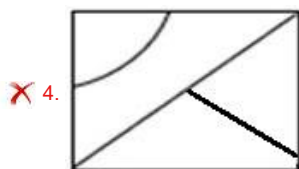
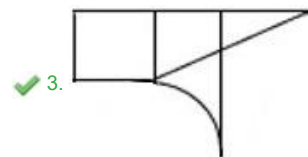
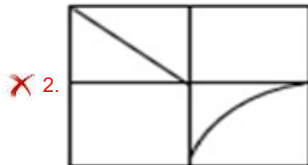
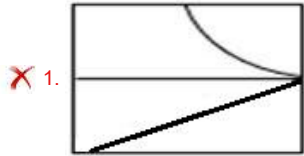
- Ans**
- 1. R is T's mother's brother.
 - 2. P is the mother-in-law of U.
 - 3. Q is the mother of S.
 - 4. P is R's mother's sister.

Question ID : 26433069660
Status : Not Answered
Chosen Option : --

Q.4 Select the option figure that is embedded in the given figure (rotation is NOT allowed).



Ans



Question ID : 26433069482
 Status : Answered
 Chosen Option : 4

Q.5 Select the correct mirror image of the given combination when the mirror is placed at 'PQ' as shown below.



Ans



Question ID : 26433081697
 Status : Answered
 Chosen Option : 3

Q.6 Select the letter-cluster from among the given options that can replace the question mark (?) in the following series.
FWCD, HQEF, JKGH, ? , NYKL

- Ans 1. GRXJ
 2. LEIJ
 3. GTBP
 4. LDGB

Question ID : 26433074745
Status : Answered
Chosen Option : 2

Q.7 Select the correct combination of mathematical signs to replace the * signs and balance the given equation.

$$176 * 4 * 9 * 3 * 13 * 14$$

- Ans 1. ÷ , + , - , × , =
 2. - , × , + , ÷ , =
 3. + , - , ÷ , × , =
 4. × , + , ÷ , - , =

Question ID : 26433085356
Status : Answered
Chosen Option : 1

Q.8 Select the option that is related to the fifth letter-cluster in the same way as the second letter-cluster is related to the first letter-cluster and the fourth letter-cluster is related to the third letter-cluster.

PJE : RNK :: DHN : FLT :: AMS : ?

- Ans 1. DQY
 2. CQY
 3. CQZ
 4. CRY

Question ID : 26433057714
Status : Answered
Chosen Option : 2

Q.9 Which two signs should be interchanged to make the below equation mathematically correct?

$$25 + 8 \div 40 - 20 \times 25 = 10$$

- Ans 1. ÷ and ×
 2. + and ÷
 3. + and ×
 4. - and +

Question ID : 264330117517
Status : Answered
Chosen Option : 3

Q.10 Six students are sitting around a circular table facing the centre. James is sitting second to the right of Peter. Charles is sitting second to the left of Peter. Sam is sitting third to the right of James. Tom is sitting second to the right of Sam. Ashley is an immediate neighbour of Charles and James. Who is sitting between Ashley and Tom?

- Ans** 1. James
 2. Sam
 3. Charles
 4. Peter

Question ID : 26433081776
Status : Answered
Chosen Option : 1

Q.11 Which of the following numbers will replace the question mark (?) in the given series?
29, 65, 95, 119, ?, 149, 155

- Ans** 1. 137
 2. 143
 3. 119
 4. 131

Question ID : 26433069389
Status : Not Answered
Chosen Option : --

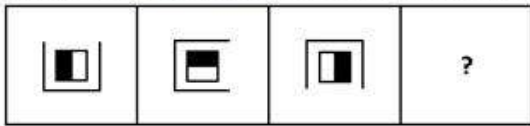
Q.12 Which option represents the correct order of the given words as they would appear in the English dictionary?

- 1 instant
2 invite
3 ingrained
4 initiate
5 intimate

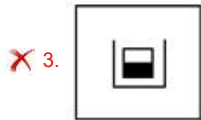
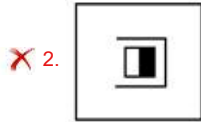
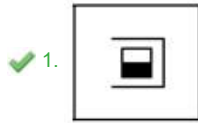
- Ans** 1. 3,5,1,4,2
 2. 3,4,5,1,2
 3. 3,4,1,5,2
 4. 3,1,5,4,2

Question ID : 26433069305
Status : Answered
Chosen Option : 3

Q.13 Select the figure that will come next in the following series.



Ans



Question ID : 26433078974

Status : Answered

Chosen Option : 1

Q.14 In a certain code language, 'BRAND' is written as 'DTYPF' and 'TOWER' is written as 'VMYCT'. How will 'STUDY' be written in that language?

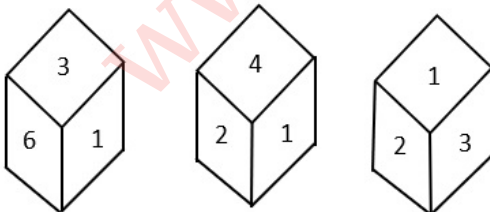
- Ans
- ✗ 1. URWBA
 - ✓ 2. UVSFA
 - ✗ 3. UVWFA
 - ✗ 4. UVWFW

Question ID : 26433081766

Status : Answered

Chosen Option : 2

Q.15 Three different positions of the same dice are shown. Find the number on the face opposite the face showing '1'.



- Ans
- ✗ 1. 6
 - ✓ 2. 5
 - ✗ 3. 3
 - ✗ 4. 2

Question ID : 26433090075

Status : Answered

Chosen Option : 2

Q.16 Select the set in which the numbers are related in the same way as are the numbers of the following sets.

(NOTE : Operations should be performed on the whole numbers, without breaking down the numbers into its constituent digits. E.g. 13 – Operations on 13 such as adding/subtracting/multiplying etc. to 13 can be performed. Breaking down 13 into 1 and 3 and then performing mathematical operations on 1 and 3 is not allowed)
(14, 231, 19)
(7, 154, 15)

- Ans 1. (13, 210, 17)
 2. (11, 188, 13)
 3. (9, 160, 15)
 4. (18, 242, 20)

Question ID : 26433076542

Status : **Not Attempted and Marked For Review**

Chosen Option : --

Q.17 Which letter-cluster will replace the question mark (?) to complete the given series?
BMYU, YJVR, ?, SDPL, PAMI

- Ans 1. WHSO
 2. VHSO
 3. VGSO
 4. WGSO

Question ID : 26433067946

Status : **Answered**

Chosen Option : 3

Q.18 In a certain code language, 'TERMINATOR' is written as 'ROTANTERMI' and 'SUPERMAN' is written as 'NAMRSUPE'. How will 'AVENGERS' be written in that language?

- Ans 1. SERGAVEN
 2. SREGAVEN
 3. SREAGVEN
 4. SREGAVNE

Question ID : 26433068224

Status : **Answered**

Chosen Option : 2

Q.19 Five friends (A, B, C, E and F) are sitting around a circular table facing the centre. F is sitting to the immediate right of C. A is sitting to the immediate left of C. E is sitting to the immediate right of F. Who is sitting to the immediate right of B?

- Ans 1. E
 2. C
 3. F
 4. A

Question ID : 26433080434

Status : **Answered**

Chosen Option : 4

Q.20 Select the option that is related to the third word in the same way as the second word is related to the first word.

(The words must be considered as meaningful English words and must not be related to each other based on the number of letters/number of consonants/vowels in the word)

Three : Triangle :: Four : ?

- Ans
- 1. Octagon
 - 2. Angle
 - 3. Rectangle
 - 4. Pentagon

Question ID : 26433079466
Status : Answered
Chosen Option : 3

Section : Part-B-General Knowledge and General awareness

Q.1 Fast food is often packed with fat and _____.

- Ans
- 1. empty calories
 - 2. iron
 - 3. nutrients
 - 4. calcium

Question ID : 264330115223
Status : Answered
Chosen Option : 1

Q.2 Identify the general formula for alkenes.

- Ans
- 1. C_nH_{6n}
 - 2. C_nH_{3n}
 - 3. C_nH_{4n}
 - 4. C_nH_{2n}

Question ID : 26433086743
Status : Answered
Chosen Option : 1

Q.3 In India, a Small-scale industry is defined with reference to the _____.

- Ans
- 1. Maximum number of Directors
 - 2. Maximum number of partners
 - 3. Maximum number of Employees
 - 4. Maximum investment allowed on the assets of a unit.

Question ID : 264330116135
Status : Not Answered
Chosen Option : --

Q.4 Which among the following festivals is the worship of 14 Gods and is celebrated in the month of July?

- Ans
- 1. Bonalu
 - 2. Losar
 - 3. Kharchi Puja
 - 4. Tripureshwari

Question ID : 264330115112
Status : Not Answered
Chosen Option : --

Q.5 When was the initial 10 Fundamental Duties added to the Constitution of India?

- Ans 1. 1955
 2. 1976
 3. 1947
 4. 1985

Question ID : 264330115622
Status : Answered
Chosen Option : 2

Q.6 Which Schedule of the Constitution of India deals with Union, State and Concurrent lists?

- Ans 1. 11th
 2. 7th
 3. 9th
 4. 5th

Question ID : 26433074906
Status : Answered
Chosen Option : 2

Q.7 India lies in which part of Asia?

- Ans 1. South Asia
 2. North Asia
 3. East Asia
 4. West Asia

Question ID : 264330116049
Status : Answered
Chosen Option : 1

Q.8 Who among the following hosted the 2019 South Asian Games?

- Ans 1. India
 2. Nepal
 3. Sri Lanka
 4. Pakistan

Question ID : 264330115940
Status : Answered
Chosen Option : 1

Q.9 What is power, the most visible form of energy, which is often identified with progress in modern civilization, commonly called?

- Ans 1. fossil fuel
 2. electricity
 3. oil
 4. coal

Question ID : 264330115551
Status : Answered
Chosen Option : 2

Q.10 In which year was the first edition of the Khelo India School Games held?

- Ans
- 1. 2014
 - 2. 2020
 - 3. 2018
 - 4. 2019

Question ID : 26433092325
Status : Answered
Chosen Option : 1

Q.11 A co-operative bank in India, is registered under the States _____ Act.

- Ans
- 1. Minorities
 - 2. Cooperative Societies
 - 3. Companies
 - 4. Industries

Question ID : 264330115304
Status : Answered
Chosen Option : 2

Q.12 A telecommunication industry includes satellites, closed computer networks and _____.

- Ans
- 1. induction cookers
 - 2. tube wells
 - 3. air conditioners
 - 4. wireless networks

Question ID : 264330115400
Status : Answered
Chosen Option : 4

Q.13 What happens at the inter tropical convergence zone?

- Ans
- 1. The southwest and northwest trade winds converge
 - 2. The southwest and northwest trade winds diverge
 - 3. The southeast and northeast trade winds converge
 - 4. The southeast and northwest trade winds converge

Question ID : 26433091488
Status : Not Answered
Chosen Option : --

Q.14 As of November 2022, who is the Union Minister for Food Processing Industries in India?

- Ans
- 1. Hardeep Singh Puri
 - 2. Nityanand Rai
 - 3. Pashupati Kumar Paras
 - 4. Raj Kumar Singh

Question ID : 264330114936
Status : Answered
Chosen Option : 1

Q.15 Chang Lo tribal dance is performed by the Chang tribe of _____.

- Ans 1. Chhattisgarh
 2. Nagaland
 3. Goa
 4. Madhya Pradesh

Question ID : 264330115069
Status : Not Answered
Chosen Option : --

Q.16 Name of the three of the following is often used together as a group. Pick the odd one out.

- Ans 1. Dada Bhai Naoroji
 2. Bipin Chandra Pal
 3. Lala Lajpat Rai
 4. Bal Gangadhar Tilak

Question ID : 264330115711
Status : Answered
Chosen Option : 1

Q.17 Who holds the honour of being the Tirumala Tirupati Devasthanam's Astana Nartaki?

- Ans 1. Mallika Sarabhai
 2. Yamini Krishnamurthy
 3. Shovana Narayan
 4. Sonal Mansingh

Question ID : 264330115840
Status : Not Answered
Chosen Option : --

Q.18 The Startup India Initiative, launched on _____ has rolled out several programs with the objective of supporting entrepreneurs.

- Ans 1. 16th January,2016
 2. 14th January,2014
 3. 17th January,2017
 4. 15th January,2015

Question ID : 264330116186
Status : Answered
Chosen Option : 1

Q.19 Chaudhary Ajit Singh, who passed away in 2021, was the founder of which of the following parties?

- Ans 1. Rashtriya Lok Dal
 2. Samajwadi Party
 3. Bahujan Samaj Party
 4. Communist Party of India

Question ID : 264330115007
Status : Not Answered
Chosen Option : --

Q.20 Ashvaghosha who composed 'Buddhacharita' lived in the court of _____.

- Ans 1. Kanishka
 2. Vasudeva
 3. Vasishka
 4. Sadashkana

Question ID : 264330106591
Status : Answered
Chosen Option : 1

Section : Part-C-Elementary Mathematics

Q.1 A toy is in the form of a cone mounted on a hemisphere. The radius of the hemisphere and that of the cone is 7 cm and height of the cone is 5 cm. The total surface area of the toy (take $\pi = \frac{22}{7}$) is (rounded off to two places of decimal):

- Ans 1. 2648.81 cm²
 2. 2666.85 cm²
 3. 497.25 cm²
 4. 486.65 cm²

Question ID : 26433083088
Status : Not Answered
Chosen Option : --

Q.2 Find the mean proportional of $(x + y)^4$ and $(x - y)^4$.

- Ans 1. $(x^2 - y^2)^3$
 2. $(x^2 - y^2)$
 3. $(x^2 - y^2)^2$
 4. $(x^2 - y^2)^4$

Question ID : 26433075552
Status : Not Answered
Chosen Option : --

Q.3 The average salary of all the workers in a factory is Rs.3,000. Among these workers, there are 12 higher officers and their average salary is Rs.12,000. The average salary of the remaining workers is Rs.2,500. The total number of the workers is _____.

- Ans 1. 200
 2. 204
 3. 216
 4. 228

Question ID : 26433091894
Status : Answered
Chosen Option : 4

Q.4 The HCF of $\frac{3}{8}$, $\frac{5}{12}$ and $\frac{15}{16}$ is:

- Ans
- 1. $\frac{1}{12}$
 - 2. $\frac{1}{24}$
 - 3. $\frac{1}{48}$
 - 4. $\frac{1}{36}$

Question ID : 26433079819
Status : Answered
Chosen Option : 3

Q.5 The population of a town is increasing at 5% per annum. What will be the population of the town after 2 years, if the present population is 16000?

- Ans
- 1. 17960
 - 2. 16560
 - 3. 16960
 - 4. 17640

Question ID : 26433082405
Status : Answered
Chosen Option : 4

Q.6 A sum on compound interest, compounding annually amounts to Rs.30,250 in 2 years and to Rs.33,275 in 3 years. Find the sum.

- Ans
- 1. Rs.23,000
 - 2. Rs.26,000
 - 3. Rs.24,000
 - 4. Rs.25,000

Question ID : 26433082404
Status : Answered
Chosen Option : 2

Q.7 A and B can together finish a work in 30 days. They worked together for 20 days and then B left. After another 20 days, A finished the remaining work. In how many days can A alone finish the whole work?

- Ans
- 1. 60
 - 2. 66
 - 3. 56
 - 4. 62

Question ID : 26433075166
Status : Answered
Chosen Option : 1

Q.8 By selling goods for ₹ 15,000, Ramu gains ₹ 3,000. What is his profit percentage?

- Ans
- 1. 18%
 - 2. 25%
 - 3. 30%
 - 4. 20%

Question ID : 26433075544
Status : Answered
Chosen Option : 2

Q.9 A, B and C together can complete a piece of work in $40/3$ days. All three started working at it together and after 5 days A left. Then B and C together completed the remaining work in 17 days. Find the number of days (approximately) in which A alone can complete the total work.

- Ans
- 1. 24 days
 - 2. 29 days
 - 3. 26 days
 - 4. 44 days

Question ID : 264330116870
Status : Not Answered
Chosen Option : --

Q.10 Find the remainder when the smallest 6-digit number divisible by 12, 15 and 25 is divided by 9.

- Ans
- 1. 3
 - 2. 1
 - 3. 2
 - 4. 0

Question ID : 264330116653
Status : Answered
Chosen Option : 1

Q.11 A train travels from Delhi to Dehradun at the speed of 120 km/h and from Dehradun to Delhi at the speed of 130 km/h. What is the average speed during the whole journey?

- Ans
- 1. 127.8 km/h
 - 2. 126.8 km/h
 - 3. 125.4 km/h
 - 4. 124.8 km/h

Question ID : 26433075114
Status : Not Attempted and Marked For Review
Chosen Option : --

Q.12 The marked price of a bedsheet is 14 percent more than its cost price. If a discount of 14 percent is given on the marked price. What is the gain or loss percent?

- Ans
- 1. 1.44 percent gain
 - 2. 1.96 percent loss
 - 3. 1.64 percent gain
 - 4. 1.82 percent loss

Question ID : 264330116755
Status : Answered
Chosen Option : 2

Q.13 A single discount equivalent to successive discounts of 10%, 20% and 40% on marked price is:

- Ans
- 1. $56\frac{4}{5}\%$
 - 2. $52\frac{1}{5}\%$
 - 3. $51\frac{4}{5}\%$
 - 4. $48\frac{1}{5}\%$

Question ID : 26433074458
Status : Answered
Chosen Option : 1

Q.14 75% of first number is equal to 60% of second number. What is the ratio of the first number and second number?

- Ans
- 1. 2 : 3
 - 2. 4 : 5
 - 3. 1 : 2
 - 4. 3 : 4

Question ID : 26433082788
Status : Answered
Chosen Option : 2

Q.15 Find the volume of a cone, the radius of whose base is 21 cm and height is 20 cm. Take $\pi = \frac{22}{7}$.

- Ans
- 1. 8840 cm³
 - 2. 9204 cm³
 - 3. 9420 cm³
 - 4. 9240 cm³

Question ID : 26433075253
Status : Answered
Chosen Option : 4

Q.16 Find the mean proportional between 18 and 32.

- Ans 1. 22
 2. 24
 3. 20
 4. 25

Question ID : 26433082389
Status : Answered
Chosen Option : 2

Q.17 An almirah was brought for Rs.14,360 and Rs.240 was spent on its transportation. At what price should it be sold, to gain 15%?

- Ans 1. Rs.16,780
 2. Rs.16,800
 3. Rs.16,770
 4. Rs.16,790

Question ID : 26433066359
Status : Answered
Chosen Option : 4

Q.18 Ravish travelled the first 20 km of an entire distance at a speed of 12 km/h; the next 25 km at a speed of 10 km/h and the remaining distance at a speed of 15 km/h. If his overall average speed was 13.5 km/h, what was the distance that Ravish travelled at a speed of 15 km/h?

- Ans 1. 111.95 km
 2. 110.95 km
 3. 112.5 km
 4. 113.95km

Question ID : 26433073132
Status : Not Answered
Chosen Option : --

Q.19 A car covers a distance of 1080 km in 240 minutes. What is the speed of the car in m/sec?

- Ans 1. 70
 2. 81
 3. 55
 4. 75

Question ID : 26433071234
Status : Not Attempted and Marked For Review
Chosen Option : --

Q.20 Om decided to order 12 percent more millet flour for his bakery than last year. If he ordered 240 kg last year, then how much quantity of millet flour should he order this year?

- Ans 1. 272.2 kg
 2. 268.8 kg
 3. 252.2 kg
 4. 258.8 kg

Question ID : 264330116790
Status : Answered
Chosen Option : 2

Section : Part-D-English

Q.1 Select the most appropriate meaning of the given idiom.

Hang in there

- Ans 1. A wise decision
 2. Overcoming joy
 3. Don't rake up a controversy
 4. Don't give up

Question ID : 26433073993
Status : Answered
Chosen Option : 1

Q.2 Select the most appropriate ANTONYM of the given word.

Transient

- Ans 1. Delicate
 2. Perishable
 3. Temporary
 4. Permanent

Question ID : 26433074051
Status : Answered
Chosen Option : 4

Q.3 Select the most appropriate ANTONYM of the given word.

Confident

- Ans 1. Cowardly
 2. Undaunted
 3. Bold
 4. Carefree

Question ID : 26433089033
Status : Answered
Chosen Option : 1

Q.4 Select the most appropriate meaning of the given idiom.

To put a spoke in one's wheel

- Ans 1. To thwart someone in execution of one's design
 2. To leave someone without any provision
 3. To receive cold reception
 4. Narrating a false story

Question ID : 26433073875
Status : Answered
Chosen Option : 1

Q.5 Select the INCORRECTLY spelt word.

- Ans 1. Necessity
 2. Weather
 3. Knowledge
 4. Modest

Question ID : 26433073725
Status : Answered
Chosen Option : 1

Q.6 Select the most appropriate synonym of the underlined word in the following sentence.

One should enjoy liberty with duties in mind.

- Ans
- 1. Meal
 - 2. Democracy
 - 3. Statue
 - 4. Freedom

Question ID : 26433072354
Status : Answered
Chosen Option : 4

Q.7 Select the correct pair of words for the blanks in the given sentence.

Computer has a _____ memory and my father prefers _____ to digital payments.

- Ans
- 1. cash; cash
 - 2. cache; cash
 - 3. cache; cache
 - 4. cash; cache

Question ID : 26433060548
Status : Answered
Chosen Option : 2

Q.8 Select the most appropriate ANTONYM of the given word.

Significant

- Ans
- 1. Prominent
 - 2. Idle
 - 3. Distinct
 - 4. Paltry

Question ID : 26433072212
Status : Answered
Chosen Option : 4

Q.9 Select the most appropriate synonym of the given word.

Aghast

- Ans
- 1. Mystified
 - 2. Inspired
 - 3. Pacified
 - 4. Horrified

Question ID : 26433073979
Status : Not Answered
Chosen Option : --

Q.10 Select the INCORRECTLY spelt word.

- Ans
- 1. Lament
 - 2. License
 - 3. Juggle
 - 4. Exklusive

Question ID : 26433073734
Status : Answered
Chosen Option : 4

Q.11 Select the most appropriate option to fill in the blank.
We _____ the mathematical issue with zest and vigour.

- Ans
- 1. cleared up
 - 2. solved
 - 3. settled
 - 4. remedied

Question ID : 26433091725
Status : Answered
Chosen Option : 2

Q.12 Select the most appropriate option that can substitute the underlined segment in the given sentence. If there is no need to substitute it, select 'No substitution'.

The farmer has been work since 8 a.m. today and he's not completed the work yet.

- Ans
- 1. is been working
 - 2. has been working
 - 3. No substitution
 - 4. had working

Question ID : 26433088739
Status : Answered
Chosen Option : 2

Q.13 Select the most appropriate option to fill in the blank.

The garbage _____ empties into a big bin.

- Ans
- 1. shoot
 - 2. should
 - 3. shook
 - 4. chute

Question ID : 26433090390
Status : Answered
Chosen Option : 2

Q.14 The following sentence has been split into four segments. Identify the segment that contains a grammatical error.

I am give / a speech on / emerging economic dynamics / in the program.

- Ans
- 1. I am give
 - 2. a speech on
 - 3. emerging economic dynamics
 - 4. in the program

Question ID : 26433094741
Status : Answered
Chosen Option : 1

Q.15 Select the most appropriate option that can substitute the underlined segment in the given sentence. If there is no need to substitute it, select 'No substitution'.

I went there to say goodbye to him but he refuse to meet me.

- Ans**
- 1. No substitution
 - 2. he refused to meet me
 - 3. he has refused to meet me
 - 4. he refused in meeting me

Question ID : 26433093073
Status : Answered
Chosen Option : 2

Comprehension:

In the following passage, some words have been deleted. Read the passage carefully and select the most appropriate option to fill in each blank.

A lot of research has (1)_____ that reptiles and amphibians are cold-blooded (2)_____. By the term cold-blooded animals, we (3)_____ that they cannot control their body temperature like we can. A reptile's skin is dry and scaly, (4)_____ the skin of an amphibian is wet and smooth. Most reptiles spend much of their time (5)_____ on land. Most amphibians live in or around water.

SubQuestion No : 16

Q.16 Select the most appropriate option to fill in blank number 1.

- Ans**
- 1. proved
 - 2. tell
 - 3. talked
 - 4. spread

Question ID : 26433089035
Status : Answered
Chosen Option : 1

Comprehension:

In the following passage, some words have been deleted. Read the passage carefully and select the most appropriate option to fill in each blank.

A lot of research has (1)_____ that reptiles and amphibians are cold-blooded (2)_____. By the term cold-blooded animals, we (3)_____ that they cannot control their body temperature like we can. A reptile's skin is dry and scaly, (4)_____ the skin of an amphibian is wet and smooth. Most reptiles spend much of their time (5)_____ on land. Most amphibians live in or around water.

SubQuestion No : 17

Q.17 Select the most appropriate option to fill in blank number 2.

- Ans**
- 1. birds
 - 2. animals
 - 3. plants
 - 4. organisms

Question ID : 26433089036
Status : Answered
Chosen Option : 2

Comprehension:

In the following passage, some words have been deleted. Read the passage carefully and select the most appropriate option to fill in each blank.

A lot of research has (1)_____ that reptiles and amphibians are cold-blooded (2)_____. By the term cold-blooded animals, we (3)_____ that they cannot control their body temperature like we can. A reptile's skin is dry and scaly, (4)_____ the skin of an amphibian is wet and smooth. Most reptiles spend much of their time (5)_____ on land. Most amphibians live in or around water.

SubQuestion No : 18

Q.18 Select the most appropriate option to fill in blank number 3.

- Ans** 1. intent
 2. express
 3. designate
 4. mean

Question ID : 26433089037
Status : Answered
Chosen Option : 4

Comprehension:

In the following passage, some words have been deleted. Read the passage carefully and select the most appropriate option to fill in each blank.

A lot of research has (1)_____ that reptiles and amphibians are cold-blooded (2)_____. By the term cold-blooded animals, we (3)_____ that they cannot control their body temperature like we can. A reptile's skin is dry and scaly, (4)_____ the skin of an amphibian is wet and smooth. Most reptiles spend much of their time (5)_____ on land. Most amphibians live in or around water.

SubQuestion No : 19

Q.19 Select the most appropriate option to fill in blank number 4.

- Ans** 1. contrary
 2. similarly
 3. conversely
 4. whereas

Question ID : 26433089038
Status : Answered
Chosen Option : 4

Comprehension:

In the following passage, some words have been deleted. Read the passage carefully and select the most appropriate option to fill in each blank.

A lot of research has (1)_____ that reptiles and amphibians are cold-blooded (2)_____. By the term cold-blooded animals, we (3)_____ that they cannot control their body temperature like we can. A reptile's skin is dry and scaly, (4)_____ the skin of an amphibian is wet and smooth. Most reptiles spend much of their time (5)_____ on land. Most amphibians live in or around water.

SubQuestion No : 20

Q.20 Select the most appropriate option to fill in blank number 5.

- Ans** 1. walking
 2. dragging
 3. jumping
 4. crawling

Question ID : 26433089039
Status : Answered
Chosen Option : 4

Q.1 दिए गए वाक्य में रेखांकित अंश के स्थान पर सबसे उपयुक्त शब्द निम्न में से कौन-सा होगा?
लोग बड़ी मात्रा में जमा हो गए।

- Ans
- 1. भीड़
 - 2. संख्या
 - 3. मात्र
 - 4. परिमाण

Question ID : 26433072582
Status : Not Answered
Chosen Option : --

Q.2 "यह उसके जीवन की प्रमुख घटना थी।" इस वाक्य में प्रयुक्त शब्द 'प्रमुख' के स्थान पर उसके विलोम शब्द का प्रयोग निम्न में से किस वाक्य में किया गया है?

- Ans
- 1. यह उसके जीवन की विशिष्ट घटना थी।
 - 2. यह उसके जीवन की क्षीण घटना थी।
 - 3. यह उसके जीवन की गौण घटना थी।
 - 4. यह उसके जीवन की महत्वपूर्ण घटना थी।

Question ID : 26433067026
Status : Not Answered
Chosen Option : --

Q.3 निम्नलिखित में से अशुद्ध वाक्य कौन-सा है?

- Ans
- 1. मनुष्य स्वभावतः अकेलापन पसंद नहीं करता।
 - 2. देश में सर्वस्व शांति होना चाहिए।
 - 3. विकास के सूत्र मानव के हाथ में हैं।
 - 4. मनुष्यता मनुष्य की अमूल्य निधि है।

Question ID : 26433066990
Status : Not Answered
Chosen Option : --

Q.4 मुहावरों और उनके अर्थ का निम्न में से कौन सा एक युग्म सही है?

- Ans
- 1. माथा ठनकना-खुशामद करना
 - 2. मन मैला करना-अत्यधिक प्रसन्न होना
 - 3. रंग बदलना-अपरिवर्तनशील होना
 - 4. बालू से तेल निकालना-असंभव को संभव करना

Question ID : 26433062560
Status : Not Answered
Chosen Option : --

Q.5 निम्न वाक्यांश के लिए विकल्पों में से उपयुक्त शब्द चुनें।
ऊँट पर रखकर चलायी जाने वाली तोप

- Ans
- 1. बंदूक
 - 2. मुकुल
 - 3. सुतुरनाल
 - 4. शरासन

Question ID : 26433069993
Status : Not Answered
Chosen Option : --

Q.6 विलोम शब्दों का निम्न में से कौन-सा युग्म सुमेलित नहीं है?

- Ans 1. अपना-पराया
 2. अग्नि-आग
 3. आकाश-पाताल
 4. आस्था-अनास्था

Question ID : 26433067091
Status : Not Answered
Chosen Option : --

Q.7 निम्न वाक्य में रेखांकित शब्द को विकल्पों में दिए गए शब्दों में से उपयुक्त शब्द से बदलें।
मैं आशा करूँगा कि समय पर आपके पास पहुँच जाऊँ।

- Ans 1. चेष्टा
 2. चिंता
 3. उलकंठा
 4. प्रत्याशा

Question ID : 26433062872
Status : Not Answered
Chosen Option : --

Q.8 निम्नलिखित विकल्पों में से किस एक वाक्य में संख्यावाचक विशेषण का उचित प्रयोग नहीं किया गया है?

- Ans 1. गौरव के पास थोड़ी-सी भूमि बची हुई है।
 2. दिल्ली के पास यमुना में जरा-सा पानी है।
 3. यह किसका खरगोश है?
 4. मेरी गाय थोड़ा दूध देती है।

Question ID : 26433062965
Status : Not Answered
Chosen Option : --

Q.9 'आँखों में धूल झोंकना' मुहावरे का उचित अर्थ है-

- Ans 1. ध्यान न देना
 2. इशारा करना
 3. धोखा देना
 4. कुछ न देखना

Question ID : 26433065878
Status : Not Answered
Chosen Option : --

Q.10 उसने मेरे साथ गद्देदारी की है।
उपरोक्त वाक्य के किस भाग में अशुद्धि है?

- Ans 1. की है।
 2. गद्देदारी
 3. उसने
 4. मेरे साथ

Question ID : 26433079760
Status : Not Answered
Chosen Option : --

Q.11 'जो देखने योग्य न हो' वाक्यांश के लिए उचित शब्द बताइए -

- Ans 1. अदर्शनीय
 2. अदृश्य
 3. अप्रत्यक्ष
 4. अवर्णीय

Question ID : 26433065902
Status : Not Answered
Chosen Option : --

Q.12 निम्नलिखित विकल्पों में से कौन सा एक वाक्य क्रिया-विशेषण से सम्बन्ध रखता है?

- Ans 1. सीता यहाँ आ रही है।
 2. बच्चे दौड़ते हैं।
 3. वह खड़ा है।
 4. गाय चरती है।

Question ID : 26433062949
Status : Not Answered
Chosen Option : --

Q.13 नीचे दिए वाक्यांश के लिए उचित शब्द दिए गए विकल्पों में से चुनिए-
जो सबके आगे रहता हो

- Ans 1. अग्रणी
 2. अग्रिम
 3. अग्रगण्य
 4. अग्रज

Question ID : 26433062385
Status : Not Answered
Chosen Option : --

Q.14 निम्नलिखित वाक्य के रिक्तस्थानों की पूर्ति उपयुक्त एकार्थी शब्द-युग्म द्वारा कीजिए।
आदमी की _____ उसे सफल बनती है, वहीं सफलता उसका _____-योग है।

- Ans 1. दीपक-रोशनी
 2. शुभ मुहूर्त-नतीजा
 3. ताजा-समान
 4. लगन-लग्न

Question ID : 26433091325
Status : Not Answered
Chosen Option : --

Q.15 मैं गेंदे की जगह नलिन के फूल देवी को अर्पित करूँगी।
उपरोक्त वाक्य में रेखांकित शब्द का पर्यायवाची क्या होगा?

- Ans 1. केसर
 2. कमल
 3. जुही
 4. पुष्प

Question ID : 26433080852
Status : Not Answered
Chosen Option : --

Comprehension:

निम्नलिखित गद्यांश में कुछ शब्दों को हटा दिया गया है। दिए गए विकल्पों की सहायता से रिक्त स्थानों की पूर्ति कीजिए। प्रत्येक संख्या के लिए सबसे उपयुक्त विकल्प का चयन कीजिए।
आज घर-घर बांटे जाने वाले समाचार पत्र से लगभग सभी की 1. _____ प्रारंभ होती है। यह हमारे जीवन की 2. _____ आवश्यकता बन गया है। किसी कारणवश यदि इसे पढ़ने का 3. _____ नहीं मिलता तो ऐसा प्रतीत होता है कि मानो कोई बड़ा और महत्वपूर्ण कार्य छूट गया है। समाचार पत्र से घर बैठे ही बहुत ही कम पैसों में देश-विदेश का 4. _____ प्राप्त हो जाता है। यह सभी प्रकार के समाचार और जनता के मध्य 5. _____ का कार्य करता है।

SubQuestion No : 16**Q.16 रिक्त स्थान 1 की पूर्ति के लिए सबसे उपयुक्त विकल्प का चयन कीजिए।**

- Ans 1. दिनचर्या
 2. छुट्टियाँ
 3. कुशलता
 4. आवश्यकता

Question ID : 264330111113

Status : Not Answered

Chosen Option : --

Comprehension:

निम्नलिखित गद्यांश में कुछ शब्दों को हटा दिया गया है। दिए गए विकल्पों की सहायता से रिक्त स्थानों की पूर्ति कीजिए। प्रत्येक संख्या के लिए सबसे उपयुक्त विकल्प का चयन कीजिए।
आज घर-घर बांटे जाने वाले समाचार पत्र से लगभग सभी की 1. _____ प्रारंभ होती है। यह हमारे जीवन की 2. _____ आवश्यकता बन गया है। किसी कारणवश यदि इसे पढ़ने का 3. _____ नहीं मिलता तो ऐसा प्रतीत होता है कि मानो कोई बड़ा और महत्वपूर्ण कार्य छूट गया है। समाचार पत्र से घर बैठे ही बहुत ही कम पैसों में देश-विदेश का 4. _____ प्राप्त हो जाता है। यह सभी प्रकार के समाचार और जनता के मध्य 5. _____ का कार्य करता है।

SubQuestion No : 17**Q.17 रिक्त स्थान 2 की पूर्ति के लिए सबसे उपयुक्त विकल्प का चयन कीजिए।**

- Ans 1. प्रमाणिक
 2. उपद्रव
 3. नैतिक
 4. दैनिक

Question ID : 264330111114

Status : Not Answered

Chosen Option : --

Comprehension:

निम्नलिखित गद्यांश में कुछ शब्दों को हटा दिया गया है। दिए गए विकल्पों की सहायता से रिक्त स्थानों की पूर्ति कीजिए। प्रत्येक संख्या के लिए सबसे उपयुक्त विकल्प का चयन कीजिए।
आज घर-घर बांटे जाने वाले समाचार पत्र से लगभग सभी की 1. _____ प्रारंभ होती है। यह हमारे जीवन की 2. _____ आवश्यकता बन गया है। किसी कारणवश यदि इसे पढ़ने का 3. _____ नहीं मिलता तो ऐसा प्रतीत होता है कि मानो कोई बड़ा और महत्वपूर्ण कार्य छूट गया है। समाचार पत्र से घर बैठे ही बहुत ही कम पैसों में देश-विदेश का 4. _____ प्राप्त हो जाता है। यह सभी प्रकार के समाचार और जनता के मध्य 5. _____ का कार्य करता है।

SubQuestion No : 18**Q.18 रिक्त स्थान 3 की पूर्ति के लिए सबसे उपयुक्त विकल्प का चयन कीजिए।**

- Ans 1. महत्त्व
 2. दबाव
 3. मन
 4. अवसर

Question ID : 264330111115

Status : Not Answered

Chosen Option : --

Comprehension:

निम्नलिखित गद्यांश में कुछ शब्दों को हटा दिया गया है। दिए गए विकल्पों की सहायता से रिक्त स्थानों की पूर्ति कीजिए। प्रत्येक संख्या के लिए सबसे उपयुक्त विकल्प का चयन कीजिए।
आज घर-घर बांटे जाने वाले समाचार पत्र से लगभग सभी की 1. _____ प्रारंभ होती है। यह हमारे जीवन की 2. _____ आवश्यकता बन गया है। किसी कारणवश यदि इसे पढ़ने का 3. _____ नहीं मिलता तो ऐसा प्रतीत होता है कि मानो कोई बड़ा और महत्वपूर्ण कार्य छूट गया है। समाचार पत्र से घर बैठे ही बहुत ही कम पैसों में देश-विदेश का 4. _____ प्राप्त हो जाता है। यह सभी प्रकार के समाचार और जनता के मध्य 5. _____ का कार्य करता है।

SubQuestion No : 19**Q.19 रिक्त स्थान 4 की पूर्ति के लिए सबसे उपयुक्त विकल्प का चयन कीजिए।**

- Ans** 1. समाचार
 2. प्रमाण
 3. प्यार
 4. परिणाम

Question ID : 264330111116
Status : Not Answered
Chosen Option : --

Comprehension:

निम्नलिखित गद्यांश में कुछ शब्दों को हटा दिया गया है। दिए गए विकल्पों की सहायता से रिक्त स्थानों की पूर्ति कीजिए। प्रत्येक संख्या के लिए सबसे उपयुक्त विकल्प का चयन कीजिए।
आज घर-घर बांटे जाने वाले समाचार पत्र से लगभग सभी की 1. _____ प्रारंभ होती है। यह हमारे जीवन की 2. _____ आवश्यकता बन गया है। किसी कारणवश यदि इसे पढ़ने का 3. _____ नहीं मिलता तो ऐसा प्रतीत होता है कि मानो कोई बड़ा और महत्वपूर्ण कार्य छूट गया है। समाचार पत्र से घर बैठे ही बहुत ही कम पैसों में देश-विदेश का 4. _____ प्राप्त हो जाता है। यह सभी प्रकार के समाचार और जनता के मध्य 5. _____ का कार्य करता है।

SubQuestion No : 20**Q.20 रिक्त स्थान 5 की पूर्ति के लिए सबसे उपयुक्त विकल्प का चयन कीजिए।**

- Ans** 1. आदर्श
 2. सेतु
 3. उपयोगिता
 4. साथ

Question ID : 264330111117
Status : Not Answered
Chosen Option : --