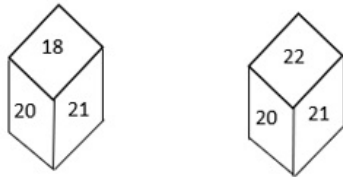


Constable GD in CAPFs SSF Rifleman GD in Assam Rifles and Sepoy in NCB Examination 2022

Roll Number	www.govtjobsalert.in
Candidate Name	www.govtjobsalert.in
Venue Name	ION Digital Zone iDZ Kishanpur
Exam Date	24/01/2023
Exam Time	2:30 PM - 3:30 PM
Subject	Constable GD Examination 2022

Section : Part-A-General Intelligence and Reasoning

Q.1 Two different positions of the same dice are shown. Find the number on the face opposite the face showing '18'.



- Ans 1. 22
 2. 19
 3. 20
 4. 24

Question ID : 26433089509
Status : Answered
Chosen Option : 1

Q.2 Which letter-cluster will replace the question mark (?) to complete the given series?
MRFL, RYKS, ?, BMUG, GTZN

- Ans 1. TFQY
 2. TDOX
 3. WFPZ
 4. SEPY

Question ID : 26433068034
Status : Answered
Chosen Option : 3

Q.3 Which number will replace the question mark (?) in the following series?
2, 10, 30, ?, 130

- Ans 1. 50
 2. 100
 3. 68
 4. 64

Question ID : 26433067836
Status : Not Answered
Chosen Option : --

Q.4 Which letter-cluster will replace the question mark (?) to complete the given series?
YWUS, RPNL, ?, DBZX, WUSQ

- Ans 1. KIGE
 2. KJHF
 3. KIHE
 4. KJGE

Question ID : 26433067723
Status : Answered
Chosen Option : 1

Q.5 Which option represents the correct order of the given words as they would appear in the English dictionary?

- 1 grape
2 grown
3 grass
4 gross
5 grind

- Ans 1. 1,4,3,5,2
 2. 1,3,5,4,2
 3. 1,5,4,3,2
 4. 1,3,5,2,4

Question ID : 26433069295
Status : Answered
Chosen Option : 2

Q.6 उस विकल्प का चयन कीजिए जो तीसरे शब्द से उसी प्रकार संबंधित है जिस प्रकार दूसरा शब्द पहले शब्द से संबंधित है। (शब्दों को अर्थपूर्ण शब्दों के रूप में मानना है और उन्हें शब्द में अक्षरों/व्यंजनों/स्वरों की संख्या के आधार पर एक-दूसरे से संबंधित नहीं करना है।)
ऊन : स्वेटर :: लैटेक्स : ?

- Ans 1. मोम
 2. धातु
 3. रबड़
 4. आभूषण

Question ID : 26433069576
Status : Answered
Chosen Option : 1

Q.7 Which two numbers, from the given options, should be interchanged to make the given equation correct?

$$95 \div 19 \times 112 \div (4 \times 4 + 3) + 5 = 24$$

- Ans 1. 112 and 95
 2. 4 and 5
 3. 4 and 3
 4. 112 and 24

Question ID : 26433082485
Status : Answered
Chosen Option : 2

Q.8 Select the option that is related to the fourth term in the same way as the first term is related to the second term and the fifth term is related to the sixth term.
80 : 17 :: ? : 13 :: 185 : 38

- Ans
- 1. 85
 - 2. 60
 - 3. 65
 - 4. 70

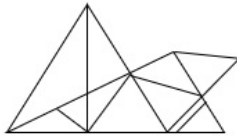
Question ID : 26433074552
Status : Answered
Chosen Option : 2

Q.9 'A + B' means 'B is the mother of A'
'A # B' means 'B is the sister of A'
'A @ B' means 'B is the brother of A'
'A % B' means 'B is the daughter of A'
If A # B @ C % D + E, then how is E related to A?

- Ans
- 1. Wife
 - 2. Sister
 - 3. Brother's wife
 - 4. Brother's daughter

Question ID : 26433068527
Status : Answered
Chosen Option : 3

Q.10 Select the option figure which is embedded in the given figure. (Rotation is NOT allowed)



Ans

- 1.
- 2.
- 3.
- 4.

Question ID : 26433069329
Status : Answered
Chosen Option : 1

Q.11 If signs '+' and '-' and numbers 14 and 6 are used interchangeably, then which of the following equation would be correct?

- Ans 1. $8 \times 2 + 6 - 14 = 4$
 2. $6 + 14 \times 2 - 18 = 20$
 3. $18 - 6 + 3 \times 14 = 30$
 4. $6 \times 8 + 12 - 14 = 20$

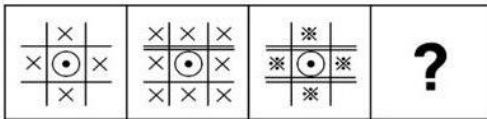
Question ID : 264330117487
 Status : Answered
 Chosen Option : 2

Q.12 Which of the following numbers will replace the question mark (?) in the given series?
 109, 122, 148, ?, 239, 304

- Ans 1. 179
 2. 189
 3. 198
 4. 187

Question ID : 26433076745
 Status : Answered
 Chosen Option : 4

Q.13 Select the figure that will come at the place of question mark (?) in the following figure.



Ans

- 1.
- 2.
- 3.
- 4.

Question ID : 26433078862
 Status : Answered
 Chosen Option : 4

Q.14 Seven people P,Q,R,S,T,U and V are sitting in a straight line adjacent to each other, facing the north (not necessarily in the given order). R is sitting to the immediate right of U. U is sitting third to the right of P. There are only four persons sitting between P and T. Q is the immediate neighbour of V and U. Who can be the immediate neighbour of S?

- Ans
- 1. Q
 - 2. U
 - 3. T
 - 4. R

Question ID : 26433080704
Status : Answered
Chosen Option : 3

Q.15 In a certain code language, 'MOBILE' is coded as '18' and 'TELEVISION' is coded as 30. How will 'COMPUTER' be coded in that language?

- Ans
- 1. 20
 - 2. 22
 - 3. 24
 - 4. 23

Question ID : 26433080470
Status : Answered
Chosen Option : 3

Q.16 In a certain code language, 'GATE' is written as 'TZGV' and 'PASS' is written as 'KZHH'. How will 'HOME' be written in that language?

- Ans
- 1. SLNV
 - 2. SNVL
 - 3. VNLS
 - 4. SNLV

Question ID : 26433070329
Status : Answered
Chosen Option : 1

Q.17 Three statements are given, followed by three conclusions numbered I, II and III. Assuming the statements to be true, even if they seem to be at variance with commonly known facts, decide which of the conclusions logically follow(s) from the statements.

Statements:
Some beans are potatoes.
All carrots are potatoes.
All gourds are potatoes.

Conclusions:
I. Some gourds are beans.
II. Some carrots are gourds.
III. Some potatoes are gourds.

- Ans
- 1. Only conclusions I and III follow
 - 2. Only conclusion III follows
 - 3. All conclusions follow
 - 4. Only conclusions II and III follow

Question ID : 26433091001
Status : Answered
Chosen Option : 2

Q.18 Seven girls Rita, Sita, Gita, Mita, Anita, Binita, and Sunita are sitting around a circular table facing the centre. Rita and Gita are not sitting next to each other. Sunita is sitting between Binita and Mita. Mita is sitting to the immediate left of Rita. Sita is sitting between Anita and Gita. Who is sitting to the immediate left of Anita?

- Ans
- 1. Sunita
 - 2. Sita
 - 3. Binita
 - 4. Rita

Question ID : 264330114204
 Status : Answered
 Chosen Option : 4

Q.19 Select the correct mirror image of the given figure, when the mirror is placed at MN as shown below.



- Ans
- 1. h N g 6 2 5 D
 - 2. h N g 2 5 D
 - 3. h N g 2 5 D
 - 4. h N g 2 5 D

Question ID : 26433090149
 Status : Answered
 Chosen Option : 2

Q.20 Select the option that is related to the third word in the same way as the second word is related to the first word.

(The words must be considered as meaningful English words and must not be related to each other based on the number of letters/ number of consonants / vowels in the word)

Binocular : View :: Spanner : ?

- Ans
- 1. Feed
 - 2. Grip
 - 3. Amplify
 - 4. Scoop

Question ID : 26433068055
 Status : Answered
 Chosen Option : 3

Section : Part-B-General Knowledge and General awareness

Q.1 The term 'Shido' is used in Judo for _____.

- Ans
- 1. minor penalty
 - 2. throwing skill
 - 3. defensive skill
 - 4. points

Question ID : 26433092334
 Status : Not Answered
 Chosen Option : --

Q.2 Who resigned as Chief minister of Maharashtra following Supreme Court of India not admitting the stay petition of Shiv Sena against the Motion of no confidence in June 2022?

- Ans** 1. Uddhav Thackeray
 2. Devendra Fadnavis
 3. Eknath Shinde
 4. Urmila Matondkar

Question ID : 264330114926
Status : Answered
Chosen Option : 1

Q.3 _____ is an indication of the total borrowings needed by the government.

- Ans** 1. fiscal growth
 2. fiscal deficit
 3. fiscal balance
 4. fiscal surplus

Question ID : 264330115390
Status : Answered
Chosen Option : 2

Q.4 Budget is a statement of estimated receipts and expenditures of the government in respect of every _____.

- Ans** 1. calendar year
 2. capital year
 3. financial year
 4. previous year

Question ID : 264330115274
Status : Answered
Chosen Option : 1

Q.5 Shri Bhagwant Mann became the Chief Minister of _____ state/union territory of India in March 2022.

- Ans** 1. Uttarakhand
 2. Delhi
 3. Punjab
 4. Haryana

Question ID : 264330114890
Status : Answered
Chosen Option : 3

Q.6 सुजाता महापात्रा ने _____ के लिए संगीत नाटक अकादमी पुरस्कार जीता है।

- Ans** 1. ओडिसी
 2. कथक
 3. फ्यूजन डांस
 4. आधुनिक नृत्य

Question ID : 264330115896
Status : Answered
Chosen Option : 1

Q.7 Who was elected as the first woman speaker of Uttarakhand Legislative Assembly in March 2022?

- Ans 1. Ritu Khanduri
 2. Madhabi Puri Buch
 3. Abhilasha Barak
 4. Santishree Pandit

Question ID : 264330114977
Status : Answered
Chosen Option : 1

Q.8 Articles _____ in Part VI of the Constitution deals with the organisation, composition, duration, officers, procedures, privileges, powers and so on of the state legislature.

- Ans 1. 158 to 200
 2. 168 to 212
 3. 150 to 168
 4. 150 to 212

Question ID : 26433089917
Status : Not Answered
Chosen Option : --

Q.9 निम्नलिखित में से किस कारण से खेती की 'काटो और जलाओ (slash and burn)' विधि अपनाई जाती है?

- Ans 1. क्षेत्र को जल्दी से खाली करने के लिए
 2. मिट्टी की उर्वरता को कम करने के लिए
 3. मिट्टी की उर्वरता को पुनःपूर्ति करने के लिए
 4. प्रदूषण उत्पन्न करने के लिए

Question ID : 264330115521
Status : Answered
Chosen Option : 1

Q.10 Mohiniyattam dance is performed by women in honour of the Hindu god _____ in his incarnation as the enchantress Mohini.

- Ans 1. Rama
 2. Vishnu
 3. Shiva
 4. Krishna

Question ID : 264330115060
Status : Answered
Chosen Option : 2

Q.11 भारत में मेघालय राज्य के निम्नलिखित में से किस शहर में सबसे अधिक वर्षा होती है?

- Ans 1. शिलांग
 2. मौसिनराम
 3. जोवाई
 4. बाघमारा

Question ID : 264330115976
Status : Answered
Chosen Option : 3

Q.12 Aryabhata was India's first artificial satellite in space, launched in the year _____.

- Ans
- 1. 1925
 - 2. 1990
 - 3. 1975
 - 4. 1945

Question ID : 264330115683
Status : Answered
Chosen Option : 2

Q.13 The first layer of earth's atmosphere is _____.

- Ans
- 1. Troposphere
 - 2. Stratosphere
 - 3. Thermosphere
 - 4. Mesosphere

Question ID : 264330116094
Status : Answered
Chosen Option : 1

Q.14 Ganesh Chaturthi, celebrated in the honour of God Ganesh, is observed in the Hindu month of _____.

- Ans
- 1. Chaitra
 - 2. Phalguna
 - 3. Bhadrapada
 - 4. Kartika

Question ID : 264330115102
Status : Not Answered
Chosen Option : --

Q.15 The rate at which the Reserve Bank is ready to buy or rediscount bills of exchange or other commercial papers is called the _____.

- Ans
- 1. Bank Rate
 - 2. Cash Reserve Ratio
 - 3. Reverse Repo Rate
 - 4. Repo Rate

Question ID : 26433054805
Status : Answered
Chosen Option : 3

Q.16 NH_4Cl is the chemical formula for which of the following elements?

- Ans
- 1. Silicon Dioxide
 - 2. Potassium Nitrate
 - 3. Carbonyl Dichloride
 - 4. Ammonium Chloride

Question ID : 264330115161
Status : Answered
Chosen Option : 4

Q.17 Which of the following city hosted the 2022 Commonwealth games?

- Ans 1. Glasgow
 2. Delhi
 3. Gold Coast
 4. Birmingham

Question ID : 264330115921
Status : Answered
Chosen Option : 4

Q.18 निम्नलिखित का मिलान करें:

- a) कच्चे माल को तैयार उत्पादों में बदलना i) खाद्य विज्ञान
b) भोजन का अध्ययन ii) खाद्य संसाधन
c) खाद्य उत्पादों का बड़े पैमाने पर उत्पादन iii) खाद्य प्रौद्योगिकी
d) खाद्य स्थिरता को बढ़ावा देता है iv) खाद्य निर्माण

- Ans 1. a-iii, b-i, c-ii, d-iv
 2. a-i, b-ii, c-iii, d-iv
 3. a-ii, b-i, c-iv, d-iii
 4. a-iv, b-iii, c-ii, d-i

Question ID : 264330115267
Status : Answered
Chosen Option : 1

Q.19 How many Schedules are there in the Constitution of India?

- Ans 1. 12
 2. 10
 3. 11
 4. 9

Question ID : 264330115609
Status : Answered
Chosen Option : 1

Q.20 The Moth ki Masjid was built in the reign of _____ ruler.

- Ans 1. Firuz Shah Tughluq
 2. Sikandar Lodi
 3. Muhammad Tughluq
 4. Bahlul Lodi

Question ID : 26433089856
Status : Not Answered
Chosen Option : --

Section : Part-C-Elementary Mathematics

Q.1 In a school, there are 200 students. If the ratio of the number of boys and the number of girls is 9 : 1, then find the mean proportion between the number of boys and that of girls in the school.

- Ans 1. 60
 2. 30
 3. 40
 4. 50

Question ID : 26433075192
Status : Answered
Chosen Option : 1

Q.2 Which number should be subtracted from 17, 30, 22 and 40 so that the obtained numbers may become proportional?

- Ans
- 1. 2
 - 2. 4
 - 3. 5
 - 4. 3

Question ID : 26433073087
Status : Answered
Chosen Option : 2

Q.3 A man purchased two items at the same price and sold one at a profit of 15% and the other at a loss of 5%. If the difference between the two selling prices is ₹80, then what is the cost price of one item?

- Ans
- 1. ₹400
 - 2. ₹500
 - 3. ₹300
 - 4. ₹600

Question ID : 26433080106
Status : Answered
Chosen Option : 1

Q.4 A company offers different types of discounts schemes.

- (i) Two successive discounts of 10% and 20%
- (ii) Buy 1 get 1 free
- (iii) Buy 5 get 3 free
- (iv) Buy 5 get 6

Which scheme has the minimum discount percentage?

- Ans
- 1. (iv)
 - 2. (iii)
 - 3. (i)
 - 4. (ii)

Question ID : 26433087365
Status : Answered
Chosen Option : 3

Q.5 A thief noticing a policeman from a distance of 500 metres starts running at a speed of 8 km/h. The policeman chased him with a speed of 11 km/h. What is the distance run by the thief before he was caught? (Rounded off to two decimal places, if required)

- Ans
- 1. 1,333.33 metres
 - 2. 1,666.67 metres
 - 3. 4,000 metres
 - 4. 2,922 metres

Question ID : 26433080049
Status : Answered
Chosen Option : 1

Q.6 A person buys the stock of a company at Rs.12,000. If he sells that stock (a year later) he gets Rs.15,000. Determine the percentage profit earned.

- Ans**
- 1. 25%
 - 2. 35%
 - 3. 30%
 - 4. 40%

Question ID : 26433071307
Status : Answered
Chosen Option : 1

Q.7 The curved surface area of a right circular cylinder is 90.2 m^2 , and its radius is 70 cm, find its height (in m).

Take $\pi = \frac{22}{7}$

- Ans**
- 1. 24.5 m
 - 2. 21 m
 - 3. 20.5 m
 - 4. 23 m

Question ID : 26433076256
Status : Not Answered
Chosen Option : --

Q.8 Find the sum which becomes ₹1,166.40 after 2 years at the rate of 8% per annum on compound interest, compounding annually.

- Ans**
- 1. ₹1,100
 - 2. ₹1,150
 - 3. ₹1,000
 - 4. ₹900

Question ID : 26433087380
Status : Answered
Chosen Option : 3

Q.9 The area of the base of a right circular cone is 154 cm^2 and its height is 24 cm. The curved surface area of the cone is: (Use $\pi = \frac{22}{7}$)

- Ans**
- 1. 460 cm^2
 - 2. 550 cm^2
 - 3. 520 cm^2
 - 4. 480 cm^2

Question ID : 26433075483
Status : Answered
Chosen Option : 2

Q.10 A park had an average of 30 children playing on weekdays and an average of 60 children playing on weekends. Find the average number of children playing per day in the park for the month of June beginning with a Saturday.

- Ans
- 1. 45
 - 2. 60
 - 3. 40
 - 4. 30

Question ID : 264330116681
Status : Not Answered
Chosen Option : --

Q.11 The population of a town 3 years ago was 84000. Due to migration to cities, it decreases every year at the rate of 10 percent. The present population of the town is :

- Ans
- 1. 51563
 - 2. 61236
 - 3. 41526
 - 4. 63526

Question ID : 26433079881
Status : Answered
Chosen Option : 2

Q.12 The average income of 74 persons is Rs.5,200 and that of a manager is Rs.6,000. Then the average income of the whole group is (consider up to two decimals):

- Ans
- 1. Rs. 5,210.66
 - 2. Rs. 6,200.16
 - 3. Rs. 5,360.86
 - 4. Rs. 5,510.66

Question ID : 26433081008
Status : Answered
Chosen Option : 1

Q.13 The least value of 'a' for which the number 638a435 is completely divisible by 3 is:

- Ans
- 1. 2
 - 2. 3
 - 3. 4
 - 4. 1

Question ID : 26433075874
Status : Answered
Chosen Option : 4

Q.14 If 18 percent of A is equal to 40 percent of B, then what is the ratio of A : B?

- Ans
- 1. 10 : 9
 - 2. 20 : 9
 - 3. 9 : 11
 - 4. 11 : 9

Question ID : 26433079855
Status : Answered
Chosen Option : 2

Q.15 The shopkeeper gave 50 percent discount on marked price of Rs.750. What will be the selling price ?

- Ans
- 1. Rs. 657
 - 2. Rs. 370
 - 3. Rs. 375
 - 4. Rs. 250

Question ID : 264330116713
Status : Answered
Chosen Option : 3

Q.16 In an exam, a student scored 40% on the first paper out of a total of 200. How much percentage should the student score in the second paper out of 200 if he has to get 60% marks overall?

- Ans
- 1. 60%
 - 2. 85%
 - 3. 75%
 - 4. 80%

Question ID : 26433087349
Status : Answered
Chosen Option : 4

Q.17 A and B can finish a work in 15 days and 10 days, respectively. A started the work alone and after 5 days, B joined A in the work. They both did the remaining work. What is the total number of days to complete the work?

- Ans
- 1. $10\frac{1}{3}$ days
 - 2. 9 days
 - 3. $9\frac{2}{3}$ days
 - 4. $9\frac{1}{3}$ days

Question ID : 26433087392
Status : Answered
Chosen Option : 2

Q.18 If Ramesh walks at a speed of 15 km/h, instead of 12 km/h, he would have walked 2 km more in the same time. What is the actual distance (in km) travelled by Ramesh at 12 km/h in the same time?

- Ans
- 1. 8
 - 2. 10
 - 3. 6
 - 4. 9

Question ID : 26433064996
Status : Answered
Chosen Option : 1

Q.19 Work done by two men is equal to work done by three women, and work done by five women is equal to work done by seven boys. If 16 men can finish a work in 2 days, then in how many days the work will be completed by two boys?

- Ans 1. 33.6
 2. 28.3
 3. 23.8
 4. 36.3

Question ID : 26433066179
Status : Answered
Chosen Option : 1

Q.20 The smallest number exactly divisible by 104, 78 and 260 is P. If $P + 40 = Q^2$, then what is the positive value of Q?

- Ans 1. 40
 2. 39
 3. 26
 4. 80

Question ID : 264330116643
Status : Answered
Chosen Option : 1

Section : Part-D-English

Q.1 Select the most appropriate synonym for the underlined word in the given sentence.

The officer was not aware of the sedulous espionage.

- Ans 1. diligent
 2. dangerous
 3. sedate
 4. seduce

Question ID : 26433072076
Status : Answered
Chosen Option : 2

Q.2 Select the most appropriate option to fill in the blank.

We may _____ an example or two.

- Ans 1. site
 2. sight
 3. cite
 4. side

Question ID : 26433087944
Status : Answered
Chosen Option : 3

Q.3 The following sentence has been split into four segments. Identify the segment that contains a grammatical error.

I have waiting / anxiously / for my / exam results.

- Ans**
- 1. exam results
 - 2. I have waiting
 - 3. anxiously
 - 4. for my

Question ID : 264330108882
Status : Answered
Chosen Option : 2

Q.4 Select the most appropriate ANTONYM of the given word.

Obedient

- Ans**
- 1. Disobedient
 - 2. Docile
 - 3. Disciplined
 - 4. Meekness

Question ID : 26433072809
Status : Answered
Chosen Option : 1

Q.5 Select the option that can be used as a one-word substitute for the given group of words.

The study of ancient writings and scriptures

- Ans**
- 1. Alchemy
 - 2. Geology
 - 3. Ornithology
 - 4. Palaeography

Question ID : 26433086314
Status : Answered
Chosen Option : 4

Q.6 Select the correct idiom to substitute the underlined word segment in the following sentence.

When the teacher asked him about the homework, he started speaking vaguely to avoid talking about it .

- Ans**
- 1. beating around the bush
 - 2. searching around the room
 - 3. writing in the bush
 - 4. searching the bird in the bush

Question ID : 264330101447
Status : Answered
Chosen Option : 1

Q.7 Select the MISSPELT word.

- Ans**
- 1. Attain
 - 2. Farnish
 - 3. Allergy
 - 4. Fabulous

Question ID : 26433086338
Status : Answered
Chosen Option : 2

Q.8 Select the most appropriate synonym for the underlined word in the given sentence.

Wordsworth wished to work on his poems in solitude.

- Ans 1. seclusion
 2. security
 3. slumber
 4. satiety

Question ID : 26433073749
Status : Answered
Chosen Option : 1

Q.9 Select the most appropriate option that can substitute the underlined segment in the given sentence.

Rajiv helps his friends of solve real-life problems with several methods and approaches.

- Ans 1. helps his friends for solve
 2. helps his friends in solve
 3. help his friends of solve
 4. helps his friends to solve

Question ID : 264330103766
Status : Answered
Chosen Option : 4

Q.10 Select the most appropriate meaning of the underlined idiom in the given sentence.

The businessman agreed to grease the palm of the bank manager for a loan.

- Ans 1. To cooperate
 2. To remind
 3. To thank
 4. To bribe

Question ID : 26433071994
Status : Answered
Chosen Option : 4

Q.11 Select the most appropriate synonym of the underlined word.

Late morning, we took a stroll along the beach.

- Ans 1. scamper
 2. Sprint
 3. saunter
 4. jog

Question ID : 26433088837
Status : Answered
Chosen Option : 4

Q.12 Select the most appropriate option to fill in the blank.
The doctor instructed the patient to _____ up and down his house as an exercise.

- Ans 1. work
 2. walk
 3. chase
 4. wake

Question ID : 26433085595
Status : Answered
Chosen Option : 2

Q.13 Select the most appropriate option to fill in the blank.

It is surprising to see _____ (stale) apples available throughout the year.

- Ans 1. old
 2. musty
 3. stuffy
 4. fresh

Question ID : 26433060718
Status : Answered
Chosen Option : 4

Q.14 Select the option in which all the words are spelt correctly.

- Ans 1. My aunty arrivded at my home on the eve of Diwali.
 2. My aunty arrived at my home on the eve of Diwali.
 3. My aunty arived at my home on the eve of Diwali.
 4. My aunty arrived at my home on the eve of Diwali.

Question ID : 26433072285
Status : Answered
Chosen Option : 2

Q.15 Select the most appropriate ANTONYM of the word given in brackets to fill in the blank.

The curry was very _____ (distasteful). I ate it all.

- Ans 1. refined
 2. enchanting
 3. intoxicating
 4. delicious

Question ID : 26433070459
Status : Answered
Chosen Option : 4

Comprehension:

In the following passage, some words have been deleted. Read the passage carefully and select the most appropriate option to fill in each blank.

The set of relationships between people, (1) _____ their social position and roles, is referred to as society or human society. The people of a region, country, or even the (2) _____ world are referred to as a society. A society, as used in the sense of an organisation, is a group of people bound together by functional (3) _____, and may include qualities such as national or cultural identity, social solidarity, language or hierarchical organisation. Patterns of relationships between individuals who (4) _____ a common culture and institutions define human societies. A society, like other organisations or groups, permits its members to fulfil wants or wishes that they could not (5) _____ on their own.

SubQuestion No : 16

Q.16 Select the most appropriate option to fill in blank number 1.

- Ans** 1. including
 2. discounting
 3. developing
 4. resisting

Question ID : 26433088515
Status : Answered
Chosen Option : 1

Comprehension:

In the following passage, some words have been deleted. Read the passage carefully and select the most appropriate option to fill in each blank.

The set of relationships between people, (1) _____ their social position and roles, is referred to as society or human society. The people of a region, country, or even the (2) _____ world are referred to as a society. A society, as used in the sense of an organisation, is a group of people bound together by functional (3) _____, and may include qualities such as national or cultural identity, social solidarity, language or hierarchical organisation. Patterns of relationships between individuals who (4) _____ a common culture and institutions define human societies. A society, like other organisations or groups, permits its members to fulfil wants or wishes that they could not (5) _____ on their own.

SubQuestion No : 17

Q.17 Select the most appropriate option to fill in blank number 2.

- Ans** 1. illiterate
 2. primitive
 3. absolute
 4. entire

Question ID : 26433088516
Status : Answered
Chosen Option : 4

Comprehension:

In the following passage, some words have been deleted. Read the passage carefully and select the most appropriate option to fill in each blank.

The set of relationships between people, (1) _____ their social position and roles, is referred to as society or human society. The people of a region, country, or even the (2) _____ world are referred to as a society. A society, as used in the sense of an organisation, is a group of people bound together by functional (3) _____, and may include qualities such as national or cultural identity, social solidarity, language or hierarchical organisation. Patterns of relationships between individuals who (4) _____ a common culture and institutions define human societies. A society, like other organisations or groups, permits its members to fulfil wants or wishes that they could not (5) _____ on their own.

SubQuestion No : 18

Q.18 Select the most appropriate option to fill in blank number 3.

- Ans**
- 1. mutualism
 - 2. qualities
 - 3. interdependence
 - 4. exchange

Question ID : 26433088517
Status : Answered
Chosen Option : 1

Comprehension:

In the following passage, some words have been deleted. Read the passage carefully and select the most appropriate option to fill in each blank.

The set of relationships between people, (1) _____ their social position and roles, is referred to as society or human society. The people of a region, country, or even the (2) _____ world are referred to as a society. A society, as used in the sense of an organisation, is a group of people bound together by functional (3) _____, and may include qualities such as national or cultural identity, social solidarity, language or hierarchical organisation. Patterns of relationships between individuals who (4) _____ a common culture and institutions define human societies. A society, like other organisations or groups, permits its members to fulfil wants or wishes that they could not (5) _____ on their own.

SubQuestion No : 19

Q.19 Select the most appropriate option to fill in blank number 4.

- Ans**
- 1. share
 - 2. oppose
 - 3. protect
 - 4. divide

Question ID : 26433088518
Status : Answered
Chosen Option : 1

Comprehension:

In the following passage, some words have been deleted. Read the passage carefully and select the most appropriate option to fill in each blank.

The set of relationships between people, (1) _____ their social position and roles, is referred to as society or human society. The people of a region, country, or even the (2) _____ world are referred to as a society. A society, as used in the sense of an organisation, is a group of people bound together by functional (3) _____, and may include qualities such as national or cultural identity, social solidarity, language or hierarchical organisation. Patterns of relationships between individuals who (4) _____ a common culture and institutions define human societies. A society, like other organisations or groups, permits its members to fulfil wants or wishes that they could not (5) _____ on their own.

SubQuestion No : 20

Q.20 Select the most appropriate option to fill in blank number 5.

Ans 1. accomplish

2. give up

3. escalate

4. evacuate

Question ID : 26433088519

Status : Answered

Chosen Option : 1

Section : Part-D-Hindi

Q.1 "संजय भारतीय मूल्यों का तिरस्कार करता है।"

उक्त वाक्य में प्रयुक्त 'तिरस्कार' के स्थान पर उसके समानार्थी शब्द का प्रयोग निम्न में से किस वाक्य में किया गया है?

Ans 1. संजय भारतीय मूल्यों की सराहना करता है।

2. संजय भारतीय मूल्यों की प्रशंसा करता है।

3. संजय भारतीय मूल्यों को बदनाम करता है।

4. संजय भारतीय मूल्यों की उपेक्षा करता है।

Question ID : 26433085147

Status : Not Answered

Chosen Option : --

Q.2 'दुर्योधन ने कुचक्र रचकर पांडवों को चौसर में हरा दिया।'

निम्नलिखित में से कौन सा शब्द 'कुचक्र' का पर्यायवाची नहीं है?

Ans 1. साजिश

2. टोल

3. अभिसंधि

4. दुरभिसंधि

Question ID : 26433080922

Status : Not Answered

Chosen Option : --

Q.3 निम्न में से कौन से वाक्य में कर्मकारक का गलत प्रयोग हुआ है?

Ans 1. रमेश ने गोपाल को मारा।

2. कविता पत्र को लिखती है।

3. लड़का कुत्ते को मारता है।

4. सीता ने चिट्ठी लिखी।

Question ID : 26433063033

Status : Not Answered

Chosen Option : --

Q.4 ' _____ लेने की फुरसत न होना।' उपरोक्त मुहावरे में रिक्त स्थान की पूर्ति उचित शब्द द्वारा कीजिए।

- Ans 1. सांस
 2. मन
 3. फूंक
 4. खांसी

Question ID : 26433069692
Status : Not Answered
Chosen Option : --

Q.5 उन्होंने अपने बड़े बेटे को श्रद्धांजलि दे दी। उपरोक्त वाक्य में रेखांकित पद के स्थान पर सबसे उपयुक्त शब्द निम्न में से कौन सा होगा?

- Ans 1. पुष्पांजलि
 2. गीतांजलि
 3. अंजलि
 4. तिलांजलि

Question ID : 26433079175
Status : Not Answered
Chosen Option : --

Q.6 देश की स्थिति अच्छा नहीं है।' इस वाक्य में कौन सा शब्द अशुद्ध है?

- Ans 1. नहीं
 2. स्थिति
 3. देश
 4. अच्छा

Question ID : 26433066803
Status : Not Answered
Chosen Option : --

Q.7 'मेरे से कुछ ना पूछो।' इस वाक्य में रेखांकित वाक्य खंड के स्थान पर क्या आएगा?

- Ans 1. मेरे
 2. मुझको
 3. मुझसे
 4. मैं

Question ID : 26433062198
Status : Not Answered
Chosen Option : --

Q.8 निम्नलिखित में से शुद्ध वाक्य कौन-सा है?

- Ans 1. वह आरोग्य हो गया।
 2. एक-एक करके सभी के सभी मर गए।
 3. चरखा कातनी चाहिए।
 4. चरखा चलाना चाहिए।

Question ID : 26433085140
Status : Not Answered
Chosen Option : --

Q.9 निम्नलिखित मुहावरे के लिए उपयुक्त सार्थक शब्द क्या होगा?
चादर तान कर सोना

- Ans
- 1. शोक मनाना
 - 2. बढ़िया आचरण करना
 - 3. निश्चित हो जाना
 - 4. किसी की निंदा करना

Question ID : 26433065766
Status : Not Answered
Chosen Option : --

Q.10 निम्नलिखित वाक्य में किस प्रकार की त्रुटि है?
'इस प्रकार की निबंध में समाज का समग्र चित्र दिखाई देता है।'

- Ans
- 1. लिंग सम्बन्धी त्रुटि
 - 2. क्रिया सम्बन्धी त्रुटि
 - 3. अनुपयुक्त शब्द प्रयोग त्रुटि
 - 4. कारक सम्बन्धी त्रुटि

Question ID : 26433063023
Status : Not Answered
Chosen Option : --

Q.11 निम्नलिखित विकल्पों में से कौन सा एक वाक्य संयोजक क्रिया-विशेषण से सम्बन्ध रखता है?

- Ans
- 1. तुम किताब खोलकर पढ़ोगे।
 - 2. वह खाकर स्कूल गया।
 - 3. जब आप आज्ञा देंगे, तब मैं उठूँगा।
 - 4. मैं जाकर देखूँगा।

Question ID : 26433062959
Status : Not Answered
Chosen Option : --

Q.12 'अंक में स्थान पाया हुआ' वाक्यांश के लिए एक शब्द क्या होगा?

- Ans
- 1. अकिंचन
 - 2. अंकस्थ
 - 3. अंकुर
 - 4. अंडज

Question ID : 26433062157
Status : Not Answered
Chosen Option : --

Q.13 निम्न में से कौन-सा शब्द 'राजा' शब्द का पर्यायवाची शब्द नहीं है?

- Ans
- 1. महीप
 - 2. भूपति
 - 3. स्वर्गाधिपति
 - 4. नरपति

Question ID : 26433067078
Status : Not Answered
Chosen Option : --

Q.14 'आपके रहन-सहन का दर्जा ऊंचा है।' इस वाक्य में रेखांकित शब्द के स्थान पर उचित शब्द क्या होगा?

- Ans 1. तरीका
 2. कुछ
 3. भांति
 4. स्तर

Question ID : 26433062783
Status : Not Answered
Chosen Option : --

Q.15 "उसके द्वारा किए गए अच्छे कार्यों के कारण वह समाज में _____ है।"
उपरोक्त वाक्य में रिक्त स्थान पर निम्न में से किस शब्द का प्रयोग उपयुक्त होगा?

- Ans 1. बदनाम
 2. कुख्यात
 3. विख्यात
 4. गुमनाम

Question ID : 26433067009
Status : Not Answered
Chosen Option : --

Comprehension:

निम्नलिखित गद्यांश में कुछ शब्दों को हटा दिया गया है। दिए गए विकल्पों की सहायता से रिक्त स्थानों की पूर्ति कीजिए। प्रत्येक संख्या के लिए सबसे उपयुक्त विकल्प का चयन कीजिए।
मनुष्य सामाजिक प्राणी है, उसका निकटतम समाज 1. _____ ही है। इसी प्रकार हमारे 2. _____ के निकटतम राष्ट्र हमारे पड़ोसी ही कहलाएँगे। यह पड़ोसी ही हैं जो हमें सुख और 3. _____ से रहने देते हैं। इसी के साथ हम अपने पड़ोसियों के साथ जैसा 4. _____ करेंगे, वे भी हमारे साथ 5. _____ ही करेंगे।

SubQuestion No : 16

Q.16 रिक्त स्थान 1 की पूर्ति के लिए सबसे उपयुक्त विकल्प का चयन कीजिए।

- Ans 1. उच्च
 2. हमही
 3. पड़ोसी
 4. संबंधी

Question ID : 264330111053
Status : Not Answered
Chosen Option : --

Comprehension:

निम्नलिखित गद्यांश में कुछ शब्दों को हटा दिया गया है। दिए गए विकल्पों की सहायता से रिक्त स्थानों की पूर्ति कीजिए। प्रत्येक संख्या के लिए सबसे उपयुक्त विकल्प का चयन कीजिए।
मनुष्य सामाजिक प्राणी है, उसका निकटतम समाज 1. _____ ही है। इसी प्रकार हमारे 2. _____ के निकटतम राष्ट्र हमारे पड़ोसी ही कहलाएँगे। यह पड़ोसी ही हैं जो हमें सुख और 3. _____ से रहने देते हैं। इसी के साथ हम अपने पड़ोसियों के साथ जैसा 4. _____ करेंगे, वे भी हमारे साथ 5. _____ ही करेंगे।

SubQuestion No : 17

Q.17 रिक्त स्थान 2 की पूर्ति के लिए सबसे उपयुक्त विकल्प का चयन कीजिए।

- Ans 1. सहायक
 2. राष्ट्र
 3. मैत्री
 4. व्यक्ति

Question ID : 264330111054
Status : Not Answered
Chosen Option : --

Comprehension:

निम्नलिखित गद्यांश में कुछ शब्दों को हटा दिया गया है। दिए गए विकल्पों की सहायता से रिक्त स्थानों की पूर्ति कीजिए। प्रत्येक संख्या के लिए सबसे उपयुक्त विकल्प का चयन कीजिए।
मनुष्य सामाजिक प्राणी है, उसका निकटतम समाज 1. _____ ही है। इसी प्रकार हमारे 2. _____ के निकटतम राष्ट्र हमारे पड़ोसी ही कहलाएँगे। यह पड़ोसी ही हैं जो हमें सुख और 3. _____ से रहने देते हैं। इसी के साथ हम अपने पड़ोसियों के साथ जैसा 4. _____ करेंगे, वे भी हमारे साथ 5. _____ ही करेंगे।

SubQuestion No : 18**Q.18 रिक्त स्थान 3 की पूर्ति के लिए सबसे उपयुक्त विकल्प का चयन कीजिए।**

- Ans 1. नींद
 2. बातों
 3. शांति
 4. दुःख

Question ID : 264330111055
Status : Not Answered
Chosen Option : --

Comprehension:

निम्नलिखित गद्यांश में कुछ शब्दों को हटा दिया गया है। दिए गए विकल्पों की सहायता से रिक्त स्थानों की पूर्ति कीजिए। प्रत्येक संख्या के लिए सबसे उपयुक्त विकल्प का चयन कीजिए।
मनुष्य सामाजिक प्राणी है, उसका निकटतम समाज 1. _____ ही है। इसी प्रकार हमारे 2. _____ के निकटतम राष्ट्र हमारे पड़ोसी ही कहलाएँगे। यह पड़ोसी ही हैं जो हमें सुख और 3. _____ से रहने देते हैं। इसी के साथ हम अपने पड़ोसियों के साथ जैसा 4. _____ करेंगे, वे भी हमारे साथ 5. _____ ही करेंगे।

SubQuestion No : 19**Q.19 रिक्त स्थान 4 की पूर्ति के लिए सबसे उपयुक्त विकल्प का चयन कीजिए।**

- Ans 1. सत्कार
 2. प्रतिकार
 3. व्यवहार
 4. उपकार

Question ID : 264330111056
Status : Not Answered
Chosen Option : --

Comprehension:

निम्नलिखित गद्यांश में कुछ शब्दों को हटा दिया गया है। दिए गए विकल्पों की सहायता से रिक्त स्थानों की पूर्ति कीजिए। प्रत्येक संख्या के लिए सबसे उपयुक्त विकल्प का चयन कीजिए।
मनुष्य सामाजिक प्राणी है, उसका निकटतम समाज 1. _____ ही है। इसी प्रकार हमारे 2. _____ के निकटतम राष्ट्र हमारे पड़ोसी ही कहलाएँगे। यह पड़ोसी ही हैं जो हमें सुख और 3. _____ से रहने देते हैं। इसी के साथ हम अपने पड़ोसियों के साथ जैसा 4. _____ करेंगे, वे भी हमारे साथ 5. _____ ही करेंगे।

SubQuestion No : 20**Q.20 रिक्त स्थान 5 की पूर्ति के लिए सबसे उपयुक्त विकल्प का चयन कीजिए।**

- Ans 1. जैसा
 2. कैसा
 3. वैसा
 4. प्रेम

Question ID : 264330111057
Status : Not Answered
Chosen Option : --