

# Constable GD in CAPFs SSF Rifleman GD in Assam Rifles and Sepoy in NCB Examination 2022

Roll Number	<a href="http://www.govtjobsalert.in">www.govtjobsalert.in</a>
Candidate Name	<a href="http://www.govtjobsalert.in">www.govtjobsalert.in</a>
Venue Name	iON Digital Zone iDZ Vellore
Exam Date	30/01/2023
Exam Time	9:00 AM - 10:00 AM
Subject	Constable GD Examination 2022

## Section : Part-A-General Intelligence and Reasoning

Q.1 Select the correct mirror image of the given figure when the mirror is placed at MN as shown below.

U n t 5 7 L E

M ————— N

Ans

1. U n t 5 7 L E
2. n u t 5 7 L E
3. n u t 7 5 L E
4. n u t 5 7 L E

Question ID : 26433080802

Status : Answered

Chosen Option : 2

Q.2 In this question, three statements are given, followed by two conclusions numbered I and II. Assuming the statements to be true, even if they seem to be at variance with commonly known facts, decide which of the conclusions logically follows/follow from the statements.

Statements:

Some doctors are scholars.

All scholars are intelligent.

All intelligent are smart.

Conclusions:

I. Some doctors are smart.

II. All scholars are smart.

Ans

1. Neither conclusion I nor II follows.
2. Both conclusions I and II follow.
3. Only conclusion II follows.
4. Only conclusion I follows.

Question ID : 26433070391

Status : Answered

Chosen Option : 2

Q.3 In a certain code language, 'heaven plate' is coded as 'flower rage', 'curtain kingdom' is coded as 'computer blanket', 'kingdom plate' is coded as 'blanket rage', and 'heaven curtain' is coded as 'flower computer'. What is the code word for 'kingdom'?

- Ans
- 1. blanket
  - 2. rage
  - 3. flower
  - 4. plate

Question ID : 26433079366  
Status : Answered  
Chosen Option : 2

Q.4 In a certain code language, FUTURE is written as 'KWYWWG', and SHREWD is written as 'XJWGBF'. How will 'SAILOR' be written in the same code language?

- Ans
- 1. XCNMTT
  - 2. XCNNTT
  - 3. XCMMTT
  - 4. XCMNTT

Question ID : 26433067993  
Status : Answered  
Chosen Option : 1

Q.5 Select the number from among the given options that can replace the question mark (?) in the following series.

$$\frac{1}{205}, \frac{1}{164}, \frac{1}{123}, \frac{1}{82}, ?$$

- Ans
- 1.  $\frac{1}{19}$
  - 2.  $\frac{1}{22}$
  - 3.  $\frac{1}{41}$
  - 4.  $\frac{1}{36}$

Question ID : 26433074528  
Status : Answered  
Chosen Option : 2

**Q.6** Which two signs should be interchanged to make the below equation mathematically correct?

$$112 - 8 + 96 \div 16 \times 20 = 0$$

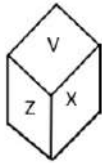
- Ans
- 1. + and  $\div$
  - 2. - and +
  - 3.  $\times$  and +
  - 4. - and  $\times$

Question ID : 264330117532

Status : Answered

Chosen Option : 2

**Q.7** Two different positions of the same dice are shown having alphabets U to Z. Find the alphabet on the face opposite the face showing 'U'.



- Ans
- 1. X
  - 2. Y
  - 3. V
  - 4. W

Question ID : 26433085525

Status : Answered

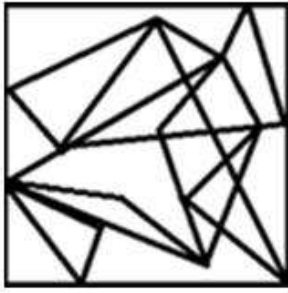
Chosen Option : 1

Q.8 Select the option figure in which the given figure is embedded (rotation is NOT allowed).

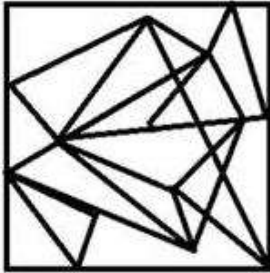


Ans

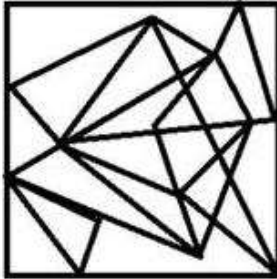
✗ 1.



✗ 2.



✓ 3.



✗ 4.



Question ID : 26433069592

Status : Answered

Chosen Option : 3

Q.9 A,B,C,D,E and F are six friends sitting around a circular table, facing the centre of the table. B is the immediate neighbour of C and E. A is the immediate neighbour of F and D.F is sitting to the immediate left of C. Who is sitting between A and E?

- Ans
- 1. B
  - 2. F
  - 3. C
  - 4. D

Question ID : 26433091414  
Status : Answered  
Chosen Option : 2

Q.10 Select the set in which the numbers are related in the same way as are the numbers of the following set.

(NOTE : Operations should be performed on the whole numbers, without breaking down the numbers into its constituent digits. E.g. 13 – Operations on 13 such as adding /subtracting/multiplying etc. to 13 can be performed. Breaking down 13 into 1 and 3 and then performing mathematical operations on 1 and 3 is NOT allowed)  
(15, 16, 155)  
(12, 13, 125)

- Ans
- 1. (18, 12, 150)
  - 2. (13, 15, 150)
  - 3. (21, 15, 195)
  - 4. (9, 18, 145)

Question ID : 26433076485  
Status : Answered  
Chosen Option : 2

Q.11 Select the option that is related to the third word in the same way as the second word is related to the first word.)

(The words must be considered as meaningful English words and must not be related to each other based on the number of letters/number of consonants/vowels in the word)

Guilt : Innocence :: Jovial : ?

- Ans
- 1. Gloomy
  - 2. Lively
  - 3. Bright
  - 4. Jaunty

Question ID : 26433079482  
Status : Answered  
Chosen Option : 2

Q.12 Which of the following letter-clusters will replace the question mark (?) in the given series?

CXGZ, FUJW, IRMT, ?, OLSN

- Ans
- 1. LPOQ
  - 2. LOPQ
  - 3. MOPP
  - 4. LPPQ

Question ID : 26433076436  
Status : Answered  
Chosen Option : 2

Q.13 Which option represents the correct order of the given words as they would appear in the English dictionary?

- 1 double
- 2 doctor
- 3 domestic
- 4 domicile
- 5 document

Ans  1. 2,3,5,1,4

2. 2,5,3,4,1

3. 2,4,5,1,3

4. 2,5,4,1,3

Question ID : 26433069284

Status : Answered

Chosen Option : 2

WWW.GOVtjobsalert.in

Q.14 Which figure should replace the question mark (?) if the series were to be continued?

V	▷	3	▷	3	□	T	□	
	X		V		▷		3	
T	□	3	□	T	X	V	X	T
						X	V	▷
								?

Ans

✓ 1.

T		X
	□	
3	▷	V

✗ 2.

T		X
	□	
3	V	▷

✗ 3.

T		3
	X	
□	▷	V

✗ 4.

▷		□
	T	
V	X	3

Question ID : 26433076636  
 Status : Answered  
 Chosen Option : 4

Q.15 Nicole is Dion's sister. Vanessa is Dion's mother. Raj is Vanessa's father. Anjali is Raj's mother. Paul is Raj's father. How is Vanessa related to Nicole?

- Ans
- ✗ 1. Mother's mother
  - ✗ 2. Mother's sister
  - ✓ 3. Mother
  - ✗ 4. Sister

Question ID : 26433074597  
 Status : Answered  
 Chosen Option : 2

Q.16 Select the option that is related to the fifth letter-cluster in the same way as the second letter-cluster is related to the first letter-cluster and the fourth letter-cluster is related to the third letter-cluster.

HIGH: SGRJ :: MOVE: NMCJ :: BEAT: ?

- Ans
- 1. VHZV
  - 2. YVZG
  - 3. YCXV
  - 4. DWXU

Question ID : 26433057492  
Status : Answered  
Chosen Option : 2

Q.17 Six friends are sitting in a circle. All of them are facing the centre. Palak is an immediate neighbour of Kumud. Jhalak sits third to the left of Mehak. Rahat sits fourth to the right of Jhalak. Kumud sits second to the right of Chahak. Who sits third to the right of Rahat?

- Ans
- 1. Kumud
  - 2. Palak
  - 3. Mehak
  - 4. Chahak

Question ID : 26433069505  
Status : Answered  
Chosen Option : 2

Q.18 Which letter-cluster will replace the question mark (?) to complete the given series?  
MKLJ, NLMK, OMNL, ?, QOPN

- Ans
- 1. PNLN
  - 2. MNOP
  - 3. PNOM
  - 4. PONM

Question ID : 26433067711  
Status : Answered  
Chosen Option : 4

Q.19 Which two signs should be interchanged to make the below equation mathematically correct?

$$20 + 34 - 81 \times 9 \div 2 = 36$$

- Ans
- 1. ÷ and -
  - 2. + and -
  - 3. × and ÷
  - 4. + and ×

Question ID : 264330114196  
Status : Answered  
Chosen Option : 2



**Q.20** Which of the following numbers will replace the question mark (?) in the given series?  
3, 5, 9, ?, 33, 65

- Ans  1. 17  
 2. 22  
 3. 16  
 4. 19

Question ID : 26433070217  
Status : Answered  
Chosen Option : 3

Section : Part-B-General Knowledge and General awareness

**Q.1** In which of the following locations can you build large dams to generate hydel power?

- Ans  1. Hilly terrains  
 2. Desert areas  
 3. Plains  
 4. Oceans

Question ID : 26433091474  
Status : Answered  
Chosen Option : 4

**Q.2** Who is the new Secretary of The Indian Council of Agricultural Research (ICAR) effective from 1st August 2022?

- Ans  1. Amitabh Kant  
 2. Himanshu Pathak  
 3. Sanjay Agarwal  
 4. Trilochan Mohapatra

Question ID : 264330115022  
Status : Answered  
Chosen Option : 4

**Q.3** Mitochondria have \_\_\_\_\_ membrane coverings.

- Ans  1. 2  
 2. 4  
 3. 5  
 4. 3

Question ID : 264330115208  
Status : Answered  
Chosen Option : 2

Q.4 Which of the following martial dances is related to Uttarakhand?

- Ans
- 1. Thang-taa
  - 2. Kalari Paattu
  - 3. Gatka
  - 4. Choliya

Question ID : 26433071663  
Status : Answered  
Chosen Option : 2

Q.5 \_\_\_\_\_ is used to control the demand and supply of money.

- Ans
- 1. Credit control
  - 2. Debit control
  - 3. Equity control
  - 4. Share control

Question ID : 264330115319  
Status : Answered  
Chosen Option : 2

Q.6 Who among the following became the 49th Chief Justice of India in August 2022?

- Ans
- 1. Fali Sam Nariman
  - 2. Gopal Subramaniam
  - 3. Mukul Rohatgi
  - 4. Uday Umesh Lalit

Question ID : 264330114915  
Status : Answered  
Chosen Option : 2

Q.7 In which layer of the earth do natural earthquakes occur?

- Ans
- 1. Lithosphere
  - 2. Inner Core
  - 3. Mesosphere
  - 4. Asthenosphere

Question ID : 264330116002  
Status : Answered  
Chosen Option : 2

Q.8 The proportion of India's GDP contributed by the \_\_\_\_\_ sector increased in the period from 11.8 per cent in 1950-51 to 24.6 per cent in 1990-91.

- Ans
- 1. industrial
  - 2. defence
  - 3. services
  - 4. agricultural

Question ID : 264330116124  
Status : Answered  
Chosen Option : 4

**Q.9 Which Article of the Indian Constitution talks about the duties and powers of the Comptroller and Auditor General of India?**

- Ans
- 1. Article 160
  - 2. Article 148
  - 3. Article 149
  - 4. Article 165

Question ID : 26433090674  
Status : Answered  
Chosen Option : 3

**Q.10 \_\_\_\_\_ is the chairperson of National Institution for Transforming India (NITI) Aayog, as on November 2022.**

- Ans
- 1. Mr. Arvind Kejriwal
  - 2. Mr. Amit Shah
  - 3. Mr. Narendra Modi
  - 4. Mr. Nitin Gadkari

Question ID : 264330115381  
Status : Answered  
Chosen Option : 3

**Q.11 \_\_\_\_\_(ODOP) aims to reap the benefit of scale in terms of procurement of inputs, availing common services and marketing of products.**

- Ans
- 1. One District One Product
  - 2. One District One Purpose
  - 3. One Difference One Product
  - 4. One District One Person

Question ID : 264330116171  
Status : Answered  
Chosen Option : 1

**Q.12 In how many phases was the last Census of 2011 conducted in India?**

- Ans
- 1. 1
  - 2. 3
  - 3. 4
  - 4. 2

Question ID : 264330116034  
Status : Answered  
Chosen Option : 2

Q.13 The Brabourne Cricket Stadium is located in which of the following state of India?

- Ans  1. Maharashtra  
 2. Kerala  
 3. Bihar  
 4. Madhya Pradesh

Question ID : 264330116253  
Status : Answered  
Chosen Option : 4

Q.14 To develop scientific temper and humanism is a:

- Ans  1. constitutional remedy  
 2. Fundamental Right  
 3. Fundamental Duty  
 4. Directive principles of state policy

Question ID : 26433080978  
Status : Answered  
Chosen Option : 2

Q.15 When did Ashoka, the Mauryan ruler, die?

- Ans  1. 245 BC  
 2. 232 BC  
 3. 249 BC  
 4. 258 BC

Question ID : 264330115453  
Status : Answered  
Chosen Option : 3

Q.16 The couple who won Padma Bhushan in 2009 for Bharatanatyam is \_\_\_\_\_.

- Ans  1. Mahaboob Subhani and Kaleeshabi Mahboob  
 2. K.V. Sampath Kumar and Vidushi K.S. Jayalakshmi  
 3. Vannadiil Pudiyaiveettil Dhananjayan and Shanta Dhananjayan  
 4. Krishna Ella and Suchitra Ella

Question ID : 264330115825  
Status : Answered  
Chosen Option : 2

**Q.17** Jeev Milkha Singh's became the first player from India to join the European Tour in 1998. He won:  
(i) four European Tour Titles  
(ii) four Japan Golf Tour titles  
(iii) six Asian Tour tiles

- Ans**
- 1. Only (i)
  - 2. Only (iii)
  - 3. Only (ii)
  - 4. (i), (ii) and (iii)

Question ID : 26433089923  
Status : Answered  
Chosen Option : 2

**Q.18** Which industry do cotton, jute, silk, woollen textiles, sugar and edible oil, etc. belong to ?

- Ans**
- 1. agro based industry
  - 2. heavy industry
  - 3. joint sector industry
  - 4. mineral based industry

Question ID : 264330115566  
Status : Answered  
Chosen Option : 2

**Q.19** In \_\_\_\_\_, the East India Company acquired a charter from the ruler of England, Queen Elizabeth I, granting it the sole right to trade with the East.

- Ans**
- 1. 1624
  - 2. 1600
  - 3. 1610
  - 4. 1615

Question ID : 264330115700  
Status : Answered  
Chosen Option : 2

**Q.20** The harvest festival 'Nabanna' is celebrated in \_\_\_\_\_ .

- Ans**
- 1. West Bengal
  - 2. Jharkhand
  - 3. Haryana
  - 4. Chhattisgarh

Question ID : 264330106204  
Status : Answered  
Chosen Option : 2

**Q.1** Two successive discounts of 50 percent and 40 percent are equivalent to a single discount of \_\_\_\_\_.

- Ans**
- 1. 90 percent
  - 2. 45 percent
  - 3. 70 percent
  - 4. 80 percent

Question ID : 264330116740  
Status : Answered  
Chosen Option : 2

**Q.2** A car travels  $\frac{1}{3}$  of the distance on a straight road at a speed of 10 km/h, the next  $\frac{1}{3}$  at a speed of 20 km/h and the last  $\frac{1}{3}$  at a speed of 60 km/h. Find the average speed of the car.

- Ans**
- 1. 18 km/h
  - 2. 12 km/h
  - 3. 15 km/h
  - 4. 10 km/h

Question ID : 26433076044  
Status : Answered  
Chosen Option : 2

**Q.3** Given that 15% of X's income = 20% of Y's income = 30% of Z's income. The sum of their incomes is ₹9,000. If Y spends ₹2,200 from his income, then Y's saving is:

- Ans**
- 1. ₹500
  - 2. ₹200
  - 3. ₹800
  - 4. ₹600

Question ID : 26433080010  
Status : Answered  
Chosen Option : 2

**Q.4** Find the HCF of 2800 and 756.

- Ans**
- 1. 56
  - 2. 42
  - 3. 14
  - 4. 28

Question ID : 264330116632  
Status : Answered  
Chosen Option : 2

**Q.5** A heap of sand is in the shape of a right circular cone. It has a slant height of 10 feet and a base diameter of 16 feet. Find the volume of sand making up the heap. Take  $\pi = 3.14$ .

- Ans**
- 1. 301.96 ft<sup>3</sup>
  - 2. 441.72 ft<sup>3</sup>
  - 3. 423.89 ft<sup>3</sup>
  - 4. 401.92 ft<sup>3</sup>

Question ID : 26433075255  
Status : Answered  
Chosen Option : 2

**Q.6** A and B can complete a piece of work in 8 days and 16 days respectively. If A and B work on alternate days, starting with B, in how many days the work will be completed?

- Ans**
- 1. 6
  - 2. 11
  - 3. 8
  - 4. 12

Question ID : 26433076280  
Status : Answered  
Chosen Option : 2

**Q.7** P and Q together can do a job in 15 days. P is thrice as efficient as Q. In how many days can P alone do the job?

- Ans**
- 1. 24 days
  - 2. 20 days
  - 3. 30 days
  - 4. 15 days

Question ID : 264330116855  
Status : Answered  
Chosen Option : 2

**Q.8** The monthly income of a person was ₹15,400 and his monthly expenditure was ₹7,200. His income increased by 20% and his expenditure increased by 5%. Find the percentage increase in his savings.

- Ans**
- 1. 60.31%
  - 2. 65.24%
  - 3. 33.17%
  - 4. 35.12%

Question ID : 26433080011  
Status : Answered  
Chosen Option : 2

Q.9

Find the volume of a hemisphere of diameter 12 cm (Use  $\pi = \frac{22}{7}$ ).

Ans

✓ 1.  $\frac{3168}{7} \text{ cm}^3$

✗ 2.  $\frac{528}{7} \text{ cm}^3$

✗ 3.  $\frac{1584}{7} \text{ cm}^3$

✗ 4.  $\frac{9703}{7} \text{ cm}^3$

Question ID : 26433075746

Status : Answered

Chosen Option : 2

Q.10 A dishonest retailer sells his goods at a profit of 18% by weighing 800 g instead of 1 kg. Find his actual gain percentage.

Ans

✗ 1. 46.5%

✓ 2. 47.5%

✗ 3. 45.5%

✗ 4. 44.5%

Question ID : 26433075115

Status : Answered

Chosen Option : 2

Q.11 A certain number is subtracted from each of the numbers 20, 24 and 29. After subtraction, those numbers are in proportional. What is the number subtracted?

Ans

✗ 1. 6

✓ 2. 4

✗ 3. 5

✗ 4. 3

Question ID : 26433075669

Status : Answered

Chosen Option : 4

Q.12 Simplify the following expression.

$[7 \div 2 \times (8.35 + 1.3 + 2.42)]$

Ans

✗ 1. 60.324

✗ 2. 53.462

✓ 3. 42.245

✗ 4. 51.352

Question ID : 26433074947

Status : Answered

Chosen Option : 4



Q.13 There are 75 boys and 45 girls in a class. If the average weight of boys is 60 kg and the average weight of girls is 40 kg, then find the average weight of the whole class.

- Ans
- 1. 50 kg
  - 2. 52.5 kg
  - 3. 60.5 kg
  - 4. 50.5 kg

Question ID : 26433083029

Status : Answered

Chosen Option : 1

Q.14 A man wants to purchase a car and for that, he checks the rating of the car on internet. He finds the ratings of  $\frac{9}{10}$  for comfort and  $\frac{8}{10}$  for resale value. Based on his requirements, he gives a weightage of 55% to comfort and 45% to resale value. Calculate the final rating of the car.

- Ans
- 1.  $\frac{9.5}{10}$
  - 2.  $\frac{8.55}{10}$
  - 3.  $\frac{7.55}{10}$
  - 4.  $\frac{7.5}{10}$

Question ID : 26433075966

Status : Answered

Chosen Option : 2

Q.15 What is the fourth proportional to 0.12, 0.16 and 0.21?

- Ans
- 1. 0.28
  - 2. 0.18
  - 3. 0.25
  - 4. 0.26

Question ID : 26433079868

Status : Answered

Chosen Option : 3

Q.16 The speed of a swimmer in downstream is 23km/h. If the speed of the swimmer in upstream is 14 km/h, then what is the speed of the stream?

- Ans
- 1. 4.5 km/h
  - 2. 5.5 km/h
  - 3. 4.0 km/h
  - 4. 5.0 km/h

Question ID : 26433075695

Status : Answered

Chosen Option : 2

Q.17 The population of a village increases by 0.2% in the first year, it increases by 0.4% in the second year, and due to some disease, it decreases by 0.4% in the third year. What will be its population after 3 years, if in the beginning of the first year it was 2000 (rounded off to two decimal places)?

- Ans
- 1. 2005.45
  - 2. 2009.84
  - 3. 2010.12
  - 4. 2003.97

Question ID : 26433075391  
Status : Answered  
Chosen Option : 2

Q.18 A sum of Rs.2,100 is invested for 1 year at 20% per annum, interest compounded half-yearly. Find the compound interest.

- Ans
- 1. Rs.441
  - 2. Rs.421
  - 3. Rs.431
  - 4. Rs.451

Question ID : 26433075735  
Status : Answered  
Chosen Option : 2

Q.19 On a tool whose marked price is Rs.280, a discount of 15% is offered. Due to a calculation mistake, the shopkeeper gives the customer Rs.20 extra. What is the effective discount percentage on the tool for the customer?

- Ans
- 1. 28.1%
  - 2. 22.1%
  - 3. 35%
  - 4. 31.1%

Question ID : 26433071364  
Status : Answered  
Chosen Option : 2

Q.20 If the selling price of an article is  $\frac{11}{5}$  times of the cost price, then the gain percentage is:

- Ans
- 1. 150%
  - 2. 110%
  - 3. 100%
  - 4. 120%

Question ID : 26433075385  
Status : Answered  
Chosen Option : 2

Q.1 Select the correct word for the blanks in the given sentence.

He has a \_\_\_\_\_ nature and the rainforest is a \_\_\_\_\_ of forest found on earth.

- Ans
- 1. type
  - 2. caring
  - 3. kind
  - 4. rude

Question ID : 26433060537  
Status : Answered  
Chosen Option : 2

Q.2 Substitute the underlined words with the option that is closest in meaning to it.

Do not pay attention to his words.

- Ans
- 1. Negate
  - 2. Accept
  - 3. Ignore
  - 4. Fight

Question ID : 26433088951  
Status : Answered  
Chosen Option : 1

Q.3 Select the most appropriate meaning of the given idiom.

A man of means

- Ans
- 1. A well-mannered man with noble behaviour
  - 2. A wealthy man with lots of money and assets
  - 3. Someone who is an iconic personality for youngsters
  - 4. Someone who has earned a lot of fame

Question ID : 26433073210  
Status : Answered  
Chosen Option : 2

Q.4 Select the most appropriate spelling that can correctly substitute the misspelt underlined segment in the given sentence.

His part in the affair was quite open and abboard.

- Ans
- 1. aboard
  - 2. board
  - 3. aboveboard
  - 4. broad

Question ID : 26433071935  
Status : Answered  
Chosen Option : 1

Q.5 Select the most appropriate synonym of the underlined word.

The children sat by the hearth to keep away the cold.

- Ans
- 1. tandoor
  - 2. fireside
  - 3. oven
  - 4. convent

Question ID : 26433084598  
Status : Answered  
Chosen Option : 2

Q.6 Select the most appropriate ANTONYM of the given word.  
Local

- Ans
- 1. Familiar
  - 2. Foreign
  - 3. Frozen
  - 4. Torrid

Question ID : 26433066092  
Status : Answered  
Chosen Option : 2

Q.7 Select the most appropriate option to substitute the underlined segment in the given sentence to make it a meaningful sentence. If no substitution is required, select 'No substitution'.

The patients are shifted to another hospital that same evening as this hospital caught fire.

- Ans
- 1. were shifted at others hospital that same evening as this hospital caught fire.
  - 2. were shifted to another hospital that same evening as this hospital caught fire.
  - 3. were shifted to another hospital that same evening as this hospital catch fire.
  - 4. No substitution

Question ID : 26433092896  
Status : Answered  
Chosen Option : 2

Q.8 Select the most appropriate option to fill in the blank.

Those songs were a great relief for Mohan during his long and \_\_\_\_\_ bus journey.

- Ans
- 1. tolerable
  - 2. plausible
  - 3. tiring
  - 4. reprimanding

Question ID : 26433074365  
Status : Answered  
Chosen Option : 1

**Q.9** Select the most appropriate **ANTONYM** of the word given in the bracket to fill in the blank.

Do any of you \_\_\_\_\_ (object to) the decision?

- Ans  1. approve of  
 2. repine to  
 3. demonstrate  
 4. withstand to

Question ID : 26433092867  
Status : Answered  
Chosen Option : 4

**Q.10** The following sentence has been split into three segments. Identify the segment that contains a grammatical error. If you don't find any error, mark 'No error' as your answer.

Don't panic! / We won't leave you alone in trouble / when you travelling with us.

- Ans  1. when you travelling with us.  
 2. Don't panic!  
 3. No error  
 4. We won't leave you alone in trouble

Question ID : 26433086382  
Status : Answered  
Chosen Option : 2

**Q.11** Select the most appropriate synonym of the given word.

Entrap

- Ans  1. Implicate  
 2. Trim  
 3. Regulate  
 4. Glorify

Question ID : 26433073466  
Status : Answered  
Chosen Option : 4

**Q.12** Select the **INCORRECTLY** spelt word.

- Ans  1. Refridgeration  
 2. Telepathy  
 3. Strangulate  
 4. Bewilderment

Question ID : 26433073511  
Status : Answered  
Chosen Option : 4

Q.13 Select the most appropriate meaning of the given idiom.

Grease someone's palm

- Ans
- 1. To give a loan to someone
  - 2. To borrow money from an official
  - 3. To bribe one discreetly
  - 4. To lend money to an official

Question ID : 26433072673  
Status : Answered  
Chosen Option : 2

Q.14 Select the most appropriate homonym to fill in the blank.  
"Where is my \_\_\_\_\_?" cried the boatman.

- Ans
- 1. or
  - 2. o'er
  - 3. oat
  - 4. oar

Question ID : 26433084718  
Status : Answered  
Chosen Option : 3

Q.15 Select the most appropriate ANTONYM of the given word.

Lovely

- Ans
- 1. Pretty
  - 2. Attractive
  - 3. Hunky
  - 4. Lousy

Question ID : 26433072268  
Status : Answered  
Chosen Option : 3

**Comprehension:**

In the following passage, some words have been deleted. Read the passage carefully and select the most appropriate option to fill in each blank.

Dandelion is a widely distributed weed of the daisy family, (1) \_\_\_\_\_ a rosette of leaves and large bright yellow flowers followed (2) \_\_\_\_\_ globular heads of seeds with downy tufts. I also reminded them that April is designated as the Month of (3) \_\_\_\_\_ Military Child. Not many would know that 15 April is the day when we wear purple, or so to say, we 'purple (4) \_\_\_\_\_' to express our solidarity and support (5) \_\_\_\_\_ the strength and sacrifices of our children, while their fathers are deployed at Siachen Glacier, deserts and on our borders.

**SubQuestion No : 16**

**Q.16 Select the most appropriate option to fill in blank number 1.**

Ans  1. with

2. on

3. of

4. within

Question ID : 26433072103

Status : Answered

Chosen Option : 1

**Comprehension:**

In the following passage, some words have been deleted. Read the passage carefully and select the most appropriate option to fill in each blank.

Dandelion is a widely distributed weed of the daisy family, (1) \_\_\_\_\_ a rosette of leaves and large bright yellow flowers followed (2) \_\_\_\_\_ globular heads of seeds with downy tufts. I also reminded them that April is designated as the Month of (3) \_\_\_\_\_ Military Child. Not many would know that 15 April is the day when we wear purple, or so to say, we 'purple (4) \_\_\_\_\_' to express our solidarity and support (5) \_\_\_\_\_ the strength and sacrifices of our children, while their fathers are deployed at Siachen Glacier, deserts and on our borders.

**SubQuestion No : 17**

**Q.17 Select the most appropriate option to fill in blank number 2.**

Ans  1. by

2. with

3. along

4. since

Question ID : 26433072104

Status : Answered

Chosen Option : 3

**Comprehension:**

In the following passage, some words have been deleted. Read the passage carefully and select the most appropriate option to fill in each blank.

Dandelion is a widely distributed weed of the daisy family, (1) \_\_\_\_\_ a rosette of leaves and large bright yellow flowers followed (2) \_\_\_\_\_ globular heads of seeds with downy tufts. I also reminded them that April is designated as the Month of (3) \_\_\_\_\_ Military Child. Not many would know that 15 April is the day when we wear purple, or so to say, we 'purple (4) \_\_\_\_\_' to express our solidarity and support (5) \_\_\_\_\_ the strength and sacrifices of our children, while their fathers are deployed at Siachen Glacier, deserts and on our borders.

**SubQuestion No : 18**

**Q.18 Select the most appropriate option to fill in blank number 3.**

- Ans
- 1. a
  - 2. Zero article
  - 3. the
  - 4. an

Question ID : 26433072105

Status : Answered

Chosen Option : 2

**Comprehension:**

In the following passage, some words have been deleted. Read the passage carefully and select the most appropriate option to fill in each blank.

Dandelion is a widely distributed weed of the daisy family, (1) \_\_\_\_\_ a rosette of leaves and large bright yellow flowers followed (2) \_\_\_\_\_ globular heads of seeds with downy tufts. I also reminded them that April is designated as the Month of (3) \_\_\_\_\_ Military Child. Not many would know that 15 April is the day when we wear purple, or so to say, we 'purple (4) \_\_\_\_\_' to express our solidarity and support (5) \_\_\_\_\_ the strength and sacrifices of our children, while their fathers are deployed at Siachen Glacier, deserts and on our borders.

**SubQuestion No : 19**

**Q.19 Select the most appropriate option to fill in blank number 4.**

- Ans
- 1. up
  - 2. by
  - 3. for
  - 4. onto

Question ID : 26433072106

Status : Answered

Chosen Option : 2



**Comprehension:**

In the following passage, some words have been deleted. Read the passage carefully and select the most appropriate option to fill in each blank.

Dandelion is a widely distributed weed of the daisy family, (1) \_\_\_\_\_ a rosette of leaves and large bright yellow flowers followed (2) \_\_\_\_\_ globular heads of seeds with downy tufts. I also reminded them that April is designated as the Month of (3) \_\_\_\_\_ Military Child. Not many would know that 15 April is the day when we wear purple, or so to say, we 'purple (4) \_\_\_\_\_' to express our solidarity and support (5) \_\_\_\_\_ the strength and sacrifices of our children, while their fathers are deployed at Siachen Glacier, deserts and on our borders.

**SubQuestion No : 20**

**Q.20** Select the most appropriate option to fill in blank number 5.

- Ans  1. from  
 2. through  
 3. in  
 4. for

Question ID : 26433072107  
Status : Answered  
Chosen Option : 3

## Section : Part-D-Hindi

**Q.1** जल की अथाह राशि को \_\_\_\_\_ कहते हैं।  
'समुद्र' के पर्याय से उपरोक्त वाक्य पूर्ण करें।

- Ans  1. पयोधर  
 2. सरिता  
 3. जलधि  
 4. कालिंदी

Question ID : 26433084989  
Status : Not Answered  
Chosen Option : --

**Q.2** निम्नलिखित वाक्यांश के लिए उपयुक्त सार्थक शब्द क्या होगा?  
जिसमें धैर्य की कमी हो

- Ans  1. अधीर  
 2. अविश्वास  
 3. अधिक  
 4. धीर

Question ID : 26433065754  
Status : Not Answered  
Chosen Option : --

Q.3 'गेरु' एक संज्ञा शब्द है।  
इसके बदले कौन – सा प्रत्यय युक्त शब्द उपयुक्त होगा?

- Ans  1. गेरुआ  
 2. ममेरा  
 3. गरज  
 4. गजल

Question ID : 26433062690  
Status : Not Answered  
Chosen Option : --

Q.4 निम्नलिखित विकल्पों में से किस एक वाक्य में विशेषण का उचित प्रयोग किया गया है?

- Ans  1. वह मीठा फल है।  
 2. वह खाता है।  
 3. वह पढ़ता है।  
 4. वह जाता है।

Question ID : 26433062960  
Status : Not Answered  
Chosen Option : --

Q.5 निम्नलिखित वाक्य में रेखांकित खंड के स्थान पर प्रयुक्त होने वाले सबसे उपयुक्त विकल्प का चयन कीजिए।  
उसने अपने दोस्त को जन्मदिन पर श्रद्धांजलि दी।

- Ans  1. तरक्की  
 2. आयु  
 3. बधाई  
 4. धमकी

Question ID : 26433079570  
Status : Not Answered  
Chosen Option : --

Q.6 'पारदर्शक' शब्द के लिए उचित वाक्यांश है-

- Ans  1. जिसे देखा जा सके  
 2. जिसके पार देखा जा सके  
 3. जिसके पार देखा न जा सके  
 4. जो कोई नाटक देखे

Question ID : 26433065874  
Status : Not Answered  
Chosen Option : --

Q.7 निम्नलिखित विकल्पों में से 'जो सर्व साधारण के सामने न रखा गया हो' वाक्यांश के लिए एक सार्थक शब्द क्या होगा ?

- Ans
- 1. अल्पज्ञ
  - 2. सर्वव्यापी
  - 3. अप्रकाशित
  - 4. अवध्य

Question ID : 26433062474  
Status : Not Answered  
Chosen Option : --

Q.8 निम्न वाक्य के रिक्त स्थान पर रेखांकित शब्द का उपयुक्त विलोम शब्द क्या होगा?  
सक्रिय व्यक्ति जीवन में नाम कमाता है, लेकिन \_\_\_\_\_ असफल हो जाता है।

- Ans
- 1. कर्मठ
  - 2. निष्क्रिय
  - 3. तंदरुस्त
  - 4. जागरूक

Question ID : 26433066907  
Status : Not Answered  
Chosen Option : --

Q.9 वाक्य में रेखांकित अंश के लिए उचित मुहावरा दिए गए विकल्पों में से चुनिए-  
उसे कोई क्या समझाए, वह तो महामूर्ख है।

- Ans
- 1. काठ का उल्लू
  - 2. काला नाग
  - 3. काजल की कोठरी
  - 4. काठ मार जाना

Question ID : 26433062303  
Status : Not Answered  
Chosen Option : --

Q.10 निम्नलिखित वाक्य में रेखांकित एकार्थी शब्दों का सही अर्थ-युग्म क्या होगा?  
द्यूत प्रथा का दुष्परिणाम पांडवों के साथ उनकी माता पृथा को भी भुगतना पड़ा।

- Ans
- 1. परंपरा-अलग
  - 2. परंपरा-कुंती
  - 3. सहानुभूति-विश्वास
  - 4. धारणा-परंपरा

Question ID : 26433091332  
Status : Not Answered  
Chosen Option : --

Q.11 निम्न विकल्पों में से ऐसा वाक्य चुनिए जिसमें अशुद्ध वर्तनी वाला पद न हो।

- Ans  1. यह कथा अवर्णनिय है।  
 2. दक्षिण के लोग कॉफी अधिक पीते हैं।  
 3. माली ने लकड़ि और घाश काट ली।  
 4. वह स्टेसन पर पहुँच गया।

Question ID : 26433063069  
Status : Not Answered  
Chosen Option : --

Q.12 वर्तनी की दृष्टि से अशुद्ध वाक्य का चयन कीजिए-

- Ans  1. जहाँ जाओगे भाग्य तुम्हारा साथ देगा।  
 2. जो कुछ याद था वह भी भूल गया।  
 3. उसकी असावधानी के कारण हम हार गए।  
 4. जब सब नश्ट हो गया, तब सारी चिंता दूर हुई।

Question ID : 26433062891  
Status : Not Answered  
Chosen Option : --

Q.13 विकल्पों में दिए गए शब्दों में से उचित शब्द से निम्न वाक्य पूर्ण करें।  
हमें अपने \_\_\_\_\_ की स्वयं देखभाल करनी चाहिए।

- Ans  1. सामान  
 2. सारांश  
 3. समान  
 4. सामान्य

Question ID : 26433062908  
Status : Not Answered  
Chosen Option : --

Q.14 निम्नलिखित विकल्पों में क्रिया के प्रेरणार्थक रूप का गलत प्रयोग किसमें हुआ है?

- Ans  1. टकारना - टकारवाना  
 2. बिठाना - बिठवाना  
 3. खिलाना - खिलवाना  
 4. दिलाना - दिलवाना

Question ID : 26433063047  
Status : Not Answered  
Chosen Option : --

Q.15 निम्नलिखित में से किस मुहावरे का अर्थ है 'अपमान सहन करना'?

- Ans  1. जहर का घूंट पीना  
 2. छाती पर सांप लोटना  
 3. दिल भर आना  
 4. छाती पर मूंग दलना

Question ID : 26433066809

Status : Not Answered

Chosen Option : --

**Comprehension:**

निम्नलिखित गद्यांश में कुछ शब्दों को हटा दिया गया है। दिए गए विकल्पों की सहायता से रिक्त स्थानों की पूर्ति कीजिए। प्रत्येक संख्या के लिए सबसे उपयुक्त विकल्प का चयन कीजिए।  
भारतवर्ष के उत्तर में 1. \_\_\_\_\_ तथा शेष तीनों 2. \_\_\_\_\_ में समुद्र है। बीच में जंगल, मरुस्थल, छोटे-बड़े राज्य, लहलहाते खेत और सुंदर नगर हैं। इन सब की सुरक्षा का भार 3. \_\_\_\_\_ पर है। पुलिस विभिन्न राज्यों में तथा सेना बाहरी क्षेत्र में अपने 4. \_\_\_\_\_ को निभाते हुए देश की रक्षा करती है। पूरे विश्व में भारतीय सेना को 5. \_\_\_\_\_ माना जाता है।

**SubQuestion No : 16**

Q.16 रिक्त स्थान 1 की पूर्ति के लिए सबसे उपयुक्त विकल्प का चयन कीजिए।

- Ans  1. सैनिक  
 2. राज्य  
 3. हिमालय  
 4. समुद्र

Question ID : 264330110987

Status : Not Answered

Chosen Option : --

**Comprehension:**

निम्नलिखित गद्यांश में कुछ शब्दों को हटा दिया गया है। दिए गए विकल्पों की सहायता से रिक्त स्थानों की पूर्ति कीजिए। प्रत्येक संख्या के लिए सबसे उपयुक्त विकल्प का चयन कीजिए।  
भारतवर्ष के उत्तर में 1. \_\_\_\_\_ तथा शेष तीनों 2. \_\_\_\_\_ में समुद्र है। बीच में जंगल, मरुस्थल, छोटे-बड़े राज्य, लहलहाते खेत और सुंदर नगर हैं। इन सब की सुरक्षा का भार 3. \_\_\_\_\_ पर है। पुलिस विभिन्न राज्यों में तथा सेना बाहरी क्षेत्र में अपने 4. \_\_\_\_\_ को निभाते हुए देश की रक्षा करती है। पूरे विश्व में भारतीय सेना को 5. \_\_\_\_\_ माना जाता है।

**SubQuestion No : 17**

Q.17 रिक्त स्थान 2 की पूर्ति के लिए सबसे उपयुक्त विकल्प का चयन कीजिए।

- Ans  1. समुद्रों  
 2. दिशाओं  
 3. देशों  
 4. अर्थों

Question ID : 264330110988

Status : Not Answered

Chosen Option : --

**Comprehension:**

निम्नलिखित गद्यांश में कुछ शब्दों को हटा दिया गया है। दिए गए विकल्पों की सहायता से रिक्त स्थानों की पूर्ति कीजिए। प्रत्येक संख्या के लिए सबसे उपयुक्त विकल्प का चयन कीजिए।  
भारतवर्ष के उत्तर में 1. \_\_\_\_\_ तथा शेष तीनों 2. \_\_\_\_\_ में समुद्र है। बीच में जंगल, मरुस्थल, छोटे-बड़े राज्य, लहलहाते खेत और सुंदर नगर हैं। इन सब की सुरक्षा का भार 3. \_\_\_\_\_ पर है। पुलिस विभिन्न राज्यों में तथा सेना बाहरी क्षेत्र में अपने 4. \_\_\_\_\_ को निभाते हुए देश की रक्षा करती है। पूरे विश्व में भारतीय सेना को 5. \_\_\_\_\_ माना जाता है।

**SubQuestion No : 18**

Q.18 रिक्त स्थान 3 की पूर्ति के लिए सबसे उपयुक्त विकल्प का चयन कीजिए।

- Ans  1. भारतीय  
 2. सेना  
 3. जनता  
 4. युवाओं

Question ID : 264330110989

Status : Not Answered

Chosen Option : --

**Comprehension:**

निम्नलिखित गद्यांश में कुछ शब्दों को हटा दिया गया है। दिए गए विकल्पों की सहायता से रिक्त स्थानों की पूर्ति कीजिए। प्रत्येक संख्या के लिए सबसे उपयुक्त विकल्प का चयन कीजिए।  
भारतवर्ष के उत्तर में 1. \_\_\_\_\_ तथा शेष तीनों 2. \_\_\_\_\_ में समुद्र है। बीच में जंगल, मरुस्थल, छोटे-बड़े राज्य, लहलहाते खेत और सुंदर नगर हैं। इन सब की सुरक्षा का भार 3. \_\_\_\_\_ पर है। पुलिस विभिन्न राज्यों में तथा सेना बाहरी क्षेत्र में अपने 4. \_\_\_\_\_ को निभाते हुए देश की रक्षा करती है। पूरे विश्व में भारतीय सेना को 5. \_\_\_\_\_ माना जाता है।

**SubQuestion No : 19**

Q.19 रिक्त स्थान 4 की पूर्ति के लिए सबसे उपयुक्त विकल्प का चयन कीजिए।

- Ans  1. कर्तव्य  
 2. प्रेरणा  
 3. स्वार्थ  
 4. युद्ध

Question ID : 264330110990

Status : Not Answered

Chosen Option : --

**Comprehension:**

निम्नलिखित गद्यांश में कुछ शब्दों को हटा दिया गया है। दिए गए विकल्पों की सहायता से रिक्त स्थानों की पूर्ति कीजिए। प्रत्येक संख्या के लिए सबसे उपयुक्त विकल्प का चयन कीजिए।

भारतवर्ष के उत्तर में 1. \_\_\_\_\_ तथा शेष तीनों 2. \_\_\_\_\_ में समुद्र है। बीच में जंगल, मरुस्थल, छोटे-बड़े राज्य, लहलहाते खेत और सुंदर नगर हैं। इन सब की सुरक्षा का भार 3. \_\_\_\_\_ पर है। पुलिस विभिन्न राज्यों में तथा सेना बाहरी क्षेत्र में अपने 4. \_\_\_\_\_ को निभाते हुए देश की रक्षा करती है। पूरे विश्व में भारतीय सेना को 5. \_\_\_\_\_ माना जाता है।

**SubQuestion No : 20**

**Q.20** रिक्त स्थान 5 की पूर्ति के लिए सबसे उपयुक्त विकल्प का चयन कीजिए।

- Ans
- 1. आकर्षक
  - 2. सैनिक
  - 3. अकादमी
  - 4. श्रेष्ठ

Question ID : 264330110991

Status : Not Answered

Chosen Option : --

WWW.GOV TJOB SALTER