

# Constable GD in CAPFs SSF Rifleman GD in Assam Rifles and Sepoy in NCB Examination 2022

Roll Number	<a href="http://www.govtjobsalert.in">www.govtjobsalert.in</a>
Candidate Name	<a href="http://www.govtjobsalert.in">www.govtjobsalert.in</a>
Venue Name	iON Digital Zone iDZ Kuanwala
Exam Date	07/02/2023
Exam Time	9:00 AM - 10:00 AM
Subject	Constable GD Examination 2022

## Section : Part-A-General Intelligence and Reasoning

Q.1 In a code language, 'sweet fruits' is coded as 're de', 'mango is sweet' is coded as 'de me ke', 'orange is citrus' is coded as 'ke le pe', 'eat orange' is coded as 'pe ne'. What is the code for the word 'mango'?

- Ans
- 1. pe
  - 2. ke
  - 3. de
  - 4. me

Question ID : 26433082269

Status : Answered

Chosen Option : 4

Q.2 Select the option that is related to the third number in the same way as the second number is related to the first number and the sixth number is related to the fifth number.

42 : 91 :: 84 : ? :: 149 : 198

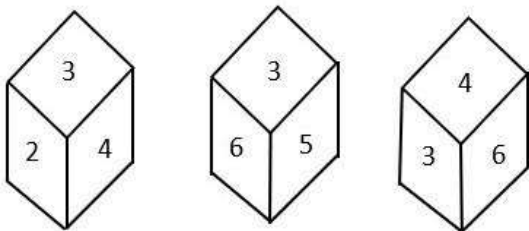
- Ans
- 1. 133
  - 2. 142
  - 3. 128
  - 4. 131

Question ID : 26433069189

Status : Not Attempted and Marked For Review

Chosen Option : --

Q.3 Three different positions of the same dice are shown. Find the number on the face opposite the face showing '3'.



- Ans
- 1. 2
  - 2. 4
  - 3. 1
  - 4. 5

Question ID : 26433090080

Status : Answered

Chosen Option : 3

Q.4 Seven people, P, Q, R, S, T, U and V are sitting in a straight row, facing north. Only four people sit to the right of P. Only two people sit between P and S. Q is sitting third to the right of V. T is sitting second to the right of V. U is sitting third to the left of T. Who is sitting at the extreme right end of the row?

- Ans
- 1. R
  - 2. T
  - 3. P
  - 4. S

Question ID : 26433068279

Status : Not Attempted and Marked For Review

Chosen Option : --

Q.5 Which of the following letter-clusters will replace the question mark (?) in the given series?  
AVXE, DSUH, GPRK, ?, MJLQ

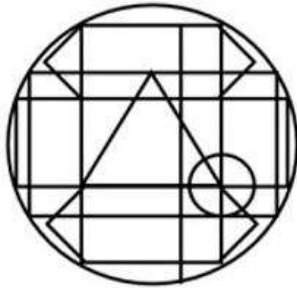
- Ans
- 1. KJON
  - 2. JMON
  - 3. JJPM
  - 4. KKON

Question ID : 26433076444

Status : Answered

Chosen Option : 2

Q.6 Select the option figure which is embedded in the given figure. (Rotation is NOT allowed).



Ans

- 1.
- 2.
- 3.
- 4.

Question ID : 26433076577

Status : Answered

Chosen Option : 4

Q.7 Select the number from among the given options that can replace the question mark (?) in the following series.  
14, 12, 27, 25, 53, 51, ?

- Ans
- 1. 105
  - 2. 150
  - 3. 108
  - 4. 180

Question ID : 26433078926

Status : Answered

Chosen Option : 1

**Q.8** Select the option that is related to the fifth term in the same way as the second term is related to the first term and fourth term is related to the third term.  
PREPARE : ERAPERP :: COMPARE : ERAPMOC :: DESPAIR : ?

- Ans
- 1. RIAPSED
  - 2. RIASPED
  - 3. SPAIRDE
  - 4. ESPAIRD

Question ID : 26433067264  
Status : Answered  
Chosen Option : 1

**Q.9** In the equation given below, which 2 signs need to be interchanged so that it is balanced?

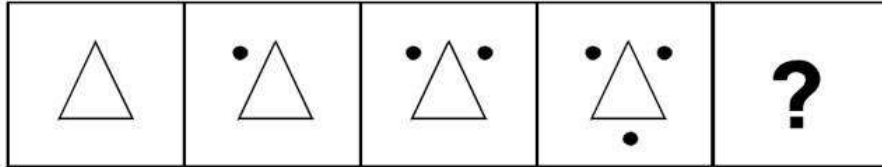
$$\frac{1}{4} \div \frac{1}{16} - 5 + 45 \times 25 = 40$$

- Ans
- 1. ÷ and ×
  - 2. + and -
  - 3. × and -
  - 4. + and ×

Question ID : 26433085656  
Status : Answered  
Chosen Option : 3

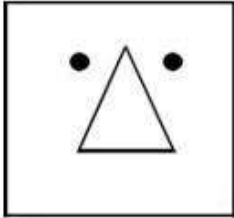
WWW.GOVtJOBsaLert.in

Q.10 Select the figure from among the given options that can replace the question mark (?) in the following series.

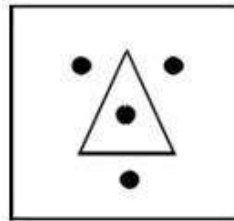


Ans

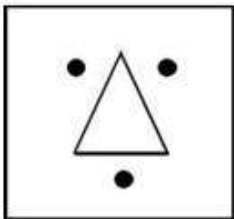
✗ 1.



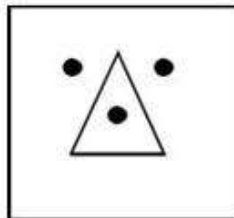
✓ 2.



✗ 3.



✗ 4.



Question ID : 26433080487

Status : Answered

Chosen Option : 2

Q.11 Which two signs should be interchanged to make the below equation mathematically correct?

$$72 \times 3 + 48 \div 6 - 16 = 296$$

Ans ✗ 1.  $\times$  and  $+$

✓ 2.  $\times$  and  $\div$

✗ 3.  $+$  and  $-$

✗ 4.  $\div$  and  $-$

Question ID : 264330117540

Status : Answered

Chosen Option : 2

**Q.12** Three statements are given followed by three conclusions numbered I, II and III. Assuming the statements to be true, even if they seem to be at variance with commonly known facts, decide which of the conclusions logically follow(s) from the statements.

**Statements:**

All masks are sanitizers.

All handwashes are sanitizers.

All sanitizers are medicines.

**Conclusions:**

I. All handwashes are medicines.

II. All medicines are masks.

III. Some medicines are handwashes.

- Ans**
- 1. All conclusions follow
  - 2. Only conclusions II and III follow
  - 3. Only conclusions I and II follow
  - 4. Only conclusions I and III follow

Question ID : 26433082316

Status : Answered

Chosen Option : 4

**Q.13** Select the correct mirror image of the given figure when the mirror is placed at MN as shown below.

NoSTAlgiC



- Ans**
- 1. Nostalgic
  - 2. NoTAlgiC
  - 3. NoTAlCig
  - 4. NoTAlCig

Question ID : 26433085550

Status : Answered

Chosen Option : 3

**Q.14** Select the option that is related to the third word in the same way as the second word is related to the first word.  
(The words must be considered as meaningful English words and must not be related to each other based on the number of letters / number of consonants / vowels in the word)  
Spider : Web :: Horse : ?

- Ans
- 1. Caravan
  - 2. Palace
  - 3. Stable
  - 4. Den

Question ID : 26433082575  
Status : Answered  
Chosen Option : 3

**Q.15** Select the number from among the given options that can replace the question mark (?) in the following series.  
8, 10, 17, 19, 35, 37, ?

- Ans
- 1. 47
  - 2. 74
  - 3. 77
  - 4. 71

Question ID : 26433078918  
Status : Answered  
Chosen Option : 4

**Q.16** In a certain code language, 'TRIFLED' is written as 'YQNEQDI' and 'BRIEF' is written as 'GQNDK'. How will 'FALTER' be written in that language?

- Ans
- 1. KYPSJQ
  - 2. KYQTHP
  - 3. KZQSHR
  - 4. KZQSJQ

Question ID : 26433069465  
Status : Answered  
Chosen Option : 4

**Q.17** Which letter-cluster will replace the question mark (?) to complete the given series?  
NUZD, LSXB, ?, HOTX, FMRV

- Ans
- 1. JQVZ
  - 2. JRVZ
  - 3. JQVA
  - 4. JQWZ

Question ID : 26433067951  
Status : Answered  
Chosen Option : 1

Q.18 D \$ E means 'D is the daughter of E'  
D @ E means 'D is the mother of E'  
D + E means 'D is the father of E'  
D \* E means 'D is the husband of E'  
If P \* T \$ X + Z, then how is P related to Z?

- Ans  1. Paternal uncle  
 2. Sister's husband  
 3. Daughter  
 4. Sister

Question ID : 26433080430  
Status : Answered  
Chosen Option : 2

Q.19 Which option represents the correct order of the given words as they would appear in the English dictionary?  
1 domestic  
2 dozen  
3 double  
4 doctor  
5 down

- Ans  1. 4,3,1,5,2  
 2. 4,1,3,2,5  
 3. 4,1,3,5,2  
 4. 4,3,1,2,5

Question ID : 26433069310  
Status : Answered  
Chosen Option : 3

Q.20 Six friends (Aman, Biplab, Chirantan, Divya, Elizabeth and Firoz) are sitting around a circular table facing the centre. Aman sits third to the left of Biplab. Chirantan is an immediate neighbour of Aman. Elizabeth sits second to the right of Divya. Chirantan is not an immediate neighbour of Divya. Who sits to the immediate left of Biplab?

- Ans  1. Elizabeth  
 2. Firoz  
 3. Divya  
 4. Chirantan

Question ID : 26433092771  
Status : Answered  
Chosen Option : 3



Q.1 Which of the following former Chief Minister of Uttar Pradesh passed away in October 2022?

- Ans
- 1. Narayan Dutt Tiwari
  - 2. Kalyan Singh
  - 3. Mulayam Singh Yadav
  - 4. Vijay Kashyap

Question ID : 264330115030  
Status : Answered  
Chosen Option : 3

Q.2 Who among the following became the Member of legislative Assembly of Surma, Tripura in June 2022?

- Ans
- 1. Sudip Roy Barman
  - 2. Rajnath Singh
  - 3. Swapna Das Paul
  - 4. Sadhan Pande

Question ID : 264330114941  
Status : Not Answered  
Chosen Option : --

Q.3 Gopika Varma won the 2018 Sangeet Natak Akademi Award for \_\_\_\_\_.

- Ans
- 1. Mohiniattam
  - 2. Bharatanatyam
  - 3. Manipuri
  - 4. Odissi

Question ID : 264330115866  
Status : Not Attempted and Marked For Review  
Chosen Option : --

Q.4 Which of the following is a metamorphic rock?

- Ans
- 1. Granite
  - 2. Quartzite
  - 3. Sandstone
  - 4. Shale

Question ID : 26433089663  
Status : Answered  
Chosen Option : 1

**Q.5 Which among the following Bihu is also known as Rongali Bihu?**

- Ans
- 1. Magh Bihu
  - 2. Bhogali Bihu
  - 3. Bohag Bihu
  - 4. Kongali Bihu

Question ID : 264330115117  
Status : Answered  
Chosen Option : 1

**Q.6 The \_\_\_\_\_ provides for measures to deter fugitive economic offenders from evading the process of law in India by staying outside the jurisdiction of Indian courts.**

- Ans
- 1. Economic Offenders Act, 2018
  - 2. Fugitive Economic Offenders Act, 2018
  - 3. Fugitive Offenders Act, 2015
  - 4. Foreign Economic Offenders Act, 2018

Question ID : 264330116212  
Status : Not Attempted and Marked For Review  
Chosen Option : --

**Q.7 Sultan Johor Cup is associated with which sport?**

- Ans
- 1. Football
  - 2. Hockey
  - 3. Basketball
  - 4. Cricket

Question ID : 264330116280  
Status : Answered  
Chosen Option : 2

**Q.8 Which of the following is a fundamental duty?**

- Ans
- 1. To renounce practices derogatory to the dignity of men
  - 2. To renounce practices derogatory to the dignity of any administrative officials
  - 3. To renounce practices derogatory to the dignity of advocates
  - 4. To renounce practices derogatory to the dignity of women

Question ID : 26433089953  
Status : Answered  
Chosen Option : 4

**Q.9** Harshavardhana tried to cross the Narmada to march into the Deccan, but was stopped by a ruler belonging to the Chalukya dynasty, \_\_\_\_\_.

- Ans**
- 1. Pulakeshin II
  - 2. Chandragupta
  - 3. Samudragupta II
  - 4. Samudragupta I

Question ID : 264330115459  
Status : Answered  
Chosen Option : 1

**Q.10** Net Worth = Assets - \_\_\_\_\_

- Ans**
- 1. Book Debts
  - 2. Equity
  - 3. Current Assets
  - 4. Liabilities

Question ID : 264330115327  
Status : Answered  
Chosen Option : 4

**Q.11** Which of the given statements is correct?

- I. Acid turns red litmus blue.
- II. Acids are bitter in taste.

- Ans**
- 1. Neither I nor II
  - 2. Only II
  - 3. Only I
  - 4. Both I and II

Question ID : 264330115245  
Status : Answered  
Chosen Option : 3

**Q.12** The folk dance 'Cheraw' is primarily associated with which Indian state?

- Ans**
- 1. Bihar
  - 2. Odisha
  - 3. Goa
  - 4. Mizoram

Question ID : 26433072925  
Status : Answered  
Chosen Option : 4

Q.13 In which of the following years did the first elected Parliament come into existence?

- Ans  1. 1950  
 2. 1949  
 3. 1952  
 4. 1955

Question ID : 26433086844  
Status : Answered  
Chosen Option : 3

Q.14 Which are the two social groups in India which are most vulnerable to poverty?

- Ans  1. Forward castes and Brahmins  
 2. Scheduled tribes and Other Backward Classes  
 3. Brahmins and Scheduled castes  
 4. Scheduled tribes and Scheduled castes

Question ID : 264330116066  
Status : Answered  
Chosen Option : 4

Q.15 The \_\_\_\_\_ of a country is measured by the development of manufacturing industries.

- Ans  1. debt  
 2. expenditure  
 3. liability  
 4. economic strength

Question ID : 264330115405  
Status : Answered  
Chosen Option : 4

Q.16 अनबुझा चूना कैसे निर्मित होता है?

- Ans  1. कैल्शियम ऑक्साइड और जल के दोहरे अपघटन द्वारा  
 2. कैल्शियम ऑक्साइड और कैल्शियम कार्बोनेट के विस्थापन द्वारा  
 3. तापन पर कैल्शियम कार्बोनेट के कैल्शियम ऑक्साइड और कार्बन डाइऑक्साइड में अपघटन द्वारा  
 4. कैल्शियम कार्बोनेट और कैल्शियम हीक्साफ्लोराइड के अपघटन द्वारा

Question ID : 26433087846  
Status : Answered  
Chosen Option : 3

Q.17 Which currency notes were demonetised by the government of India in 2016?

- Ans  1. ₹500 and ₹50  
 2. ₹500 and ₹1,000  
 3. ₹500 and ₹100  
 4. ₹100 and ₹1,000

Question ID : 26433072953  
Status : Answered  
Chosen Option : 2

Q.18 Which of the following activity is related to the tertiary sector of the economy?

- Ans  1. Storage  
 2. Automobile production  
 3. Fishing  
 4. Cloth Weaving

Question ID : 264330115574  
Status : Answered  
Chosen Option : 2

Q.19 He is perhaps best known for his speech at the Parliament of the World's Religions in Chicago in 1893. Who is 'he' referred to?

- Ans  1. Swami Vivekananda  
 2. Keshab Chandra Sen  
 3. Swami Dayanand Saraswati  
 4. Mahatma Gandhi

Question ID : 264330115717  
Status : Answered  
Chosen Option : 1

Q.20 The inaugural winners of the Hero Indian Super League (ISL) was ATK, which is a football club based in \_\_\_\_\_.

- Ans  1. Kolkata  
 2. Chennai  
 3. Mumbai  
 4. Bengaluru

Question ID : 26433089928  
Status : Answered  
Chosen Option : 4

Q.1 A, B and C runs at speeds  $5 \frac{m}{s}$ ,  $3 \frac{m}{s}$  and  $8 \frac{m}{s}$ , respectively. They start the race at the same time from the same point. After some time, it was found that the distance between A and C is 6 m. Determine the distance between A and B.

- Ans
- 1. 3 m
  - 2. 2 m
  - 3. 5 m
  - 4. 4 m

Question ID : 26433071338

Status : Not Attempted and Marked For Review

Chosen Option : --

Q.2 A dishonest shopkeeper sells rice at the cost price but he uses a faulty weight of 925g for 1000g. Find his gain percentage.

- Ans
- 1. 6.01 Percent
  - 2. 7.0 Percent
  - 3. 5.3 Percent
  - 4. 8.11 Percent

Question ID : 26433074336

Status : Answered

Chosen Option : 4

Q.3 A single discount equivalent to three successive discounts of 10%, 5%, and  $3 \frac{1}{2}$ % will be \_\_\_\_\_.

- Ans
- 1. 18.5%
  - 2. 16.9475%
  - 3. 17.4925%
  - 4. 14.5%

Question ID : 26433080316

Status : Answered

Chosen Option : 3

Q.4 What is the smallest positive number that should be subtracted from each of 12 and 21 so that 36 is the third proportion to them?

- Ans
- 1. 5
  - 2. 3
  - 3. 4
  - 4. 2

Question ID : 26433080118

Status : Answered

Chosen Option : 2

Q.5 The value of a painting rises from Rs 140000 to Rs 182000. The percent increase in the value of the painting is:

- Ans
- 1. 50 percent
  - 2. 10 percent
  - 3. 30 percent
  - 4. 40 percent

Question ID : 264330116816  
Status : Answered  
Chosen Option : 3

Q.6 Find the HCF of the cube of 16 and the square of 48.

- Ans
- 1. 256
  - 2. 768
  - 3. 512
  - 4. 128

Question ID : 264330116658  
Status : Answered  
Chosen Option : 1

Q.7 24 men complete a work in 9 days. 3 days after they started working, 8 more men joined them. How many days will all of them take to complete the remaining work?

- Ans
- 1. 9
  - 2. 4
  - 3. 5.5
  - 4. 4.5

Question ID : 26433076211  
Status : Answered  
Chosen Option : 4

Q.8 If the price of tea is increased by 20%, by what percentage must the consumption of tea be diminished so as NOT to increase the expenditure on tea?

- Ans
- 1.  $33\frac{1}{3}\%$
  - 2.  $16\frac{2}{3}\%$
  - 3. 20%
  - 4. 25%

Question ID : 26433075138  
Status : Answered  
Chosen Option : 2

Q.9 A solid right-circular cylinder whose radius of the base is 22.5 cm and whose height is 24 cm is melted and moulded in the shape of a right circular cone whose radius of the base is 36 cm. What will be the height of this cone?

- Ans
- 1. 26.225 cm
  - 2. 28.125 cm
  - 3. 29.105 cm
  - 4. 30.25 cm

Question ID : 26433075301  
Status : Marked For Review  
Chosen Option : 1

Q.10 The present value of a house is ₹46,40,000. If its value depreciates at the rate of 5% per annum, then the value of the house after 3 years will be:

- Ans
- 1. ₹39,78,220
  - 2. ₹44,08,000
  - 3. ₹40,70,520
  - 4. ₹41,87,600

Question ID : 26433087384  
Status : Answered  
Chosen Option : 1

Q.11 A person travels three equal distances at the speeds of 2 km/h, 3 km/h and 4 km/h and takes a total time of 52 minutes. The total distance is:

- Ans
- 1. 2.8 km
  - 2. 2.7 km
  - 3. 2.4 km
  - 4. 2.5 km

Question ID : 26433076371  
Status : Answered  
Chosen Option : 3

Q.12 An object moves 15 m in 2.6 min and the next 26 km at a speed of 30 km/h. Find its average speed (in m/sec) for the whole movement.

- Ans
- 1. 8.59
  - 2. 3.76
  - 3. 7.94
  - 4. 2.92

Question ID : 26433080002  
Status : Not Attempted and Marked For Review  
Chosen Option : --



**Q.13 Simplify the following.**  
30% of [ { (820% of 40) – 28} ] % of 600

- Ans  1. 540  
 2. 200  
 3. 500  
 4. 250

Question ID : 26433075342  
Status : Answered  
Chosen Option : 1

**Q.14 At what rate of compound interest does a sum of money become 3.375-fold in 3 years, compounding annually?**

- Ans  1. 50%  
 2. 200%  
 3. 100%  
 4. 150%

Question ID : 26433065091  
Status : Answered  
Chosen Option : 1

**Q.15 A wholesaler has 1000 kg sugar, part of which he sells at 6% profit and the rest at 12% profit. His gain is 10% on the whole. The quantity sold at 6% profit is: (consider up to two decimals)**

- Ans  1. 666.66 kg  
 2. 336.33 kg  
 3. 663.66 kg  
 4. 333.33 kg

Question ID : 26433076269  
Status : Answered  
Chosen Option : 4

**Q.16 Balvendra offers two successive discounts of 9% and 4% first and then he also provides a cash discount of Rs.268 on the sale of a CCTV camera. If the marked price of the CCTV camera is Rs.5,000, what is the final price of the CCTV camera for a customer?**

- Ans  1. Rs.4,000  
 2. Rs.4,368  
 3. Rs.4,100  
 4. Rs.4,636

Question ID : 26433080319  
Status : Not Attempted and Marked For Review  
Chosen Option : --

Q.17 Ram and Ramesh run two kilometres and Ram wins by 40 seconds. Ram and Naresh run two kilometres and Ram wins by 650 metres. When Ramesh and Naresh run the same distance, Ramesh wins by 25 seconds. Find the time taken by Ram to run two kilometres.

- Ans
- 1. 3 minutes, 15 seconds
  - 2. 2 minutes, 15 seconds
  - 3. 3 minutes, 35 seconds
  - 4. 2 minutes, 35 seconds

Question ID : 26433065003

Status : Not Attempted and Marked For Review

Chosen Option : --

Q.18 If the volume of a solid right circular cone is  $v \text{ cm}^3$  and its height is  $h \text{ cm}$ , then the radius of the cone is:

- Ans
- 1.  $\frac{v}{\pi h^2} \text{ cm}$
  - 2.  $\sqrt{\frac{3v}{\pi h}} \text{ cm}$
  - 3.  $\frac{3v}{\pi h^2} \text{ cm}$
  - 4.  $\sqrt{\frac{v}{\pi h}} \text{ cm}$

Question ID : 26433079973

Status : Answered

Chosen Option : 2

Q.19 Aman can do a piece of work in 78 days. Ram can do this work in 39 days. Aman started the work alone. After how many days should Ram join him, so that the work is finished in 39 days?

- Ans
- 1.  $39/2$  days
  - 2.  $77/2$  days
  - 3.  $27/2$  days
  - 4.  $17/2$  days

Question ID : 264330116896

Status : Answered

Chosen Option : 1

**Q.20** ₹936 is divided among P, Q and R in the ratio 2 : 3 : 4 instead of  $\frac{1}{2} : \frac{1}{3} : \frac{1}{4}$  by mistake. The gain of R in the distribution is \_\_\_\_\_.

- Ans** ✓ 1. ₹200  
✗ 2. ₹24  
✗ 3. ₹124  
✗ 4. ₹216

Question ID : 26433073110  
Status : Answered  
Chosen Option : 1

Section : Part-D-English

**Q.1** Select the most appropriate option that can substitute the underlined segment in the given sentence.

The library is the right place to write an article from a journal.

- Ans** ✗ 1. to fill an article  
✗ 2. to correct an article  
✓ 3. to read an article  
✗ 4. to find the article

Question ID : 26433088986  
Status : Answered  
Chosen Option : 3

**Q.2** Select the most appropriate synonym of the given word.  
Swindle

- Ans** ✗ 1. Threat  
✓ 2. Fraud  
✗ 3. Observation  
✗ 4. Ride

Question ID : 26433086487  
Status : Answered  
Chosen Option : 4

**Q.3** Select the most appropriate meaning of the given idiom.

A cakewalk

- Ans** ✗ 1. An unexpected twist  
✗ 2. A stylish walk  
✓ 3. An easy task or victory  
✗ 4. A precious memory to cherish

Question ID : 26433073484  
Status : Answered  
Chosen Option : 3

Q.4 Select the most appropriate option to fill in the blank.

When the separatist tendencies become very active, the unity of any nation can be in \_\_\_\_\_.

- Ans
- 1. solitaire
  - 2. docile
  - 3. negotiation
  - 4. peril

Question ID : 26433092407  
Status : Answered  
Chosen Option : 1

Q.5 Select the most appropriate synonym of the given word.

Calamity

- Ans
- 1. Fortune
  - 2. Disaster
  - 3. Windfall
  - 4. Prosperity

Question ID : 26433074044  
Status : Answered  
Chosen Option : 2

Q.6 Select the most appropriate option that can substitute the underlined segment in the given sentence.

The treaty was signed by both the parties to retain the status-quo.

- Ans
- 1. previous condition
  - 2. unnatural behaviour
  - 3. current situation
  - 4. class of societies

Question ID : 26433099875  
Status : Answered  
Chosen Option : 3

Q.7 Select the most appropriate synonym of the word given in the bracket to fill in the blank.

Rohan \_\_\_\_\_ (insufficient) the compassion required to be a doctor.

- Ans
- 1. oversized
  - 2. lacked
  - 3. was deprived
  - 4. voided

Question ID : 26433084620  
Status : Answered  
Chosen Option : 2

Q.8 Select the correct spelling of the underlined word in the following sentence.

You can eat anything you like accept the rice pudding.

- Ans
- 1. axcept
  - 2. accede
  - 3. except
  - 4. assess

Question ID : 26433072369  
Status : Answered  
Chosen Option : 3

Q.9 Identify the spelling error in the given sentence and select the option that rectifies the error.

He dared to compete against the experienced boxer.

- Ans
- 1. compete
  - 2. ageinst
  - 3. experianced
  - 4. deired

Question ID : 26433060320  
Status : Answered  
Chosen Option : 1

Q.10 Parts of the following sentence have been given as options. One of them may contain an error. Select the part that contains the error from the given options. If you don't find any error, mark 'No error' as your answer.

Last night I played my guitar loudly and the neighbours complain.

- Ans
- 1. Last night I played
  - 2. and the neighbours complain
  - 3. No error
  - 4. my guitar loudly

Question ID : 26433090486  
Status : Answered  
Chosen Option : 2

Q.11 Select the most appropriate meaning of the given idiom.

Has bigger fish to fry

- Ans
- 1. Has better choice of food
  - 2. Has easier plans to solve the issue
  - 3. Has more important work to do
  - 4. Has greater plans to discuss

Question ID : 26433073494  
Status : Answered  
Chosen Option : 3

**Q.12** Select the most appropriate **ANTONYM** of the given word.  
**Escalate**

- Ans**  1. Corrupt  
 2. Intensify  
 3. Diminish  
 4. Enlarge

Question ID : 26433084751  
Status : Answered  
Chosen Option : 3

**Q.13** Select the most appropriate **ANTONYM** of the given word.

**Follow**

- Ans**  1. Ensue  
 2. Predate  
 3. Supplant  
 4. Displace

Question ID : 26433084599  
Status : Answered  
Chosen Option : 2

**Q.14** Select the correct word for the blanks in the given sentence.

I need a blue \_\_\_\_\_ for writing and my brother runs a \_\_\_\_\_ for dogs.

- Ans**  1. shelter  
 2. nib  
 3. pen  
 4. herd

Question ID : 26433060531  
Status : Answered  
Chosen Option : 3

**Q.15** Select the most appropriate option to fill in the blanks in the given sentence.

Shelley is good at \_\_\_\_\_ and also has a new \_\_\_\_\_ of the Oxford dictionary launched last month.

- Ans**  1. edition; addition  
 2. addition; addition  
 3. addition; edition  
 4. edition; edition

Question ID : 26433084774  
Status : Answered  
Chosen Option : 3

**Comprehension:**

In the following passage, some words have been deleted. Read the passage carefully and select the most appropriate option to fill in each blank.

Looking at the stars is a glimpse (1) \_\_\_\_\_ history. Some of the things we see (2) \_\_\_\_\_ millions of light-years (3) \_\_\_\_\_. Everything in the universe (4) \_\_\_\_\_ a past but stars don't try to hide it. They just (5) \_\_\_\_\_ shining, for everyone to see.

**SubQuestion No : 16**

**Q.16 Select the most appropriate option to fill in blank number 1.**

- Ans  1. among  
 2. besides  
 3. up  
 4. of

Question ID : 26433089313  
Status : Answered  
Chosen Option : 4

**Comprehension:**

In the following passage, some words have been deleted. Read the passage carefully and select the most appropriate option to fill in each blank.

Looking at the stars is a glimpse (1) \_\_\_\_\_ history. Some of the things we see (2) \_\_\_\_\_ millions of light-years (3) \_\_\_\_\_. Everything in the universe (4) \_\_\_\_\_ a past but stars don't try to hide it. They just (5) \_\_\_\_\_ shining, for everyone to see.

**SubQuestion No : 17**

**Q.17 Select the most appropriate option to fill in blank number 2.**

- Ans  1. flush  
 2. separate  
 3. grow  
 4. are

Question ID : 26433089314  
Status : Answered  
Chosen Option : 4

**Comprehension:**

In the following passage, some words have been deleted. Read the passage carefully and select the most appropriate option to fill in each blank.

Looking at the stars is a glimpse (1) \_\_\_\_\_ history. Some of the things we see (2) \_\_\_\_\_ millions of light-years (3) \_\_\_\_\_. Everything in the universe (4) \_\_\_\_\_ a past but stars don't try to hide it. They just (5) \_\_\_\_\_ shining, for everyone to see.

**SubQuestion No : 18**

**Q.18 Select the most appropriate option to fill in blank number 3.**

- Ans  1. now  
 2. away  
 3. between  
 4. close

Question ID : 26433089315  
Status : Answered  
Chosen Option : 2

**Comprehension:**

In the following passage, some words have been deleted. Read the passage carefully and select the most appropriate option to fill in each blank.

Looking at the stars is a glimpse (1) \_\_\_\_\_ history. Some of the things we see (2) \_\_\_\_\_ millions of light-years (3) \_\_\_\_\_. Everything in the universe (4) \_\_\_\_\_ a past but stars don't try to hide it. They just (5) \_\_\_\_\_ shining, for everyone to see.

**SubQuestion No : 19**

**Q.19** Select the most appropriate option to fill in blank number 4.

- Ans  1. have  
 2. should  
 3. has  
 4. can

Question ID : 26433089316  
Status : Answered  
Chosen Option : 3

**Comprehension:**

In the following passage, some words have been deleted. Read the passage carefully and select the most appropriate option to fill in each blank.

Looking at the stars is a glimpse (1) \_\_\_\_\_ history. Some of the things we see (2) \_\_\_\_\_ millions of light-years (3) \_\_\_\_\_. Everything in the universe (4) \_\_\_\_\_ a past but stars don't try to hide it. They just (5) \_\_\_\_\_ shining, for everyone to see.

**SubQuestion No : 20**

**Q.20** Select the most appropriate option to fill in blank number 5.

- Ans  1. blight  
 2. part  
 3. force  
 4. keep

Question ID : 26433089317  
Status : Answered  
Chosen Option : 4

Section : Part-D-Hindi

**Q.1** निम्न विकल्पों में से शुद्ध वाक्य का चयन कीजिए।

- Ans  1. विश्वेश्वर ने दो मकान खरीदे।  
 2. वह बैठे और एक कहानी सुनाया।  
 3. पत्नी ने एक पत्र लिखी।  
 4. मैंने आज भात नहीं खाया हूँ।

Question ID : 26433063076  
Status : Not Answered  
Chosen Option : --



Q.2 निम्नलिखित विकल्पों में से किस एक वाक्य में संख्यावाचक विशेषण का उचित प्रयोग नहीं किया गया है?

- Ans
- 1. गिलास में आधा पानी बचा है।
  - 2. ट्रेन में पचास आदमी थे।
  - 3. मैं शौभाग्यशाली हूँ, जिसका ऐसा मित्र है।
  - 4. कार में तीन लोग थे।

Question ID : 26433062970  
Status : Not Answered  
Chosen Option : --

Q.3 'हमें गरीब लोगों की मदद करनी चाहिए।' ऊपर दिए वाक्य में रेखांकित स्थान पर आने वाले शब्द का पर्यायवाची क्या होगा?

- Ans
- 1. परोपकार
  - 2. दया
  - 3. अवहेलना
  - 4. सहायता

Question ID : 26433085104  
Status : Not Answered  
Chosen Option : --

Q.4 निम्नलिखित विकल्पों में से 'जो किसी व्यक्ति या संस्था का प्रतिनिधित्व करता हो' वाक्यांश के लिए एक सार्थक शब्द क्या होगा?

- Ans
- 1. कर्तव्यपरायण
  - 2. उत्तरदायी
  - 3. प्रतिनिधि
  - 4. निष्ठावान

Question ID : 26433062538  
Status : Not Answered  
Chosen Option : --

Q.5 निम्न वाक्य में रेखांकित शब्द को विकल्पों में दिए गए शब्दों में से सर्वाधिक उपयुक्त शब्द से बदलें। समालोचक साहित्य का अन्वेषण करते हैं।

- Ans
- 1. विरेचन
  - 2. अनुशीलन
  - 3. अनुसंधान
  - 4. अध्ययन

Question ID : 26433062877  
Status : Not Answered  
Chosen Option : --

Q.6 'अमृत' का पर्याय निम्न में से क्या है?

- Ans  1. तोय  
 2. पीयूष  
 3. हय  
 4. अभ्र

Question ID : 26433062914  
Status : Not Answered  
Chosen Option : --

Q.7 निम्नलिखित वाक्य के किस शब्द में अशुद्धि है?  
राम और श्याम विद्यालय जा रहे हैं।

- Ans  1. राम  
 2. श्याम  
 3. रहे  
 4. विद्यालय

Question ID : 26433066764  
Status : Not Answered  
Chosen Option : --

Q.8 'मन वृन्दावन होना' मुहावरे का सही अर्थ है -

- Ans  1. घूमने जाना  
 2. भक्ति भाव होना  
 3. प्रेम हो जाना  
 4. अत्यधिक प्रसन्न होना

Question ID : 26433065932  
Status : Not Answered  
Chosen Option : --

Q.9 'खाक में मिलाना' मुहावरे का सही अर्थ क्या है?

- Ans  1. जला देना  
 2. प्रमाण नष्ट कर देना  
 3. मिट्टी में मिलाना  
 4. नष्ट करना

Question ID : 26433065916  
Status : Not Answered  
Chosen Option : --

Q.10 'नयनों को सुंदर लगने वाला' वाक्यांश के लिए उचित शब्द क्या होगा?

- Ans
- 1. अतुलनीय
  - 2. अनुपम
  - 3. मनोहर
  - 4. नयनाभिराम

Question ID : 26433067069  
Status : Not Answered  
Chosen Option : --

Q.11 निम्नलिखित वाक्य में रेखांकित खंड के स्थान पर प्रयुक्त होने वाले सबसे उपयुक्त विकल्प का चयन कीजिए।  
मुख्य अतिथि ने छात्रों से पुरस्कार प्रदान किए।

- Ans
- 1. का
  - 2. को
  - 3. के साथ
  - 4. में

Question ID : 26433079664  
Status : Not Answered  
Chosen Option : --

Q.12 निम्नलिखित वाक्यांश के लिए उपयुक्त सार्थक शब्द क्या होगा?  
सूर्य के डूबने का समय

- Ans
- 1. सूर्यास्त
  - 2. उदयाचल
  - 3. क्षितिज
  - 4. अस्ताचल

Question ID : 26433073310  
Status : Not Answered  
Chosen Option : --

Q.13 निम्न वाक्य में रेखांकित शब्द के विलोम शब्द से रिक्त स्थान की पूर्ति कीजिए।  
'कुरूप' होना केवल बाहरी गुण है जबकि \_\_\_\_\_ होना आंतरिक।

- Ans
- 1. सुंदर
  - 2. धनवान
  - 3. धैर्य
  - 4. मलिन

Question ID : 26433085073  
Status : Not Answered  
Chosen Option : --

Q.14 'खगोल' शब्द का विलोम क्या होगा?

- Ans
- 1. पाताल
  - 2. पृथ्वी
  - 3. भूगोल
  - 4. पहाड़

Question ID : 26433067095

Status : Not Answered

Chosen Option : --

Q.15 निम्नलिखित में से विशेषण सम्बन्धी अशुद्धि युक्त वाक्य का चयन कीजिए।

- Ans
- 1. यह पीले फूलों की माला है।
  - 2. यह एक अच्छा विकल्प है।
  - 3. तुम बहुत धीरे स्वर में बोलते हो।
  - 4. यह एक बढ़िया किताब है।

Question ID : 26433062998

Status : Not Answered

Chosen Option : --

**Comprehension:**

प्रश्न संख्या 1 से 5 तक के उत्तर दिए गए गद्यांश के आधार पर दीजिए।

मिठाइयों के बाद कुछ दुकानें लोहे की चीज़ों की हैं, कुछ गिलट और कुछ नकली गहनों की। लड़कों के लिए यहाँ कोई 1. \_\_\_\_\_ न था। वे सब आगे बढ़ जाते हैं। हमिद लोहे की दुकान पर रुक जाता है। कई चिमटे रखे हुए थे। उसे ख्याल आया, दादी के पास चिमटा नहीं है। तब से 2. \_\_\_\_\_ उतारती हैं तो हाथ जल जाता है। अगर वह चिमटा ले जाकर दादी को दे दे, तो वह कितनी 3. \_\_\_\_\_ होंगी ! फिर उनकी उँगलियाँ कभी न जलेंगी। घर में काम की चीज़ हो जाएगी। खिलौनों से क्या फायदा ? व्यर्थ में पैसे खराब होते हैं। ज़रा देर ही तो 4. \_\_\_\_\_ होती है। फिर तो खिलौने को कोई आँख उठाकर नहीं देखता। ये तो घर पहुँचते-पहुँचते टूट-फूट कर बराबर हो जाएँगे। 5. \_\_\_\_\_ कितने काम की चीज़ है! रोटियाँ तब से उतार लो, चूल्हे में सेंक लो।

**SubQuestion No : 16**

Q.16 विकल्पों में से उपयुक्त शब्द के चयन द्वारा रिक्त स्थान 1 की पूर्ति कीजिए।

- Ans
- 1. आकर्षण
  - 2. आसरा
  - 3. विशेषता
  - 4. आवश्यक

Question ID : 26433069919

Status : Not Answered

Chosen Option : --

**Comprehension:**

प्रश्न संख्या 1 से 5 तक के उत्तर दिए गए गद्यांश के आधार पर दीजिए।  
मिठाइयों के बाद कुछ दुकानें लोहे की चीजों की हैं, कुछ गिलट और कुछ नकली गहनों की। लड़कों के लिए यहाँ कोई 1. \_\_\_\_\_ न था। वे सब आगे बढ़ जाते हैं। हामिद लोहे की दुकान पर रुक जाता है। कई चिमटे रखे हुए थे। उसे ख्याल आया, दादी के पास चिमटा नहीं है। तब से 2. \_\_\_\_\_ उतारती हैं तो हाथ जल जाता है। अगर वह चिमटा ले जाकर दादी को दे दे, तो वह कितनी 3. \_\_\_\_\_ होंगी ! फिर उनकी उँगलियाँ कभी न जलेंगी। घर में काम की चीज़ हो जाएगी। खिलौनों से क्या फायदा ? व्यर्थ में पैसे खराब होते हैं। ज़रा देर ही तो 4. \_\_\_\_\_ होती है। फिर तो खिलौने को कोई आँख उठाकर नहीं देखता। ये तो घर पहुँचते-पहुँचते टूट-फूट कर बराबर हो जाएंगे। 5. \_\_\_\_\_ कितने काम की चीज़ है! रोटियाँ तब से उतार लो, चूल्हे में सेंक लो।

**SubQuestion No : 17**

Q.17 विकल्पों में से उपयुक्त शब्द के चयन द्वारा रिक्त स्थान 2 की पूर्ति कीजिए।

- Ans  1. रोटियाँ  
 2. पूरियाँ  
 3. फुलकियाँ  
 4. कचौरियाँ

Question ID : 26433069920

Status : Not Answered

Chosen Option : --

**Comprehension:**

प्रश्न संख्या 1 से 5 तक के उत्तर दिए गए गद्यांश के आधार पर दीजिए।  
मिठाइयों के बाद कुछ दुकानें लोहे की चीजों की हैं, कुछ गिलट और कुछ नकली गहनों की। लड़कों के लिए यहाँ कोई 1. \_\_\_\_\_ न था। वे सब आगे बढ़ जाते हैं। हामिद लोहे की दुकान पर रुक जाता है। कई चिमटे रखे हुए थे। उसे ख्याल आया, दादी के पास चिमटा नहीं है। तब से 2. \_\_\_\_\_ उतारती हैं तो हाथ जल जाता है। अगर वह चिमटा ले जाकर दादी को दे दे, तो वह कितनी 3. \_\_\_\_\_ होंगी ! फिर उनकी उँगलियाँ कभी न जलेंगी। घर में काम की चीज़ हो जाएगी। खिलौनों से क्या फायदा ? व्यर्थ में पैसे खराब होते हैं। ज़रा देर ही तो 4. \_\_\_\_\_ होती है। फिर तो खिलौने को कोई आँख उठाकर नहीं देखता। ये तो घर पहुँचते-पहुँचते टूट-फूट कर बराबर हो जाएंगे। 5. \_\_\_\_\_ कितने काम की चीज़ है! रोटियाँ तब से उतार लो, चूल्हे में सेंक लो।

**SubQuestion No : 18**

Q.18 विकल्पों में से उपयुक्त शब्द के चयन द्वारा रिक्त स्थान 3 की पूर्ति कीजिए।

- Ans  1. सौभाग्यशाली  
 2. प्रसन्न  
 3. निराश  
 4. दुःखी

Question ID : 26433069921

Status : Not Answered

Chosen Option : --

**Comprehension:**

प्रश्न संख्या 1 से 5 तक के उत्तर दिए गए गद्यांश के आधार पर दीजिए।  
मिठाइयों के बाद कुछ दुकानें लोहे की चीज़ों की हैं, कुछ गिलट और कुछ नकली गहनों की। लड़कों के लिए यहाँ कोई 1. \_\_\_\_\_ न था। वे सब आगे बढ़ जाते हैं। हामिद लोहे की दुकान पर रुक जाता है। कई चिमटे रखे हुए थे। उसे ख्याल आया, दादी के पास चिमटा नहीं है। तब से 2. \_\_\_\_\_ उतारती हैं तो हाथ जल जाता है। अगर वह चिमटा ले जाकर दादी को दे दे, तो वह कितनी 3. \_\_\_\_\_ होंगी ! फिर उनकी उँगलियाँ कभी न जलेंगी। घर में काम की चीज़ हो जाएगी। खिलौनों से क्या फायदा ? व्यर्थ में पैसे खराब होते हैं। ज़रा देर ही तो 4. \_\_\_\_\_ होती है। फिर तो खिलौने को कोई आँख उठाकर नहीं देखता। ये तो घर पहुँचते-पहुँचते टूट-फूट कर बराबर हो जाएँगे। 5. \_\_\_\_\_ कितने काम की चीज़ है! रोटियाँ तब से उतार लो, चूल्हे में सेंक लो।

**SubQuestion No : 19**

Q.19 विकल्पों में से उपयुक्त शब्द के चयन द्वारा रिक्त स्थान 4 की पूर्ति कीजिए।

- Ans
- 1. उत्सुकता
  - 2. आशा
  - 3. आस
  - 4. खुशी

Question ID : 26433069922

Status : Not Answered

Chosen Option : --

**Comprehension:**

प्रश्न संख्या 1 से 5 तक के उत्तर दिए गए गद्यांश के आधार पर दीजिए।  
मिठाइयों के बाद कुछ दुकानें लोहे की चीज़ों की हैं, कुछ गिलट और कुछ नकली गहनों की। लड़कों के लिए यहाँ कोई 1. \_\_\_\_\_ न था। वे सब आगे बढ़ जाते हैं। हामिद लोहे की दुकान पर रुक जाता है। कई चिमटे रखे हुए थे। उसे ख्याल आया, दादी के पास चिमटा नहीं है। तब से 2. \_\_\_\_\_ उतारती हैं तो हाथ जल जाता है। अगर वह चिमटा ले जाकर दादी को दे दे, तो वह कितनी 3. \_\_\_\_\_ होंगी ! फिर उनकी उँगलियाँ कभी न जलेंगी। घर में काम की चीज़ हो जाएगी। खिलौनों से क्या फायदा ? व्यर्थ में पैसे खराब होते हैं। ज़रा देर ही तो 4. \_\_\_\_\_ होती है। फिर तो खिलौने को कोई आँख उठाकर नहीं देखता। ये तो घर पहुँचते-पहुँचते टूट-फूट कर बराबर हो जाएँगे। 5. \_\_\_\_\_ कितने काम की चीज़ है! रोटियाँ तब से उतार लो, चूल्हे में सेंक लो।

**SubQuestion No : 20**

Q.20 विकल्पों में से उपयुक्त शब्द के चयन द्वारा रिक्त स्थान 5 की पूर्ति कीजिए।

- Ans
- 1. चिमटा
  - 2. प्लास
  - 3. चिमटी
  - 4. पेचकस

Question ID : 26433069923

Status : Not Answered

Chosen Option : --