

Constable GD in CAPFs SSF Rifleman GD in Assam Rifles and Sepoy in NCB Examination 2022

Roll Number	www.govtjobsalert.in
Candidate Name	www.govtjobsalert.in
Venue Name	Gyanstali Mahavidyalaya
Exam Date	23/01/2023
Exam Time	2:30 PM - 3:30 PM
Subject	Constable GD Examination 2022

Section : Part-A-General Intelligence and Reasoning

Q.1 Which of the following numbers will replace the question mark (?) in the given series?
2, 12, 36, ?, 150, 252

- Ans
- 1. 30
 - 2. 60
 - 3. 50
 - 4. 80

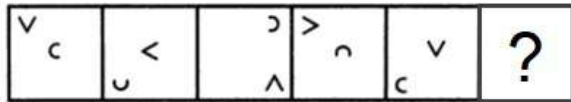
Question ID : 26433085351
Status : Not Answered
Chosen Option : --

Q.2 'A + B' means 'A is the father of B'
'A - B' means 'A is the wife of B'
'A × B' means 'A is the brother of B'
'A ÷ B' means 'A is the daughter of B'
If 'P - R × Q + S', then which of the following statements is true?

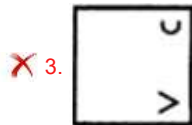
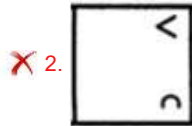
- Ans
- 1. P is the sister-in-law of R.
 - 2. P is the sister-in-law of Q.
 - 3. Q is the sister-in-law of P.
 - 4. P is the sister-in-law of S.

Question ID : 26433082759
Status : Answered
Chosen Option : 2

Q.3 Select the figure from among the given options that can replace the question mark (?) in the following series.



Ans



Question ID : 26433080502

Status : Answered

Chosen Option : 1

Q.4 Which of the following terms will replace the question mark (?) in the given series?
XFCJ, ADFH, ?, GZLD, JXOB

Ans ✓ 1. DBIF

✗ 2. BDFI

✗ 3. FBFI

✗ 4. XDFI

Question ID : 26433068982

Status : Answered

Chosen Option : 1

Q.5 Select the set in which the numbers are related in the same way as are the numbers of the following sets.

(NOTE : Operations should be performed on the whole numbers, without breaking down the numbers into its constituent digits. E.g. 13 – Operations on 13 such as adding/subtracting/multiplying etc. to 13 can be performed. Breaking down 13 into 1 and 3 and then performing mathematical operations on 1 and 3 is not allowed)

(4, 8, 256)

(2, 9, 144)

Ans ✓ 1. (6, 9, 432)

✗ 2. (4, 9, 258)

✗ 3. (8, 5, 340)

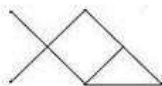
✗ 4. (3, 7, 162)

Question ID : 26433076539

Status : Not Answered

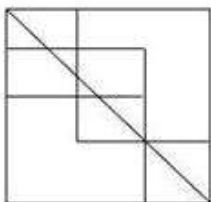
Chosen Option : --

Q.6 Select the option in which the given figure is embedded (rotation is NOT allowed).

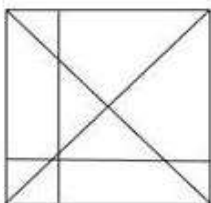


Ans

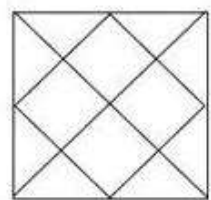
✗ 1.



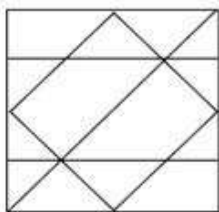
✗ 2.



✓ 3.



✗ 4.



Question ID : 26433076719

Status : Answered

Chosen Option : 3

Q.7 Select the option that is related to the third word in the same way as the second word is related to the first word. (The words must be considered as meaningful English words and must not be related to each other based on the number of letters/number of consonants/vowels in the word)

Cup : Crockery :: Sharpener : ?

Ans ✗ 1. Eraser

✓ 2. Stationery

✗ 3. Dust

✗ 4. Furniture

Question ID : 26433082933

Status : Answered

Chosen Option : 2

Q.8 Select the option that is related to the third term in the same way as the second term is related to the first term.

APTITUDE : BQUJUVEF :: ANALOGY : ?

- Ans
- 1. ZNZMOGY
 - 2. BOBMPHZ
 - 3. YGOLANA
 - 4. LOANAYG

Question ID : 26433057692
Status : Answered
Chosen Option : 2

Q.9 Select the correct mirror image of the given figure when the mirror is placed at MN as shown below.

x c U Q d h k
M ————— N

- Ans
- 1. k h b Q U c x
 - 2. x c n σ q μ k
 - 3. x c n σ q μ k
 - 4. x c n δ q y k

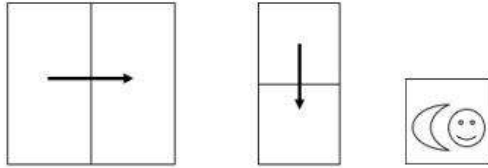
Question ID : 26433080814
Status : Answered
Chosen Option : 3

Q.10 Select the letter-cluster from among the given options that can replace the question mark (?) in the following series.
STOP, VVSU, YXWZ, ?, EBEJ

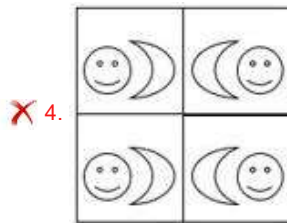
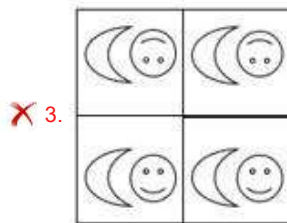
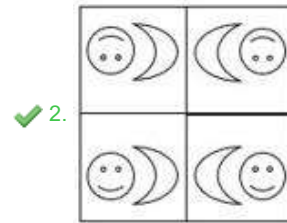
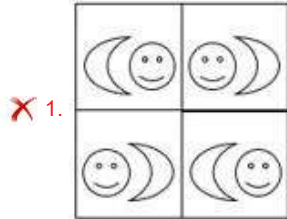
- Ans
- 1. AZAE
 - 2. BZAE
 - 3. BAAE
 - 4. AABE

Question ID : 26433079030
Status : Answered
Chosen Option : 2

Q.11 A paper is folded and cut as shown below. How will it appear when unfolded?



Ans



Question ID : 26433089786

Status : Answered

Chosen Option : 2

Q.12 Three Statements are given followed by Three conclusions numbered I, II and III. Assuming the statements to be true, even if they seem to be at variance with commonly known facts, decide which of the conclusions logically follow(s) from the statements.

Statements:

All pillows are bed.
Some beds are cupboards.
All cupboards are wood.

Conclusions:

I. Some beds are pillows.
II. Some cupboards are beds.
III. All wood are cupboards.

- Ans
- 1. Both conclusions II and III follow.
 - 2. Both conclusions I and II follow.
 - 3. All conclusions follow.
 - 4. Both conclusions I and III follow.

Question ID : 26433074637

Status : Not Attempted and
Marked For Review

Chosen Option : --

Q.13 Which two signs should be interchanged to make the below equation mathematically correct?

$$24 \times 16 + 8 - 36 \div 18 = 30$$

- Ans
- 1. - and +
 - 2. + and ÷
 - 3. × and -
 - 4. ÷ and ×

Question ID : 264330117549

Status : Answered

Chosen Option : 2

Q.14 Which of the following numbers will replace the question mark (?) in the given series?
1, 9, 41, 169, ?

- Ans
- 1. 440
 - 2. 681
 - 3. 256
 - 4. 148

Question ID : 26433082009

Status : Answered

Chosen Option : 2

Q.15 In a certain code language, 'HUMAN' is written as 'HVMBN' and 'BEING' is written as 'BFIOG'. How will 'NURSE' be written in that language?

- Ans
- 1. NVRTE
 - 2. NRVTE
 - 3. NURTE
 - 4. NVRET

Question ID : 26433087253

Status : Answered

Chosen Option : 1

Q.16 In a certain code language, 'CRAVE' is written as 'HVFZJ' and 'ROUND' is written as 'WSZRI'. How will 'BIRDY' be written in the same code language?

- Ans
- 1. KRYSD
 - 2. GMWHD
 - 3. HTEBW
 - 4. HRFBW

Question ID : 26433068143

Status : Answered

Chosen Option : 2

Q.17 Kirti, Suman, Shubh, Kanak, Pari, Charu, Shlok and Shivi are sitting around a square table facing the centre of the table. Some of them are sitting at the corners, while some are sitting at the exact centre of the sides. Kirti sits third to the left of Shubh. Kirti sits at one of the corners. Kanak sits second to the right of Pari. Pari does not sit at any of the corners. Pari is not an immediate neighbour of Kirti. Suman is an immediate neighbour of Charu. Suman does not sit at any of the middle of the sides. Only three people sit between Suman and Shlok. Who is an immediate neighbour of Kanak?

- Ans
- 1. Charu
 - 2. Kirti
 - 3. Shubh
 - 4. Suman

Question ID : 26433082291

Status : Not Answered

Chosen Option : --

Q.18 Six students are sitting around a circular table facing the centre. Prem is an immediate neighbour of Nolan and Suraj. Madhu is sitting third to the right of Prem. Suraj is sitting second to the right of Madhu. Raj is an immediate neighbour of Madhu and Nolan. Steve is sitting third to the right of Nolan. Prem is sitting second to the right of Steve. Who is the immediate neighbour of Raj and Prem?

- Ans
- 1. Suraj
 - 2. Steve
 - 3. Nolan
 - 4. Madhu

Question ID : 26433080396

Status : Answered

Chosen Option : 3

Q.19 Which two signs should be interchanged in the following equation to make it correct?

$$785 - 125 + 12 \div 6 \times 39 = 574$$

- Ans
- 1. \times and $+$
 - 2. \times and \div
 - 3. $+$ and \div
 - 4. $-$ and $+$

Question ID : 26433090135

Status : Not Answered

Chosen Option : --

Q.20 Which option represents the correct order of the given words as they would appear in the English dictionary?

- 1 vehicle
- 2 verify
- 3 vegan
- 4 venom
- 5 vein

- Ans 1. 3,4,2,1,5
2. 3,1,5,4,2
3. 4,2,1,3,5
4. 3,5,4,1,2

Question ID : 26433069324
Status : Answered
Chosen Option : 2

Section : Part-B-General Knowledge and General awareness

Q.1 What is India's rank in world population as of 2022?

- Ans 1. 1
2. 5
3. 3
4. 2

Question ID : 264330116046
Status : Answered
Chosen Option : 4

Q.2 How many elements are there in the modern periodic table?

- Ans 1. 124
2. 118
3. 102
4. 106

Question ID : 264330115174
Status : Answered
Chosen Option : 2

Q.3 As per Article 279A of the amended Constitution of India, the GST Council which will be a joint forum of the Centre and the States, shall consist of the following members:

- (i) Union Finance Minister
- (ii) The Union Minister of State, in-charge of Revenue or finance
- (iii) The Minister In-charge of finance or taxation or any other Minister nominated by each State Government

- Ans 1. Only (iii)
2. Both (i) and (ii)
3. (i), (ii) and (iii)
4. Only (i)

Question ID : 264330103807
Status : Not Answered
Chosen Option : --

Q.4 During Green Revolution, farmers cultivated crops using _____ of seeds.

- Ans 1. Monocot seeds
 2. High Yielding Variety
 3. Dicot seeds
 4. Low Yielding Variety

Question ID : 264330115417
Status : Answered
Chosen Option : 2

Q.5 Which Union Minister of India inaugurated the Entrepreneurship Cell and Centre of Innovation at C-DOT campus, Delhi in November 2022?

- Ans 1. Giriraj Singh
 2. Bhupender Yadav
 3. Ashwini Vaishnav
 4. Subrahmanyam Jaishankar

Question ID : 264330114955
Status : Not Answered
Chosen Option : --

Q.6 Which of the following states was the host of the 83rd National Table Tennis Championship, 2022?

- Ans 1. Meghalaya
 2. Assam
 3. Uttar Pradesh
 4. Manipur

Question ID : 26433090751
Status : Not Answered
Chosen Option : --

Q.7 Who became the first ever woman chief of the Securities and Exchange Board of India (SEBI)?

- Ans 1. Samantha Cristoforetti
 2. Gita Gopinath
 3. Manjari Jaruhar
 4. Madhabi Puri Buch

Question ID : 264330115039
Status : Not Answered
Chosen Option : --

Q.8 4 kilo calories of energy is released by _____ .

- Ans 1. 4 grams of proteins
 2. one gram of protein
 3. one gram of sugar
 4. 4 grams of fat

Question ID : 264330115220
Status : Not Answered
Chosen Option : --

Q.9 Which article of Indian Constitution provides for right to freedom of speech?

- Ans 1. 19
 2. 21
 3. 21A
 4. 20

Question ID : 264330115637
Status : Answered
Chosen Option : 4

Q.10 Which of the following is an extension of the Indian Ocean?

- Ans 1. Aral Sea
 2. Arabian Sea
 3. Yellow Sea
 4. Caribbean Sea

Question ID : 264330116007
Status : Answered
Chosen Option : 2

Q.11 A famous Tamil epic, the Silappadikaram was composed by a poet named Ilango, around _____ years ago.

- Ans 1. 3000
 2. 2200
 3. 1800
 4. 2600

Question ID : 26433089127
Status : Not Answered
Chosen Option : --

Q.12 Makar Sankranti is celebrated by the Sindhi community by which of the following names?

- Ans 1. Tirmoori
 2. Teejri
 3. Lal Loi
 4. Thadri

Question ID : 26433097114
Status : Not Answered
Chosen Option : --

Q.13 How many players on each side are allowed on the field at a time in the game of Kabaddi?

- Ans 1. 7
 2. 8
 3. 9
 4. 10

Question ID : 264330115935
Status : Not Answered
Chosen Option : --

Q.14 In which state was the first jute mill of India set up?

- Ans 1. Odisha
 2. West Bengal
 3. Assam
 4. Bihar

Question ID : 264330115583
Status : Answered
Chosen Option : 2

Q.15 Who among the following won awards and recognitions for the development of Kathak dance form?

- Ans 1. Amala Akkineni
 2. Uday Shankar
 3. Shovana Narayan
 4. Kelucharan Mohapatra

Question ID : 264330115837
Status : Not Answered
Chosen Option : --

Q.16 The total value of _____ goods and services produced in a year, indicates national income.

- Ans
- 1. intermediary
 - 2. unfinished
 - 3. final
 - 4. commercial

Question ID : 264330115336
Status : Not Answered
Chosen Option : --

Q.17 After Independence, Indian Parliament has accepted the _____ pattern of society as the objective of social and economic policy.

- Ans
- 1. capitalist
 - 2. liberal
 - 3. socialist
 - 4. communist

Question ID : 264330116132
Status : Answered
Chosen Option : 2

Q.18 Veer Lakhn Nayak, a legendary tribal leader from _____ participated in Quit India Movement and was hanged by the Britishers in 1943.

- Ans
- 1. United Provinces
 - 2. Orissa
 - 3. Bihar
 - 4. Bengal

Question ID : 26433089896
Status : Not Answered
Chosen Option : --

Q.19 Chu Faat is the folk dance of which of the following North-Eastern states of India?

- Ans
- 1. Nagaland
 - 2. Arunachal Pradesh
 - 3. Sikkim
 - 4. Assam

Question ID : 26433086715
Status : Not Answered
Chosen Option : --

Q.20 _____ is to assess the service level compliance of the city with respect to quality, quantity, and coverage of water supply, sewerage and septage management, extent of reuse & recycle of used water and conservation of water bodies.

- Ans
- 1. "Pey Jal Survekshan"
 - 2. "Ayushman Bharat"
 - 3. "Namami Gange"
 - 4. "Indradhanush scheme"

Question ID : 264330116183
Status : Answered
Chosen Option : 1

Section : Part-C-Elementary Mathematics

Q.1 The HCF and LCM of two natural numbers are 7 and 84, respectively. If one of the numbers is 7, then the difference between the two numbers is:

- Ans
- 1. 7
 - 2. 84
 - 3. 77
 - 4. 91

Question ID : 26433087337
Status : Answered
Chosen Option : 3

Q.2 A manufacturer sells his product at 10% profit to the distributor and the distributor sells it to the customer at 5% profit. If the cost price to the customer is Rs.11,500, determine the profit (in Rs.) (neglect the fraction) earned by the manufacturer.

- Ans
- 1. 700
 - 2. 1205
 - 3. 845
 - 4. 995

Question ID : 26433071311
Status : Not Answered
Chosen Option : --

Q.3 A person driving to a store travels 100 metres in 200 seconds. Then he went to another store driving another 200 metres in 400 seconds. What is his average speed (in m/s)?

- Ans
- 1. 0.5
 - 2. 0.2
 - 3. 0.4
 - 4. 0.3

Question ID : 26433082961
Status : Answered
Chosen Option : 1

Q.4

What is the correct ascending order of the fractions $\frac{5}{8}, \frac{4}{9}, \frac{1}{4}, \frac{11}{18}$?

Ans

1. $\frac{4}{9} < \frac{1}{4} < \frac{11}{18} < \frac{5}{8}$

2. $\frac{1}{4} < \frac{4}{9} < \frac{5}{8} < \frac{11}{18}$

3. $\frac{1}{4} < \frac{11}{18} < \frac{4}{9} < \frac{5}{8}$

4. $\frac{1}{4} < \frac{4}{9} < \frac{11}{18} < \frac{5}{8}$

Question ID : 26433080321

Status : Answered

Chosen Option : 4

Q.5 Mohit and Shivam together can complete a piece of work in 4 days, Shivam and Mukesh together can complete it in 5 days and Mohit and Mukesh together can complete it in 6 days. In how many days can Mohit, Shivam and Mukesh together finish the work?

Ans

1. $3\frac{9}{37}$

2. $2\frac{9}{37}$

3. $3\frac{19}{37}$

4. $2\frac{19}{37}$

Question ID : 26433075567

Status : Answered

Chosen Option : 1

Q.6 A, B, and C can complete a work in 9 days and B can do the same work in 18 days. If B takes 33.33% less time than C, find the time taken by C to complete the work.

Ans

1. 24 days

2. 25 days

3. 27 days

4. 22 days

Question ID : 264330116867

Status : Not Attempted and Marked For Review

Chosen Option : --

Q.7 A manufacturer offers a 25% discount on the marked price of a product. The retailer offers another 28% discount on the reduced price. What is the single discount equivalent to the two discounts offered?

- Ans
- 1. 34%
 - 2. 46%
 - 3. 38%
 - 4. 41%

Question ID : 26433063782
Status : Answered
Chosen Option : 2

Q.8 How much interest would Sonia have to pay on a loan of Rs.25,000 at the rate of 12% p.a. compounded quarterly for the period of 1 year (rounded off to two decimal places)?

- Ans
- 1. Rs.3,127.52
 - 2. Rs.3,000.00
 - 3. Rs.2,137.72
 - 4. Rs.3,137.72

Question ID : 26433080392
Status : Not Answered
Chosen Option : --

Q.9 How many metallic spheres, each of diameter 3 cm, should be melted to mould into a solid cylinder of diameter 4 cm and height 54 cm?

- Ans
- 1. 52
 - 2. 42
 - 3. 36
 - 4. 48

Question ID : 26433075208
Status : Answered
Chosen Option : 4

Q.10 If $x[-3\{-6(-a)\}]+6[-3\{-3(-a)\}]=6a$, then find x.

- Ans
- 1. $-\frac{10}{3}$
 - 2. $\frac{10}{3}$
 - 3. 9
 - 4. -9

Question ID : 26433076260
Status : Answered
Chosen Option : 1

Q.11 If Ramu's salary is 10% less than Bhema's salary, by what percentage is Bhema's salary more than Ramu's salary?

- Ans
- 1. 90%
 - 2. 10.00%
 - 3. 11.11%
 - 4. 80%

Question ID : 26433082644
Status : Answered
Chosen Option : 3

Q.12 After giving a discount of 28 percent the selling price of an article is Rs. 13392. The marked price of the article is:

- Ans
- 1. Rs. 18600
 - 2. Rs. 15400
 - 3. Rs. 14800
 - 4. Rs. 16200

Question ID : 264330116752
Status : Answered
Chosen Option : 1

Q.13 Incomes of Teena and Sheena are in the ratio of 2 : 3 and their expenditures are in ratio of 3 : 5. If each saves ₹1,000, then Teena's income is:

- Ans
- 1. ₹4,000
 - 2. ₹5,000
 - 3. ₹6,000
 - 4. ₹8,000

Question ID : 26433082087
Status : Answered
Chosen Option : 1

Q.14 If 85% of $(x - y) = 35%$ of $(x + y)$, Then y is what percentage of x ?

- Ans
- 1. $20\frac{1}{5}\%$
 - 2. $46\frac{2}{3}\%$
 - 3. $41\frac{2}{3}\%$
 - 4. $38\frac{1}{5}\%$

Question ID : 26433080218
Status : Answered
Chosen Option : 3

Q.15 Radha takes a loan of Rs.4,00,000 at 14% per annum compound interest, compounded half-yearly. What is the interest that she repays after 2 years?

- Ans
- 1. Rs.1,24,375.40
 - 2. Rs.1,24,318.40
 - 3. Rs.1,24,398.40
 - 4. Rs.1,24,324.40

Question ID : 26433075322
Status : Not Answered
Chosen Option : --

Q.16 Two trains of equal lengths take 13 seconds and 26 seconds, respectively, to cross a pole. If these trains are moving in the same direction, then how long will they take to cross each other?

- Ans
- 1. 40 seconds
 - 2. 50 seconds
 - 3. 39 seconds
 - 4. 52 seconds

Question ID : 26433074940
Status : Answered
Chosen Option : 4

Q.17 There is a wooden sphere of radius $15\sqrt{3}$ cm. The total surface area of the largest possible cube cut out from the sphere will be:

- Ans
- 1. 540 cm²
 - 2. 900 cm²
 - 3. 600 cm²
 - 4. 5,400 cm²

Question ID : 26433075008
Status : Not Answered
Chosen Option : --

Q.18 Manoj buys 15 pencils for Rs.12 and sells them at the rate of Rs.1.50/pencil. What is his profit percentage?

- Ans
- 1. 64.67%
 - 2. 46.67%
 - 3. 87.50%
 - 4. 85.70%

Question ID : 26433080302
Status : Answered
Chosen Option : 3

Q.19 In a circular race of 1200 m, A and B start from the same point, at the same time with speeds of 27 km/h and 45 km/h, respectively. After how much time will they meet again for the first time on the track when they running in the same direction?

- Ans
- 1. 220 sec
 - 2. 180 sec
 - 3. 200 sec
 - 4. 240 sec

Question ID : 26433079777
Status : Not Answered
Chosen Option : --

Q.20 In a chemistry laboratory, there are two varieties of some acid. Variety A costs Rs.80 per litre, while variety B costs Rs.100 per litre. In what proportion must a scientist mix both the varieties A and B, so that the mixture becomes worth Rs.92 per litre?

- Ans
- 1. 5 : 6
 - 2. 4 : 7
 - 3. 5 : 4
 - 4. 2 : 3

Question ID : 26433075056
Status : Answered
Chosen Option : 4

Section : Part-D-English

Q.1 Select the most appropriate option to fill in the blank.

She liked _____ flat.

- Ans
- 1. they are
 - 2. their
 - 3. there
 - 4. they're

Question ID : 26433084712
Status : Not Answered
Chosen Option : --

Q.2 Select the correct option to substitute the underlined segment in the given sentence. If no substitution is required, select 'No substitution'.

It is more hot now.

- Ans
- 1. more hot then earlier
 - 2. No substitution
 - 3. hotter now
 - 4. hotness now

Question ID : 26433090818
Status : Not Answered
Chosen Option : --

Q.3 Select the most appropriate option to substitute the underlined segment in the given sentence.

Your work diary will of benefit if you use it and keep all the information updated.

- Ans
- 1. diary will benefit of
 - 2. diary will benefitted
 - 3. diary will be of benefit
 - 4. diary of benefit

Question ID : 26433093021
Status : Not Answered
Chosen Option : --

Q.4 Select the most appropriate synonym of the given word.
Forbore

- Ans
- 1. Refrain
 - 2. Submit
 - 3. Yield
 - 4. Surrender

Question ID : 26433086485
Status : Not Answered
Chosen Option : --

Q.5 Select the option that can be used as a one-word substitute for the given group of words.

The situation in which a disease is spread by touching someone or something

- Ans
- 1. Fatal
 - 2. Infected
 - 3. Contagion
 - 4. Malleable

Question ID : 26433089379
Status : Not Answered
Chosen Option : --

Q.6 Select the most appropriate meaning of the given idiom.

On the ball

- Ans
- 1. Sceptic of changes or developments and thoughtful to react to them
 - 2. Aware of any changes or developments and quick to react to them
 - 3. Aware of any changes or developments but avoid to react to them
 - 4. Unaware of any changes or developments and lazy to react to them

Question ID : 26433073648
Status : Not Answered
Chosen Option : --

Q.7 Select the most appropriate option to fill in the blank.

We saw a _____ in the city last year.

- Ans
- 1. knew
 - 2. no
 - 3. gnu
 - 4. new

Question ID : 26433090386
Status : Not Answered
Chosen Option : --

Q.8 Select the most appropriate ANTONYM of the given word.

Drenched

- Ans
- 1. Airy
 - 2. Fresh
 - 3. Damp
 - 4. Lively

Question ID : 26433072209
Status : Not Answered
Chosen Option : --

Q.9 Select the most appropriate ANTONYM of the given word.

Bleak

- Ans
- 1. Fatigued
 - 2. Cordial
 - 3. Clustered
 - 4. Desolate

Question ID : 26433089101
Status : Not Answered
Chosen Option : --

Q.10 Select the most appropriate synonym of the capitalised word in the given sentence.

They tried to get official SANCTIONS for the scheme.

- Ans
- 1. Committees
 - 2. Unholiness
 - 3. Permissions
 - 4. Substances

Question ID : 26433088205
Status : Not Answered
Chosen Option : --

Q.11 Identify the correctly spelt sentence.

- Ans 1. There were two separte sections of students in my school.
 2. There were two separate sections of students in my school.
 3. There were two separte sections of students in my school.
 4. There were two separte sections of students in my school.

Question ID : 26433072837
Status : Not Answered
Chosen Option : --

Q.12 Select the INCORRECTLY spelt word.

- Ans 1. Irresponsible
 2. Capacious
 3. Ravishing
 4. Inadvariant

Question ID : 26433073659
Status : Not Answered
Chosen Option : --

Q.13 The following sentence has been split into four segments. Identify the segment that contains a grammatical error.

Smith will / be learning / French when / they are arriving.

- Ans 1. be learning
 2. French when
 3. Smith will
 4. they are arriving

Question ID : 26433092274
Status : Not Answered
Chosen Option : --

Q.14 In the given sentence, a word is given in brackets. Select the most appropriate synonym of the word to fill in the blank.

The teacher has _____ (admitted) the student's sincere apologies.

- Ans 1. acknowledged
 2. executed
 3. neglected
 4. denied

Question ID : 26433058533
Status : Not Answered
Chosen Option : --

Q.15 Select the most appropriate meaning of the underlined idiom in the given sentence.

She had to break the bank to buy that purse.

- Ans 1. To be very expensive
 2. To rob a bank
 3. To buy something exclusive
 4. To go beyond one's means

Question ID : 26433073760

Status : Not Answered

Chosen Option : --

Comprehension:

In the following passage, some words have been deleted. Read the passage carefully and select the most appropriate option to fill in each blank.

Darwin planned to (1)_____ a book describing his (2)_____. He spent nearly twenty years (3)_____ the matter for his book, which was to deal with every known fact concerning the problem of the species. Unluckily for Darwin, a naturalist named Wallace had been (4)_____ over the same problems and had reached the same solution. He sent Darwin an essay which almost word for word repeated Darwin's own ideas. Yet Wallace, who was an (5)_____, had been working far away in the Malay Archipelago, whilst Darwin had not left England for several years.

SubQuestion No : 16

Q.16 Select the most appropriate option to fill in the blank 1.

- Ans 1. scribble
 2. script
 3. write
 4. paint

Question ID : 26433090556

Status : Not Answered

Chosen Option : --

Comprehension:

In the following passage, some words have been deleted. Read the passage carefully and select the most appropriate option to fill in each blank.

Darwin planned to (1)_____ a book describing his (2)_____. He spent nearly twenty years (3)_____ the matter for his book, which was to deal with every known fact concerning the problem of the species. Unluckily for Darwin, a naturalist named Wallace had been (4)_____ over the same problems and had reached the same solution. He sent Darwin an essay which almost word for word repeated Darwin's own ideas. Yet Wallace, who was an (5)_____, had been working far away in the Malay Archipelago, whilst Darwin had not left England for several years.

SubQuestion No : 17

Q.17 Select the most appropriate option to fill in the blank 2.

- Ans 1. discoveries
 2. facts
 3. articles
 4. failures

Question ID : 26433090557

Status : Not Answered

Chosen Option : --

Comprehension:

In the following passage, some words have been deleted. Read the passage carefully and select the most appropriate option to fill in each blank.

Darwin planned to (1)_____ a book describing his (2)_____. He spent nearly twenty years (3)_____ the matter for his book, which was to deal with every known fact concerning the problem of the species. Unluckily for Darwin, a naturalist named Wallace had been (4)_____ over the same problems and had reached the same solution. He sent Darwin an essay which almost word for word repeated Darwin's own ideas. Yet Wallace, who was an (5)_____, had been working far away in the Malay Archipelago, whilst Darwin had not left England for several years.

SubQuestion No : 18

Q.18 Select the most appropriate option to fill in the blank 3.

- Ans 1. making
 2. observing
 3. collecting
 4. dispersing

Question ID : 26433090558

Status : Not Answered

Chosen Option : --

Comprehension:

In the following passage, some words have been deleted. Read the passage carefully and select the most appropriate option to fill in each blank.

Darwin planned to (1)_____ a book describing his (2)_____. He spent nearly twenty years (3)_____ the matter for his book, which was to deal with every known fact concerning the problem of the species. Unluckily for Darwin, a naturalist named Wallace had been (4)_____ over the same problems and had reached the same solution. He sent Darwin an essay which almost word for word repeated Darwin's own ideas. Yet Wallace, who was an (5)_____, had been working far away in the Malay Archipelago, whilst Darwin had not left England for several years.

SubQuestion No : 19

Q.19 Select the most appropriate option to fill in the blank 4.

- Ans 1. dreaming
 2. thinking
 3. saving
 4. searching

Question ID : 26433090559

Status : Not Answered

Chosen Option : --

Comprehension:

In the following passage, some words have been deleted. Read the passage carefully and select the most appropriate option to fill in each blank.

Darwin planned to (1)_____ a book describing his (2)_____. He spent nearly twenty years (3)_____ the matter for his book, which was to deal with every known fact concerning the problem of the species. Unluckily for Darwin, a naturalist named Wallace had been (4)_____ over the same problems and had reached the same solution. He sent Darwin an essay which almost word for word repeated Darwin's own ideas. Yet Wallace, who was an (5)_____, had been working far away in the Malay Archipelago, whilst Darwin had not left England for several years.

SubQuestion No : 20

Q.20 Select the most appropriate option to fill in the blank 5.

- Ans
- 1. creator
 - 2. artist
 - 3. wanderer
 - 4. explorer

Question ID : 26433090560

Status : Not Answered

Chosen Option : --

Section : Part-D-Hindi

Q.1 निम्न वाक्य में रेखांकित शब्द के स्थान पर सर्वोचित शब्द का चयन कीजिए।
गोलियों की बाढ़ के सामने कोई न टिक सका।

- Ans
- 1. गति
 - 2. दहाड़
 - 3. बौछार
 - 4. बारिश

Question ID : 26433065695

Status : Answered

Chosen Option : 3

Q.2 सुंदर का बेटा मोहन तो गुदड़ी का _____ है।
रिक्त स्थान की पूर्ति उचित शब्द द्वारा कीजिए।

- Ans
- 1. लाल
 - 2. माल
 - 3. धागा
 - 4. कपड़ा

Question ID : 26433062611

Status : Answered

Chosen Option : 1

Q.3 निम्नलिखित किस विकल्प में भाववाचक, समूहवाचक और जातिवाचक संज्ञा का शब्दक्रम सही है?

- Ans 1. दासत्व, घौद, जुलाहा
 2. कावेरी, दीवाली, वर्षा
 3. मकान, मैना, काला सागर
 4. चाँदी, पानी, दौड़

Question ID : 26433063029

Status : Not Attempted and
Marked For Review

Chosen Option : --

Q.4 'जो बहुत बोलता है' वाक्यांश के लिए सार्थक शब्द है-

- Ans 1. वक्ता
 2. वाचक
 3. पतित
 4. वाचाल

Question ID : 26433065862

Status : Answered

Chosen Option : 4

Q.5 निम्नलिखित में से कौन-सा वाक्य संज्ञा के प्रयोग की दृष्टि से शुद्ध है?

- Ans 1. चौकीदार पर ही चोर होने का विश्वास है।
 2. चौकीदार पर ही चोर होने का हक है।
 3. चौकीदार पर ही चोर होने का संदेह है।
 4. चौकीदार पर ही चोर होने का डर है।

Question ID : 26433066954

Status : Answered

Chosen Option : 3

Q.6 मुहावरे और उनके अर्थ का निम्नलिखित में से कौन सा युग्म गलत है?

- Ans 1. लोहा मानना-श्रेष्ठता स्वीकार करना
 2. हथियार डालना-आत्मसमर्पण करना
 3. हाथ पीले करना-असंभव को संभव करना
 4. सुरखाब के पर-असाधारण विशेषता

Question ID : 26433062557

Status : Answered

Chosen Option : 3

Q.7 इस पुष्प की सुगंध मनभावन है।
उपरोक्त वाक्य में रेखांकित शब्द के विलोम शब्द का चयन विकल्पों में से कीजिए।

- Ans 1. दुर्गंध
 2. स्कंध
 3. आभा
 4. सुगंध

Question ID : 26433079748
Status : Answered
Chosen Option : 1

Q.8 “पानीपत की लड़ाई में मराठों की पराजय हुई।”
उक्त वाक्य में प्रयुक्त ‘पराजय’ के स्थान पर उसके विलोम शब्द का प्रयोग निम्न में से किस वाक्य में किया गया है?

- Ans 1. पानीपत की लड़ाई में मराठों की अपकीर्ति हुई।
 2. पानीपत की लड़ाई में मराठों की विजय हुई।
 3. पानीपत की लड़ाई में मराठों की हार हुई।
 4. पानीपत की लड़ाई में मराठों की शिकस्त हुई।

Question ID : 26433067023
Status : Answered
Chosen Option : 2

Q.9 निम्नलिखित में से शुद्ध वाक्य है-

- Ans 1. कौन आदमी आ रहा है?
 2. कौन आदमी आ रह है?
 3. कौन अदमी आ रहा है?
 4. कौन आदमी अ रहा है?

Question ID : 26433066836
Status : Answered
Chosen Option : 1

Q.10 निम्नलिखित में से अशुद्ध वाक्य कौन-सा है?

- Ans 1. निशांत बहुत तेज दौड़ता है।
 2. अश्विन को केवल सौ रुपए मात्र मिले।
 3. अनन्या की आयु बीस वर्ष है।
 4. नेता ने सभी लोगों से चर्चा की।

Question ID : 26433066987
Status : Answered
Chosen Option : 2

Q.11 विकल्पों में दिया गया कौन सा शब्द निम्नलिखित वाक्य में रेखांकित शब्द का पर्यायवाची नहीं है?
आग में तप कर ही 'सोना' खरा होता है।

- Ans
- 1. कंचन
 - 2. अयस
 - 3. स्वर्ण
 - 4. कनक

Question ID : 26433091334
Status : Answered
Chosen Option : 2

Q.12 विकल्पों में से निम्नलिखित वाक्यांश के लिए उपयुक्त शब्द चुनें।
जिसने पवित्र उद्देश्य के लिए जीवन दान किया हो

- Ans
- 1. दुरात्मा
 - 2. धर्मात्मा
 - 3. हुतात्मा
 - 4. जीवात्मा

Question ID : 26433069990
Status : Answered
Chosen Option : 2

Q.13 दिए गए वाक्यांश के लिए सार्थक शब्द बताइए-
'खाने योग्य पदार्थ'

- Ans
- 1. भक्षण
 - 2. भोजनालय
 - 3. उपभोग
 - 4. खाद्य

Question ID : 26433062592
Status : Answered
Chosen Option : 4

Q.14 'लोग उपदेशक का अनुसरण करने में प्रसन्नता का _____ करेंगे।' रिक्त स्थान की पूर्ति उपयुक्त शब्द द्वारा कीजिए।

- Ans
- 1. अनुभव
 - 2. उपवास
 - 3. प्रतिफलन
 - 4. महसूस

Question ID : 26433080897
Status : Answered
Chosen Option : 1

Q.15 निम्न वाक्य में रेखांकित शब्द के स्थान पर उसका उपयुक्त पर्यायवाची शब्द विकल्पों में से कौन-सा होगा?

अधिक मेहनत से उसके चेहरे पर क्लांति आ गई।

- Ans
- 1. खुशी
 - 2. चमक
 - 3. थकान
 - 4. पसीना

Question ID : 26433066900

Status : Answered

Chosen Option : 1

Comprehension:

निम्नलिखित गद्यांश में से कुछ शब्द हटा दिए गए हैं। दिए गए विकल्पों की सहायता से रिक्त स्थानों की पूर्ति कीजिए। प्रत्येक संख्या के लिए उपयुक्त विकल्प का चयन कीजिए।

सामने 1. _____ में सूर्यास्त हो 2. _____ है। गुलाबी सुनहरी धारियाँ नीले आकाश में 3. _____ रही हैं। दूर-दूर 4. _____ पहाड़ों के मुखड़े गहराने लगे और देखते-देखते बतियाँ 5. _____ लगीं।

SubQuestion No : 16

Q.16 रिक्त स्थान 1 की पूर्ति के लिए सर्वाधिक उपयुक्त विकल्प का चयन कीजिए।

- Ans
- 1. समुद्र
 - 2. आकाश
 - 3. धरती
 - 4. बादल

Question ID : 26433079591

Status : Answered

Chosen Option : 2

Comprehension:

निम्नलिखित गद्यांश में से कुछ शब्द हटा दिए गए हैं। दिए गए विकल्पों की सहायता से रिक्त स्थानों की पूर्ति कीजिए। प्रत्येक संख्या के लिए उपयुक्त विकल्प का चयन कीजिए।

सामने 1. _____ में सूर्यास्त हो 2. _____ है। गुलाबी सुनहरी धारियाँ नीले आकाश में 3. _____ रही हैं। दूर-दूर 4. _____ पहाड़ों के मुखड़े गहराने लगे और देखते-देखते बतियाँ 5. _____ लगीं।

SubQuestion No : 17

Q.17 रिक्त स्थान 2 की पूर्ति के लिए सर्वाधिक उपयुक्त विकल्प का चयन कीजिए।

- Ans
- 1. रहता
 - 2. रहा
 - 3. रहे
 - 4. जाता

Question ID : 26433079592

Status : Answered

Chosen Option : 2

Comprehension:

निम्नलिखित गद्यांश में से कुछ शब्द हटा दिए गए हैं। दिए गए विकल्पों की सहायता से रिक्त स्थानों की पूर्ति कीजिए। प्रत्येक संख्या के लिए उपयुक्त विकल्प का चयन कीजिए।
सामने 1. _____ में सूर्यास्त हो 2. _____ है। गुलाबी सुनहरी धारियाँ नीले आकाश में 3. _____ रही हैं। दूर-दूर 4. _____ पहाड़ों के मुखड़े गहराने लगे और देखते-देखते बतियाँ 5. _____ लगीं।

SubQuestion No : 18

Q.18 रिक्त स्थान 3 की पूर्ति के लिए सर्वाधिक उपयुक्त विकल्प का चयन कीजिए।

- Ans 1. लग
 2. फैल
 3. सो
 4. फैलाव

Question ID : 26433079593

Status : Answered

Chosen Option : 2

Comprehension:

निम्नलिखित गद्यांश में से कुछ शब्द हटा दिए गए हैं। दिए गए विकल्पों की सहायता से रिक्त स्थानों की पूर्ति कीजिए। प्रत्येक संख्या के लिए उपयुक्त विकल्प का चयन कीजिए।
सामने 1. _____ में सूर्यास्त हो 2. _____ है। गुलाबी सुनहरी धारियाँ नीले आकाश में 3. _____ रही हैं। दूर-दूर 4. _____ पहाड़ों के मुखड़े गहराने लगे और देखते-देखते बतियाँ 5. _____ लगीं।

SubQuestion No : 19

Q.19 रिक्त स्थान 4 की पूर्ति के लिए सर्वाधिक उपयुक्त विकल्प का चयन कीजिए।

- Ans 1. सोए
 2. फैले
 3. पर्वत
 4. फैलाव

Question ID : 26433079594

Status : Answered

Chosen Option : 3

Comprehension:

निम्नलिखित गद्यांश में से कुछ शब्द हटा दिए गए हैं। दिए गए विकल्पों की सहायता से रिक्त स्थानों की पूर्ति कीजिए। प्रत्येक संख्या के लिए उपयुक्त विकल्प का चयन कीजिए।
सामने 1. _____ में सूर्यास्त हो 2. _____ है। गुलाबी सुनहरी धारियाँ नीले आकाश में 3. _____ रही हैं। दूर-दूर 4. _____ पहाड़ों के मुखड़े गहराने लगे और देखते-देखते बतियाँ 5. _____ लगीं।

SubQuestion No : 20

Q.20 रिक्त स्थान 5 की पूर्ति के लिए सर्वाधिक उपयुक्त विकल्प का चयन कीजिए।

- Ans 1. मिनमिनाने
 2. टिमटिमाने
 3. छुपने
 4. हिलने

Question ID : 26433079595

Status : Answered

Chosen Option : 2