

# Constable GD in CAPFs SSF Rifleman GD in Assam Rifles and Sepoy in NCB Examination 2022

Roll Number	www.govtjobsalert.in
Candidate Name	www.govtjobsalert.in
Venue Name	TCS Gito Bitan
Exam Date	25/01/2023
Exam Time	9:00 AM - 10:00 AM
Subject	Constable GD Examination 2022

Section : Part-A-General Intelligence and Reasoning

**Q.1** Select the correct combination of mathematical signs to sequentially replace the \* signs and to balance the given equation.  
 $19 * 5 * 5 * 220 * 2 * 10$

- Ans
- 1. =, ÷, ×, +, -
  - 2. ×, +, =, ÷, -
  - 3. +, -, =, ×, +
  - 4. -, +, ×, ÷, =

Question ID : 26433094991

Status : Answered

Chosen Option : 2

**Q.2** In this question, three statements are given, followed by two conclusions numbered I and II. Assuming the statements to be true, even if they seem to be at variance with commonly known facts, decide which of the conclusions logically follows/follow from the statements.

Statements:

Some raisins are grapes.

All grapes are apples.

All raisins are fruits.

Conclusions:

I. Some fruits are apples.

II. Some apples are raisins.

- Ans
- 1. Only conclusion I follows.
  - 2. Neither conclusion I nor II follows.
  - 3. Both conclusions I and II follow.
  - 4. Only conclusion II follows.

Question ID : 26433070384

Status : Answered

Chosen Option : 3

Q.3 In a certain code language, BLUSH is written as 'EPXWK', and SPLASH is written as 'VTOEVL'. How will 'SPRITE' be written in the same code language?


- Ans
- 1. VTUNWI
  - 2. VTUNXI
  - 3. VTUMXI
  - 4. VTUMWI

Question ID : 26433067986

Status : Answered

Chosen Option : 4

Q.4 Select the option figure which is embedded in the given figure. (Rotation is NOT allowed).



Ans

- 1.
- 2.
- 3.
- 4.

Question ID : 26433089773

Status : Answered

Chosen Option : 3

Q.5 Which of the following numbers will replace the question mark (?) in the given series?  
123, 88, 127, 94, 131, 100, ?, 106, 139

- Ans
- 1. 138
  - 2. 136
  - 3. 105
  - 4. 135

Question ID : 26433085639  
Status : Answered  
Chosen Option : 4

Q.6 In a certain code language, 'You Are Kind' is written as 'hat me ga'. 'She Is Smart' is written as 'fe ta nou'. 'She Is Kind' is written as 'fe ta ga'. How is the word 'Kind' written in the same code language?

- Ans
- 1. ta
  - 2. ga
  - 3. fe
  - 4. hat

Question ID : 26433090105  
Status : Answered  
Chosen Option : 2

Q.7 Select the option that is related to the third word in the same way as the second word is related to the first word. (The words must be considered as meaningful English words and must NOT be related to each other based on the number of letters/number of consonants/vowels in the word)  
Baker : Bread :: cobbler : \_\_\_\_\_

- Ans
- 1. Bottle
  - 2. Book
  - 3. Nail
  - 4. shoes

Question ID : 26433079402  
Status : Answered  
Chosen Option : 4

Q.8 Select the set in which the numbers are related in the same way as are the numbers of the following set.  
(NOTE : Operations should be performed on the whole numbers, without breaking down the numbers into its constituent digits. E.g. 13 – Operations on 13 such as adding /subtracting/multiplying etc. to 13 can be performed. Breaking down 13 into 1 and 3 and then performing mathematical operations on 1 and 3 is NOT allowed)  
(261, 54, 25)  
(270, 45, 15)

- Ans
- 1. (298, 67, 45)
  - 2. (182, 87, 69)
  - 3. (288, 82, 50)
  - 4. (236, 80, 56)

Question ID : 26433076478  
Status : Answered  
Chosen Option : 3

**Q.9** Six students are sitting around a circular table facing the centre. Ali is sitting third to the right of Naeem. Syed is sitting second to the left of Ali. Sara is the immediate neighbour of Ali and Syed. Shenaz is second to the right of Ali. David is sitting third to the right of Syed. Who is sitting between Sara and David?

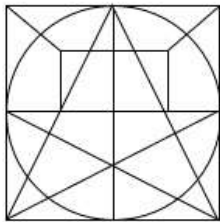
- Ans
- 1. Naeem
  - 2. Shenaz
  - 3. Ali
  - 4. Syed

Question ID : 26433081774

Status : Answered

Chosen Option : 3

**Q.10** Select the option figure that is embedded in the given figure (rotation is NOT allowed).



Ans

- 1.
- 2.
- 3.
- 4.

Question ID : 26433069480

Status : Answered

Chosen Option : 1

**Q.11** Which two signs should be interchanged to make the below equation mathematically correct?

$$108 \div 27 \times 54 - 40 + 34 = 48$$

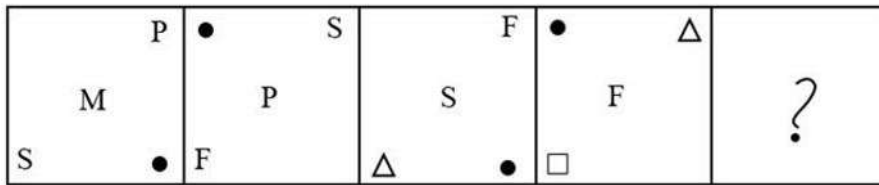
- Ans
- 1. - and +
  - 2. ÷ and ×
  - 3. × and -
  - 4. ÷ and -

Question ID : 264330117515

Status : Answered

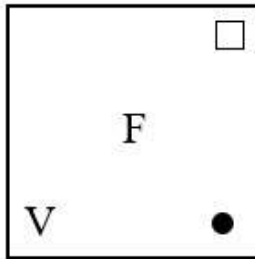
Chosen Option : 2

Q.12 Select the figure that will come in place of the question mark (?) in the following figure series.

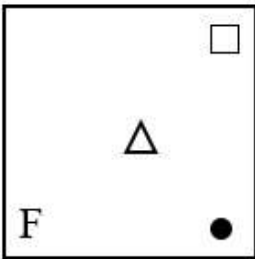


Ans

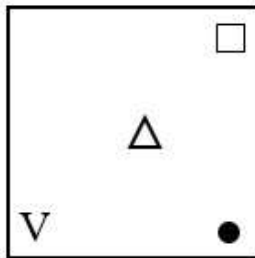
✗ 1.



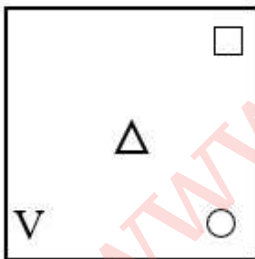
✗ 2.



✓ 3.



✗ 4.

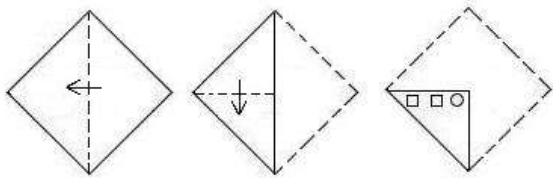


Question ID : 26433081690

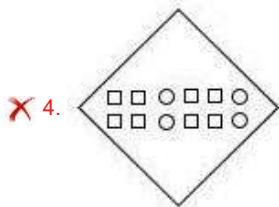
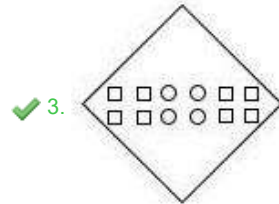
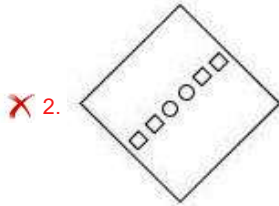
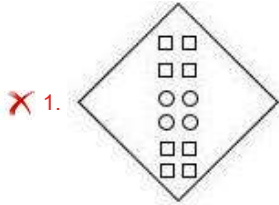
Status : Answered

Chosen Option : 3

Q.13 A paper is folded and cut as shown below. How will it appear when unfolded?



Ans



Question ID : 26433090952

Status : Answered

Chosen Option : 3

Q.14 Select the letter-cluster from among the given options that can replace the question mark (?) in the following series.  
RSXE, VNBI, ZIFM, ?, HYNU

Ans ✓ 1. DDJQ

✗ 2. FCZE

✗ 3. FBHL

✗ 4. DWUG

Question ID : 26433074743

Status : Answered

Chosen Option : 1

Q.15 Six students A, B, C, D, E and F are sitting around a circular table facing the centre. D is to the immediate right of E and E is to the immediate right of F. A is the immediate neighbour of D and C. Who among the following is sitting second to the right of B?

- Ans
- 1. C
  - 2. E
  - 3. A
  - 4. F

Question ID : 26433068487  
Status : Answered  
Chosen Option : 3

Q.16 Which of the following numbers will replace the question mark (?) in the given series?

7, 36, 66, ?, 129, 162

- Ans
- 1. 97
  - 2. 100
  - 3. 99
  - 4. 98

Question ID : 26433069387  
Status : Answered  
Chosen Option : 1

Q.17 'A @ B' means 'A is the son of B'  
'A & B' means 'A is the mother of B'  
'A # B' means 'A is the daughter of B'  
Which of the following options means 'R is the sister of P'?

- Ans
- 1. R @ S @ Q # P
  - 2. P # Q @ R # S
  - 3. R @ S & Q # P
  - 4. P @ Q & R # S

Question ID : 26433069658  
Status : Answered  
Chosen Option : 4

Q.18 Which of the following terms will replace the question mark (?) in the given series?  
CMHO, DPMV, ?, FVWJ, GYBQ

- Ans
- 1. ERPZ
  - 2. ESRB
  - 3. ERSC
  - 4. ESRC

Question ID : 26433069451  
Status : Answered  
Chosen Option : 4

Q.19 Which of the following options represents the correct order of the given words as they would appear in the English dictionary?

1. Breeze
2. Breech
3. Breather
4. Breed
5. Breathe

- Ans
- 1. 5, 2, 3, 4, 1
  - 2. 5, 3, 2, 1, 4
  - 3. 3, 5, 2, 4, 1
  - 4. 5, 3, 2, 4, 1

Question ID : 26433086966

Status : Answered

Chosen Option : 4

Q.20 Select the option that is related to the fifth letter-cluster in the same way as the second letter-cluster is related to the first letter-cluster and the fourth letter-cluster is related to the third letter-cluster.

BEAM : YVZN :: WORD : DLIW :: PLAN : ?

- Ans
- 1. QMBO
  - 2. KOZM
  - 3. TUIH
  - 4. LPYN

Question ID : 26433057480

Status : Answered

Chosen Option : 2

Section : Part-B-General Knowledge and General awareness

Q.1 Who won the Sangeet Natak Akademi Award in Kuchipudi in 2018?

- Ans
- 1. Pasumarthy Ramalinga Sastry
  - 2. Manjamma Jogati
  - 3. Radha Sridhar
  - 4. Madambi Subramanian Namboodiri

Question ID : 264330115818

Status : Not Attempted and Marked For Review

Chosen Option : --

Q.2 Which political leader won the bypoll election from Jubarajnar constituency in Tripura, in June 2022?

- Ans
- 1. Bandhu Tirkey
  - 2. Bishnu Sethi
  - 3. Rutuja Latke
  - 4. Malina Debnath

Question ID : 264330114969

Status : Not Attempted and Marked For Review

Chosen Option : --



Q.3 \_\_\_\_\_ scheme aims to provide measures for Comprehensive Rehabilitation for Welfare of Transgender Persons.

- Ans
- 1. Support for Marginalised Individuals for Livelihood and Education
  - 2. Scheme for Medium Individuals for Livelihood and Enterprise
  - 3. Support for Marginalised Individuals for Livelihood and Enterprise
  - 4. Support for Marginalised Individuals for Livelihood and Entity

Question ID : 264330116164  
Status : Marked For Review  
Chosen Option : 1

Q.4 Excessive use of synthetic fertilizers leads to:

- Ans
- 1. clean and pure environment
  - 2. noise pollution
  - 3. Increase in soil organic matter
  - 4. soil degradation

Question ID : 264330115431  
Status : Answered  
Chosen Option : 4

Q.5 In ancient times the area to the south of the \_\_\_\_\_ river was known as Magadha.

- Ans
- 1. Ganga
  - 2. Tapti
  - 3. Yamuna
  - 4. Narmada

Question ID : 26433089192  
Status : Answered  
Chosen Option : 1

Q.6 In the game of football, the distance between the goalposts is \_\_\_\_\_ whereas the distance from the lower edge of the crossbar to the ground is \_\_\_\_\_.

- Ans
- 1. 7.52 m; 4.24 m
  - 2. 7.32 m; 2.44 m
  - 3. 2.44 m; 7.32 m
  - 4. 8.12 m; 2.24 m

Question ID : 26433089939  
Status : Marked For Review  
Chosen Option : 1

Q.7 शीतकालीन वर्षा की कुल मात्रा को दिए गए स्थानीय नाम की पहचान कीजिए।

- Ans
- 1. ताहिती
  - 2. काल बैसाखी
  - 3. महावत
  - 4. लू

Question ID : 26433091486  
Status : Answered  
Chosen Option : 3

Q.8 How many Schedules are there in the Indian Constitution?

- Ans
- 1. 12
  - 2. 15
  - 3. 39
  - 4. 24

Question ID : 26433097126  
Status : Answered  
Chosen Option : 1

Q.9 राष्ट्रीय कृषि और ग्रामीण विकास बैंक (NABARD) पूर्ण रूप से \_\_\_\_\_ के स्वामित्व में है।

- Ans
- 1. भारतीय रिजर्व बैंक
  - 2. भारतीय प्रतिभूति और विनियम बोर्ड
  - 3. भारतीय स्टेट बैंक
  - 4. भारत सरकार

Question ID : 264330115302  
Status : Answered  
Chosen Option : 4

Q.10 Three of the following four are examples of mammalia, and therefore form a group. Which is the one that does not belong to that group?

- Ans
- 1. Platypus
  - 2. Penguin
  - 3. Kangaroo
  - 4. Flying fox

Question ID : 264330115189  
Status : Answered  
Chosen Option : 2

Q.11 In the post-independence period, who won the 1<sup>st</sup> individual Olympic Medal for India in 1952?

- Ans  1. Khashaba Jadhav  
 2. Milkha Singh  
 3. Kapil Dev  
 4. Karnam Malleswari

Question ID : 26433089919  
Status : Answered  
Chosen Option : 4

Q.12 The Bhil tribe living in the \_\_\_\_\_ controlled the mountain passes between the north and the Deccan.

- I. Western Ghats  
II. Eastern Ghats

- Ans  1. Both I and II  
 2. Only I  
 3. Neither I nor II  
 4. Only II

Question ID : 264330115697  
Status : Answered  
Chosen Option : 4

Q.13 Which of the following Articles of the Constitution of India states that the Attorney General for India will be appointed by the President?

- Ans  1. Article 76  
 2. Article 123  
 3. Article 12  
 4. Article 115

Question ID : 26433086821  
Status : Answered  
Chosen Option : 1

Q.14 The Eighth Five Year Plan of India got delayed due to \_\_\_\_\_.

- Ans  1. low agriculture output  
 2. rise in global poverty  
 3. political uncertainty at the Centre  
 4. lack of technology

Question ID : 264330116117  
Status : Answered  
Chosen Option : 3

Q.15 What is the number of electrons found in the outermost shell of the halogens?

- Ans  1. Five  
 2. Seven  
 3. Two  
 4. One

Question ID : 26433087850  
Status : **Marked For Review**  
Chosen Option : 1

Q.16 Which of the following is a tree found in coniferous Forests?

- Ans  1. Teak  
 2. Keekar  
 3. Sundari  
 4. Chir

Question ID : 264330115549  
Status : **Answered**  
Chosen Option : 4

Q.17 The Gochi festival is predominantly celebrated in which of the following states of India?

- Ans  1. Himachal Pradesh  
 2. Assam  
 3. Tamil Nadu  
 4. Rajasthan

Question ID : 26433094893  
Status : **Answered**  
Chosen Option : 2

Q.18 Who is the next High Commissioner of India to the United Kingdom as announced in August 2022?

- Ans  1. Ruchi Ghanashyam  
 2. Vikram Doraiswami  
 3. Gaitri Issar Kumar  
 4. Yashvardhan Kumar Sinha

Question ID : 264330115005  
Status : **Not Answered**  
Chosen Option : --

Q.19 The light of the sun takes about \_\_\_\_\_ minutes to reach the earth.

- Ans
- 1. 10
  - 2. 7
  - 3. 9
  - 4. 8

Question ID : 264330116027  
Status : Answered  
Chosen Option : 4

Q.20 Which among the following dance forms is not associated with Chhattisgarh?

- Ans
- 1. Bhagoria
  - 2. Panthi
  - 3. Pandwani
  - 4. Saila

Question ID : 264330115067  
Status : Answered  
Chosen Option : 3

Section : Part-C-Elementary Mathematics

Q.1 Rama spends  $\frac{5}{8}$  of her weekly salary on rent and  $\frac{1}{3}$  of the remaining salary on food, leaving ₹40 available for other expenses. The weekly salary of Rama is:

- Ans
- 1. ₹160
  - 2. ₹40
  - 3. ₹150
  - 4. ₹170

Question ID : 26433073125  
Status : Answered  
Chosen Option : 1

Q.2 The selling price of 28 items is equal to the cost price of 16 items. What is the profit or loss percent? (correct to 2 decimal places)

- Ans
- 1. Loss of 44.25%
  - 2. Profit of 44.25%
  - 3. Profit of 42.86%
  - 4. Loss of 42.86%

Question ID : 26433074922  
Status : Answered  
Chosen Option : 4

Q.3 दो उम्मीदवारों के बीच हुए एक चुनाव में 10% मतदाताओं ने मतदान नहीं किया और 150 मतों को अवैध घोषित कर दिया गया। विजेता को अपने प्रतिद्वंदी से 350 मत अधिक मिले, इस प्रकार उसने मतदाता सूची में पंजीकृत कुल मतदाताओं के 50% मत प्राप्त किए। पराजित उम्मीदवार के कुल पंजीकृत मतों में से प्रतिशत मत \_\_\_\_\_ है। (दशमलव के बाद एक स्थान तक गणना करें)

- Ans  1. 32.5 प्रतिशत  
 2. 25.6 प्रतिशत  
 3. 30.2 प्रतिशत  
 4. 28.5 प्रतिशत

Question ID : 26433081556

Status : Not Attempted and Marked For Review

Chosen Option : --

Q.4 Two numbers are in the ratio of 5 : 9, and their LCM is 405. Find the numbers.

- Ans  1. 45 and 81  
 2. 65 and 95  
 3. 45 and 71  
 4. 55 and 99

Question ID : 26433082590

Status : Answered

Chosen Option : 1

Q.5 A person went to a place at a speed of 20 km/h and came back at a speed of 30 km/h. During this journey, if the time taken is 2 hours, determine the distance of that place.

- Ans  1. 20 km  
 2. 25 km  
 3. 24 km  
 4. 30 km

Question ID : 26433071333

Status : Answered

Chosen Option : 3

Q.6 एक बैंक अर्ध-वार्षिक रूप से चक्रवृद्धि 5% प्रतिवर्ष की दर से चक्रवृद्धि ब्याज का भुगतान करता है। एक ग्राहक ने एक वर्ष में 1 जनवरी और 1 जुलाई प्रत्येक को Rs.1,600 जमा किए। वर्ष के अंत में जमा की गई राशि पर उसे मिलने वाला ब्याज है:

- Ans  1. Rs.91  
 2. Rs.121  
 3. Rs.132  
 4. Rs.88

Question ID : 26433065288

Status : Answered

Chosen Option : 2

Q.7 At a certain rate of interest per annum, the difference between the compound interest, compounding annually and the simple interest on ₹5,000 for 2 years is ₹72. The rate of interest per annum is:

- Ans
- 1. 12%
  - 2. 11%
  - 3. 10%
  - 4. 14%

Question ID : 26433082407  
Status : Answered  
Chosen Option : 1

Q.8 The average weight of 45 students of a school is 55 kg. If the weight of the teacher is included, the average weight rises by 300 grams. Find the weight of the teacher.

- Ans
- 1. 69.8 kg
  - 2. 67.8 kg
  - 3. 70.8 kg
  - 4. 68.8 kg

Question ID : 26433082957  
Status : Answered  
Chosen Option : 4

Q.9 Raj takes twice as much time as Sujay and thrice as much time as Ronak to finish a piece of work. If Sujay can do the work alone in 6 days, then in how many days all three together can finish the same work.

- Ans
- 1. 2 days
  - 2. 3 days
  - 3. 4 days
  - 4. 1 day

Question ID : 26433080135  
Status : Answered  
Chosen Option : 1

Q.10 Allowing 15 percent and 6 percent successive discount, the selling price of an article becomes Rs. 9588, then the marked price is:

- Ans
- 1. Rs. 10800
  - 2. Rs. 11200
  - 3. Rs. 12000
  - 4. Rs. 10000

Question ID : 264330116733  
Status : Answered  
Chosen Option : 3

Q.11 A can complete  $\frac{2}{5}$ th part of the work in 12 days and B can complete  $\frac{7}{8}$ th part of the same work in 21 days. Find the number of days in which A and B together can complete the work.

- Ans
- 1.  $\frac{11}{3}$  days
  - 2.  $\frac{14}{3}$  days
  - 3.  $\frac{40}{3}$  days
  - 4.  $\frac{43}{3}$  days

Question ID : 264330116848  
Status : Answered  
Chosen Option : 3

Q.12 If 15 percent of 40 percent of a number is 30, then what is the number?

- Ans
- 1. 600
  - 2. 800
  - 3. 400
  - 4. 500

Question ID : 26433079851  
Status : Answered  
Chosen Option : 4

Q.13 What is the greatest possible length of scale to measure exactly, the following?  
15 feet, 12 feet 9 inches, 16 feet 3 inches, and 23 feet 6 inches

- Ans
- 1. 4 inches
  - 2. 12 feet 3 inches
  - 3. 23 feet 6 inches
  - 4. 3 inches

Question ID : 26433076170  
Status : Marked For Review  
Chosen Option : 4

Q.14 Veer buys 200 guavas for Rs.1,800. Some of these guavas are rotten and are thrown away. He sells the remaining guavas at Rs.14 each and makes a profit of Rs.230. The percentage of guavas thrown away is:

- Ans
- 1. 27.5%
  - 2. 30.8%
  - 3. 14.5%
  - 4. 28.5%

Question ID : 26433074921  
Status : Answered  
Chosen Option : 1



**Q.15** The diameter of the base of a right circular cylinder is 56 cm, and its height is 18 cm.  
The area of the curved surface of the cylinder is:  
(Use  $\pi = 22/7$ )

- Ans
- 1. 3068 sq cm
  - 2. 3188 sq cm
  - 3. 3168 sq cm
  - 4. 2168 sq cm

Question ID : 26433074240  
Status : Answered  
Chosen Option : 3

**Q.16** Successive discounts of 10%,15% and 20% amount to a single discount of:

- Ans
- 1. 0.388%
  - 2. 388%
  - 3. 3.88%
  - 4. 38.80%

Question ID : 26433073011  
Status : Answered  
Chosen Option : 4

**Q.17** If  $a : b = 5 : 1$ , then what is the value of  $3a + 4b : 3a - 4b$ ?

- Ans
- 1. 19 : 11
  - 2. 13 : 21
  - 3. 14 : 11
  - 4. 11 : 12

Question ID : 26433079871  
Status : Answered  
Chosen Option : 1

**Q.18** In what ratio should lentils costing Rs.77.50/kg be mixed with lentils costing Rs.83.50/kg to get the average price of Rs.80/kg of the resulting mixture?

- Ans
- 1. 5 : 7
  - 2. 4 : 3
  - 3. 3 : 4
  - 4. 7 : 5

Question ID : 26433080288  
Status : Answered  
Chosen Option : 4

Q.19 A hemispherical dome of a tomb having diameter of 3.5 m is to be painted. If the cost of painting is 20 paise per  $\text{cm}^2$ , then what is the cost (in ₹) of painting the dome from inside? Take  $\pi = \frac{22}{7}$

- Ans
- ✓ 1. ₹38,500
  - ✗ 2. ₹35,000
  - ✗ 3. ₹28,500
  - ✗ 4. ₹25,000

Question ID : 26433076251  
Status : Answered  
Chosen Option : 1

Q.20 A 4 km/h की चाल से चलता है और उसके चलने के 5 घंटे बाद, B उसके पीछे 10 km/h की चाल से साइकिल चलाता है। B प्रारंभ स्थान से कितनी दूरी पर A से मिलता है?

- Ans
- ✗ 1. 43.33 km
  - ✗ 2. 63.33 km
  - ✓ 3. 33.33 km
  - ✗ 4. 36.33 km

Question ID : 26433073036  
Status : Answered  
Chosen Option : 3

Section : Part-D-English

Q.1 Select the option that can be used as a one-word substitute for the underlined group of words.

I studied a book on the study of stars.

- Ans
- ✓ 1. Astronomy
  - ✗ 2. Geology
  - ✗ 3. Astrophysics
  - ✗ 4. Meteorology

Question ID : 26433088612  
Status : Answered  
Chosen Option : 1

**Q.2** Select the most appropriate option to substitute the underlined segment in the given sentence to make it a meaningful sentence. If no substitution is required, select 'No substitution'.

The COVID-19 pandemic pose innumerable challenges to our education system, and engineering education was no exception.

- Ans**
- 1. posed innumerable challenges to our education system, and engineering education was no exception.
  - 2. No substitution
  - 3. have been posing innumerable challenges to our education system, and engineering education is not any exception.
  - 4. posed innumerable challenges to our education system, and engineering education is not a exception.

Question ID : 26433092048  
Status : Answered  
Chosen Option : 1

**Q.3** Select the most appropriate synonym of the underlined word in the following sentence.

He distracted him while his partner burgled his shop.

- Ans**
- 1. Burnt
  - 2. Rooted
  - 3. Arrived
  - 4. Looted

Question ID : 26433072352  
Status : Marked For Review  
Chosen Option : 4

**Q.4** Select the most appropriate option to substitute the underlined segment in the given sentence to make it a meaningful sentence. If no substitution is required, select 'No substitution'.

A new kind of pollution that is acquiring serious dimensions was noise pollution.

- Ans**
- 1. have been acquiring serious dimensions is noise pollution.
  - 2. is acquiring serious dimensions is noise pollution.
  - 3. No substitution
  - 4. have acquiring serious dimensions is noise pollution.

Question ID : 26433092041  
Status : Marked For Review  
Chosen Option : 1

**Q.5** Select the most appropriate synonym of the word given below to fill in the blank in the following sentence.

**Toying**

My cat, Mili loves \_\_\_\_\_ with the toy mouse.

- Ans
- 1. licking
  - 2. going
  - 3. dancing
  - 4. playing

Question ID : 26433084779  
Status : Answered  
Chosen Option : 4

**Q.6** Select the most appropriate meaning of the given idiom.

**Risk life and limb**

- Ans
- 1. Something that happened unexpectedly
  - 2. Seriously ill
  - 3. In danger of death or serious injury
  - 4. Making unnecessary fuss

Question ID : 26433072687  
Status : Answered  
Chosen Option : 3

**Q.7** Select the most appropriate ANTONYM of the given word.  
**Vanquish**

- Ans
- 1. Halt
  - 2. Finish
  - 3. Surrender
  - 4. Stoop

Question ID : 26433066085  
Status : Marked For Review  
Chosen Option : 4

**Q.8** Select the most appropriate synonym of the given word.

**Mean**

- Ans
- 1. Greedy
  - 2. Unconscious
  - 3. Mode
  - 4. Wise

Question ID : 26433088533  
Status : Answered  
Chosen Option : 2

**Q.9** Select the most appropriate **ANTONYM** of the word given in the bracket to fill in the blank.

I can't forget the (convivial)\_\_\_\_\_ atmosphere at the college reunion.

- Ans
- 1. affable
  - 2. antisocial
  - 3. hospitable
  - 4. lively

Question ID : 26433059595  
Status : Answered  
Chosen Option : 2

**Q.10** Identify the correctly spelt sentence.

- Ans
- 1. The collector is the district magistrate in admiinistration.
  - 2. The collector is the district magistrate in administration.
  - 3. The collector is the district magistrate in adminestration.
  - 4. The collector is the district magistrate in administration.

Question ID : 26433072834  
Status : Answered  
Chosen Option : 2

**Q.11** Select the most appropriate meaning of the idiom in bold in the given sentence.

I am going to take a leaf out of your book and start packing my own lunches.

- Ans
- 1. To study very hard
  - 2. A book containing a list of secret contacts
  - 3. Imitate or emulate someone in a particular way
  - 4. Be in somebody's favour or good opinion

Question ID : 26433072450  
Status : Answered  
Chosen Option : 3

**Q.12** Select the **INCORRECTLY** spelt word.

- Ans
- 1. Congruent
  - 2. Circamference
  - 3. Democracy
  - 4. Demolish

Question ID : 26433073722  
Status : Answered  
Chosen Option : 2

**Q.13** Select the most appropriate **ANTONYM** of the word given in the brackets to fill in the blank.

We live on the \_\_\_\_\_ (centre) of the city.

- Ans
- 1. interior
  - 2. outskirts
  - 3. middle
  - 4. downtown

Question ID : 26433088854  
Status : Answered  
Chosen Option : 2

**Q.14** The following sentence has been divided into parts. One of them may contain an error. Select the part that contains the error from the given options. If you don't find any error, mark 'No error' as your answer.  
The immense talent / we having at our disposal is / impressive to say the least.

- Ans
- 1. we having at our disposal is
  - 2. impressive to say the least
  - 3. No error
  - 4. The immense talent

Question ID : 264330114513  
Status : Answered  
Chosen Option : 1

**Q.15** Select the correct pair of words for the blanks in the given sentence.

\_\_\_\_\_ are the prime resource of a country and a tea is served in a \_\_\_\_\_.

- Ans
- 1. cattle; cattle
  - 2. kettle; kettle
  - 3. kettle; cattle
  - 4. cattle; kettle

Question ID : 26433060546  
Status : Answered  
Chosen Option : 4

**Comprehension:**

In the following passage, some words have been deleted. Read the passage carefully and select the most appropriate option to fill in each blank.

Accidents resulting from (1)\_\_\_\_\_ driving have become a daily affair. The speed maniacs responsible for most of them escape (2)\_\_\_\_\_ after knocking down a person, they speed away before anyone can take down the number of their vehicle. It is often young people from affluent families, not even eligible for a driving licence, who (3)\_\_\_\_\_ in reckless driving. The penalties imposed for reckless driving are much too (4)\_\_\_\_\_ to be effective. The penalty for reckless driving should be raised and the general public should be made (5)\_\_\_\_\_ of the consequences of reckless driving.

**SubQuestion No : 16**

**Q.16 Select the most appropriate option to fill in blank 1.**

- Ans  1. Experimental  
 2. Reckless  
 3. Careful  
 4. Rude

Question ID : 26433092898

Status : Answered

Chosen Option : 2

**Comprehension:**

In the following passage, some words have been deleted. Read the passage carefully and select the most appropriate option to fill in each blank.

Accidents resulting from (1)\_\_\_\_\_ driving have become a daily affair. The speed maniacs responsible for most of them escape (2)\_\_\_\_\_ after knocking down a person, they speed away before anyone can take down the number of their vehicle. It is often young people from affluent families, not even eligible for a driving licence, who (3)\_\_\_\_\_ in reckless driving. The penalties imposed for reckless driving are much too (4)\_\_\_\_\_ to be effective. The penalty for reckless driving should be raised and the general public should be made (5)\_\_\_\_\_ of the consequences of reckless driving.

**SubQuestion No : 17**

**Q.17 Select the most appropriate option to fill in blank 2.**

- Ans  1. luxury  
 2. notice  
 3. punishment  
 4. limit

Question ID : 26433092899

Status : Answered

Chosen Option : 3

**Comprehension:**

In the following passage, some words have been deleted. Read the passage carefully and select the most appropriate option to fill in each blank.

Accidents resulting from (1)\_\_\_\_\_ driving have become a daily affair. The speed maniacs responsible for most of them escape (2)\_\_\_\_\_ after knocking down a person, they speed away before anyone can take down the number of their vehicle. It is often young people from affluent families, not even eligible for a driving licence, who (3)\_\_\_\_\_ in reckless driving. The penalties imposed for reckless driving are much too (4)\_\_\_\_\_ to be effective. The penalty for reckless driving should be raised and the general public should be made (5)\_\_\_\_\_ of the consequences of reckless driving.

**SubQuestion No : 18**

**Q.18 Select the most appropriate option to fill in blank 3.**

- Ans  1. frustrate  
 2. indulge  
 3. attack  
 4. praise

Question ID : 26433092900

Status : Answered

Chosen Option : 2

**Comprehension:**

In the following passage, some words have been deleted. Read the passage carefully and select the most appropriate option to fill in each blank.

Accidents resulting from (1)\_\_\_\_\_ driving have become a daily affair. The speed maniacs responsible for most of them escape (2)\_\_\_\_\_ after knocking down a person, they speed away before anyone can take down the number of their vehicle. It is often young people from affluent families, not even eligible for a driving licence, who (3)\_\_\_\_\_ in reckless driving. The penalties imposed for reckless driving are much too (4)\_\_\_\_\_ to be effective. The penalty for reckless driving should be raised and the general public should be made (5)\_\_\_\_\_ of the consequences of reckless driving.

**SubQuestion No : 19**

**Q.19 Select the most appropriate option to fill in blank 4.**

- Ans  1. plain  
 2. furious  
 3. lenient  
 4. strong

Question ID : 26433092901

Status : Answered

Chosen Option : 3



**Comprehension:**

In the following passage, some words have been deleted. Read the passage carefully and select the most appropriate option to fill in each blank.

Accidents resulting from (1)\_\_\_\_\_ driving have become a daily affair. The speed maniacs responsible for most of them escape (2)\_\_\_\_\_ after knocking down a person, they speed away before anyone can take down the number of their vehicle. It is often young people from affluent families, not even eligible for a driving licence, who (3)\_\_\_\_\_ in reckless driving. The penalties imposed for reckless driving are much too (4)\_\_\_\_\_ to be effective. The penalty for reckless driving should be raised and the general public should be made (5)\_\_\_\_\_ of the consequences of reckless driving.

**SubQuestion No : 20**

**Q.20** Select the most appropriate option to fill in blank 5.

- Ans  1. accuse  
 2. adhere  
 3. aware  
 4. avenge

Question ID : 26433092902

Status : Answered

Chosen Option : 3

**Section : Part-D-Hindi**

**Q.1** नीचे दिए गए वाक्य में रेखांकित अंश के स्थान पर सबसे उपयुक्त विकल्प कौन-सा होगा?  
गीता को अचार अच्छी लगती है।

- Ans  1. अच्छे लगता  
 2. अच्छी लगते  
 3. अच्छा लगता  
 4. अच्छे लगता

Question ID : 26433066720

Status : Not Answered

Chosen Option : --

**Q.2** निम्न वाक्य के रेखांकित अंश के स्थान पर सबसे उपयुक्त विकल्प कौन-सा होगा?  
बेटों में युद्ध हो गई।

- Ans  1. लड़ाई  
 2. युद्ध  
 3. पिटाई  
 4. संग्राम

Question ID : 26433072580

Status : Not Answered

Chosen Option : --

Q.3 'मेघदूतम् महाकवि कालीदास का महत्त्वपूर्ण ग्रंथ है।' वाक्य में अशुद्ध वर्तनी वाला शब्द है -

- Ans
- 1. महाकवि
  - 2. मेघदूतम्
  - 3. महत्त्वपूर्ण ग्रंथ
  - 4. कालीदास

Question ID : 26433069695  
Status : Not Answered  
Chosen Option : --

Q.4 'जो पहले न हुआ हो' इस वाक्यांश के लिए सार्थक शब्द है -

- Ans
- 1. अपूर्व
  - 2. अन्यत्र
  - 3. पूर्व
  - 4. अनुत्तन

Question ID : 26433062340  
Status : Not Answered  
Chosen Option : --

Q.5 'वह स्थान जहाँ स्थायी महत्त्व की वस्तुओं का संग्रह हो' इस वाक्यांश के लिए एक शब्द क्या होगा?

- Ans
- 1. पुस्तकालय
  - 2. विद्यालय
  - 3. संग्रहालय
  - 4. प्रयोगशाला

Question ID : 26433065732  
Status : Not Answered  
Chosen Option : --

Q.6 'अविचल' का विलोम निम्न में से नहीं है-

- Ans
- 1. जड़
  - 2. डाँवाडोल
  - 3. दुलमुल
  - 4. विकल

Question ID : 26433062922  
Status : Not Answered  
Chosen Option : --

Q.7 यह हाथी विशालकाय है।

उपरोक्त वाक्य में रेखांकित शब्द के उचित पर्यायवाची शब्द का चयन विकल्पों में से कीजिए।

- Ans
- 1. सिंह
  - 2. घोटक
  - 3. हस्ति
  - 4. मृग

Question ID : 26433079728  
Status : Not Answered  
Chosen Option : --

Q.8 निम्नलिखित में से किस वाक्य में 'सर्वनाम' सम्बन्धी अशुद्धि है?

- Ans
- 1. मुझे पता है कि आज वह यहाँ आएगा।
  - 2. वह तो बिलकुल पत्थर बन गया।
  - 3. तुम्हारे लिए मैं कुछ भी करने को तैयार हूँ।
  - 4. तुम तेरा घर स्वयं खुद संभालो।

Question ID : 26433063004  
Status : Not Answered  
Chosen Option : --

Q.9 निम्नलिखित वाक्य के रिक्त स्थान के लिए सबसे उपयुक्त मुहावरा क्या होगा?  
'मेरे बच्चे प्रतिदिन \_\_\_\_\_ टहलने जाते हैं।'

- Ans
- 1. औंधे मुँह
  - 2. गिरे मुँह
  - 3. अंधेरे मुँह
  - 4. फटे मुँह

Question ID : 26433066733  
Status : Not Answered  
Chosen Option : --

Q.10 निम्नलिखित विकल्पों में से कौन सा एक वाक्य क्रिया-विशेषण से सम्बन्ध रखता है?

- Ans
- 1. अशोक कल खेलेगा।
  - 2. अनुराधा आयेगी।
  - 3. रेखा गाती है।
  - 4. राहुल पढ़ता है।

Question ID : 26433062947  
Status : Not Answered  
Chosen Option : --

Q.11 'जो लोक में संभव न हो' वाक्यांश के लिए सार्थक एक शब्द क्या होगा?

- Ans  1. अलौकिक  
 2. असंभव  
 3. लौकिक  
 4. लोकायुक्त

Question ID : 26433065867  
Status : Not Answered  
Chosen Option : --

Q.12 निम्न में से कौन सा 'अमृत' शब्द का पर्यायवाची शब्द नहीं है?

- Ans  1. सुधा  
 2. क्षीर  
 3. सोम  
 4. अमिय

Question ID : 26433067070  
Status : Not Answered  
Chosen Option : --

Q.13 निम्नलिखित विकल्पों में से किस एक वाक्य में 'शाप' शब्द के लिए उचित विलोम का प्रयोग हुआ है?

- Ans  1. आपके आशीर्वाद से हम कुशल हैं।  
 2. हम दुःखी हैं।  
 3. हम प्रसन्न हैं।  
 4. हम आपसे बहुत दूर हैं।

Question ID : 26433091192  
Status : Not Answered  
Chosen Option : --

Q.14 'ईद का \_\_\_\_\_ होना' इस मुहावरे को पूरा करें।

- Ans  1. चांद  
 2. सेवई  
 3. ईदी  
 4. मिठाई

Question ID : 26433066813  
Status : Not Answered  
Chosen Option : --

Q.15 वर्तनी की दृष्टि से दिए गए वाक्य के अशुद्ध भाग का चयन कीजिए-  
उसे कई ऐसी घटनाएँ याद हैं जो उसकी जवानी में घटित हुई थीं।

- Ans  1. घटनाएँ याद हैं  
 2. उसे कई ऐसी  
 3. जो उसकी जवानी  
 4. में घटित हुई थीं।

Question ID : 2643306288

Status : Not Answered

Chosen Option : --

**Comprehension:**

निम्नलिखित गद्यांश में से कुछ शब्द हटा दिए गए हैं। दिए गए विकल्पों की सहायता से रिक्त स्थानों की पूर्ति कीजिए। प्रत्येक संख्या के लिए उपयुक्त विकल्प का चयन कीजिए।

पहले पूरा संसार एक परिवार के 1. \_\_\_\_\_ था अब टुकड़ों में बँटकर एक-दूसरे 2. \_\_\_\_\_ दूर हो चुका है।  
पहले बड़े-बड़े दालानों-आँगनों में सब 3. \_\_\_\_\_ रहते थे 4. \_\_\_\_\_ छोटे-छोटे डिब्बे जैसे घरों में जीवन  
सिमटने 5. \_\_\_\_\_ है।

**SubQuestion No : 16**

Q.16 रिक्त स्थान 1 की पूर्ति के लिए सर्वाधिक उपयुक्त विकल्प का चयन कीजिए।

- Ans  1. समान  
 2. अंदर  
 3. भीतर  
 4. सामान

Question ID : 26433091283

Status : Not Answered

Chosen Option : --

**Comprehension:**

निम्नलिखित गद्यांश में से कुछ शब्द हटा दिए गए हैं। दिए गए विकल्पों की सहायता से रिक्त स्थानों की पूर्ति कीजिए। प्रत्येक संख्या के लिए उपयुक्त विकल्प का चयन कीजिए।

पहले पूरा संसार एक परिवार के 1. \_\_\_\_\_ था अब टुकड़ों में बँटकर एक-दूसरे 2. \_\_\_\_\_ दूर हो चुका है।  
पहले बड़े-बड़े दालानों-आँगनों में सब 3. \_\_\_\_\_ रहते थे 4. \_\_\_\_\_ छोटे-छोटे डिब्बे जैसे घरों में जीवन  
सिमटने 5. \_\_\_\_\_ है।

**SubQuestion No : 17**

Q.17 रिक्त स्थान 2 की पूर्ति के लिए सर्वाधिक उपयुक्त विकल्प का चयन कीजिए।

- Ans  1. के  
 2. से  
 3. में  
 4. ने

Question ID : 26433091284

Status : Not Answered

Chosen Option : --

**Comprehension:**

निम्नलिखित गद्यांश में से कुछ शब्द हटा दिए गए हैं। दिए गए विकल्पों की सहायता से रिक्त स्थानों की पूर्ति कीजिए। प्रत्येक संख्या के लिए उपयुक्त विकल्प का चयन कीजिए।

पहले पूरा संसार एक परिवार के 1. \_\_\_\_\_ था अब टुकड़ों में बँटकर एक-दूसरे 2. \_\_\_\_\_ दूर हो चुका है। पहले बड़े-बड़े दालानों-आँगनों में सब 3. \_\_\_\_\_ रहते थे 4. \_\_\_\_\_ छोटे-छोटे डिब्बे जैसे घरों में जीवन सिमटने 5. \_\_\_\_\_ है।

**SubQuestion No : 18**

Q.18 रिक्त स्थान 3 की पूर्ति के लिए सर्वाधिक उपयुक्त विकल्प का चयन कीजिए।

Ans  1. छिपकर

2. मिल-जुलकर

3. अलग

4. बँधकर

Question ID : 26433091285

Status : Not Answered

Chosen Option : --

**Comprehension:**

निम्नलिखित गद्यांश में से कुछ शब्द हटा दिए गए हैं। दिए गए विकल्पों की सहायता से रिक्त स्थानों की पूर्ति कीजिए। प्रत्येक संख्या के लिए उपयुक्त विकल्प का चयन कीजिए।

पहले पूरा संसार एक परिवार के 1. \_\_\_\_\_ था अब टुकड़ों में बँटकर एक-दूसरे 2. \_\_\_\_\_ दूर हो चुका है। पहले बड़े-बड़े दालानों-आँगनों में सब 3. \_\_\_\_\_ रहते थे 4. \_\_\_\_\_ छोटे-छोटे डिब्बे जैसे घरों में जीवन सिमटने 5. \_\_\_\_\_ है।

**SubQuestion No : 19**

Q.19 रिक्त स्थान 4 की पूर्ति के लिए सर्वाधिक उपयुक्त विकल्प का चयन कीजिए।

Ans  1. सभी

2. जब

3. अब

4. सब

Question ID : 26433091286

Status : Not Answered

Chosen Option : --

**Comprehension:**

निम्नलिखित गद्यांश में से कुछ शब्द हटा दिए गए हैं। दिए गए विकल्पों की सहायता से रिक्त स्थानों की पूर्ति कीजिए। प्रत्येक संख्या के लिए उपयुक्त विकल्प का चयन कीजिए।

पहले पूरा संसार एक परिवार के 1. \_\_\_\_\_ था अब टुकड़ों में बँटकर एक-दूसरे 2. \_\_\_\_\_ दूर हो चुका है। पहले बड़े-बड़े दालानों-आँगनों में सब 3. \_\_\_\_\_ रहते थे 4. \_\_\_\_\_ छोटे-छोटे डिब्बे जैसे घरों में जीवन सिमटने 5. \_\_\_\_\_ है।

**SubQuestion No : 20**

**Q.20** रिक्त स्थान 5 की पूर्ति के लिए सर्वाधिक उपयुक्त विकल्प का चयन कीजिए।

- Ans**
- 1. लगी
  - 2. लगता
  - 3. लगा
  - 4. जुड़ा

Question ID : 26433091287

Status : Not Answered

Chosen Option : --

WWW.GOVtJOBSALERT.COM