

Constable GD in CAPFs SSF Rifleman GD in Assam Rifles and Sepoy in NCB Examination 2022

Roll Number	www.govtjobsalert.in
Candidate Name	www.govtjobsalert.in
Venue Name	iON Digital Zone iDZ Ramireddipalle
Exam Date	17/01/2023
Exam Time	5:15 PM - 6:15 PM
Subject	Constable GD Examination 2022

Section : Part-A-General Intelligence and Reasoning

Q.1 Which of the following numbers will replace the question mark (?) in the given series?
1248, 887, 598, 429, ?, 259, 234

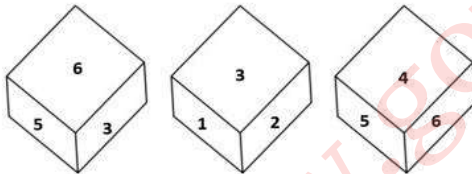
- Ans
- 1. 329
 - 2. 302
 - 3. 306
 - 4. 308

Question ID : 26433076754

Status : Not Attempted and Marked For Review

Chosen Option : --

Q.2 Three different positions of the same dice are shown. Find the number on the face opposite the face showing '4'.



- Ans
- 1. 2
 - 2. 1
 - 3. 3
 - 4. 6

Question ID : 26433082889

Status : Answered

Chosen Option : 3

Q.3 Which of the mathematical signs should be interchanged in the below equation to make it mathematically correct?

$$72 - 12 + 8 \times 6 \div 24 = 30$$

- Ans
- 1. - and ÷
 - 2. - and +
 - 3. - and ×
 - 4. × and ÷

Question ID : 264330114174

Status : Answered

Chosen Option : 1

Q.4 Which option represents the correct order of the given words as they would appear in the English dictionary?

- 1 Brown
- 2 Brand
- 3 Brunch
- 4 Branch
- 5 Brimming

- Ans
- 1. 2,4,5,1,3
 - 2. 3,4,5,2,1
 - 3. 4,2,5,1,3
 - 4. 4,3,5,1,2

Question ID : 26433069257

Status : Answered

Chosen Option : 3

Q.5 Select the option that is related to the third word in the same way as the second word is related to the first word. (The words must be considered as meaningful English words and must not be related to each other based on the number of letters / number of consonants / vowels in the word.)

Uttar Pradesh : Lucknow :: Odisha : ?

- Ans
- 1. Gandhinagar
 - 2. Bhubaneswar
 - 3. Bengaluru
 - 4. Patna

Question ID : 26433081080

Status : Answered

Chosen Option : 2

Q.6 E – F means 'E is the mother of F'

E ÷ F means 'E is the father of F'

E + F means 'E is the sister of F'

E × F means 'E is the brother of F'

If T × U ÷ D × C, then how is T related to C?

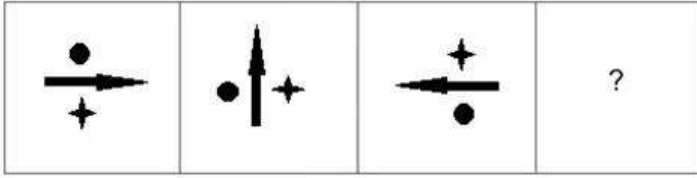
- Ans
- 1. Father's brother
 - 2. Brother
 - 3. Father
 - 4. Grandfather

Question ID : 26433080429

Status : Answered

Chosen Option : 1

Q.7 Select the figure that will replace the question mark (?) in the following figure series.




Ans


✗ 1.




✓ 2.



✗ 3.



✗ 4.



Question ID : 26433070419
Status : Answered
Chosen Option : 2

Q.8 Select the set in which the numbers are related in the same way as are the numbers of the following sets.

(NOTE : Operations should be performed on the whole numbers, without breaking down the numbers into its constituent digits. E.g. 13 – Operations on 13 such as adding/subtracting/multiplying etc. to 13 can be performed. Breaking down 13 into 1 and 3 and then performing mathematical operations on 1 and 3 is not allowed)
(8, 280, 5)
(11, 308, 4)

- Ans
- 1. (6, 370, 9)
 - 2. (5, 270, 9)
 - 3. (13, 637, 7)
 - 4. (11, 440, 5)

Question ID : 26433076535

Status : **Not Attempted and Marked For Review**

Chosen Option : --

Q.9 Six friends (Aman, Biplab, Chirantan, Divya, Elizabeth and Firoz) are sitting around a circular table facing the centre. Aman sits third to the left of Biplab. Chirantan is an immediate neighbour of Aman. Elizabeth sits second to the right of Divya. Chirantan is not an immediate neighbour of Divya. Who sits between Biplab and Firoz?

- Ans
- 1. Elizabeth
 - 2. Aman
 - 3. Chirantan
 - 4. Divya

Question ID : 26433092770

Status : **Not Attempted and Marked For Review**

Chosen Option : --

Q.10 Select the option that is related to the fifth term in the same way as the second term is related to the first term and the fourth term is related to the third term.
COURAGE : EQWTCIG :: POWER : RQYGT :: WISDOM : ?

- Ans
- 1. WISTIG
 - 2. FOQDOM
 - 3. YKUFQO
 - 4. EQWDOM

Question ID : 26433057687

Status : **Answered**

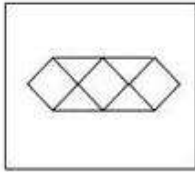
Chosen Option : 3

Q.11 Select the option figure in which the question figure is embedded (Rotation is not allowed).

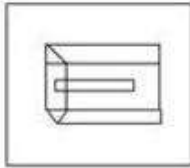


Ans


✗ 1.



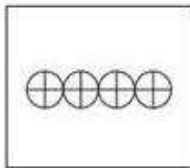
✓ 2.



✗ 3.



✗ 4.



Question ID : 26433070210
Status : Answered
Chosen Option : 2

Q.12 In a certain code language, 'TRIP' is coded as GIRK and 'FAST' is coded as UZHG. How will 'HOME' be coded in that language?

Ans ✓ 1. SLNV

✗ 2. GNLD

✗ 3. TMOW

✗ 4. FMKB

Question ID : 26433074513
Status : Answered
Chosen Option : 1

Q.13 In a certain code language, If BROTHER is coded as 14 and ACTIVE is coded as 12, how will CHOCOLATE be coded in that language?

Ans ✓ 1. 18

✗ 2. 16

✗ 3. 20

✗ 4. 15

Question ID : 26433068065
Status : Answered
Chosen Option : 1

Q.14 Which two signs should be interchanged to make the below equation mathematically correct?

$$26 - 13 + 39 \div 117 \times 24 = 31$$

- Ans
- 1. \times and \div
 - 2. $-$ and \times
 - 3. $+$ and \div
 - 4. $-$ and $+$

Question ID : 264330117539
Status : Answered
Chosen Option : 4

Q.15 Which of the following letter-clusters will replace the question mark (?) in the given series?

BTWH, DRUJ, FPSL, ?, JLOP

- Ans
- 1. HNQN
 - 2. INPN
 - 3. HMPN
 - 4. HNPN

Question ID : 26433076443
Status : Answered
Chosen Option : 1

Q.16 Three Statements are given followed by Three conclusions numbered I, II and III. Assuming the statements to be true, even if they seem to be at variance with commonly known facts, decide which of the conclusions logically follow(s) from the statements.

Statements:

All cats are rats.

Some rats are white.

All white are milk.

Conclusions:

I. Some rats are cats.

II. Some white are rats.

III. Some milk are white.

- Ans
- 1. Both conclusions I and II follow.
 - 2. Both conclusions I and III follow.
 - 3. Both conclusions II and III follow.
 - 4. All conclusions follow.

Question ID : 26433074633
Status : Answered
Chosen Option : 4

Q.17 Which number will replace the question mark (?) in the following series?
24, 26, ?, 164, 658, 3292

- Ans 1. 54
 2. 96
 3. 72
 4. 88

Question ID : 26433068969

Status : Not Attempted and
Marked For Review

Chosen Option : --

Q.18 Six students are sitting around a circular table facing the centre. A sits to the immediate left of C. E sits third to the right of D. D is an immediate neighbour of C. B is an immediate neighbour of both E and F. Who sits second to the left of A?

- Ans 1. E
 2. B
 3. F
 4. D

Question ID : 26433079503

Status : Answered

Chosen Option : 2

Q.19 Select the correct mirror image of the given figure when the mirror is placed at MN as shown below.

V e w Q A Z X 5

M
|
N

- Ans 1. Ɔ X Z A Q w e V
 2. 5 X Z A Q w e V
 3. Ɔ X Z A Q w e V
 4. V e w Q A Z X 5

Question ID : 26433080810

Status : Answered

Chosen Option : 3

Q.20 Which of the following letters will replace the question mark (?) and complete the following letter series?
F, P, X, D, H, ?

- Ans
- 1. H
 - 2. I
 - 3. J
 - 4. K

Question ID : 26433067276
Status : Answered
Chosen Option : 3

Section : Part-B-General Knowledge and General awareness

Q.1 Which Five-year Plan focused on infrastructure development, that is, power and transport?

- Ans
- 1. First
 - 2. Fourth
 - 3. Second
 - 4. Third

Question ID : 26433064861
Status : Not Answered
Chosen Option : --

Q.2 Which of the following is NOT an example of metamorphic rocks?

- Ans
- 1. Granite
 - 2. Quartzite
 - 3. Gneiss
 - 4. Schist

Question ID : 26433089662
Status : Not Answered
Chosen Option : --

Q.3 Which of the following is not one of the five basic food groups suggested by the Indian Council of Medical Research?

- Ans
- 1. Milk and meat products
 - 2. Carbohydrates and Proteins
 - 3. Pulses and legumes
 - 4. Fats and sugars

Question ID : 264330115216
Status : Not Answered
Chosen Option : --

Q.4 The Governor of State possesses the pardoning power under which Article of the Constitution of India?

- Ans
- 1. Article 163
 - 2. Article 161
 - 3. Article 55
 - 4. Article 145

Question ID : 26433074905
Status : Not Answered
Chosen Option : --

Q.5 Mysuru Dasara Festival is a _____-day festival celebrated in Karnataka.

- Ans
- 1. 5
 - 2. 12
 - 3. 7
 - 4. 10

Question ID : 264330115079
Status : Answered
Chosen Option : 4

Q.6 FIH Men's Hockey World Cup 2018 was organised by which country?

- Ans
- 1. Belgium
 - 2. Pakistan
 - 3. Spain
 - 4. India

Question ID : 26433086730
Status : Not Answered
Chosen Option : --

Q.7 Raja Harishchandra, a movie directed by Dadasaheb Phalke in 1913, is considered as first full length film of _____.

- Ans
- 1. India
 - 2. Pakistan
 - 3. Bangladesh
 - 4. Nepal

Question ID : 264330115707
Status : Answered
Chosen Option : 1

Q.8 Who among the following artists has won Padma Vibhushan Award in 2000?

- Ans 1. Pandit Birju Maharaj
 2. Kelucharan Mohapatra
 3. Amala Akkineni
 4. Jatin Goswami

Question ID : 264330115833
Status : Not Answered
Chosen Option : --

Q.9 How many nations had participated in the Asian Games 2018?

- Ans 1. 46
 2. 45
 3. 52
 4. 50

Question ID : 264330115908
Status : Not Answered
Chosen Option : --

Q.10 Which of the following is a fundamental duty?

- Ans 1. To endanger public property and to abjure violence
 2. To safeguard public property and to expose violence
 3. To safeguard public property and to abjure violence
 4. To safeguard public property and to accept violence

Question ID : 26433089952
Status : Answered
Chosen Option : 3

Q.11 _____ substituted the planning commission in India.

- Ans 1. Finance Commission
 2. Securities and Exchange Board of India (SEBI)
 3. Competition Commission of India (CCI)
 4. National Institution for Transforming India (NITI Aayog)

Question ID : 264330115359
Status : Answered
Chosen Option : 4

Q.12 Duralumin is an alloy made up of aluminium and _____.

- Ans 1. nickel
 2. tin
 3. copper
 4. zinc

Question ID : 264330115141
Status : Not Answered
Chosen Option : --

Q.13 N. Biren Singh became the chief minister of _____ state of India in March 2022.

- Ans
- 1. Nagaland
 - 2. Mizoram
 - 3. Assam
 - 4. Manipur

Question ID : 264330114893
Status : Answered
Chosen Option : 1

Q.14 Which among the following is the oldest vedas?

- Ans
- 1. Samaveda
 - 2. Yajurveda
 - 3. Atharvaveda
 - 4. Rigveda

Question ID : 264330115439
Status : Answered
Chosen Option : 4

Q.15 In which year was the first cement plant setup in India?

- Ans
- 1. 2004
 - 2. 2014
 - 3. 1974
 - 4. 1904

Question ID : 264330115573
Status : Not Answered
Chosen Option : --

Q.16 In which year was the National Population Policy (NPP), the central government's second population policy formulated in India?

- Ans
- 1. 2000
 - 2. 2005
 - 3. 2002
 - 4. 1998

Question ID : 264330116042
Status : Not Answered
Chosen Option : --

Q.17 In economics, CRR stands for _____.

- Ans
- 1. Cash Rate Ratio
 - 2. Cash Rationing Reserve
 - 3. Cash Reserve Ratio
 - 4. Capital Reserve Ratio

Question ID : 264330115326
Status : Answered
Chosen Option : 3

Q.18 Sukanya Samridhi Yojana account can be opened by the parents of a girl child or legal guardians, any time before the girl child attains _____.

- Ans
- 1. 16 years of age
 - 2. 12 years of age
 - 3. 18 years of age
 - 4. 10 years of age

Question ID : 264330116179
Status : Not Answered
Chosen Option : --

Q.19 Who has been appointed as India's Ambassador to Slovak Republic in October 2022?

- Ans
- 1. Apoorva Srivastava
 - 2. Taranjit Singh Sandhu
 - 3. Suchitra Durai
 - 4. Sibi George

Question ID : 264330115029
Status : Not Answered
Chosen Option : --

Q.20 The folk dance 'Lambadi' is associated with which Indian state?

- Ans
- 1. Bihar
 - 2. Assam
 - 3. Karnataka
 - 4. Andhra Pradesh

Question ID : 26433072924
Status : Answered
Chosen Option : 4

Section : Part-C-Elementary Mathematics

Q.1 On dividing a number by 42, we get 120 as the quotient and 0 as the remainder. On dividing the same number by 41, what will be the remainder?

- Ans
- 1. 38
 - 2. 39
 - 3. 37
 - 4. 40

Question ID : 26433075459
Status : Answered
Chosen Option : 1

Q.2 In a race around a circular track an athlete runs at 10 m/sec in the first round, at 20 m/sec in the second round and at 30 m/sec in the third round. Find his average speed (in m/sec) for the race. (correct to 2 decimal places)

- Ans
- 1. 15.15
 - 2. 16.67
 - 3. 16.36
 - 4. 15.56

Question ID : 26433079916
Status : Answered
Chosen Option : 3

Q.3 The effective annual rate of interest corresponding to a nominal rate of 2% per annum, payable half-yearly, is:

- Ans
- 1. 4.02%
 - 2. 2.01%
 - 3. 4.2%
 - 4. 2.1%

Question ID : 26433080126
Status : Not Attempted and Marked For Review
Chosen Option : --

Q.4 An equilateral triangle of side 6 cm has its corners cut-off to form a regular hexagon. What is the area of this regular hexagon?

- Ans
- 1. 6 cm^2
 - 2. $3\sqrt{3} \text{ cm}^2$
 - 3. $6\sqrt{2} \text{ cm}^2$
 - 4. $6\sqrt{3} \text{ cm}^2$

Question ID : 26433075279
Status : Not Attempted and Marked For Review
Chosen Option : --

Q.5 The value of $\{(6 + 4) + (12 \div 4 \times 2)\} + 1\frac{1}{3} \times 9 \div 3 + 1\frac{2}{3}$ is:

- Ans
- 1. $\frac{65}{3}$
 - 2. $\frac{23}{3}$
 - 3. $\frac{55}{3}$
 - 4. $\frac{17}{3}$

Question ID : 26433075178
Status : Answered
Chosen Option : 1

Q.6 Three cubes of sides 5 cm, 4 cm and 3 cm are melted to form a new cube. Find the length of the diagonal of the new cube.

- Ans
- 1. $3\sqrt{3}$ cm
 - 2. $6\sqrt{3}$ cm
 - 3. $2\sqrt{3}$ cm
 - 4. $9\sqrt{3}$ cm

Question ID : 26433074946
Status : Not Attempted and Marked For Review
Chosen Option : --

Q.7 The selling price of 40 articles is equal to the cost price of 60 articles. Find the gain percentage.

- Ans
- 1. 40 percent
 - 2. 30 percent
 - 3. 50 percent
 - 4. 60 percent

Question ID : 26433079859
Status : Answered
Chosen Option : 3

Q.8 Ramesh borrowed some money and agreed to pay-off by paying Rs.4,565 at the end of the first year and Rs.6,534 at the end of the second year. If the rate of compound interest is 10% per annum, find the amount borrowed by Ramesh.

- Ans
- 1. Rs.9,550
 - 2. Rs.9,330
 - 3. Rs.9,440
 - 4. Rs.9,660

Question ID : 26433064991
Status : Not Attempted and Marked For Review
Chosen Option : --

Q.9 Pankaj offers a cash discount of Rs.250 first and then two successive discounts of 8% and 5% on the sale of a chair. If the marked price of the chair is Rs.4,250, what is the final price of the chair for a customer after the given discount scheme?

- Ans 1. Rs.3,496
 2. Rs.3,550
 3. Rs.3,600
 4. Rs.3,450

Question ID : 26433080318
Status : Not Answered
Chosen Option : --

Q.10 The ages of A and B are in the ratio 5 : 8, respectively. After 8 years, the ratio of their ages will be 3 : 4. What is the sum of their present ages?

- Ans 1. 13 years
 2. 39 years
 3. 26 years
 4. 52 years

Question ID : 26433075193
Status : Answered
Chosen Option : 3

Q.11 In a 8000 m race around a circular stadium having a circumference of 2000 m, the fastest runner Rohan and the slowest runner Soham starting from the same point and reach the starting point together at the end of the 10th minute, for the first time after the start of the race. If Rohan runs at twice the speed of Soham, what is the time taken by Rohan to finish the race?

- Ans 1. 15 minutes
 2. 10 minutes
 3. 20 minutes
 4. 25 minutes

Question ID : 26433073153
Status : Not Answered
Chosen Option : --

Q.12 Three runners Aman, Ramesh and Naresh run a race, with Aman finishing 48 metres ahead of Ramesh and 68 metres ahead of Naresh. In another race of same length, Ramesh finishes 25 metres ahead of Naresh. Each runner travels the entire distance at a constant speed. Find the length of the race.

- Ans 1. 240 metres
 2. 242 metres
 3. 244 metres
 4. 248 metres

Question ID : 26433065002
Status : Not Answered
Chosen Option : --

Q.13 The average of the first 16 natural numbers is:

Ans 1. 8.5

2. 7.3

3. 6.5

4. 9.7

Question ID : 26433074949

Status : Answered

Chosen Option : 1

Q.14 In an election, a candidate who gets 70% of the votes is elected by a majority of 500 votes. What is the total number of votes?

Ans 1. 1500

2. 500

3. 2100

4. 1250

Question ID : 26433073001

Status : Answered

Chosen Option : 4

Q.15 If 85% of $(x - y) = 25%$ of $(x + y)$, Then y is what percentage of x ?

Ans 1. $51\frac{4}{11}\%$

2. $54\frac{6}{11}\%$

3. $55\frac{1}{11}\%$

4. $58\frac{3}{11}\%$

Question ID : 26433076075

Status : Answered

Chosen Option : 2

Q.16 A person sells a packet on the cost price by using a faulty weight 10% less than the actual measure. What is his gain percentage?

- Ans
- 1. $12\frac{7}{9}\%$
 - 2. $13\frac{4}{9}\%$
 - 3. $15\frac{1}{9}\%$
 - 4. $11\frac{1}{9}\%$

Question ID : 26433076077
Status : Answered
Chosen Option : 4

Q.17 Riya can complete a piece of work in 12 days, Reeta in 18 days and Geeta in 24 days. Reeta and Geeta worked together for 6 days and then Geeta was replaced by Riya. In how many days altogether was the work completed?

- Ans
- 1. 9 days
 - 2. 12 day
 - 3. 8 days
 - 4. 17 days

Question ID : 26433065007
Status : Answered
Chosen Option : 1

Q.18 What is the correct descending order of the fractions $\frac{7}{8}, \frac{13}{16}, \frac{31}{40}, \frac{63}{80}$?

- Ans
- 1. $\frac{7}{8} > \frac{13}{16} > \frac{31}{40} > \frac{63}{80}$
 - 2. $\frac{7}{8} > \frac{13}{16} > \frac{63}{80} > \frac{31}{40}$
 - 3. $\frac{7}{8} > \frac{63}{80} > \frac{13}{16} > \frac{31}{40}$
 - 4. $\frac{13}{16} > \frac{7}{8} > \frac{63}{80} > \frac{31}{40}$

Question ID : 26433073086
Status : Answered
Chosen Option : 2

Q.19 A, B, and C can do a piece of work in 42, 56, and 63 days respectively. They started the work together but A left the work 10 days before the completion of the work while B left the work 12 days before the completion. Find the number of days (approximate) to complete the whole work.

- Ans
- 1. 29 days
 - 2. 25 days
 - 3. 15 days
 - 4. 24 days

Question ID : 264330116863

Status : Not Attempted and Marked For Review

Chosen Option : --

Q.20 The marked price of an AC is Rs. 36800. The shopkeeper offers an off season discount of 11 percent on it. The selling price of the AC is:

- Ans
- 1. Rs. 33842
 - 2. Rs. 32752
 - 3. Rs. 31640
 - 4. Rs. 34600

Question ID : 264330116748

Status : Answered

Chosen Option : 2

Section : Part-D-English

Q.1 Select the most appropriate ANTONYM of the given word.

Camouflage

- Ans
- 1. Reveal
 - 2. Cloak
 - 3. Disguise
 - 4. Bluff

Question ID : 26433073575

Status : Answered

Chosen Option : 1

Q.2 Select the most appropriate option to fill in the blank.

Each and every individual has the _____ to follow her/his own religion.

- Ans
- 1. compulsion
 - 2. freedom
 - 3. economy
 - 4. expulsion

Question ID : 26433071881

Status : Answered

Chosen Option : 2

Q.3 Select the most appropriate option to substitute the underlined segment in the given sentence.

The subsequent QR codes will helping you access the data.

- Ans
- 1. help you access
 - 2. help you accessed
 - 3. helped you access
 - 4. helps you access

Question ID : 26433093017
Status : Answered
Chosen Option : 4

Q.4 Select the correct spelling of the underlined word in the following sentence.

The cowboys were injured badly as they were involved in a dual.

- Ans
- 1. duell
 - 2. duel
 - 3. duet
 - 4. dwell

Question ID : 26433072368
Status : Marked For Review
Chosen Option : 4

Q.5 Select the most appropriate meaning of the given idiom.

Rain on someone's parade

- Ans
- 1. To spoil and ruin a happy moment
 - 2. To restore the disturbed law and order situation
 - 3. To blame and hurt an innocent child
 - 4. To test and check a brilliant student

Question ID : 26433073493
Status : Answered
Chosen Option : 1

Q.6 Select the most appropriate option that can substitute the underlined segment in the given sentence.

What is the qualities of a good teacher?

- Ans
- 1. will be a qualities
 - 2. do the qualities
 - 3. are the qualities
 - 4. is qualities

Question ID : 26433088985
Status : Answered
Chosen Option : 3

Q.7 Select the most appropriate ANTONYM of the given word.

Sensitive

- Ans 1. Understanding
 2. Precise
 3. Diplomatic
 4. Numb

Question ID : 26433093427
Status : Answered
Chosen Option : 2

Q.8 Select the most appropriate meaning of the given idiom.

Miss the boat

- Ans 1. Opportunity never knocks twice
 2. Fail to take advantage of an opportunity
 3. It is late for the boat
 4. Boat will leave on time

Question ID : 26433072758
Status : Answered
Chosen Option : 2

Q.9 Select the most appropriate synonym of the given word.

Brazen

- Ans 1. Loyal
 2. Bold
 3. Meek
 4. Courteous

Question ID : 26433086486
Status : Not Answered
Chosen Option : --

Q.10 Select the most appropriate homonym to fill in the blank.

He was supposed to _____ this work.

- Ans 1. dew
 2. doux
 3. due
 4. do

Question ID : 26433089074
Status : Answered
Chosen Option : 4

Q.11 Select the most appropriate ANTONYM of the given word.

Nadir

- Ans 1. Talent
 2. Zenith
 3. Abyss
 4. Essence

Question ID : 26433071983
Status : Answered
Chosen Option : 3

Q.12 Select the correct word for the blanks in the given sentence.

My sister _____ lift a box of 5 kilograms and I have a _____ of carrot juice.

- Ans 1. bottle
 2. can
 3. could
 4. tank

Question ID : 26433060530
Status : Marked For Review
Chosen Option : 2

Q.13 The following sentence has been divided into parts. One of them may contain an error.
Select the part that contains the error from the given options.

I will driving/ you to/ the station/ in the morning.

- Ans 1. in the morning
 2. I will driving
 3. you to
 4. the station

Question ID : 26433089824
Status : Answered
Chosen Option : 2

Q.14 Select the most appropriate synonym of the given word.

Sombre

- Ans 1. Accidental
 2. Decent
 3. Critical
 4. Doleful

Question ID : 26433072347
Status : Not Answered
Chosen Option : --

Q.15 Select the INCORRECTLY spelt word.

Ans 1. Intermittance

2. Cholera

3. Phlegm

4. Psalm

Question ID : 26433073606

Status : Answered

Chosen Option : 1

Comprehension:

In the following passage, some words have been deleted. Read the passage carefully and select the most appropriate option to fill in each blank.

The Indian Army, also known as the Bhartiya Thal Sena, is the armed forces' (1)_____ component. It grew from the East India Company's military forces, eventually (2)_____ the British Indian Army and, after independence, the Indian Army. It is regarded as the world's second-largest active army. The Indian Army's purpose is to ensure national (3)_____ and preserve India's sovereignty, territorial integrity, and harmony against external (4)_____ and intimidation. It also entails offering humanitarian assistance and support to the (5)_____ public during natural catastrophes and unforeseen times.

SubQuestion No : 16

Q.16 Select the most appropriate option to fill in blank no. 1.

Ans 1. air-based

2. private-based

3. water-based

4. land-based

Question ID : 26433058715

Status : Answered

Chosen Option : 4

Comprehension:

In the following passage, some words have been deleted. Read the passage carefully and select the most appropriate option to fill in each blank.

The Indian Army, also known as the Bhartiya Thal Sena, is the armed forces' (1)_____ component. It grew from the East India Company's military forces, eventually (2)_____ the British Indian Army and, after independence, the Indian Army. It is regarded as the world's second-largest active army. The Indian Army's purpose is to ensure national (3)_____ and preserve India's sovereignty, territorial integrity, and harmony against external (4)_____ and intimidation. It also entails offering humanitarian assistance and support to the (5)_____ public during natural catastrophes and unforeseen times.

SubQuestion No : 17

Q.17 Select the most appropriate option to fill in blank no. 2.

Ans 1. reciting

2. becoming

3. scrolling

4. destructing

Question ID : 26433058716

Status : Answered

Chosen Option : 1

Comprehension:

In the following passage, some words have been deleted. Read the passage carefully and select the most appropriate option to fill in each blank.

The Indian Army, also known as the Bhartiya Thal Sena, is the armed forces' (1)_____ component. It grew from the East India Company's military forces, eventually (2)_____ the British Indian Army and, after independence, the Indian Army. It is regarded as the world's second-largest active army. The Indian Army's purpose is to ensure national (3)_____ and preserve India's sovereignty, territorial integrity, and harmony against external (4)_____ and intimidation. It also entails offering humanitarian assistance and support to the (5)_____ public during natural catastrophes and unforeseen times.

SubQuestion No : 18

Q.18 Select the most appropriate option to fill in blank no. 3.

- Ans
- 1. emergency
 - 2. crisis
 - 3. security
 - 4. forces

Question ID : 26433058717

Status : Answered

Chosen Option : 3

Comprehension:

In the following passage, some words have been deleted. Read the passage carefully and select the most appropriate option to fill in each blank.

The Indian Army, also known as the Bhartiya Thal Sena, is the armed forces' (1)_____ component. It grew from the East India Company's military forces, eventually (2)_____ the British Indian Army and, after independence, the Indian Army. It is regarded as the world's second-largest active army. The Indian Army's purpose is to ensure national (3)_____ and preserve India's sovereignty, territorial integrity, and harmony against external (4)_____ and intimidation. It also entails offering humanitarian assistance and support to the (5)_____ public during natural catastrophes and unforeseen times.

SubQuestion No : 19

Q.19 Select the most appropriate option to fill in blank no. 4.

- Ans
- 1. exports
 - 2. aggression
 - 3. affairs
 - 4. ministry

Question ID : 26433058718

Status : Answered

Chosen Option : 3

Comprehension:

In the following passage, some words have been deleted. Read the passage carefully and select the most appropriate option to fill in each blank.

The Indian Army, also known as the Bhartiya Thal Sena, is the armed forces' (1)_____ component. It grew from the East India Company's military forces, eventually (2)_____ the British Indian Army and, after independence, the Indian Army. It is regarded as the world's second-largest active army. The Indian Army's purpose is to ensure national (3)_____ and preserve India's sovereignty, territorial integrity, and harmony against external (4)_____ and intimidation. It also entails offering humanitarian assistance and support to the (5)_____ public during natural catastrophes and unforeseen times.

SubQuestion No : 20

Q.20 Select the most appropriate option to fill in blank no. 5.

- Ans
- 1. exclusive
 - 2. literate
 - 3. unusual
 - 4. general

Question ID : 26433058719

Status : Marked For Review

Chosen Option : 2

Section : Part-D-Hindi

Q.1 निम्नलिखित में से किस वाक्य में विशेषण सम्बन्धी अशुद्धि है?

- Ans
- 1. यह डाल बहुत मोटी है।
 - 2. इस गाँव में बाढ़ से क्षति हुई।
 - 3. वह एक भले आदमी हैं।
 - 4. सबसे मीठा बोलो।

Question ID : 26433062997

Status : Not Answered

Chosen Option : --

Q.2 दिए गए वाक्यों में से किस वाक्य में सही विभक्ति चिह्न का प्रयोग नहीं हुआ है?

- Ans
- 1. गेंद खेलने में अन्य लोगों पर चोट लग सकती है।
 - 2. कुछ बच्चों के हाथों में गेंद है।
 - 3. मैदान में कुछ बच्चे झूलों पर झूल रहे हैं।
 - 4. मैदान में इस तरह गेंद से खेलना ठीक नहीं।

Question ID : 26433062864

Status : Not Answered

Chosen Option : --

Q.3 'देश में विदेश से माल आने की क्रिया' वाक्यांश के लिए उचित शब्द बताइए -

- Ans
- 1. निगमन
 - 2. निर्यात
 - 3. आयात
 - 4. आगमन

Question ID : 26433065914
Status : Not Answered
Chosen Option : --

Q.4 निम्नलिखित वाक्य में रेखांकित खंड के स्थान पर प्रयुक्त होने वाले सबसे उपयुक्त विकल्प का चयन कीजिए।
पूज्यनीय पिता जी का आदेश है।

- Ans
- 1. पूज्य
 - 2. परम
 - 3. पाहन
 - 4. पावन

Question ID : 26433079663
Status : Not Answered
Chosen Option : --

Q.5 अध्यापक ने प्रखर को समझाया कि दूसरों पर निर्भर रहकर जीवन में सफलता नहीं मिलती, यहाँ तो
पड़ती है।
रिक्त स्थान की पूर्ति उचित मुहावरे द्वारा कीजिए।

- Ans
- 1. आगे कुआँ पीछे खाई
 - 2. अपनी करनी पार उतरनी
 - 3. अपनी ढपली अपना राग
 - 4. अपनी पगड़ी अपने हाथ

Question ID : 26433062601
Status : Not Answered
Chosen Option : --

Q.6 दूध में कौन पड़ गया?
उपरोक्त वाक्य में रेखांकित शब्द के स्थान पर कौनसा शब्द उचित होगा?

- Ans
- 1. क्या
 - 2. मैं
 - 3. कोई
 - 4. यह

Question ID : 26433062201
Status : Not Answered
Chosen Option : --

Q.7 'पृथ्वी अपने अक्ष पर घूमती है।' इस वाक्य में प्रयुक्त 'अक्ष' शब्द निम्न में से किस अर्थ को व्यक्त करता है?

- Ans
- 1. पासा
 - 2. आत्मा
 - 3. धुरी
 - 4. पहिया

Question ID : 26433069730
Status : Not Answered
Chosen Option : --

Q.8 निम्नलिखित विकल्पों में से 'तीनों कालों की बात जानने वाला' वाक्यांश के लिए एक सार्थक शब्द क्या होगा ?

- Ans
- 1. त्रिकालज्ञ
 - 2. सर्वशक्तिमान
 - 3. बुद्धिमान
 - 4. विद्वान

Question ID : 26433062537
Status : Not Answered
Chosen Option : --

Q.9 "बाज़ार में अधिक कोलाहल था।" उक्त वाक्य में प्रयुक्त 'कोलाहल' के स्थान पर उसके विलोम शब्द का प्रयोग निम्न में से किस वाक्य में किया गया है?

- Ans
- 1. बाज़ार में अधिक हलचल थी।
 - 2. बाज़ार में अधिक शांति थी।
 - 3. बाज़ार में अधिक लोग थे।
 - 4. बाज़ार में अधिक शोर था।

Question ID : 26433067019
Status : Not Answered
Chosen Option : --

Q.10 'चास' का अर्थ है, 'जुताई'। परंतु 'चाष' का अर्थ प्रकट करने वाले शब्द से निम्न वाक्य पूर्ण कीजिए। हमने _____ कभी नहीं देखा।

- Ans
- 1. नीलकंठ पक्षी
 - 2. काकतुआ
 - 3. पंडुक पक्षी
 - 4. शतुरमुर्ग

Question ID : 26433063080
Status : Not Answered
Chosen Option : --

Q.11 'जिसके आने की तिथि न हो' वाक्यांश के लिए सार्थक शब्द है-

- Ans
- 1. अग्रज
 - 2. अतिथि
 - 3. सतिथि
 - 4. विस्थापित

Question ID : 26433065858
Status : Not Answered
Chosen Option : --

Q.12 नीचे दिए मुहावरे का सही अर्थ दिए गए विकल्पों में से चुनिए-
शैतान की आँत

- Ans
- 1. बुरी बात
 - 2. धोखे की बात
 - 3. कड़वी बात
 - 4. लम्बी बात

Question ID : 26433062313
Status : Not Answered
Chosen Option : --

Q.13 'लालकिला पूरे भारत में प्रख्यात एक ऐतिहासिक इमारत है।' ऊपर दिए वाक्य में रेखांकित शब्द का पर्यायवाची क्या होगा?

- Ans
- 1. प्रसिद्ध
 - 2. कुख्यात
 - 3. परिपूर्ण
 - 4. पूर्ण

Question ID : 26433085103
Status : Not Answered
Chosen Option : --

Q.14 निम्नलिखित वाक्य के किस शब्द में अशुद्धि है?
उसकि गर्दन शर्म से नीची थी।

- Ans
- 1. गर्दन
 - 2. नीची
 - 3. उसकि
 - 4. शर्म

Question ID : 26433066763
Status : Not Answered
Chosen Option : --

Q.15 निम्नलिखित वाक्य के किस खंड में त्रुटि है?
माता-पिता का आदर रखना चाहिए।

- Ans 1. आदर
 2. रखना
 3. माता-पिता
 4. का

Question ID : 26433066762
Status : Not Answered
Chosen Option : --

Comprehension:

निम्नलिखित गद्यांश में कुछ शब्दों को हटा दिया गया है। दिए गए विकल्पों की सहायता से रिक्त स्थानों की पूर्ति कीजिए। प्रत्येक संख्या के लिए सबसे उपयुक्त विकल्प का चयन कीजिए।
होली का त्यौहार प्रति वर्ष 1. _____ मास की पूर्णिमा को मनाया जाता है। पूर्णिमा की रात्रि को 2. _____ का दहन होता है। सभी 3. _____ भुलाकर एक-दूसरे पर रंग डालते हैं। रंगों का पर्व होली 4. _____ दृष्टि से विशेष महत्व रखता है। इस दिन शत्रु भी अपनी 5. _____ भुलाकर मित्र बन जाते हैं।

SubQuestion No : 16

Q.16 रिक्त स्थान 1 की पूर्ति के लिए सबसे उपयुक्त विकल्प का चयन करें।

- Ans 1. भाद्रपद
 2. कार्तिक
 3. फाल्गुन
 4. वैशाख

Question ID : 264330110855
Status : Not Answered
Chosen Option : --

Comprehension:

निम्नलिखित गद्यांश में कुछ शब्दों को हटा दिया गया है। दिए गए विकल्पों की सहायता से रिक्त स्थानों की पूर्ति कीजिए। प्रत्येक संख्या के लिए सबसे उपयुक्त विकल्प का चयन कीजिए।
होली का त्यौहार प्रति वर्ष 1. _____ मास की पूर्णिमा को मनाया जाता है। पूर्णिमा की रात्रि को 2. _____ का दहन होता है। सभी 3. _____ भुलाकर एक-दूसरे पर रंग डालते हैं। रंगों का पर्व होली 4. _____ दृष्टि से विशेष महत्व रखता है। इस दिन शत्रु भी अपनी 5. _____ भुलाकर मित्र बन जाते हैं।

SubQuestion No : 17

Q.17 रिक्त स्थान 2 की पूर्ति के लिए सबसे उपयुक्त विकल्प का चयन करें।

- Ans 1. मेघनाद
 2. होलिका
 3. सुर्पणखा
 4. रावण

Question ID : 264330110856
Status : Not Answered
Chosen Option : --

Comprehension:

निम्नलिखित गद्यांश में कुछ शब्दों को हटा दिया गया है। दिए गए विकल्पों की सहायता से रिक्त स्थानों की पूर्ति कीजिए। प्रत्येक संख्या के लिए सबसे उपयुक्त विकल्प का चयन कीजिए।
होली का त्यौहार प्रति वर्ष 1. _____ मास की पूर्णिमा को मनाया जाता है। पूर्णिमा की रात्रि को 2. _____ का दहन होता है। सभी 3. _____ भुलाकर एक-दूसरे पर रंग डालते हैं। रंगों का पर्व होली 4. _____ दृष्टि से विशेष महत्व रखता है। इस दिन शत्रु भी अपनी 5. _____ भुलाकर मित्र बन जाते हैं।

SubQuestion No : 18

Q.18 रिक्त स्थान 3 की पूर्ति के लिए सबसे उपयुक्त विकल्प का चयन करें।

- Ans 1. भेद-भाव
 2. नाम
 3. पर्वों
 4. काम

Question ID : 264330110857
Status : Not Answered
Chosen Option : --

Comprehension:

निम्नलिखित गद्यांश में कुछ शब्दों को हटा दिया गया है। दिए गए विकल्पों की सहायता से रिक्त स्थानों की पूर्ति कीजिए। प्रत्येक संख्या के लिए सबसे उपयुक्त विकल्प का चयन कीजिए।
होली का त्यौहार प्रति वर्ष 1. _____ मास की पूर्णिमा को मनाया जाता है। पूर्णिमा की रात्रि को 2. _____ का दहन होता है। सभी 3. _____ भुलाकर एक-दूसरे पर रंग डालते हैं। रंगों का पर्व होली 4. _____ दृष्टि से विशेष महत्व रखता है। इस दिन शत्रु भी अपनी 5. _____ भुलाकर मित्र बन जाते हैं।

SubQuestion No : 19

Q.19 रिक्त स्थान 4 की पूर्ति के लिए सबसे उपयुक्त विकल्प का चयन करें।

- Ans 1. आधुनिक
 2. पौराणिक
 3. काल्पनिक
 4. साहित्यिक

Question ID : 264330110858
Status : Not Answered
Chosen Option : --

Comprehension:

निम्नलिखित गद्यांश में कुछ शब्दों को हटा दिया गया है। दिए गए विकल्पों की सहायता से रिक्त स्थानों की पूर्ति कीजिए। प्रत्येक संख्या के लिए सबसे उपयुक्त विकल्प का चयन कीजिए।
होली का त्यौहार प्रति वर्ष 1. _____ मास की पूर्णिमा को मनाया जाता है। पूर्णिमा की रात्रि को 2. _____ का दहन होता है। सभी 3. _____ भुलाकर एक-दूसरे पर रंग डालते हैं। रंगों का पर्व होली 4. _____ दृष्टि से विशेष महत्व रखता है। इस दिन शत्रु भी अपनी 5. _____ भुलाकर मित्र बन जाते हैं।

SubQuestion No : 20

Q.20 रिक्त स्थान 5 की पूर्ति के लिए सबसे उपयुक्त विकल्प का चयन करें।

- Ans 1. मतभेद
 2. दोस्ती
 3. शत्रुता
 4. भाईचारा

Question ID : 264330110859
Status : Not Answered
Chosen Option : --