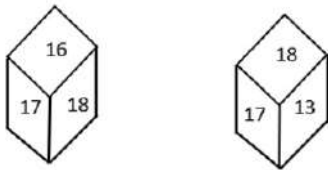


# Constable GD in CAPFs SSF Rifleman GD in Assam Rifles and Sepoy in NCB Examination 2022

Roll Number	<a href="http://www.govtjobsalert.in">www.govtjobsalert.in</a>
Candidate Name	<a href="http://www.govtjobsalert.in">www.govtjobsalert.in</a>
Venue Name	iON Digital Zone iDZ Austinpatti
Exam Date	30/01/2023
Exam Time	2:30 PM - 3:30 PM
Subject	Constable GD Examination 2022

## Section : Part-A-General Intelligence and Reasoning

**Q.1** Two different positions of the same dice are shown having numbers 13 to 18. Find the number on the face opposite the face showing '16'.



- Ans
- 1. 17
  - 2. 15
  - 3. 13
  - 4. 14

Question ID : 26433085521  
Status : Answered  
Chosen Option : 3

**Q.2** In a code language, 'You can go' is written as 'na re te', 'You come inside' is written as 'se te pe', 'He can go inside' is written as 're pe na ke'. What is the code for the word 'He' in that language?

- Ans
- 1. pe
  - 2. ke
  - 3. re
  - 4. na

Question ID : 26433068933  
Status : Answered  
Chosen Option : 2

Q.3 A # B means 'A is the brother of B'  
A @ B means 'A is the daughter of B'  
A & B means 'A is the husband of B'  
A % B means 'A is the wife of B'  
A \* B means 'A is the son of B'  
If P @ M % H # A @ G & B, then how is B related to P?

- Ans  1. Mother  
 2. Father's mother  
 3. Wife's mother  
 4. Sister

Question ID : 26433082535  
Status : Answered  
Chosen Option : 2

Q.4 Select the option that is related to the third number in the same way as the second number is related to the first number and sixth number is related to fifth number.  
9 : 56 :: 12 : ? :: 5 : 12

- Ans  1. 105  
 2. 110  
 3. 115  
 4. 120

Question ID : 26433067938  
Status : Answered  
Chosen Option : 2

Q.5 Which of the following letters will replace the question mark (?) and complete the following letter series?  
J, S, B, K, ?

- Ans  1. R  
 2. T  
 3. S  
 4. U

Question ID : 26433067295  
Status : Answered  
Chosen Option : 2

Q.6 Five people X, Y, Z, T and U are sitting in a straight row, facing north. There are only two people to the right of Z and only three people to the right of Y. There are only three people to the left of T. Who is sitting in the exact middle of the row?

- Ans  1. U  
 2. Y  
 3. Z  
 4. X

Question ID : 26433056044  
Status : Answered  
Chosen Option : 3

Q.7 Which of the following numbers will replace the question mark (?) in the given series?  
32, 35, ?, 47, 56, 67

- Ans
- 1. 41
  - 2. 42
  - 3. 39
  - 4. 40

Question ID : 26433069384  
Status : Answered  
Chosen Option : 4

Q.8 Which figure should replace the question mark (?) if the series were to be continued?

P	U	T	T	U	P	D	T	U	U	T	D	
A	L	C	C	A	L	P	C	A	A	P	C	?
D	E	N	E	N	D	L	E	N	E	N	L	

Ans

1.

L	U	T
D	A	P
C	E	N

2.

T	D	U
P	C	A
N	L	E

3.

D	T	U
C	A	P
N	L	E

4.

L	U	T
C	D	A
P	E	N

Question ID : 26433076632  
Status : Answered  
Chosen Option : 1

Q.9 Which option represents the correct order of the given words as they would appear in the English dictionary?

- 1 Garage
- 2 Garnish
- 3 Gourmet
- 4 Garland
- 5 Gastronomy

Ans  1. 1,4,2,5,3

2. 1,4,2,3,5

3. 1,2,4,3,5

4. 1,2,3,4,5

Question ID : 26433069280

Status : Answered

Chosen Option : 4

Q.10 Which two signs should be interchanged to make the below equation mathematically correct?

$$27 + 36 \times 32 - 8 \div 20 = 151$$

Ans  1. - and +

2. + and ×

3. ÷ and -

4. + and ÷

Question ID : 264330117545

Status : Answered

Chosen Option : 3

Q.11 Select the correct mirror image of the given combination when the mirror is placed at 'PQ' as shown below.

TE\$@D#VHM



Ans  1. WHV#D@D\$T

2. MHV\$D@D#ET

3. MHV#D@D\$ET

4. WHV#D@D\$ET

Question ID : 26433082746

Status : Answered

Chosen Option : 3

Q.12 Select the option that is related to the fifth letter-cluster in the same way as the second letter-cluster is related to the first letter-cluster and the fourth letter-cluster is related to the third letter-cluster.

SCIENCE : RAHCMAD :: CAPTAIN : BYORZGM :: COUNTRY : ?

- Ans
- 1. BMLRPX
  - 2. ANSMRQX
  - 3. BMTLSPX
  - 4. BMTLSQX

Question ID : 26433082631  
Status : Answered  
Chosen Option : 3

Q.13 If '+' means '-', '-' means '+', 'x' means '÷', and '÷' means 'x'. Which of the following will be the value of the expression?

$$45 \times 5 + 27 \div 81 - 3$$

- Ans
- 1. 227
  - 2. 225
  - 3. 235
  - 4. 255

Question ID : 264330114192  
Status : Answered  
Chosen Option : 2

Q.14 'Intelligent' is related to 'Foolish' in the same way as 'Expert' is related to '\_\_\_\_\_'.  
(The words must be considered as meaningful English words and must not be related to each other based on the number of letters/number of consonants/vowels in the word)

- Ans
- 1. Amateur
  - 2. Scholar
  - 3. Professional
  - 4. Experienced

Question ID : 26433057752  
Status : Answered  
Chosen Option : 1

**Q.15** Three statements are given followed by three conclusions numbered I, II and III. Assuming the statements to be true, even if they seem to be at variance with commonly known facts, decide which of the conclusions logically follow(s) from the statements.

**Statements:**

All mirrors are combs.

All clips are combs.

All combs are brushes.

**Conclusions:**

I. All clips are brushes.

II. All mirrors are brushes.

III. Some brushes are clips.

- Ans**
- 1. Only conclusions I and II follow
  - 2. All conclusions follow
  - 3. Only conclusions I and III follow
  - 4. Only conclusions II and III follow

Question ID : 26433082301

Status : Answered

Chosen Option : 2

**Q.16** Which of the following numbers will replace the question mark (?) in the given series?  
19216, 9604, 4800, 2396, 1196, ?, 295

- Ans**
- 1. 596
  - 2. 564
  - 3. 594
  - 4. 584

Question ID : 26433085347

Status : Answered

Chosen Option : 3

**Q.17** Kirti, Suman, Shubh, Kanak, Pari, Charu, Shlok and Shivi are sitting around a square table facing the centre of the table. Some of them are sitting at the corners, while some are sitting at the exact centre of the sides. Kirti sits third to the left of Shubh. Kirti sits at one of the corners. Kanak sits second to the right of Pari. Pari does not sit at any of the corners. Pari is not an immediate neighbour of Kirti. Suman is an immediate neighbour of Charu. Suman does not sit at any of the middle of the sides. Only three people sit between Suman and Shlok from either sides.

Who sits third to the left of Shlok?

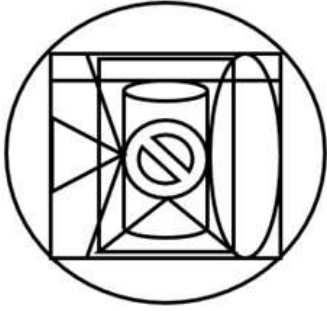
- Ans**
- 1. Shubh
  - 2. Suman
  - 3. Charu
  - 4. Shivi

Question ID : 26433082286

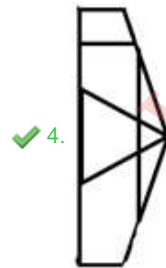
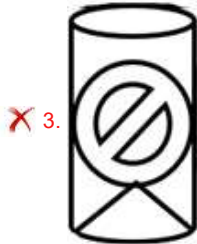
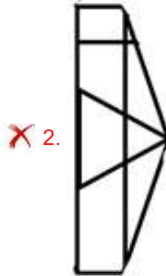

Status : Answered

Chosen Option : 1

Q.18 Select the option figure which is embedded in the given figure. (Rotation is NOT allowed).



Ans



Question ID : 26433076582  
Status : Answered  
Chosen Option : 4

Q.19 Which of the following letter-clusters will replace the question mark (?) in the given series?

VCFS, RGJO, NKNK, ?, FSVC

- Ans
- 1. JOQH
  - 2. JORG
  - 3. KORH
  - 4. KOQG

Question ID : 26433076449  
Status : Answered  
Chosen Option : 2

Q.20 In a code language, 'he called them' is written as 'ka ba ma', 'i was called' is written as 'ga va ba' and 'he was hungry' is written as 'ka va da'. What is the code for the word 'hungry' in that language?

- Ans
- 1. ba
  - 2. da
  - 3. ga
  - 4. ma

Question ID : 26433076687  
Status : Answered  
Chosen Option : 2

Section : Part-B-General Knowledge and General awareness

Q.1 Who among the following became the Chief Minister of Tripura in May 2022?

- Ans
- 1. Arvind Giri
  - 2. Asish Das
  - 3. Malina Debnath
  - 4. Manik Saha

Question ID : 264330114911  
Status : Not Answered  
Chosen Option : --

Q.2 Meenakshisundaram Pillai was widely recognised for which form of dance?

- Ans
- 1. Kathakali
  - 2. Bharatnatyam
  - 3. Lavani
  - 4. Kuchipudi

Question ID : 264330115851  
Status : Answered  
Chosen Option : 2



Q.3 Which of the following programmes launched by the Ministry of Youth Affairs and Sports to promote sports culture in India has 12 verticals?

- Ans  1. Khelo India  
 2. TOPS  
 3. E-Pathshala  
 4. Fit India

Question ID : 26433086726  
Status : Not Answered  
Chosen Option : --

Q.4 \_\_\_\_\_ is the central bank of India.

- Ans  1. Reserve Bank of India  
 2. Bank of India  
 3. State Bank of India  
 4. Securities and Exchange Board of India

Question ID : 264330115332  
Status : Answered  
Chosen Option : 1

Q.5 The co-contribution of the Government of India under Atal Pension Yojana (APY) is available for \_\_\_\_\_.

- Ans  1. 60 years  
 2. 25 years  
 3. 10 years  
 4. 5 years

Question ID : 264330116197  
Status : Answered  
Chosen Option : 1

Q.6 Dhangari Gaja is a folk dance of \_\_\_\_\_.

- Ans  1. Assam  
 2. Maharashtra  
 3. Telangana  
 4. Uttarakhand

Question ID : 26433086635  
Status : Not Answered  
Chosen Option : --

Q.7 \_\_\_\_\_ five year plan of Government of India (2012–17) was India's last Five Year Plan.

- Ans
- 1. Eighth
  - 2. Fifth
  - 3. Twelfth
  - 4. Tenth

Question ID : 264330115377  
Status : Answered  
Chosen Option : 3

Q.8 The \_\_\_\_\_ is the site of the complete digestion of carbohydrates, proteins and fats.

- Ans
- 1. small intestine
  - 2. large intestine
  - 3. liver
  - 4. food pipe

Question ID : 264330115193  
Status : Answered  
Chosen Option : 1

Q.9 Two main objectives: 'removal of poverty' (Garibi Hatao) and 'attainment of self-reliance' was proposed in the \_\_\_\_\_ Five year plan.

- Ans
- 1. Seventh
  - 2. First
  - 3. Third
  - 4. Fifth

Question ID : 264330116146  
Status : Answered  
Chosen Option : 1

Q.10 Identify the writ by the virtue of which the Court directs a detained person to be brought before it to examine the legality of his detention.

- Ans
- 1. Mandamus
  - 2. Certiorari
  - 3. Habeas Corpus
  - 4. Quo-Warranto

Question ID : 26433054547  
Status : Answered  
Chosen Option : 3

Q.11 The Prarthana Samaj was established in \_\_\_\_\_ in Bombay.

Ans  1. 1867

2. 1865

3. 1869

4. 1871

Question ID : 264330115722  
Status : Answered  
Chosen Option : 2

Q.12 Who was the first captain of India Hockey Team in Olympics?

Ans  1. Lal Bokhari

2. Jaipal Singh Munda

3. Krishan Lal

4. Dhyan Chand

Question ID : 264330116265  
Status : Answered  
Chosen Option : 4

Q.13 Identify the element used in making solar cells.

Ans  1. Tungsten

2. Bronze

3. Silicon

4. Manganese

Question ID : 26433087841  
Status : Not Answered  
Chosen Option : --

Q.14 The line that separates crust from the mantle is known as \_\_\_\_\_

Ans  1. Andrij's discontinuity

2. Moho's discontinuity

3. Comp's discontinuity

4. Magma's discontinuity

Question ID : 26433092216  
Status : Not Answered  
Chosen Option : --

Q.15 \_\_\_\_\_ is used to manufacture fertilizers, synthetic fibers, plastics, adhesives, paints, and dyes.

Ans  1. nitric acid

2. soda ash

3. alkalis

4. sulphuric acid

Question ID : 264330115579  
Status : Answered  
Chosen Option : 1

Q.16 In which of the following states of India does the 'Sonepur Cattle Fair' take place?

- Ans  1. Bihar  
 2. Madhya Pradesh  
 3. Jharkhand  
 4. Uttar Pradesh

Question ID : 26433094882  
Status : Not Answered  
Chosen Option : --

Q.17 According to the report published by the National Survey of India, what is the literacy rate of India in 2022?

- Ans  1. 67.8%  
 2. 77.7%  
 3. 66.66%  
 4. 72.35%

Question ID : 264330116060  
Status : Not Answered  
Chosen Option : --

Q.18 Who became the Chief Minister of Goa after March 2022 elections?

- Ans  1. Laxmikant Parsekar  
 2. Digambar Kamat  
 3. Pramod Sawant  
 4. Manohar Parrikar

Question ID : 264330115035  
Status : Answered  
Chosen Option : 3

Q.19 The Great Stupa of Sanchi was built during the reign of which of the following kings?

- Ans  1. Chandragupta  
 2. Ashoka  
 3. Bindusara  
 4. Brihadratha

Question ID : 264330115449  
Status : Answered  
Chosen Option : 2

**Q.20 Respecting the national anthem and national flag is:**

- Ans  1. a fundamental right of every citizen  
 2. an ordinary duty of every citizen  
 3. a fundamental duty of every citizen  
 4. a legal right of every citizen

Question ID : 26433090668  
Status : Answered  
Chosen Option : 3

Section : Part-C-Elementary Mathematics

**Q.1 On purchasing a cell phone in cash, a shopkeeper gives a discount of 7.5%. The marked price of the cell phone is Rs. 18000. What is the value of discount?**

- Ans  1. ₹1,200  
 2. ₹1,350  
 3. ₹1,250  
 4. ₹1,300

Question ID : 26433091544  
Status : Answered  
Chosen Option : 2

**Q.2 Two trains of lengths 250 metres and 400 metres are running at speeds of 40 km/h and 30 km/h, respectively. If they are moving in the same direction, they will cross each other in \_\_\_\_\_ minutes.**

- Ans  1. 4.2  
 2. 5.4  
 3. 3.9  
 4. 4.8

Question ID : 26433071262  
Status : Answered  
Chosen Option : 3

**Q.3 Vinay professes to sell rice at its cost price but uses the weight of 1600 gm in place of 2 kg. What is his percentage gain?**

- Ans  1. 28%  
 2. 27%  
 3. 25%  
 4. 26%

Question ID : 26433080311  
Status : Answered  
Chosen Option : 3

**Q.4** Susan can do the binding work of 100 books in 20 hours. Susan and Pragati together can do binding work of 600 books in 80 hours. In how much time Pragati alone can do the binding of 60 books?

- Ans  1. 24 hours  
 2. 15 hours  
 3. 12 hours  
 4. 6 hours

Question ID : 26433075925  
Status : Answered  
Chosen Option : 1

**Q.5** A shopkeeper purchased wheat at Rs.20 per kg and rice at Rs.80 per kg. He sold 80 kg of wheat at Rs.22 per kg and 20 kg of wheat at Rs.21 per kg. Furthermore, he sold 40 kg of rice at Rs.95 per kg and 60 kg of rice at Rs.93 per kg. Find his total profit in this deal.

- Ans  1. Rs.940  
 2. Rs.1,560  
 3. Rs.720  
 4. Rs.890

Question ID : 26433075972  
Status : Answered  
Chosen Option : 2

**Q.6** What is the value of  $100 \div 10 - [-2 + \{-9 + (3 - 6 \text{ of } 2)\}]$ ?

- Ans  1. 0  
 2. 20  
 3. 30  
 4. -6

Question ID : 26433075804  
Status : Answered  
Chosen Option : 3

**Q.7** The in-radius of a triangle is 8 cm and the sum of the lengths of its sides is 60 cm. The area of the triangle (in  $\text{cm}^2$ ) is:

- Ans  1. 160  
 2. 140  
 3. 240  
 4. 260

Question ID : 26433081049  
Status : Not Answered  
Chosen Option : --

Q.8 3 solid cubes whose sides are 3 m, 4 m and 5 m, respectively, are melted to form a new cube. The total surface area of the new cube will be \_\_\_\_\_.

- Ans
- 1.  $116 m^2$
  - 2.  $115 m^2$
  - 3.  $216 m^2$
  - 4.  $215 m^2$

Question ID : 26433081296  
Status : Answered  
Chosen Option : 3

Q.9 The distance between the two Cities A and B is 800 km. A train covers the journey from A to B at 60 km per hour and returns to A at a uniform speed of 40 km per hour. Find the average speed of the train during the whole journey.

- Ans
- 1. 45 km/h
  - 2. 42 km/h
  - 3. 38 km/h
  - 4. 48 km/h

Question ID : 26433081011  
Status : Answered  
Chosen Option : 4

Q.10 The fourth proportion of  $\frac{1}{2}$ ,  $\frac{1}{3}$  and  $\frac{1}{4}$  is:

- Ans
- 1.  $\frac{1}{5}$
  - 2.  $\frac{1}{6}$
  - 3.  $\frac{1}{12}$
  - 4.  $\frac{2}{3}$

Question ID : 26433075492  
Status : Answered  
Chosen Option : 4

Q.11 After reducing 2 percent, a dining set costs Rs. 17640. Its original price is:

- Ans
- 1. Rs. 17900
  - 2. Rs. 18000
  - 3. Rs. 17800
  - 4. Rs. 17700

Question ID : 264330116766  
Status : Answered  
Chosen Option : 2

Q.12 The difference between the compound interest, compounding annually and the simple interest accrued on an amount of Rs.18,000 in 2 years was Rs.720. What was the rate of interest per annum?

- Ans
- 1. 25%
  - 2. 15%
  - 3. 20%
  - 4. 10%

Question ID : 26433073033  
Status : Answered  
Chosen Option : 3

Q.13 A, B, and C can complete a work in 15, 30, and 20 days respectively. A left the work 1 day before the work was completed and B left 2 days before the completion of the work. Find the number of days required to complete the whole work.

- Ans
- 1.  $88/7$  days
  - 2.  $75/9$  days
  - 3.  $68/9$  days
  - 4.  $84/9$  days

Question ID : 264330116881  
Status : Answered  
Chosen Option : 3

Q.14 A candidate who gets 50 percent marks fails by 100 marks but another candidate who got 78 percent marks gets 30 percent more than the passing marks. The maximum marks is:

- Ans
- 1. 1200
  - 2. 800
  - 3. 1500
  - 4. 1000

Question ID : 264330116801  
Status : Answered  
Chosen Option : 4

Q.15 A man can row 9 km/h in still water. In a stream which is flowing at 4 km/h, it takes total 9 hours to row to a place and back to the starting point. How far is the place from starting point?

- Ans
- 1. 32.5 km
  - 2. 30 km
  - 3. 25.2 km
  - 4. 48.5 km

Question ID : 26433065096  
Status : Not Answered  
Chosen Option : --



Q.16 Arun bought 3 shirts at the rate of Rs.175 per shirt and 6 trousers at the rate of Rs.250 per trouser. What is the average price of all the clothes?

- Ans
- 1. Rs.235
  - 2. Rs.240
  - 3. Rs.225
  - 4. Rs.220

Question ID : 26433075055  
Status : Answered  
Chosen Option : 3

Q.17 The population of a city increases at a rate of 2% for the first 2 years and then, decreases at a rate of 4% for the third year. What will be the population after 3 years if the present population of the city is 62,500?

- Ans
- 1. 62424
  - 2. 62400
  - 3. 63500
  - 4. 65424

Question ID : 26433066245  
Status : Not Answered  
Chosen Option : --

Q.18 What is the value of the expression  $x^2 - 9y^2$ , when  $x = 2.5$  and  $y = 0.5$ ?

- Ans
- 1. 4.25
  - 2. 2.25
  - 3. 4.5
  - 4. 4

Question ID : 26433085418  
Status : Answered  
Chosen Option : 4

Q.19 If  $(a - b) : (a + b) = 6 : 14$ , then find the ratio  $(4a + 3b) : (4a - 3b)$ .

- Ans
- 1. 11 : 7
  - 2. 15 : 7
  - 3. 13 : 7
  - 4. 10 : 7

Question ID : 26433080026  
Status : Not Answered  
Chosen Option : --

**Q.20** If incomes of Reeta and Geeta are Rs.1,600 and Rs.2,400 respectively, then by what percentage is the income of Geeta more than the income of Reeta?

- Ans
- 1. 40%
  - 2. 60%
  - 3. 30%
  - 4. 50%

Question ID : 26433075647  
Status : Not Answered  
Chosen Option : --

Section : Part-D-English

**Q.1** Identify and correct the INCORRECTLY spelt word in the given sentence

The flora and fauna of the Anaimalai hills are uneeque to its region.

- Ans
- 1. unique
  - 2. fona
  - 3. flora
  - 4. regian

Question ID : 26433072764  
Status : Answered  
Chosen Option : 1

**Q.2** Select the most appropriate meaning of the given idiom.

Called for

- Ans
- 1. To cast a spell
  - 2. To require something
  - 3. Brief visit Refresh
  - 4. Recollect

Question ID : 264330101380  
Status : Answered  
Chosen Option : 2

**Q.3** The following sentence has been split into four segments. Identify the segment that contains a grammatical error.

The coach said / that Shreyas / had practicing on / the lawn tennis court.

- Ans
- 1. the lawn tennis court
  - 2. that Shreyas
  - 3. The coach said
  - 4. had practicing on

Question ID : 26433086450  
Status : Answered  
Chosen Option : 4

Q.4 Select the most appropriate option that can substitute the underlined segment in the given sentence.

When someone waves a white flag, it signifies that they want to tolerate to the other party.

- Ans
- 1. wants to tolerate
  - 2. wants to interrupt
  - 3. wanted to interrogate
  - 4. want to surrender

Question ID : 26433096156  
Status : Answered  
Chosen Option : 4

Q.5 Select the most appropriate synonym of the underlined word in the given sentence.

Nothing equalled the grief I felt at the death of my pet cat.

- Ans
- 1. Freedom
  - 2. Bondage
  - 3. Fear
  - 4. Anguish

Question ID : 26433087918  
Status : Answered  
Chosen Option : 4

Q.6 Select the most appropriate option to fill in the blank.

After he finished eating his lunch, the boy sitting next to me \_\_\_\_\_ intently at me.

- Ans
- 1. turned
  - 2. stared
  - 3. shared
  - 4. came

Question ID : 26433073616  
Status : Answered  
Chosen Option : 2

Q.7 Select the most appropriate option that can substitute the underlined segment in the given sentence.

The melodious song reminded Revathi on the nostalgic moments of her past.

- Ans
- 1. by the nostalgic moments in
  - 2. at the nostalgic moments of
  - 3. of the nostalgic moments at
  - 4. of the nostalgic moments of

Question ID : 26433089309  
Status : Answered  
Chosen Option : 4

Q.8 Select the most appropriate meaning of the given idiom.

It takes two to tango

- Ans  1. Two people crossing the street together  
 2. A conflict where both people are at fault  
 3. Diagonally across  
 4. Two people are needed for any game

Question ID : 26433073717  
Status : Answered  
Chosen Option : 2

Q.9 Select the most appropriate synonym of the given word.

Alight

- Ans  1. Commence  
 2. Earn  
 3. Enlighten  
 4. Descend

Question ID : 26433073462  
Status : Answered  
Chosen Option : 4

Q.10 Select the most appropriate ANTONYM of the word given in brackets to fill in the blank.

The boys are very (hyper) \_\_\_\_\_ today.

- Ans  1. naughty  
 2. hungry  
 3. tranquil  
 4. good

Question ID : 26433090383  
Status : Answered  
Chosen Option : 3

Q.11 Select the most appropriate ANTONYM of the given word.

Savage

- Ans  1. Tame  
 2. Robust  
 3. Wild  
 4. Bold

Question ID : 26433072205  
Status : Answered  
Chosen Option : 1

Q.12 Select the most appropriate ANTONYM of the given word.

Endurance

- Ans  1. Patience  
 2. Indolence  
 3. Persistence  
 4. Tolerance

Question ID : 26433072669  
Status : Answered  
Chosen Option : 2

Q.13 Select the correct pair of homonyms to fill in the blanks.

The river \_\_\_\_\_ provide a reserve \_\_\_\_\_ for minerals that enrich the soil's fertility.

- Ans  1. right, right  
 2. banks, bank  
 3. band, band  
 4. quail, quail

Question ID : 26433061049  
Status : Answered  
Chosen Option : 2

Q.14 Select the most appropriate synonym of the given word to fill in the blank in the sentence.

Rigid

The new education scenario is not \_\_\_\_\_ but practical.

- Ans  1. popular  
 2. dominating  
 3. flexible  
 4. stiff

Question ID : 26433060550  
Status : Answered  
Chosen Option : 4

Q.15 Select the INCORRECTLY spelt word.

- Ans  1. Domicile  
 2. Trendy  
 3. Vacillate  
 4. Vaccuum

Question ID : 26433074000  
Status : Answered  
Chosen Option : 4

**Comprehension:**

In the following passage, some words have been deleted. Read the passage carefully and select the most appropriate option to fill in each blank.

The room looked as though a (1) \_\_\_\_\_ had swept through it. The storm had blown (2) \_\_\_\_\_ the French doors during the night, and the wind and the rain had wreaked havoc, (3) \_\_\_\_\_ everything before it. A few (4) \_\_\_\_\_ pages of the report lay on the wet rug, but the rest of the pages had obviously been carried (5) \_\_\_\_\_ by the wind.

**SubQuestion No : 16**

**Q.16 Select the most appropriate option to fill in blank number 1.**

- Ans  1. spring  
 2. hurricane  
 3. dream  
 4. broom

Question ID : 26433070784  
Status : Answered  
Chosen Option : 2

**Comprehension:**

In the following passage, some words have been deleted. Read the passage carefully and select the most appropriate option to fill in each blank.

The room looked as though a (1) \_\_\_\_\_ had swept through it. The storm had blown (2) \_\_\_\_\_ the French doors during the night, and the wind and the rain had wreaked havoc, (3) \_\_\_\_\_ everything before it. A few (4) \_\_\_\_\_ pages of the report lay on the wet rug, but the rest of the pages had obviously been carried (5) \_\_\_\_\_ by the wind.

**SubQuestion No : 17**

**Q.17 Select the most appropriate option to fill in blank number 2.**

- Ans  1. clean  
 2. open  
 3. broke  
 4. closed

Question ID : 26433070785  
Status : Answered  
Chosen Option : 2

**Comprehension:**

In the following passage, some words have been deleted. Read the passage carefully and select the most appropriate option to fill in each blank.

The room looked as though a (1) \_\_\_\_\_ had swept through it. The storm had blown (2) \_\_\_\_\_ the French doors during the night, and the wind and the rain had wreaked havoc, (3) \_\_\_\_\_ everything before it. A few (4) \_\_\_\_\_ pages of the report lay on the wet rug, but the rest of the pages had obviously been carried (5) \_\_\_\_\_ by the wind.

**SubQuestion No : 18**

**Q.18 Select the most appropriate option to fill in blank number 3.**

- Ans  1. binding  
 2. sharing  
 3. saving  
 4. scattering

Question ID : 26433070786  
Status : Answered  
Chosen Option : 4

**Comprehension:**

In the following passage, some words have been deleted. Read the passage carefully and select the most appropriate option to fill in each blank.

The room looked as though a (1) \_\_\_\_\_ had swept through it. The storm had blown (2) \_\_\_\_\_ the French doors during the night, and the wind and the rain had wreaked havoc, (3) \_\_\_\_\_ everything before it. A few (4) \_\_\_\_\_ pages of the report lay on the wet rug, but the rest of the pages had obviously been carried (5) \_\_\_\_\_ by the wind.

**SubQuestion No : 19**

**Q.19** Select the most appropriate option to fill in blank number 4.

Ans  1. lose

2. loose

3. read

4. tight

Question ID : 26433070787

Status : Answered

Chosen Option : 2

**Comprehension:**

In the following passage, some words have been deleted. Read the passage carefully and select the most appropriate option to fill in each blank.

The room looked as though a (1) \_\_\_\_\_ had swept through it. The storm had blown (2) \_\_\_\_\_ the French doors during the night, and the wind and the rain had wreaked havoc, (3) \_\_\_\_\_ everything before it. A few (4) \_\_\_\_\_ pages of the report lay on the wet rug, but the rest of the pages had obviously been carried (5) \_\_\_\_\_ by the wind.

**SubQuestion No : 20**

**Q.20** Select the most appropriate option to fill in blank number 5.

Ans  1. over

2. nearer

3. away

4. of

Question ID : 26433070788

Status : Answered

Chosen Option : 3

Section : Part-D-Hindi

**Q.1** निम्नलिखित मुहावरे के उचित अर्थ का चयन कीजिए-  
अढ़ाई दिन की हुकूमत

Ans  1. सामान्य शासन

2. कुछ दिनों की शानोशौकत

3. लंबी हुकूमत

4. राज्य के बाहर शासन करना

Question ID : 26433065885

Status : Not Answered

Chosen Option : --

Q.2 आज अमावस्या की रात है।  
उपरोक्त वाक्य में रेखांकित शब्द के विलोम शब्द का चयन विकल्पों में से कीजिए।

- Ans  1. काली  
 2. पूर्णिमा  
 3. एकादशी  
 4. पूर्ण

Question ID : 26433079639  
Status : Not Answered  
Chosen Option : --

Q.3 'टाईप करने की कला' वाक्यांश के लिए इनमें से उपयुक्त शब्द कौन-सा है?

- Ans  1. टकसाल  
 2. टंकित  
 3. टिकाऊ  
 4. टंकण

Question ID : 26433066892  
Status : Not Answered  
Chosen Option : --

Q.4 निम्न में से किस वाक्य में 'खून' के सही अनेकार्थी शब्द का प्रयोग हुआ है?

- Ans  1. कल विजय की हत्या हो गई।  
 2. विकास वाचनालय में पढ़ रहा था।  
 3. महेश ने शहर से पलायन किया।  
 4. यह लाल फूल अत्यंत सुन्दर है।

Question ID : 26433085144  
Status : Not Answered  
Chosen Option : --

Q.5 दिए गये वाक्यांश के लिए सार्थक शब्द बताइए - 'इतिहास को जानने वाला'

- Ans  1. ऐतिहासिक  
 2. इतिहासिक  
 3. इतिहासज्ञ  
 4. इतिहासकार

Question ID : 26433062588  
Status : Not Answered  
Chosen Option : --



Q.6 'ढिढोरल डीटनल' डुहलवरे कल वक्यल अरुथ है?

- Ans
- 1. ऑर-ऑर से बलत करनल
  - 2. ढोल बऑनल
  - 3. बलत करनल
  - 4. डुरलऑर करनल

Question ID : 26433066804  
Status : Not Answered  
Chosen Option : --

Q.7 संयुक्त वलक्य - 'ये डुी अऑे हैँ और वे डुी अऑे हैँ।' नलडुनलखलत वलकलुडुं डुं से इस वलक्य के ललए कुन सल एक उऑलत सरल वलक्य हुगल?

- Ans
- 1. सब बुरे हैँ
  - 2. यह अऑे हैँ वे अऑे हैँ।
  - 3. सब अऑे हैँ।
  - 4. सब अऑे हैँ और बुरे हैँ।

Question ID : 26433062442  
Status : Not Answered  
Chosen Option : --

Q.8 नलडुनलखलत वलक्य डुं रेखलंकलत एकलरुथल शऑुडुं के उपयुक्त अरुथ बतलइए। बहलत से लुगुं कल सुकलल ऑीवन डुरडलरुथ कुं सडुडुडुं हुतल है, ऑलससे सडलऑ शकल नहल हु डलतल।

- Ans
- 1. एक- टुकऑल
  - 2. डूरल- सलथ
  - 3. कुऑ डलग- आथल
  - 4. संडूरुण- टुकऑल

Question ID : 26433091328  
Status : Not Answered  
Chosen Option : --

Q.9 नलडुनलखलत वलकलुडुं डुं से कलस एक वलक्य डुं कुरलडल सडुडुनुथल अशुऑुडुल है?

- Ans
- 1. उसने नुकरुी लुऑु डलडल।
  - 2. गलऑुी ऑलतुी है।
  - 3. तुडु देर तक सुते हु।
  - 4. बरुडु डलघल रहल है।

Question ID : 26433062945  
Status : Not Answered  
Chosen Option : --

Q.10 प्रभावी शिक्षकों का गुच्छा आ रहा है।  
उपरोक्त वाक्य के किस संज्ञा पद में त्रुटि है?

- Ans
- 1. शिक्षकों का
  - 2. प्रभावी
  - 3. आ रहा है
  - 4. गुच्छा

Question ID : 26433063026  
Status : Not Answered  
Chosen Option : --

Q.11 निम्नलिखित में से शुद्ध वाक्य कौन सा है?

- Ans
- 1. उसने पच आम खरीदे।
  - 2. उसने पांच आम खरीदे।
  - 3. उसने पांच अम खरीदे।
  - 4. उसने पांच आम खरीद।

Question ID : 26433066832  
Status : Not Answered  
Chosen Option : --

Q.12 'हित न चाहने वाला' वाक्यांश के लिए एक शब्द क्या होगा?

- Ans
- 1. हितैषी
  - 2. परमार्थी
  - 3. हितविहीन
  - 4. अनहित

Question ID : 26433070064  
Status : Not Answered  
Chosen Option : --

Q.13 निम्नलिखित वाक्य में रेखांकित खंड के स्थान पर प्रयुक्त होने वाले सबसे उपयुक्त विकल्प का चयन कीजिए।  
मैं बुढ़ापे की और बढ़ रहा हूँ।

- Ans
- 1. जगह
  - 2. और
  - 3. साथ
  - 4. तथा

Question ID : 26433079669  
Status : Not Answered  
Chosen Option : --

Q.14 विकल्पों में दिए गए किस वाक्य में निम्न शब्द के पर्यायवाची शब्द प्रयोग हुआ है?  
कमल

- Ans  1. तालाब में कटु खिला है।  
 2. तालाब में सरोज खिला है।  
 3. तालाब में पयोद खिला है।  
 4. तालाब में मरु खिला है।

Question ID : 26433091215  
Status : Not Answered  
Chosen Option : --

Q.15 उसको मुंहमांगी दाम मिलेगा।  
उपरोक्त वाक्य के किस शब्द में वर्तनीगत अशुद्धि है?

- Ans  1. उसको  
 2. दाम  
 3. मुंहमांगी  
 4. मिलेगा

Question ID : 26433085061  
Status : Not Answered  
Chosen Option : --

**Comprehension:**

निम्नलिखित गद्यांश में कुछ शब्दों को हटा दिया गया है। दिए गए विकल्पों की सहायता से रिक्त स्थानों की पूर्ति कीजिए। प्रत्येक संख्या के लिए सबसे उपयुक्त विकल्प का चयन करें।  
'पुस्तक' तथा 'आलय' इन दो शब्दों से मिलकर 'पुस्तकालय' 1. \_\_\_\_\_ बना है। आलय शब्द 2. \_\_\_\_\_ का सूचक है। पुस्तकालय वह स्थान है जहाँ पुस्तकों को 3. \_\_\_\_\_ जाता है। पुस्तक ज्ञान का 4. \_\_\_\_\_ होती है। अतः पुस्तकालय वह स्थान है जहाँ से पुस्तकें लेकर तथा उन्हें पढ़कर हम 5. \_\_\_\_\_ बनते हैं।

SubQuestion No : 16

Q.16 रिक्त स्थान 1 की पूर्ति के लिए सबसे उपयुक्त विकल्प का चयन कीजिए।

- Ans  1. शब्द  
 2. कक्ष  
 3. वर्ग  
 4. दुर्लभ

Question ID : 264330110963  
Status : Not Answered  
Chosen Option : --

**Comprehension:**

निम्नलिखित गद्यांश में कुछ शब्दों को हटा दिया गया है। दिए गए विकल्पों की सहायता से रिक्त स्थानों की पूर्ति कीजिए। प्रत्येक संख्या के लिए सबसे उपयुक्त विकल्प का चयन करें।

'पुस्तक' तथा 'आलय' इन दो शब्दों से मिलकर 'पुस्तकालय' 1. \_\_\_\_\_ बना है। आलय शब्द 2. \_\_\_\_\_ का सूचक है। पुस्तकालय वह स्थान है जहाँ पुस्तकों को 3. \_\_\_\_\_ जाता है। पुस्तक ज्ञान का 4. \_\_\_\_\_ होती है। अतः पुस्तकालय वह स्थान है जहाँ से पुस्तकें लेकर तथा उन्हें पढ़कर हम 5. \_\_\_\_\_ बनते हैं।

**SubQuestion No : 17**

Q.17 रिक्त स्थान 2 की पूर्ति के लिए सबसे उपयुक्त विकल्प का चयन कीजिए।

- Ans  1. घर  
 2. ज्ञान  
 3. जानकारी  
 4. पुस्तकों

Question ID : 264330110964  
Status : Not Answered  
Chosen Option : --

**Comprehension:**

निम्नलिखित गद्यांश में कुछ शब्दों को हटा दिया गया है। दिए गए विकल्पों की सहायता से रिक्त स्थानों की पूर्ति कीजिए। प्रत्येक संख्या के लिए सबसे उपयुक्त विकल्प का चयन करें।

'पुस्तक' तथा 'आलय' इन दो शब्दों से मिलकर 'पुस्तकालय' 1. \_\_\_\_\_ बना है। आलय शब्द 2. \_\_\_\_\_ का सूचक है। पुस्तकालय वह स्थान है जहाँ पुस्तकों को 3. \_\_\_\_\_ जाता है। पुस्तक ज्ञान का 4. \_\_\_\_\_ होती है। अतः पुस्तकालय वह स्थान है जहाँ से पुस्तकें लेकर तथा उन्हें पढ़कर हम 5. \_\_\_\_\_ बनते हैं।

**SubQuestion No : 18**

Q.18 रिक्त स्थान 3 की पूर्ति के लिए सबसे उपयुक्त विकल्प का चयन कीजिए।

- Ans  1. रखा  
 2. पढ़ना  
 3. लाभ  
 4. देखा

Question ID : 264330110965  
Status : Not Answered  
Chosen Option : --

**Comprehension:**

निम्नलिखित गद्यांश में कुछ शब्दों को हटा दिया गया है। दिए गए विकल्पों की सहायता से रिक्त स्थानों की पूर्ति कीजिए। प्रत्येक संख्या के लिए सबसे उपयुक्त विकल्प का चयन करें।

'पुस्तक' तथा 'आलय' इन दो शब्दों से मिलकर 'पुस्तकालय' 1. \_\_\_\_\_ बना है। आलय शब्द 2. \_\_\_\_\_ का सूचक है। पुस्तकालय वह स्थान है जहाँ पुस्तकों को 3. \_\_\_\_\_ जाता है। पुस्तक ज्ञान का 4. \_\_\_\_\_ होती है। अतः पुस्तकालय वह स्थान है जहाँ से पुस्तकें लेकर तथा उन्हें पढ़कर हम 5. \_\_\_\_\_ बनते हैं।

**SubQuestion No : 19**

Q.19 रिक्त स्थान 4 की पूर्ति के लिए सबसे उपयुक्त विकल्प का चयन कीजिए।

- Ans  1. कार्य  
 2. भंडार  
 3. अनिवार्य  
 4. शुल्क

Question ID : 264330110966  
Status : Not Answered  
Chosen Option : --

**Comprehension:**

निम्नलिखित गद्यांश में कुछ शब्दों को हटा दिया गया है। दिए गए विकल्पों की सहायता से रिक्त स्थानों की पूर्ति कीजिए। प्रत्येक संख्या के लिए सबसे उपयुक्त विकल्प का चयन करें।

'पुस्तक' तथा 'आलय' इन दो शब्दों से मिलकर 'पुस्तकालय' 1. \_\_\_\_\_ बना है। आलय शब्द 2. \_\_\_\_\_ का सूचक है। पुस्तकालय वह स्थान है जहाँ पुस्तकों को 3. \_\_\_\_\_ जाता है। पुस्तक ज्ञान का 4. \_\_\_\_\_ होती है। अतः पुस्तकालय वह स्थान है जहाँ से पुस्तकें लेकर तथा उन्हें पढ़कर हम 5. \_\_\_\_\_ बनते हैं।

**SubQuestion No : 20**

**Q.20** रिक्त स्थान 5 की पूर्ति के लिए सबसे उपयुक्त विकल्प का चयन कीजिए।

- Ans**
- 1. पढ़ाकू
  - 2. सामान्य
  - 3. प्रत्यक्ष
  - 4. ज्ञानी

Question ID : 264330110967

Status : Not Answered

Chosen Option : --

WWW.GOVtjobsalert.in