

# Constable GD in CAPFs SSF Rifleman GD in Assam Rifles and Sepoy in NCB Examination 2022

Roll Number	<a href="http://www.govtjobsalert.in">www.govtjobsalert.in</a>
Candidate Name	<a href="http://www.govtjobsalert.in">www.govtjobsalert.in</a>
Venue Name	TCS Gito Bitan
Exam Date	09/02/2023
Exam Time	11:45 AM - 12:45 PM
Subject	Constable GD Examination 2022

Section : Part-A-General Intelligence and Reasoning

Q.1 Which option represents the correct order of the given words as they would appear in the English dictionary?

- 1 drain
- 2 dried
- 3 dreamt
- 4 drown
- 5 drunk

- Ans
- 1. 2,3,1,4,5
  - 2. 1,4,3,5,2
  - 3. 1,2,3,4,5
  - 4. 1,3,2,4,5

Question ID : 26433069296

Status : Answered

Chosen Option : 4

Q.2 Seven people, A, B, C, D, E, F and G are sitting in a straight row, facing north. A sits third to the left of D. D sits to the extreme right. Only two people sit between A and F. B is an immediate neighbour of F. Only one person sits between C and D. G is not an immediate neighbour of A. Who sits between B and A?

- Ans
- 1. E
  - 2. G
  - 3. C
  - 4. F

Question ID : 26433056929

Status : Not Answered

Chosen Option : --

**Q.3** Select the option that is related to the third word in the same way as the second word is related to the first word.  
(The words must be considered as meaningful English words and must not be related to each other based on the number of letters/number of consonants/vowels in the word)  
Soft : Hard :: Create : ?

- Ans  1. Destroy  
 2. Building  
 3. Save  
 4. Maintain

Question ID : 26433079478  
Status : Answered  
Chosen Option : 1

**Q.4** Which of the following letter-clusters will replace the question mark (?) in the given series?  
KPQZ, MNSX, OLUV, ?, SHYR

- Ans  1. QLWT  
 2. QJVU  
 3. RJVX  
 4. QJWT

Question ID : 26433076432  
Status : Answered  
Chosen Option : 1

**Q.5** Which letter-cluster will replace the question mark (?) to complete the given series?  
KMLN, PRQS, ? , ZBAC, EGFH

- Ans  1. WUVX  
 2. UVWX  
 3. UWVX  
 4. UWXV

Question ID : 26433067724  
Status : Answered  
Chosen Option : 3

**Q.6** Which of the mathematical signs should be interchanged in the below equation to make it mathematically correct?  
 $135 \div 15 \times 54 + 6 - 18 = 252$

- Ans  1.  $\div$  and  $+$   
 2.  $\div$  and  $\times$   
 3.  $+$  and  $\times$   
 4.  $+$  and  $-$

Question ID : 264330117528  
Status : Answered  
Chosen Option : 1

Q.7 In a certain code language, 'berry mango' is coded as 'xi xa', 'alpha berry tango' is coded as 'cun xi our', 'mango alpha' is coded as 'xa cun', and 'berry tango' is coded as 'xi our'. What is the code word for 'alpha'?

- Ans
- 1. xa
  - 2. xi
  - 3. our
  - 4. cun

Question ID : 26433069039  
Status : Answered  
Chosen Option : 4

Q.8 Six students Purple, Black, Gray, Indigo, Cyan and Yellow are sitting around a circular table facing the centre. Purple is sitting on the immediate left of Black. Cyan is sitting third to the left of Black. Gray is the immediate neighbour of Purple and Cyan. Indigo is sitting second to the right of Black. Yellow is sitting third to the right of Gray. Who is sitting between Gray and Indigo?

- Ans
- 1. Black
  - 2. Purple
  - 3. Yellow
  - 4. Cyan

Question ID : 26433081787  
Status : Not Answered  
Chosen Option : --

Q.9 In a certain code language,  
'A + B' means 'A is the brother of B',  
'A - B' means 'A is the mother of B',  
'A × B' means 'A is the husband of B' and  
'A ÷ B' means 'A is the sister of B'.  
If  $A \times G - T - N \div D + B$ , then which of the following statements is NOT correct?

- Ans
- 1. D is T's son.
  - 2. G is B's father's mother.
  - 3. A is N's mother's father.
  - 4. A is T's father.

Question ID : 26433070375  
Status : Answered  
Chosen Option : 1

Q.10 In a code language, 'ALMOND' is coded as LAOMDN and 'RAISIN' is coded as ARSINI.  
How will 'CASHEW' be coded in the same language?

- Ans
- 1. ACHSWE
  - 2. ACSHWE
  - 3. CASHWE
  - 4. CAHSWE

Question ID : 26433081084  
Status : Answered  
Chosen Option : 1

Q.11 Select the option that is related to the fifth term in the same way as the second term is related to the first term and the fourth term is related to the third term.

MEND : KHLG :: STIR : QWGU :: DESK : ?

- Ans  1. BHQN  
 2. BHPM  
 3. AGPM  
 4. AGQN

Question ID : 26433058008

Status : Not Attempted and  
Marked For Review

Chosen Option : --

Q.12 Three statements are given followed by three conclusions numbered I, II and III.

Assuming the statements to be true, even if they seem to be at variance with commonly known facts, decide which of the conclusions logically follow(s) from the statements.

Statements:

All gloves are bats.

All stumps are bats.

All bats are balls.

Conclusions:

I. All stumps are gloves.

II. Some balls are gloves.

III. Some balls are stumps.

- Ans  1. All conclusions follow  
 2. Only conclusions I and III follow  
 3. Only conclusions II and III follow  
 4. Only conclusions I and II follow

Question ID : 26433082309

Status : Answered

Chosen Option : 1

Q.13 Select the option that is related to the third term in the same way as the second term is related to the first term and the sixth term is related to the fifth term.

14 : 103 :: 16 : ? :: 18 : 167

- Ans  1. 133  
 2. 139  
 3. 135  
 4. 140

Question ID : 26433069092

Status : Answered

Chosen Option : 3

Q.14 Select the correct mirror image of the given figure when the mirror is placed at MN as shown below.



Ans

1.  $\text{1qMn\textbackslash}Z\textbackslash}E\textbackslash}T\textbackslash}i\textbackslash}2\textbackslash}9\textbackslash}C$

2.  $\text{1qMn\textbackslash}Z\textbackslash}E\textbackslash}T\textbackslash}i\textbackslash}2\textbackslash}9\textbackslash}C$

3.  $\text{1qMn\textbackslash}Z\textbackslash}E\textbackslash}T\textbackslash}i\textbackslash}2\textbackslash}9\textbackslash}C$

4.  $\text{1qMn\textbackslash}Z\textbackslash}E\textbackslash}T\textbackslash}i\textbackslash}2\textbackslash}9\textbackslash}C$

Question ID : 26433085543

Status : Answered

Chosen Option : 2

Q.15 Which two numbers, from the given options, should be interchanged to make the given equation correct?

$$180 \div 20 - 27 \div (6 \times 4 - 19) + 175 = 1$$

Ans  1. 6 and 19

2. 175 and 27

3. 4 and 20

4. 6 and 20

Question ID : 26433082486

Status : Answered

Chosen Option : 2

Q.16 Which of the following numbers will replace the question marks (?) in the given series?

229, 230, 232, ?, 244, ?, 292

Ans  1. 236, 260

2. 238, 268

3. 239, 270

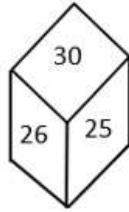
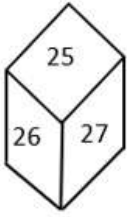
4. 240, 280

Question ID : 26433070224

Status : Not Answered

Chosen Option : --

Q.17 Two different positions of the same dice are shown. Find the number on the face opposite the face showing '27'.



- Ans
- 1. 25
  - 2. 30
  - 3. 29
  - 4. 28

Question ID : 26433089510  
Status : Answered  
Chosen Option : 2

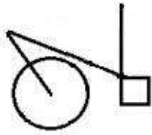
Q.18 Which of the following numbers will replace the question mark (?) in the given series?  
56, 59, 68, ?, 176

- Ans
- 1. 138
  - 2. 89
  - 3. 95
  - 4. 102

Question ID : 26433076746  
Status : Answered  
Chosen Option : 3

Q.19

Select the option figure in which the given figure is embedded as its part (rotation is not allowed).



Ans


✗ 1.



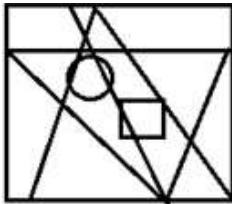
✓ 2.



✗ 3.



✗ 4.

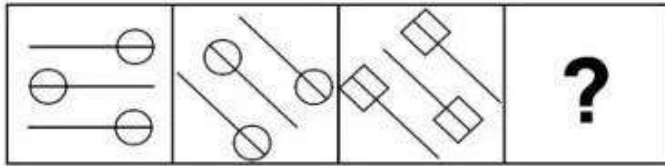


Question ID : 26433069540

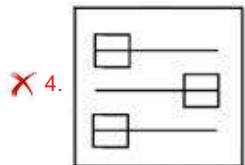
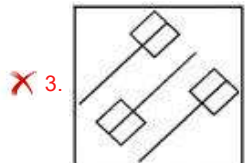
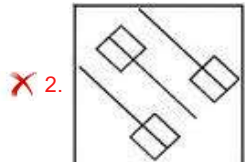
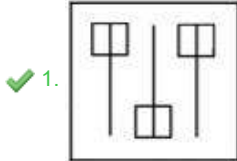
Status : Not Answered

Chosen Option : --

Q.20 Find the options which is related to the third figure in the same manner as second figure is related with the first figure. (First figure is the leftmost figure.)



Ans



Question ID : 26433078863  
Status : Answered  
Chosen Option : 1

Section : Part-B-General Knowledge and General awareness

Q.1 The Ministry of Culture organized "Tiranga Utsav" on \_\_\_\_\_, 2022 to celebrate the contributions of Pingali Venkayya to the country.

- Ans
- ✗ 1. 1st July
  - ✗ 2. 9th May
  - ✓ 3. 2nd August
  - ✗ 4. 5th September

Question ID : 264330115103  
Status : Not Answered  
Chosen Option : --



Q.2 Who among the Mauryan ruler pioneered the propagation of Bauddh Dhamma?

- Ans
- 1. Sampartii
  - 2. Devavarman
  - 3. Ashoka
  - 4. Bindusara

Question ID : 26433089857  
Status : Answered  
Chosen Option : 3

Q.3 Licensing policy of the government was primarily aimed to promote \_\_\_\_\_.

- Ans
- 1. employment in North-Eastern states
  - 2. regional equality
  - 3. development of schools and hospitals in smaller states
  - 4. growth of textiles in southern part of India

Question ID : 26433054779  
Status : Not Answered  
Chosen Option : --

Q.4 Gavari, a dance-drama is majorly performed in which of the following states of India?

- Ans
- 1. Rajasthan
  - 2. Odisha
  - 3. Manipur
  - 4. Kerala

Question ID : 26433071486  
Status : Answered  
Chosen Option : 1

Q.5 \_\_\_\_\_ is an example of plastic money.

- Ans
- 1. Legal tender
  - 2. Hard cash
  - 3. Credit card
  - 4. Coins

Question ID : 264330115315  
Status : Answered  
Chosen Option : 3

**Q.6 What best defines prokaryotic cells?**  
I. Single chromosome  
II. Membrane-bound cell organelles absent

- Ans
- 1. Neither I nor II
  - 2. Only II
  - 3. Only I
  - 4. Both I and II

Question ID : 264330115238  
Status : Answered  
Chosen Option : 4

**Q.7 As of November 2022, who among the following is the Governor of Kerala, India?**

- Ans
- 1. Mangubhai Chaganbhai Patel
  - 2. Ganesh Lal Mathur
  - 3. Bhagat Singh Koshyari
  - 4. Arif Mohammed Khan

Question ID : 264330114927  
Status : Not Attempted and Marked For Review  
Chosen Option : --

**Q.8 Which of the following trophy is associated with women's Badminton?**

- Ans
- 1. Davis Cup
  - 2. Uber Cup
  - 3. Agha Khan Cup
  - 4. FIFA World Cup

Question ID : 264330116273  
Status : Answered  
Chosen Option : 1

**Q.9 The chemical name of Blue Vitriol is \_\_\_\_\_.**

- Ans
- 1. Zinc Sulphate
  - 2. Sulphuric Acid
  - 3. Sodium Hydroxide
  - 4. Copper Sulphate

Question ID : 264330115162  
Status : Answered  
Chosen Option : 4

Q.10 Which year among the following did India host the Commonwealth Games?

Ans  1. 2008

2. 2010

3. 2014

4. 2012

Question ID : 264330115922  
Status : Answered  
Chosen Option : 4

Q.11 Which railway station was awarded 'Eat Right Station' certification with a 4-star rating, in November 2022?

Ans  1. New Delhi Railway Station

2. Howrah Junction Railway Station

3. Chhatrapati Shivaji Terminus

4. Bhopal Junction Railway Station

Question ID : 264330115562  
Status : Answered  
Chosen Option : 2

Q.12 A Khilafat Committee was formed in \_\_\_\_\_ in March 1919.

Ans  1. Bombay

2. Delhi

3. Amritsar

4. Calcutta

Question ID : 26433090587  
Status : Answered  
Chosen Option : 3

Q.13 There is no requirement to maintain any minimum balance in \_\_\_\_\_ accounts.

Ans  1. Pradhan sevak Jan Dhan Yojana

2. Pradhan Mantri Jan Dhan Yojana

3. Pradhan Mantri Jan Jan Yojana

4. Jan Kalyan Yojana

Question ID : 264330116205  
Status : Answered  
Chosen Option : 2

Q.14 Which article of the Indian Constitution Deals with Matters relating to, or connected with, the election of a President or Vice-President?

- Ans  1. 69  
 2. 70  
 3. 71  
 4. 68

Question ID : 264330115661  
Status : Answered  
Chosen Option : 3

Q.15 Who was awarded the Sangeet Natak Akademi award and the Tulsi Samman by the government of Madhya Pradesh for contributions in Folk and tribal Dance?

- Ans  1. Vempati Chinna Satyam  
 2. Arjun Singh Dhurwey  
 3. Mahaboob Subhani  
 4. Zia Mohiuddin Dagar

Question ID : 264330115859  
Status : Not Answered  
Chosen Option : --

Q.16 The following duty 'A parent or guardian to provide opportunities for education to his child or his ward' was added to the Fundamental Duties by which Constitutional Amendment Act?

- Ans  1. 85th  
 2. 84th  
 3. 86th  
 4. 83rd

Question ID : 264330115633  
Status : Answered  
Chosen Option : 3

Q.17 Exports in excess of imports result in trade \_\_\_\_\_.

- Ans  1. surplus  
 2. deficit  
 3. zero budget  
 4. liability

Question ID : 264330115391  
Status : Answered  
Chosen Option : 1

Q.18 What is the name given to the path along the Pacific Ocean characterized by active volcanoes and frequent earthquakes?

- Ans
- 1. Ring of Fire
  - 2. Cape Horn
  - 3. Bermuda Triangle
  - 4. Drake Passage

Question ID : 264330115998  
Status : Answered  
Chosen Option : 3

Q.19 Who was Draupadi Murmu's opponent in the 2022 presidential elections?

- Ans
- 1. Mallikarjun Kharge
  - 2. Pranab Mukherjee
  - 3. Yashwant Sinha
  - 4. Shashi Tharoor

Question ID : 264330115018  
Status : Answered  
Chosen Option : 1

Q.20 Which of the following Indian states shares a boundary with both Bangladesh and Myanmar?

- Ans
- 1. Assam
  - 2. Manipur
  - 3. Mizoram
  - 4. Nagaland

Question ID : 264330116097  
Status : Answered  
Chosen Option : 1

Section : Part-C-Elementary Mathematics

Q.1 A boat can travel at a speed of 30 km/h in still water. If the flow of the stream is 2 km/h. How long will it take by the boat to travel 56 km upstream?

- Ans
- 1. 28 hours
  - 2. 3 hours
  - 3. 2 hours
  - 4.  $\frac{28}{15}$  hours

Question ID : 26433071337  
Status : Answered  
Chosen Option : 3

Q.2 A tradesman marked the price of his goods to earn a profit of 20% after giving a discount of 20%. Marked price is how much percentage more than the cost price?

- Ans
- 1. 35%
  - 2. 40%
  - 3. 50%
  - 4. 20%

Question ID : 26433080240  
Status : Answered  
Chosen Option : 3

Q.3 The traffic lights at two different road crossings change after every 54 sec and 76 sec, respectively. If they change simultaneously at 10:15:00 hours, then find the time at which they will change again simultaneously.

- Ans
- 1. 10:34:12 hours
  - 2. 10:59:12 hours
  - 3. 10:52:34 hours
  - 4. 10:49:12 hours

Question ID : 26433082604  
Status : Not Answered  
Chosen Option : --

Q.4 In a class there are 80 students. Average weight of girls is 40 kg and average weight of boys is 50 kg. If number of boys is 50, then what will be the average weight of class?

- Ans
- 1. 46.25 kg.
  - 2. 45.5 kg
  - 3. 47.75 kg
  - 4. 48.25 kg

Question ID : 26433082495  
Status : Answered  
Chosen Option : 4

Q.5 P, Q, and R working separately can do a piece of work in 50, 100, and 300 days respectively. If they work on alternate days, P works on the first day, Q works on the second day, R works on the third day and then again P works on the fourth day and so on, then in how many days, the work will be completed?

- Ans
- 1. 40 days
  - 2. 50 days
  - 3. 90 days
  - 4. 60 days

Question ID : 264330116889  
Status : Answered  
Chosen Option : 3

Q.6 R can complete a painting task in 12 days. With the help of two helpers, he can complete it in 8 days. In how many days the task will be completed by a helper alone?

- Ans
- 1. 24
  - 2. 48
  - 3. 42
  - 4. 36

Question ID : 26433066180  
Status : Answered  
Chosen Option : 2

Q.7 If the difference between the simple interest and the compound interest, compounding annually on a certain sum borrowed for 2 years at 8% per annum is ₹512, then find the sum borrowed (in ₹).

- Ans
- 1. ₹62,100
  - 2. ₹2,100
  - 3. ₹1,200
  - 4. ₹80,000

Question ID : 26433079953  
Status : Answered  
Chosen Option : 4

Q.8 The population of a village is 68000. It increases at the rate of 5 percent in the first year and decreases at the rate of 10 percent per annum for the next 2 years. What will be the population of the village after 3 years?

- Ans
- 1. 60832
  - 2. 56840
  - 3. 62823
  - 4. 57834

Question ID : 26433079882  
Status : Answered  
Chosen Option : 1

Q.9 John's and Tanvi's ages are in the ratio 8:15. After 9 years, the ratio of their ages will be 11:18. What is the difference (in years) between their ages?

- Ans
- 1. 45 years
  - 2. 7 years
  - 3. 21 years
  - 4. 24 years

Question ID : 26433073127  
Status : Answered  
Chosen Option : 2

**Q.10** The greatest 4-digit number divisible by 36 and 45 is subtracted from 10,000. Find the result.

- Ans  1. 150  
 2. 100  
 3. 180  
 4. 120

Question ID : 264330116644  
Status : Answered  
Chosen Option : 2

**Q.11** What is the mean proportional between 121 and 169?

- Ans  1. 143  
 2. 157  
 3. 153  
 4. 147

Question ID : 26433075664  
Status : Not Answered  
Chosen Option : --

**Q.12** A dealer buys 50 chairs for ₹50,000, but 20 of them are damaged. He decides to sell each of the damaged chairs at  $\frac{3}{4}$  the price of the normal one. What should this normal price be in order that he can make a profit of 35% in the entire transaction?

- Ans  1. Rs.6,750  
 2. Rs.5,000  
 3. Rs.1,125  
 4. Rs.1,500

Question ID : 26433073124  
Status : Answered  
Chosen Option : 1

**Q.13** When 40 is subtracted from 40 percent of a number the remainder is 40. Find the number.

- Ans  1. 200  
 2. 100  
 3. 300  
 4. 150

Question ID : 26433079856  
Status : Answered  
Chosen Option : 1



Q.14 The difference between the 110% of a number and 94.5% of the same number is 34.1.  
What is the original number?

- Ans
- 1. 190
  - 2. 110
  - 3. 220
  - 4. 134

Question ID : 264330116809  
Status : Not Answered  
Chosen Option : --

Q.15 The successive discounts of 10%, 30% and 25% is equivalent to a single discount of \_\_\_\_\_ (correct to a nearest whole number).

- Ans
- 1. 65%
  - 2. 47%
  - 3. 55%
  - 4. 53%

Question ID : 26433083040  
Status : Answered  
Chosen Option : 2

Q.16 There are 45 boxes which have an average weight of 52 g. Some boxes are blue, while others are green. If five blue boxes having average weight of 40 g, and eight green boxes having average weight of 43 g, are added, then what is the average weight (in g) now?

- Ans
- 1. 49.72
  - 2. 51.25
  - 3. 52.5
  - 4. 52.25

Question ID : 26433081637  
Status : Not Answered  
Chosen Option : --

Q.17 A heap of wheat is in the form of a cone of diameter 30 m and height 8 m. How much canvas cloth will be required to just cover the heap (take  $\pi = 3.14$ )?

- Ans
- 1.  $700.8 \text{ m}^2$
  - 2.  $800.7 \text{ m}^2$
  - 3.  $900.9 \text{ m}^2$
  - 4.  $900.8 \text{ m}^2$

Question ID : 26433075522  
Status : Not Answered  
Chosen Option : --

Q.18 In a shop, applied a bill for ₹1,00,000. The difference between a discount of 30% and two successive discounts of 25% and 5% is:

- Ans
- 1. ₹1,025
  - 2. ₹1,520
  - 3. ₹1,250
  - 4. ₹1,205

Question ID : 26433082791  
Status : Not Answered  
Chosen Option : --

Q.19 What is the volume of a hemisphere with radius 2.8 cm? (Use  $\pi = \frac{22}{7}$ ) (Rounded up to three places of decimal).

- Ans
- 1. 41 cm<sup>3</sup>
  - 2. 45.995 cm<sup>3</sup>
  - 3. 28 cm<sup>3</sup>
  - 4. 38.268 cm<sup>3</sup>

Question ID : 26433075174  
Status : Answered  
Chosen Option : 3

Q.20 Speed of a boat in still water is 8 km/h and the speed of the stream is 2 km/h. A man rows to a place at 90 km and comes back to the starting point. What is the total time taken by him in the given two-way movement?

- Ans
- 1. 30 hours
  - 2. 24 hours
  - 3. 21 hours
  - 4. 20 hours

Question ID : 26433076234  
Status : Answered  
Chosen Option : 2

Section : Part-D-English

Q.1 Select the most appropriate ANTONYM of the given word.

Dismal

- Ans
- 1. Frantic
  - 2. Candid
  - 3. Horrible
  - 4. Intelligent

Question ID : 26433073988  
Status : Answered  
Chosen Option : 3

Q.2 Select the most appropriate ANTONYM of the underlined word to fill in the blank.

The people of that remote island, who were considered savage by many were actually \_\_\_\_\_ islanders.

- Ans
- 1. efficient
  - 2. civilised
  - 3. mobilised
  - 4. organised

Question ID : 26433091846  
Status : Answered  
Chosen Option : 4

Q.3 Select the most appropriate synonym for the underlined word in the given sentence.

Those unwilling to capitulate to the new Chancellor's demands will be ruthlessly fired.

- Ans
- 1. believe
  - 2. listen
  - 3. torture
  - 4. surrender

Question ID : 26433073750  
Status : Answered  
Chosen Option : 3

Q.4 Select the most appropriate synonym of the given word.

Frantic

- Ans
- 1. Violent
  - 2. Gentle
  - 3. Lazy
  - 4. Loyal

Question ID : 26433074047  
Status : Answered  
Chosen Option : 1

Q.5 Select the most appropriate ANTONYM of the given word.

Silent

- Ans
- 1. Utterable
  - 2. Noisy
  - 3. Mum
  - 4. Mute

Question ID : 26433072810  
Status : Answered  
Chosen Option : 2

**Q.6** A part of the given sentence which has been underlined may contain a spelling error. Select the option that correctly rectifies the spelling error. If there is no error, select 'No error'.

The doctor prescribed to put the patient in quarrantine for a few days.

- Ans
- 1. Qurantine
  - 2. Quarantine
  - 3. Quarantine
  - 4. No error

Question ID : 26433071789  
Status : Answered  
Chosen Option : 4

**Q.7** Select the option that contains a grammatical error in the underlined portion.

I had take a vow of celibacy which was a part of my training while I was in the temple.

- Ans
- 1. I had take a vow of celibacy which was a part of my training while I was in the temple.
  - 2. I had take a vow of celibacy which was a part of my training while I was in the temple.
  - 3. I had take a vow of celibacy which was a part of my training while I was in the temple.
  - 4. I had take a vow of celibacy which was a part of my training while I was in the temple.

Question ID : 26433088593  
Status : Answered  
Chosen Option : 1

**Q.8** Select the most appropriate meaning of the underlined idiom in the given sentence.

He had to bite the bullet when the doctor told him that his injured foot had to be amputated.

- Ans
- 1. Refuse to do something
  - 2. Expedite the procedure
  - 3. Commit suicide
  - 4. To accept a difficult or unpleasant situation

Question ID : 26433072089  
Status : Not Answered  
Chosen Option : --

**Q.9** Select the INCORRECTLY spelt word.

- Ans
- 1. Fantastic
  - 2. Mirror
  - 3. Secretly
  - 4. Alaign

Question ID : 26433085206  
Status : Answered  
Chosen Option : 4

Q.10 Select the most appropriate option to fill in the blank.

I was looking forward to a \_\_\_\_\_ evening at home.

- Ans
- 1. quit
  - 2. quiet
  - 3. quite
  - 4. quote

Question ID : 26433088235  
Status : Answered  
Chosen Option : 2

Q.11 Select the most appropriate meaning of the given idiom.

A slap on the wrist

- Ans
- 1. A wrist watch
  - 2. A secret alliance
  - 3. A tiny gift
  - 4. A small punishment

Question ID : 26433073476  
Status : Not Answered  
Chosen Option : --

Q.12 Select the most appropriate option to fill in the blank.

The audience was asked to dress \_\_\_\_\_, since it was a formal occasion at the Royal Palace.

- Ans
- 1. informally
  - 2. appropriately
  - 3. gaudily
  - 4. casually

Question ID : 26433085596  
Status : Not Answered  
Chosen Option : --

Q.13 Choose the option that can substitute the underlined segment correctly and complete the meaning of the sentence.

Our possessions and other items, while travelling to Europe last year, was misplaced by the travelling agency.

- Ans
- 1. Goods
  - 2. Cases
  - 3. Luggage
  - 4. Kit

Question ID : 26433088881  
Status : Not Answered  
Chosen Option : --

**Q.14** Select the most appropriate option to substitute the underlined segment in the given sentence. If no substitution is required, select 'No substitution'.

Do you have to stay home last week?

- Ans
- 1. Have you had
  - 2. Did you have
  - 3. No substitution
  - 4. Does you have

Question ID : 26433099060  
Status : Not Answered  
Chosen Option : --

**Q.15** Select the most appropriate synonym of the word given in brackets to fill in the blank.

A real warrior does not \_\_\_\_\_ (surrender) to his enemies.

- Ans
- 1. expose
  - 2. yield
  - 3. smile
  - 4. cooperate

Question ID : 26433070467  
Status : Not Answered  
Chosen Option : --

**Comprehension:**

In the following passage, some words have been deleted. Read the passage carefully and select the most appropriate option to fill in each blank.

A flood occurs when water overflows its natural (1) \_\_\_\_\_ and lands on typically dry ground. Floods have always been an (2) \_\_\_\_\_ component of life on the planet. A legend about a (3) \_\_\_\_\_ flood exists in almost every civilisation. Many people have (4) \_\_\_\_\_ to live near bodies of water in order to have access to transportation routes, fishing, and water for drinking, farming, and industry. The majority of the world's major cities are (5) \_\_\_\_\_ on or near oceans, lakes, or rivers.

**SubQuestion No : 16**

**Q.16** Select the most appropriate option to fill in blank number 1.

- Ans
- 1. volumes
  - 2. streams
  - 3. barriers
  - 4. currents

Question ID : 26433088521  
Status : Not Answered  
Chosen Option : --

**Comprehension:**

In the following passage, some words have been deleted. Read the passage carefully and select the most appropriate option to fill in each blank.

A flood occurs when water overflows its natural (1) \_\_\_\_\_ and lands on typically dry ground. Floods have always been an (2) \_\_\_\_\_ component of life on the planet. A legend about a (3) \_\_\_\_\_ flood exists in almost every civilisation. Many people have (4) \_\_\_\_\_ to live near bodies of water in order to have access to transportation routes, fishing, and water for drinking, farming, and industry. The majority of the world's major cities are (5) \_\_\_\_\_ on or near oceans, lakes, or rivers.

**SubQuestion No : 17**

**Q.17 Select the most appropriate option to fill in blank number 2.**

- Ans  1. evitable  
 2. unavoidable  
 3. amendable  
 4. accessible

Question ID : 26433088522  
Status : Not Answered  
Chosen Option : --

**Comprehension:**

In the following passage, some words have been deleted. Read the passage carefully and select the most appropriate option to fill in each blank.

A flood occurs when water overflows its natural (1) \_\_\_\_\_ and lands on typically dry ground. Floods have always been an (2) \_\_\_\_\_ component of life on the planet. A legend about a (3) \_\_\_\_\_ flood exists in almost every civilisation. Many people have (4) \_\_\_\_\_ to live near bodies of water in order to have access to transportation routes, fishing, and water for drinking, farming, and industry. The majority of the world's major cities are (5) \_\_\_\_\_ on or near oceans, lakes, or rivers.

**SubQuestion No : 18**

**Q.18 Select the most appropriate option to fill in blank number 3.**

- Ans  1. limit  
 2. huge  
 3. induced  
 4. controlled

Question ID : 26433088523  
Status : Not Answered  
Chosen Option : --

**Comprehension:**

In the following passage, some words have been deleted. Read the passage carefully and select the most appropriate option to fill in each blank.

A flood occurs when water overflows its natural (1) \_\_\_\_\_ and lands on typically dry ground. Floods have always been an (2) \_\_\_\_\_ component of life on the planet. A legend about a (3) \_\_\_\_\_ flood exists in almost every civilisation. Many people have (4) \_\_\_\_\_ to live near bodies of water in order to have access to transportation routes, fishing, and water for drinking, farming, and industry. The majority of the world's major cities are (5) \_\_\_\_\_ on or near oceans, lakes, or rivers.

**SubQuestion No : 19**

**Q.19 Select the most appropriate option to fill in blank number 4.**

- Ans  1. avoided  
 2. chosen  
 3. conquered  
 4. left

Question ID : 26433088524

Status : Not Answered

Chosen Option : --

**Comprehension:**

In the following passage, some words have been deleted. Read the passage carefully and select the most appropriate option to fill in each blank.

A flood occurs when water overflows its natural (1) \_\_\_\_\_ and lands on typically dry ground. Floods have always been an (2) \_\_\_\_\_ component of life on the planet. A legend about a (3) \_\_\_\_\_ flood exists in almost every civilisation. Many people have (4) \_\_\_\_\_ to live near bodies of water in order to have access to transportation routes, fishing, and water for drinking, farming, and industry. The majority of the world's major cities are (5) \_\_\_\_\_ on or near oceans, lakes, or rivers.

**SubQuestion No : 20**

**Q.20 Select the most appropriate option to fill in blank number 5.**

- Ans  1. endangered  
 2. confiscated  
 3. located  
 4. banned

Question ID : 26433088525

Status : Not Answered

Chosen Option : --

Section : Part-D-Hindi

**Q.1 निम्नलिखित विकल्पों में से 'नवीन बनाने की क्रिया' वाक्यांश के लिए एक सार्थक शब्द क्या होगा?**

- Ans  1. आर्थिक  
 2. सर्वमत  
 3. परम्परावादी  
 4. आधुनिकीकरण

Question ID : 26433062470

Status : Not Answered

Chosen Option : --



Q.2 शालीन व्यक्ति का समाज में हमेशा सम्मान होता है और \_\_\_\_\_ का अपमान।  
'शालीन' के विलोम शब्द से उपरोक्त वाक्य में रिक्त स्थान की पूर्ति कीजिए।

- Ans  1. धृष्ट  
 2. वृद्ध  
 3. सुकुमार  
 4. सौम्य

Question ID : 26433080871  
Status : Not Answered  
Chosen Option : --

Q.3 निम्न वाक्यांश के लिए एक शब्द क्या होगा?  
जो किये हुए उपकार को मानता है

- Ans  1. कृतज्ञ  
 2. कृतकृत्य  
 3. कृतघ्न  
 4. कृतार्थ

Question ID : 26433070099  
Status : Not Answered  
Chosen Option : --

Q.4 कौन से विकल्प में दिए गए सभी शब्द रीतिवाचक क्रिया विशेषण के उदाहरण हैं?

- Ans  1. आज, आजकल, प्रतिदिन  
 2. केवल, कदाचित, शायद  
 3. ऊपर, नीचे, बाहर  
 4. ज्योंही, तक, पर

Question ID : 26433063051  
Status : Not Answered  
Chosen Option : --

Q.5 'कान काटना' मुहावरे का सही अर्थ है-

- Ans  1. चालाकी में आगे होना  
 2. किसी की चुगली करना  
 3. आसानी से कहने में आ जाना  
 4. झूठ बोलना

Question ID : 26433065925  
Status : Not Answered  
Chosen Option : --

Q.6 निम्नलिखित मुहावरे का उपयुक्त अर्थ क्या होगा?  
चट कर जाना

- Ans
- 1. सो जाना
  - 2. मर जाना
  - 3. घूस लेना
  - 4. खा जाना

Question ID : 26433065767  
Status : Not Answered  
Chosen Option : --

Q.7 निम्नलिखित वाक्य में रेखांकित खंड के स्थान पर प्रयुक्त होने वाले सबसे उपयुक्त विकल्प का चयन कीजिए।  
प्लेट में अंगूर का झुंडु रखा है।

- Ans
- 1. छल्ला
  - 2. समूह
  - 3. दल
  - 4. गुच्छा

Question ID : 26433079566  
Status : Not Answered  
Chosen Option : --

Q.8 मैंने गुलाब का पुष्प मँगाया था पर तुम कमल के \_\_\_\_\_ ले के आए।  
'फूल' के पर्याय से उपरोक्त वाक्य में रिक्त स्थान की पूर्ति करें।

- Ans
- 1. पुन्डरिक
  - 2. सुमन
  - 3. वारिद
  - 4. कुमुद

Question ID : 26433084985  
Status : Not Answered  
Chosen Option : --

Q.9 निम्न वाक्यांश के लिए सार्थक शब्द/सही विकल्प चुनें।  
जिसकी कोई सीमा न हो

- Ans
- 1. सीमांत
  - 2. ससीम
  - 3. असीम
  - 4. सीमित

Question ID : 26433066930  
Status : Not Answered  
Chosen Option : --

Q.10 'पांच टन कोयले।' इस वाक्य में रेखांकित शब्द के स्थान पर उचित शब्द क्या होगा?

- Ans
- 1. कोयलों
  - 2. कोयल
  - 3. कोयला सा
  - 4. कोयला

Question ID : 26433062784  
Status : Not Answered  
Chosen Option : --

Q.11 'सोहन की व्यवहार अच्छा नहीं है।' इस वाक्य में अशुद्धि पहचानिए।

- Ans
- 1. की
  - 2. नहीं
  - 3. है
  - 4. अच्छा

Question ID : 26433091306  
Status : Not Answered  
Chosen Option : --

Q.12 क्रिया-विशेषण के प्रकार और उनके उदाहरण का निम्न में से कौन सा युग्म सही नहीं है?

- Ans
- 1. निश्चयबोधक क्रिया विशेषण - बेशक
  - 2. समयवाचक क्रिया विशेषण - पीछे
  - 3. स्थितिबोधक क्रिया विशेषण - कहीं न कहीं
  - 4. परिमाणवाचक क्रिया विशेषण - सर्वत्र

Question ID : 26433079230  
Status : Not Answered  
Chosen Option : --

Q.13 निम्न में से किस वाक्य में 'सुकुमार' के सही पर्यायवाची शब्द का प्रयोग हुआ है?

- Ans
- 1. वह छोटा बालक है।
  - 2. रमेश बहुत भोला है।
  - 3. पुष्प अत्यंत कोमल होते हैं।
  - 4. यौवन चिरकाल नहीं रहता।

Question ID : 26433085146  
Status : Not Answered  
Chosen Option : --

Q.14 निम्नलिखित वाक्यों में से शुद्ध वाक्य का चयन कीजिए।

- Ans
- 1. निराशा का उजाला छाया हुआ है।
  - 2. निराशा का प्रकाश छाया हुआ है।
  - 3. निराशा की किरण छाई हुई है।
  - 4. निराशा के बादल छाये हुए हैं।

Question ID : 26433062825  
Status : Not Answered  
Chosen Option : --

Q.15 शिवजी का वह मंदिर जंगल में बहुत दुर्गम स्थान पर है।' वाक्य में प्रयुक्त 'दुर्गम' शब्द का अर्थ है-

- Ans  1. जहाँ पहुँचना कठिन हो  
 2. जहाँ का रास्ता अच्छा हो  
 3. जहाँ पहुँचना संभव हो  
 4. जहाँ जाना अच्छा लगता हो

Question ID : 26433069733

Status : Not Answered

Chosen Option : --

**Comprehension:**

निम्नलिखित गद्यांश में कुछ शब्दों को हटा दिया गया है। दिए गए विकल्पों की सहायता से रिक्त स्थानों की पूर्ति कीजिए। प्रत्येक संख्या के लिए सबसे उपयुक्त विकल्प का चयन कीजिए।  
पर्यटन या देशाटन एक ही अर्थवाची 1. \_\_\_\_\_ हैं। इसका शाब्दिक अर्थ है- देश-विदेश में 2. \_\_\_\_\_ करना। एक स्थान पर रहते-रहते मनुष्य ऊब जाता है। वह कहीं 3. \_\_\_\_\_ जाना चाहता है। मनुष्य में जिज्ञासा वृत्ति होती है, जो उसे अपने देश के विषय में ही नहीं, 4. \_\_\_\_\_ के बारे में भी जानने की प्रेरणा देती है। वह नई वस्तुओं को जानना चाहता है, उनके सौंदर्य को 5. \_\_\_\_\_ चाहता है।

**SubQuestion No : 16**

Q.16 रिक्त स्थान 1 की पूर्ति के लिए सबसे उपयुक्त विकल्प का चयन कीजिए।

- Ans  1. ज्ञान  
 2. वस्तु  
 3. शब्द  
 4. विकास

Question ID : 264330111059

Status : Not Answered

Chosen Option : --

**Comprehension:**

निम्नलिखित गद्यांश में कुछ शब्दों को हटा दिया गया है। दिए गए विकल्पों की सहायता से रिक्त स्थानों की पूर्ति कीजिए। प्रत्येक संख्या के लिए सबसे उपयुक्त विकल्प का चयन कीजिए।  
पर्यटन या देशाटन एक ही अर्थवाची 1. \_\_\_\_\_ हैं। इसका शाब्दिक अर्थ है- देश-विदेश में 2. \_\_\_\_\_ करना। एक स्थान पर रहते-रहते मनुष्य ऊब जाता है। वह कहीं 3. \_\_\_\_\_ जाना चाहता है। मनुष्य में जिज्ञासा वृत्ति होती है, जो उसे अपने देश के विषय में ही नहीं, 4. \_\_\_\_\_ के बारे में भी जानने की प्रेरणा देती है। वह नई वस्तुओं को जानना चाहता है, उनके सौंदर्य को 5. \_\_\_\_\_ चाहता है।

**SubQuestion No : 17**

Q.17 रिक्त स्थान 2 की पूर्ति के लिए सबसे उपयुक्त विकल्प का चयन कीजिए।

- Ans  1. निकल  
 2. आश्चर्य  
 3. मैत्री  
 4. भ्रमण

Question ID : 264330111060

Status : Not Answered

Chosen Option : --

**Comprehension:**

निम्नलिखित गद्यांश में कुछ शब्दों को हटा दिया गया है। दिए गए विकल्पों की सहायता से रिक्त स्थानों की पूर्ति कीजिए। प्रत्येक संख्या के लिए सबसे उपयुक्त विकल्प का चयन कीजिए। पर्यटन या देशाटन एक ही अर्थवाची 1. \_\_\_\_\_ है। इसका शाब्दिक अर्थ है- देश-विदेश में 2. \_\_\_\_\_ करना। एक स्थान पर रहते-रहते मनुष्य ऊब जाता है। वह कहीं 3. \_\_\_\_\_ जाना चाहता है। मनुष्य में जिज्ञासा वृत्ति होती है, जो उसे अपने देश के विषय में ही नहीं, 4. \_\_\_\_\_ के बारे में भी जानने की प्रेरणा देती है। वह नई वस्तुओं को जानना चाहता है, उनके सौंदर्य को 5. \_\_\_\_\_ चाहता है।

**SubQuestion No : 18**

Q.18 रिक्त स्थान 3 की पूर्ति के लिए सबसे उपयुक्त विकल्प का चयन कीजिए।

- Ans
- 1. पढ़ने
  - 2. घूमने
  - 3. स्थानों
  - 4. देखने

Question ID : 264330111061

Status : Not Answered

Chosen Option : --

**Comprehension:**

निम्नलिखित गद्यांश में कुछ शब्दों को हटा दिया गया है। दिए गए विकल्पों की सहायता से रिक्त स्थानों की पूर्ति कीजिए। प्रत्येक संख्या के लिए सबसे उपयुक्त विकल्प का चयन कीजिए। पर्यटन या देशाटन एक ही अर्थवाची 1. \_\_\_\_\_ हैं। इसका शाब्दिक अर्थ है- देश-विदेश में 2. \_\_\_\_\_ करना। एक स्थान पर रहते-रहते मनुष्य ऊब जाता है। वह कहीं 3. \_\_\_\_\_ जाना चाहता है। मनुष्य में जिज्ञासा वृत्ति होती है, जो उसे अपने देश के विषय में ही नहीं, 4. \_\_\_\_\_ के बारे में भी जानने की प्रेरणा देती है। वह नई वस्तुओं को जानना चाहता है, उनके सौंदर्य को 5. \_\_\_\_\_ चाहता है।

**SubQuestion No : 19**

Q.19 रिक्त स्थान 4 की पूर्ति के लिए सबसे उपयुक्त विकल्प का चयन कीजिए।

- Ans
- 1. विदेश
  - 2. यात्राओं
  - 3. राष्ट्र
  - 4. दूर

Question ID : 264330111062

Status : Not Answered

Chosen Option : --

**Comprehension:**

निम्नलिखित गद्यांश में कुछ शब्दों को हटा दिया गया है। दिए गए विकल्पों की सहायता से रिक्त स्थानों की पूर्ति कीजिए। प्रत्येक संख्या के लिए सबसे उपयुक्त विकल्प का चयन कीजिए।  
पर्यटन या देशाटन एक ही अर्थवाची 1. \_\_\_\_\_ है। इसका शाब्दिक अर्थ है- देश-विदेश में 2. \_\_\_\_\_ करना। एक स्थान पर रहते-रहते मनुष्य ऊब जाता है। वह कहीं 3. \_\_\_\_\_ जाना चाहता है। मनुष्य में जिज्ञासा वृत्ति होती है, जो उसे अपने देश के विषय में ही नहीं, 4. \_\_\_\_\_ के बारे में भी जानने की प्रेरणा देती है। वह नई वस्तुओं को जानना चाहता है, उनके सौंदर्य को 5. \_\_\_\_\_ चाहता है।

**SubQuestion No : 20**

Q.20 रिक्त स्थान 5 की पूर्ति के लिए सबसे उपयुक्त विकल्प का चयन कीजिए।

- Ans  1. निहारना  
 2. भेजना  
 3. पखारना  
 4. लाभ

Question ID : 264330111063

Status : Not Answered

Chosen Option : --

WWW.GOV TJOB SALTER