

Constable GD in CAPFs SSF Rifleman GD in Assam Rifles and Sepoy in NCB Examination 2022

Roll Number	www.govtjobsalert.in
Candidate Name	www.govtjobsalert.in
Venue Name	TCS Gito Bitan
Exam Date	25/01/2023
Exam Time	5:15 PM - 6:15 PM
Subject	Constable GD Examination 2022

Section : **Part-A-General Intelligence and Reasoning**

Q.1 Which option represents the correct order of the given words as they would appear in the English dictionary?

- 1 Pollution
- 2 Popular
- 3 Population
- 4 Pocket
- 5 Pool

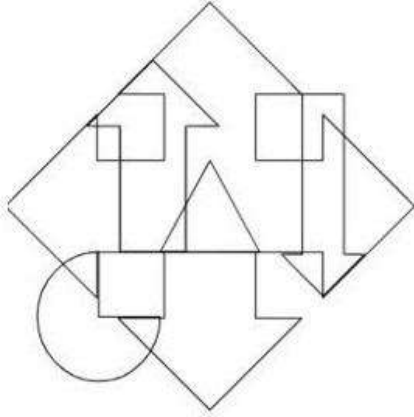
- Ans 1. 4,5,3,2,1
 2. 4,5,1,2,3
 3. 4,1,5,2,3
 4. 4,1,3,2,5

Question ID : 26433069271

Status : Answered

Chosen Option : 3

Q.2 Select the option figure which is embedded in the given figure. (Rotation is NOT allowed)



Ans

✓ 1.



✗ 2.



✗ 3.



✗ 4.



Question ID : 26433085753

Status : Answered

Chosen Option : 1

Q.3 If '\$' means 'addition', '@' means 'subtraction', '#' means 'multiplication', and '&' means 'division'. What will be the value of the following expression?
 $54 \& 6 \# 2 \$ 8 @ 4$

Ans ✓ 1. 22

✗ 2. 29

✗ 3. 30

✗ 4. 23

Question ID : 264330114183

Status : Answered

Chosen Option : 1

Q.4 Five friends S, U, K, N, and M are sitting around a circular table facing the centre. K is the immediate neighbour of S and M. S is not the immediate neighbour of U. N is not the immediate neighbour of M. Who is the immediate neighbour of K and N?

- Ans
- 1. U
 - 2. N
 - 3. S
 - 4. M

Question ID : 26433068076
Status : Answered
Chosen Option : 3

Q.5 Select the set in which the numbers are related in the same way as are the numbers of the following set.

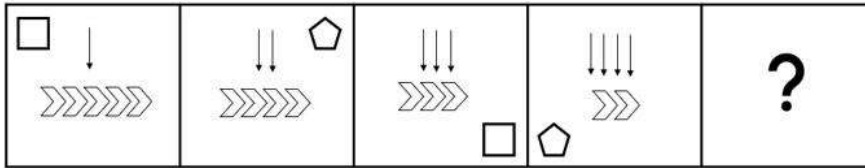
(NOTE : Operations should be performed on the whole numbers, without breaking down the numbers into its constituent digits. E.g. 13 – Operations on 13 such as adding /subtracting/multiplying etc. to 13 can be performed. Breaking down 13 into 1 and 3 and then performing mathematical operations on 1 and 3 is NOT allowed)

(174, 14, 15)
(228, 24, 14)

- Ans
- 1. (180, 17, 15)
 - 2. (192, 20, 13)
 - 3. (334, 16, 23)
 - 4. (384, 45, 19)

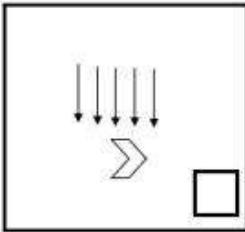
Question ID : 26433076474
Status : Answered
Chosen Option : 4

Q.6 Select the figure that will come next in the following figure series.

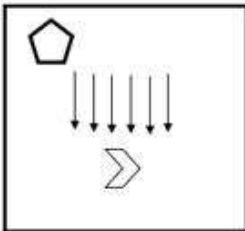


Ans

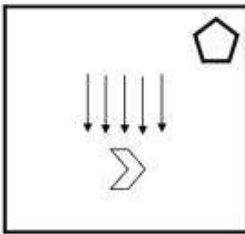
✗ 1.



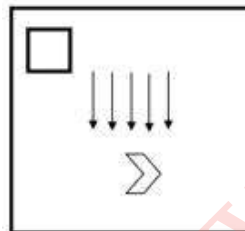
✗ 2.



✗ 3.



✓ 4.



Question ID : 26433076495

Status : Answered

Chosen Option : 4

Q.7 Which of the following letter-clusters will replace the question mark (?) and complete the following letter-cluster series?
KU, NT, PS, SR, UQ, ?

Ans ✗ 1. YP

✗ 2. XQ

✗ 3. YQ

✓ 4. XP

Question ID : 26433067285

Status : Answered

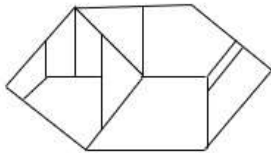
Chosen Option : 4

Q.8 Which of the following numbers will replace the question mark (?) in the given series?
5, 8, 16, 19, 38, ?, 82

- Ans
- 1. 76
 - 2. 46
 - 3. 41
 - 4. 69

Question ID : 26433068094
Status : Answered
Chosen Option : 3

Q.9 Select the option figure which is embedded in the given figure. (Rotation is NOT allowed)



Ans

- 1.
- 2.
- 3.
- 4.

Question ID : 26433069347
Status : Answered
Chosen Option : 3

Q.10 Which two signs should be interchanged to make the below equation mathematically correct?

$$26 - 13 + 18 \div 54 \times 24 = 31$$

- Ans
- 1. - and \times
 - 2. \times and \div
 - 3. - and +
 - 4. + and \div

Question ID : 264330117503
Status : Answered
Chosen Option : 3

Q.11 Select the option that is related to the fifth letter-cluster in the same way as the second letter-cluster is related to the first letter-cluster and the fourth letter-cluster is related to the third letter-cluster.

MUSIC : NFHRX:: DANCE : WZMXV:: CONCERT : ?

- Ans
- 1. XLVIMXG
 - 2. XMVIGL
 - 3. XLMXVIG
 - 4. XLVIGMX

Question ID : 26433070325

Status : Answered

Chosen Option : 3

Q.12 In a certain code language, 'the shirt is dirty' is coded as '3525', 'exercise regularly' is coded as '89' and 'comb your hair' is coded as '444'. How will 'empty your vessel' be coded in that language?

- Ans
- 1. 657
 - 2. 546
 - 3. 456
 - 4. 654

Question ID : 26433067778

Status : Answered

Chosen Option : 2

Q.13 'D + E' means 'D is the sister of E'.
'D - E' means 'D is the husband of E'.
'D × E' means 'D is the father of E'.
'D ÷ E' means 'D is the daughter of E'.
If, $L \div R + T \div W - M$, then how is T related to L?

- Ans
- 1. Daughter
 - 2. Sister's daughter
 - 3. Mother's sister
 - 4. Mother

Question ID : 26433069175

Status : Answered

Chosen Option : 3

Q.14 Which of the following numbers will replace the question mark (?) in the given series?
100, 80, 63, 49, 38, 30, ?

- Ans
- 1. 22
 - 2. 27
 - 3. 24
 - 4. 25

Question ID : 26433069049

Status : Answered

Chosen Option : 4

Q.15 P, Q, R, S, T and U are sitting in a circle facing opposite to the centre. S is sitting to the immediate right of R and immediate left of U. Q is sitting between R and P. T is sitting to the immediate right of U and immediate left of P. Who is sitting to the immediate right of P?

- Ans 1. Q
 2. R
 3. S
 4. T

Question ID : 26433074611
Status : Answered
Chosen Option : 1

Q.16 In this question, three statements are given, followed by two conclusions numbered I and II. Assuming the statements to be true, even if they seem to be at variance with commonly known facts, decide which of the conclusions logically follows/follow from the statements.

Statements:

Some flats are houses.

All houses are buildings.

All buildings are gardens.

Conclusions:

I. Some flats are gardens.

II. All flats are buildings.

- Ans 1. Both conclusions I and II follow.
 2. Only conclusion I follows.
 3. Neither conclusion I nor II follows.
 4. Only conclusion II follows.

Question ID : 26433070380
Status : Answered
Chosen Option : 2

Q.17 Select the option that is related to the fifth letter-cluster in the same way as the second letter-cluster is related to the first letter-cluster and the fourth letter-cluster is related to the third letter-cluster.

HELLO : QNNGJ :: NAMASTE : GVUCOCP :: SALAM : ?

- Ans 1. UCNCO
 2. OCNCU
 3. OCNBU
 4. OCMBT

Question ID : 26433057246
Status : Answered
Chosen Option : 2

Q.18 Select the letter-cluster from among the given options that can replace the question mark (?) in the following series.
PQHI, ?, TULM, VWNO

- Ans 1. RSCD
 2. RSJK
 3. NOFG
 4. XYJK

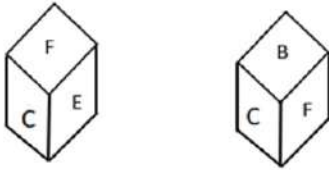
Question ID : 26433068350
Status : Answered
Chosen Option : 2

Q.19 In a certain language, COFFEE is coded as 12 and FOUR is coded as 8. How will ANDROID be coded in the same language?

- Ans 1. 65
 2. 14
 3. 10
 4. 7

Question ID : 26433074590
Status : Answered
Chosen Option : 2

Q.20 Two different positions of the same dice are shown having alphabets 'A' to 'F'. Find the alphabet on the face opposite the face showing 'E'.



- Ans 1. D
 2. B
 3. A
 4. C

Question ID : 26433085512
Status : Answered
Chosen Option : 2

Section : Part-B-General Knowledge and General awareness

Q.1 Who among the following become Member of Parliament from Rampur, Uttar Pradesh in June 2022?

- Ans 1. Ghanshyam Singh Lodhi
 2. Yogi Adityanath
 3. Dinesh Lal Yadav "Nirahua"
 4. Akhilesh Yadav

Question ID : 264330114902
Status : Answered
Chosen Option : 2

Q.2 Which word among these was added in the preamble during the 42nd amendment?

- Ans
- 1. Freedom
 - 2. Religion
 - 3. Secular
 - 4. Nation State

Question ID : 26433089179
Status : Answered
Chosen Option : 3

Q.3 Plants that do not have well-differentiated body design fall in this group. The plants in this group are commonly called algae. This group is _____.

- Ans
- 1. Gymnosperms
 - 2. Pteridophytes
 - 3. Thallophytes
 - 4. Bryophytes

Question ID : 264330115185
Status : Answered
Chosen Option : 4

Q.4 Who has been appointed as the new Chief Justice of Jammu and Kashmir and Ladakh in October 2022?

- Ans
- 1. Justice Jaishree Thakur
 - 2. Justice Pankaj Mithal
 - 3. Justice Ali Mohammad Magrey
 - 4. Justice Prasanna Bhalachandra Varale

Question ID : 264330114993
Status : Answered
Chosen Option : 2

Q.5 Pick the odd one out (Hint: Millets)

- Ans
- 1. Ragi
 - 2. Bajra
 - 3. Jowar
 - 4. Potato

Question ID : 264330115537
Status : Answered
Chosen Option : 4

Q.6 Identify the place in India where tropical cyclones originate from.

- Ans 1. Arabian sea and Pacific ocean
 2. Bay of Bengal and Indian ocean
 3. Pacific ocean
 4. Arctic ocean

Question ID : 26433086707
Status : Answered
Chosen Option : 2

Q.7 Which among the following waves is not an electromagnetic wave?

- Ans 1. Cathode Rays
 2. Ultra Violet Rays
 3. Infra-red Rays
 4. Gamma Rays

Question ID : 264330115150
Status : Answered
Chosen Option : 2

Q.8 The second edition of 'Khelo India National Winter Games 2021' was inaugurated in Jammu and Kashmir's _____ district on 26 February 2021.

- Ans 1. Gulmarg
 2. Doda
 3. Ramban
 4. Kathua

Question ID : 26433072891
Status : Not Answered
Chosen Option : --

Q.9 Which of the following classical dances has its origin in Assam?

- Ans 1. Sattriya
 2. Kathak
 3. Kuchipudi
 4. Odissi

Question ID : 26433072921
Status : Answered
Chosen Option : 1

Q.10 Who officially opened the Summer Olympics Games 2020?

- Ans 1. Vladimir Putin
 2. Emperor Naruhito
 3. Xi Jinping
 4. Michel Temer

Question ID : 264330115951
Status : Not Answered
Chosen Option : --

Q.11 Which of the following Satyagraha was led by Dr. BR Ambedkar?

- Ans 1. Individual Satyagraha
 2. Kanpur Satyagraha
 3. Kheda Satyagraha
 4. Mahad Satyagraha

Question ID : 26433089887
Status : Not Answered
Chosen Option : --

Q.12 The Medaram Jatara Festival is a ____-day long festival celebrated by Koya tribe.

- Ans 1. 5
 2. 3
 3. 2
 4. 4

Question ID : 264330115088
Status : Not Answered
Chosen Option : --

Q.13 Subsidies are provided by the government keeping in mind the _____ of public.

- Ans 1. density
 2. choice
 3. nature
 4. welfare

Question ID : 264330115290
Status : Not Answered
Chosen Option : --

Q.14 Hymns of the Rigveda are known as _____.

- Ans 1. sukta
 2. adhyaya
 3. yami
 4. shutra

Question ID : 26433089849
Status : Answered
Chosen Option : 1

Q.15 In which year the planning commission was set up in India?

- Ans 1. 1960
 2. 1955
 3. 1950
 4. 1947

Question ID : 264330116113
Status : Answered
Chosen Option : 3

Q.16 As per census 2011, which union territory of India has the highest literacy rate?

- Ans 1. Daman & Diu
 2. Lakshwadeep
 3. Puducherry
 4. Chandigarh

Question ID : 264330116023
Status : Answered
Chosen Option : 2

Q.17 Abhinandan Saroja National Award was started on the birthday of _____.

- Ans 1. Padma Bhushan Saroja Nair
 2. Padma Shree Saroja Vishwanath
 3. Padma Bhushan Saroja Murthy
 4. Padma Bhushan Saroja Vaidyanathan

Question ID : 264330115814
Status : Not Answered
Chosen Option : --

Q.18 Pradhan Mantri Kaushal Vikas Yojana (PMKVY) is the flagship scheme of the _____.

- Ans 1. Ministry of Commerce and Industry
 2. Ministry of Agriculture and Farmers Welfare
 3. Ministry of Skill Development & Entrepreneurship.
 4. Ministry of Micro, Small and Medium Enterprises (MSME)

Question ID : 264330116160
Status : Answered
Chosen Option : 3

Q.19 _____ model was followed in the first five year plan.

- Ans 1. Harrod-Domar
 2. Integration
 3. Mahalanobis
 4. Capital

Question ID : 264330115368
Status : Answered
Chosen Option : 1

Q.20 In India, who appoints the Chief Election Commissioner?

- Ans 1. President
 2. Vice President
 3. Speaker of Lok Sabha
 4. Prime Minister

Question ID : 26433074898
Status : Answered
Chosen Option : 1

Section : Part-C-Elementary Mathematics

Q.1 A number 'y' when divided by 225 leaves 33 as the remainder. The same number when divided by 15 leaves 'z' as the remainder. The value of z is:

- Ans 1. 1
 2. 3
 3. 4
 4. 2

Question ID : 26433081536
Status : Not Answered
Chosen Option : --

Q.2 What is the average of first five prime numbers?

- Ans 1. $5\frac{2}{5}$
 2. $5\frac{3}{5}$
 3. $5\frac{1}{5}$
 4. $5\frac{4}{5}$

Question ID : 26433079842
Status : Answered
Chosen Option : 1

Q.3 Ravi and Sumant can complete a piece of work in 40 and 50 days, respectively. If they work at it on alternate days starting with Ravi on the first day, in how many days will the work get over?

Ans

1. $44\frac{3}{5}$ days

2. $42\frac{2}{5}$ days

3. $44\frac{2}{5}$ days

4. $44\frac{1}{5}$ days

Question ID : 26433075245

Status : Not Answered

Chosen Option : --

Q.4 By compounding annually, the compound interest on a sum of Rs.4,900 in 2 years is Rs.725. What is the rate of interest per annum?

Ans

1. $9\frac{1}{7}\%$

2. $8\frac{6}{7}\%$

3. $7\frac{1}{7}\%$

4. $3\frac{1}{2}\%$

Question ID : 26433064920

Status : Not Answered

Chosen Option : --

Q.5 A trader offers an 8% discount on all his goods and still make a 15% profit. If an item is marked with a price of ₹250, the cost price is:

Ans

1. ₹185

2. ₹180

3. ₹200

4. ₹176

Question ID : 26433076326

Status : Not Answered

Chosen Option : --

Q.6 Krishan bought first and second item for ₹150 and ₹300 respectively. He sold the first item at 20% profit, and the second item at 20% loss. Find his overall profit or loss percentage. (Rounded off to two decimal places)

- Ans
- 1. Profit 13.33%
 - 2. Loss 6.67%
 - 3. Loss 13.33%
 - 4. Profit 6.67%

Question ID : 26433079925
Status : Answered
Chosen Option : 4

Q.7 12% of the voters in an election did not cast their votes and 2% of the casted votes were declared invalid. In this election, there were only two candidates. The winner by obtaining 46% of the total registered voters defeated his opponent by 1,044 votes. What was the total number of voters registered in the election?

- Ans
- 1. 18125
 - 2. 10440
 - 3. 16750
 - 4. 14400

Question ID : 26433076223
Status : Not Answered
Chosen Option : --

Q.8 What is the LCM of two co-prime numbers whose product is 323?

- Ans
- 1. 161.5
 - 2. 646
 - 3. 323
 - 4. 1

Question ID : 26433075049
Status : Answered
Chosen Option : 3

Q.9 A certain number is added to each of the numbers 11,15,19 and 25. After addition, these numbers are in proportional. What is the number added?

- Ans
- 1. 5
 - 2. 3
 - 3. 6
 - 4. 4

Question ID : 26433075671
Status : Answered
Chosen Option : 1

Q.10 The average of 29 observations is 40. If the average of the first 15 observations is 38, and that of the last 15 observations is 45, then the 15th observation is:

- Ans
- 1. 30
 - 2. 29.5
 - 3. 0
 - 4. 85

Question ID : 26433075431
Status : Answered
Chosen Option : 1

Q.11 The marked price of an item was Rs. 4000 but the shopkeeper offered a double discount of 5 percent and 7 percent. In how much did he finally sell the item?

- Ans
- 1. Rs. 3948
 - 2. Rs. 3872
 - 3. Rs. 3534
 - 4. Rs. 3665

Question ID : 264330116729
Status : Answered
Chosen Option : 3

Q.12 Two friends are running on a circular track of 720 m. They started from the same point and are moving in the same direction with speeds of 1.5 m/s and 3.5 m/s. After how much time will they cross each other for the second time?

- Ans
- 1. 12 minutes
 - 2. 3.5 minutes
 - 3. 7 minutes
 - 4. 10 minutes

Question ID : 26433073113
Status : Answered
Chosen Option : 1

Q.13 A sum of P was borrowed and paid back in three equal yearly instalments, each of ₹30,000. If the rate of interest was 5% compounded annually, then the value of P (approximate) is:

- Ans
- 1. ₹80,597
 - 2. ₹81,697
 - 3. ₹81,597
 - 4. ₹80,697

Question ID : 26433079805
Status : Not Answered
Chosen Option : --

Q.14 A can do a piece of work in 51 days and B can do the same work in 34 days. Find the time required to complete the same work if they work on alternate days and A starts the work.

- Ans 1. 44 days
 2. 41 days
 3. 46 days
 4. 42 days

Question ID : 264330116844
Status : Not Answered
Chosen Option : --

Q.15 What should be added to the each numbers 9, 22, 14, and 32 so that the obtained numbers are proportional?

- Ans 1. 6
 2. 3
 3. 5
 4. 4

Question ID : 26433080325
Status : Answered
Chosen Option : 4

Q.16 A shopkeeper sells rice. He buys it at a rate 15% less than the selling price. His total sales value for a month is Rs.5,50,000 and he pays Rs.8,000 as rent of the shop at the start of the month. His profit percentage in the month is _____.

- Ans 1. 14.5%
 2. 15.7%
 3. 17.5%
 4. 12.7%

Question ID : 26433071252
Status : Not Answered
Chosen Option : --

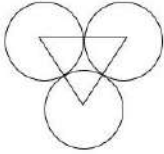
Q.17 Ramesh and Naresh start running at speeds of 26 km/h and 18 km/h respectively towards each other, they meet after one hour and 45 minutes. How far (in metres) were they from each other when they started running?

- Ans 1. 75000
 2. 77000
 3. 66000
 4. 65000

Question ID : 26433064997
Status : Not Answered
Chosen Option : --

Q.18 In the given figure three circles, each of radius 3.5 cm are placed in such a way that each circle touches the other two.

The area of the portion enclosed by the circles is: (Up to two decimal places) (Use $\pi = \frac{22}{7}$)



- Ans**
- 1. 1.97 cm²
 - 2. 3.42 cm²
 - 3. 2.34 cm²
 - 4. 1.48 cm²

Question ID : 26433075895
Status : Not Answered
Chosen Option : --

Q.19 If the radius of a cylinder is 7 m and its total surface area is 440 m², then find the height of the cylinder. (Use $\pi = 22/7$)

- Ans**
- 1. 3 m
 - 2. 7 m
 - 3. 4 m
 - 4. 5 m

Question ID : 26433076385
Status : Answered
Chosen Option : 1

Q.20 In an assembly election, a candidate got 72% of the total valid votes. 1.2% of the total votes were declared invalid. If the total number of voters is 3,32,000, then the number of valid votes polled in favour of this candidate is: (Consider integral part only)

- Ans**
- 1. 337877
 - 2. 136188
 - 3. 236171
 - 4. 133666

Question ID : 26433081015
Status : Answered
Chosen Option : 1

Section : Part-D-English

Q.1 Identify the correctly spelt sentence.

- Ans**
- 1. It is believed that a catarpillar can become a butterfly.
 - 2. It is believed that a caterpillar can become a butterfly.
 - 3. It is believed that a catterpillar can become a butterfly.
 - 4. It is believed that a caterpillar can become a butterfly.

Question ID : 26433072830
Status : Not Answered
Chosen Option : --

Q.2 Select the most appropriate synonym of the given word.

Adversity

- Ans 1. Misfortune
 2. Allegiance
 3. Anxiety
 4. Progress

Question ID : 26433073430
Status : Not Answered
Chosen Option : --

Q.3 Select the most appropriate option that can substitute the underlined segment in the given sentence.

The flyover that connecting the two cities is broken.

- Ans 1. has been connected
 2. connects
 3. has connect
 4. had connect

Question ID : 26433091868
Status : Not Answered
Chosen Option : --

Q.4 Select the most appropriate ANTONYM of the italicised word in the given sentence.

The *miser* hated spending money.

- Ans 1. spendthrift
 2. tightwad
 3. scrooge
 4. skinflint

Question ID : 26433096208
Status : Not Answered
Chosen Option : --

Q.5 Select the most appropriate meaning of the given idiom.

Wrangle for an ass's shadow

- Ans 1. Losing temper easily
 2. Making false allegations
 3. Argue over petty issues
 4. Fighting for a just cause

Question ID : 26433072438
Status : Not Answered
Chosen Option : --

Q.6 Select the most appropriate synonym of the given word.

Bargain

- Ans 1. Alert
 2. Revoke
 3. Deal
 4. Real

Question ID : 26433072185
Status : Not Answered
Chosen Option : --

Q.7 Select the correct pair of words for the blanks in the given sentence.

My teacher asked me to read _____ and also _____ my best friend to celebrate his birthday in the school.

- Ans 1. allowed; aloud
 2. aloud; allowed
 3. a loud; aloud
 4. loud; allow

Question ID : 26433060542
Status : Not Answered
Chosen Option : --

Q.8 Select the most appropriate option to fill in the blank.

The cloth is _____ to touch so it is not suitable for apparels.

- Ans 1. soft
 2. irregular
 3. smooth
 4. coarse

Question ID : 26433074067
Status : Not Answered
Chosen Option : --

Q.9 Select the most appropriate option to substitute the underlined segment in the given sentence.

They have decided to visit Konark, have they?

- Ans 1. is it?
 2. haven't they?
 3. do they?
 4. don't they?

Question ID : 26433088483
Status : Not Answered
Chosen Option : --

Q.10 Select the most appropriate ANTONYM of the given word.

Eradicate

- Ans 1. Culminate
 2. Abolish
 3. Conserve
 4. Deteriorate

Question ID : 26433071970
Status : Not Answered
Chosen Option : --

Q.11 Select the most appropriate ANTONYM of the given word.

Quietness

- Ans 1. Speed
 2. Kindness
 3. Agitation
 4. Slowness

Question ID : 26433073801
Status : Not Answered
Chosen Option : --

Q.12 Select the INCORRECTLY spelt word.

- Ans 1. Percist
 2. Conceive
 3. Strict
 4. Repair

Question ID : 26433073499
Status : Not Answered
Chosen Option : --

Q.13 The following sentence has been divided into parts. One of them may contain an error.

Select the part that contains the error from the given options. If you don't find any error, mark 'No error' as your answer.

If the charge that he conspired / to raze a building is valid,/ there is great deal to answer for.

- Ans 1. No error
 2. there is great deal to answer for
 3. If the charge that he conspired
 4. to raze a building is valid

Question ID : 264330114509
Status : Not Answered
Chosen Option : --

Q.14 Select the most appropriate option to fill in the blank.

Indian society is a complex mix of _____ cultures, people and languages.

- Ans 1. diversity
 2. diverse
 3. diverges
 4. diversion

Question ID : 26433072731
Status : Not Answered
Chosen Option : --

Q.15 Select the most appropriate meaning of the given idiom.

Snake in the grass

- Ans 1. Friendly person
 2. Treacherous person
 3. Loyal person
 4. Clever person

Question ID : 26433072277
Status : Not Answered
Chosen Option : --

Comprehension:

In the following passage, some words have been deleted. Read the passage carefully and select the most appropriate option to fill in each blank.

The death penalty, often known as capital (1)_____, is the most severe form of punishment that may be meted out to an individual under any criminal legislation in (2)_____ anywhere in the world. The legal (3)_____ through which the state uses its power to take an individual's life is known as the death penalty. It has (4)_____ since the establishment of the State itself. The (5)_____ of independence heralded the beginning of a new era in India's judicial system.

SubQuestion No : 16

Q.16 Select the most appropriate option to fill in blank number 1.

- Ans 1. loss
 2. gain
 3. punishment
 4. attainment

Question ID : 26433060989
Status : Not Answered
Chosen Option : --

Comprehension:

In the following passage, some words have been deleted. Read the passage carefully and select the most appropriate option to fill in each blank.

The death penalty, often known as capital (1)_____, is the most severe form of punishment that may be meted out to an individual under any criminal legislation in (2)_____ anywhere in the world. The legal (3)_____ through which the state uses its power to take an individual's life is known as the death penalty. It has (4)_____ since the establishment of the State itself. The (5)_____ of independence heralded the beginning of a new era in India's judicial system.

SubQuestion No : 17

Q.17 Select the most appropriate option to fill in blank number 2.

- Ans
- 1. persistence
 - 2. maintenance
 - 3. resistance
 - 4. existence

Question ID : 26433060990

Status : Not Answered

Chosen Option : --

Comprehension:

In the following passage, some words have been deleted. Read the passage carefully and select the most appropriate option to fill in each blank.

The death penalty, often known as capital (1)_____, is the most severe form of punishment that may be meted out to an individual under any criminal legislation in (2)_____ anywhere in the world. The legal (3)_____ through which the state uses its power to take an individual's life is known as the death penalty. It has (4)_____ since the establishment of the State itself. The (5)_____ of independence heralded the beginning of a new era in India's judicial system.

SubQuestion No : 18

Q.18 Select the most appropriate option to fill in blank number 3.

- Ans
- 1. custody
 - 2. intention
 - 3. lawyer
 - 4. method

Question ID : 26433060991

Status : Not Answered

Chosen Option : --

Comprehension:

In the following passage, some words have been deleted. Read the passage carefully and select the most appropriate option to fill in each blank.

The death penalty, often known as capital (1)_____, is the most severe form of punishment that may be meted out to an individual under any criminal legislation in (2)_____ anywhere in the world. The legal (3)_____ through which the state uses its power to take an individual's life is known as the death penalty. It has (4)_____ since the establishment of the State itself. The (5)_____ of independence heralded the beginning of a new era in India's judicial system.

SubQuestion No : 19

Q.19 Select the most appropriate option to fill in blank number 4.

- Ans 1. considered
 2. authorised
 3. existed
 4. published

Question ID : 26433060992

Status : Not Answered

Chosen Option : --

Comprehension:

In the following passage, some words have been deleted. Read the passage carefully and select the most appropriate option to fill in each blank.

The death penalty, often known as capital (1)_____, is the most severe form of punishment that may be meted out to an individual under any criminal legislation in (2)_____ anywhere in the world. The legal (3)_____ through which the state uses its power to take an individual's life is known as the death penalty. It has (4)_____ since the establishment of the State itself. The (5)_____ of independence heralded the beginning of a new era in India's judicial system.

SubQuestion No : 20

Q.20 Select the most appropriate option to fill in blank number 5.

- Ans 1. enlightenment
 2. birth
 3. end
 4. verity

Question ID : 26433060993

Status : Not Answered

Chosen Option : --

Section : Part-D-Hindi

Q.1 “यह दवा रोग में समूल से नष्ट करती है।”

उपरोक्त वाक्य में कारक सम्बन्धी त्रुटि पहचानकर निम्नलिखित में से शुद्ध वाक्य चुनिए।

- Ans 1. यह दवा रोग को समूल नष्ट करती है।
 2. यह दवा रोग को समूल से नष्ट करती है।
 3. यह दवा रोग के लिए मूल से नष्ट करती है।
 4. यह दवा रोग पर मूल से नष्ट करती है।

Question ID : 26433066971

Status : Not Answered

Chosen Option : --

Q.2 'नमन पुस्तक पढ़ता है।' इस वाक्य का कर्मवाच्य में रूपांतरण होगा -

- Ans
- 1. नमन पुस्तक पढ़ रहा है।
 - 2. नमन पुस्तक पढ़ेगा।
 - 3. नमन द्वारा पुस्तक पढ़ी गई।
 - 4. नमन से पुस्तक पढ़ी नहीं जाती।

Question ID : 26433062321
Status : Not Answered
Chosen Option : --

Q.3 'जिसकी जानकारी बहुत अधिक हो' वाक्यांश के लिए एक शब्द क्या होगा?

- Ans
- 1. विज्ञ
 - 2. अज्ञान
 - 3. अज्ञ
 - 4. अज

Question ID : 26433065728
Status : Answered
Chosen Option : 1

Q.4 निम्न वाक्य में रेखांकित शब्द-समूह के लिए सर्वाधिक उपयुक्त विकल्प चुनें।
जो कम जानता है, वही अधिक उछलता है।

- Ans
- 1. विज्ञ
 - 2. विज्ञानी
 - 3. अल्पज्ञ
 - 4. जिज्ञासु

Question ID : 26433062285
Status : Answered
Chosen Option : 3

Q.5 निम्नलिखित शब्दों में से कौन सा शब्द अनेकार्थी शब्द है?

- Ans
- 1. अर्चना
 - 2. उपहार
 - 3. फल
 - 4. पूजा

Question ID : 26433091319
Status : Answered
Chosen Option : 2

Q.6 'कुलश्रेष्ठ _____।' उपर्युक्त वाक्य में रिक्त स्थान के लिए उपयुक्त विकल्प निम्न में से क्या होगा?

- Ans
- 1. का अर्थ होता है कुल में वृद्ध
 - 2. का अर्थ होता है कुल में बड़ा
 - 3. का अर्थ होता है कुल में श्रेष्ठ
 - 4. का अर्थ होता है कुल में छोटा

Question ID : 26433067039
Status : Answered
Chosen Option : 3

Q.7 निम्न में से कौन-सा शब्द 'आसमान' का पर्यायवाची शब्द है?

- Ans
- 1. आकाश
 - 2. दहन
 - 3. द्रुत
 - 4. प्रभात

Question ID : 26433067084
Status : Answered
Chosen Option : 1

Q.8 'आज कल सभी के पास स्मार्ट फोन होना आम बात है।' वाक्य में प्रयुक्त 'आम' शब्द निम्न में से किस अर्थ को व्यक्त करता है?

- Ans
- 1. सभी
 - 2. अच्छी
 - 3. आम का फल
 - 4. सामान्य

Question ID : 26433080913
Status : Answered
Chosen Option : 4

Q.9 यह आश्रम अत्यंत शांत है। उपरोक्त वाक्य में रेखांकित शब्द के उचित पर्यायवाची शब्द का चयन विकल्पों में से कीजिए।

- Ans
- 1. मधवा
 - 2. रासभ
 - 3. रैन
 - 4. कुटी

Question ID : 26433079624
Status : Answered
Chosen Option : 4

Q.10 'आस्तीन का सांप' मुहावरे का सही अर्थ होगा -

- Ans
- 1. सांप पालना
 - 2. कपटी मित्र
 - 3. बगल में सांप रहना
 - 4. शातिर मित्र

Question ID : 26433062609
Status : Answered
Chosen Option : 2

Q.11 निम्नलिखित वाक्य के रिक्त स्थान में सबसे उपयुक्त मुहावरा क्या होगा?
'वह तो अपनी माँ की _____ है।'

- Ans
- 1. आँखों का तारा
 - 2. अक्ल का दुश्मन
 - 3. धुन का पक्का
 - 4. तिल का ताड़

Question ID : 26433066722
Status : Answered
Chosen Option : 1

Q.12 वर्तनी की दृष्टि से दिए गए वाक्य के अशुद्ध भाग का चयन कीजिए-
विदेश में मेरे मरने पर मेरी अस्थियाँ इलाहाबाद भेज दी जाएँ।

- Ans
- 1. मरने पर मेरी
 - 2. अस्थियाँ इलाहाबाद
 - 3. भेज दी जाएँ।
 - 4. विदेश में मेरे

Question ID : 26433062884
Status : Answered
Chosen Option : 3

Q.13 निम्नलिखित वाक्य में प्रयुक्त अशुद्ध शब्द पहचानें।
'सेनिक सदैव सीमा की सुरक्षा के लिए तत्पर रहते हैं।'

- Ans
- 1. सेनिक
 - 2. सदैव
 - 3. सुरक्षा
 - 4. तत्पर

Question ID : 26433066825
Status : Answered
Chosen Option : 2

Q.14 उसने नहाने के बाद भोजन किया।
उपरोक्त वाक्य में रेखांकित पद के बदले उचित पूर्वकालिक क्रिया पद भरकर वाक्य पूर्ण कीजिए।

- Ans
- 1. नहाया
 - 2. नहलवाया
 - 3. नहाना और
 - 4. नहाकर

Question ID : 26433063042
Status : Answered
Chosen Option : 4

Q.15 निम्नलिखित वाक्यांश के लिए उपयुक्त सार्थक शब्द क्या होगा?
तेज गति से चलने वाला

- Ans
- 1. कर्मठ
 - 2. प्रगतिशील
 - 3. बलवान
 - 4. द्रुतगामी

Question ID : 26433065764
Status : Answered
Chosen Option : 4

Comprehension:

निम्नलिखित गद्यांश में कुछ शब्दों को हटा दिया गया है। दिए गए विकल्पों की सहायता से रिक्त स्थानों की पूर्ति कीजिए। प्रत्येक संख्या के लिए सबसे उपयुक्त विकल्प का चयन कीजिए।
मनुष्य को गुण, कर्म और स्वभाव से 1. _____ प्रकृति वाला प्राणी माना जाता है; यद्यपि हर आदमी के 2. _____ कोने में अज्ञात रूप से एक 3. _____ प्राणी भी छिपा रहा करता है। प्रायः मनुष्य भरसक चेष्टा कर के भी उसे जागने नहीं देता। जब किसी कारणवश वह जाग ही पड़ता है, तभी 4. _____ संघर्षात्मक क्रिया-प्रतिक्रियाओं का भी 5. _____ हुआ करता है। उन्हीं के घर्षण-प्रत्याघर्षण से उत्पन्न हुआ करती है युद्धों की ज्वाला।

SubQuestion No : 16

Q.16 रिक्त स्थान 1 की पूर्ति के लिए सबसे उपयुक्त विकल्प का चयन करें।

- Ans
- 1. जंगली
 - 2. क्रोधी
 - 3. अभिमानी
 - 4. शांत

Question ID : 264330110909
Status : Answered
Chosen Option : 1

Comprehension:

निम्नलिखित गद्यांश में कुछ शब्दों को हटा दिया गया है। दिए गए विकल्पों की सहायता से रिक्त स्थानों की पूर्ति कीजिए। प्रत्येक संख्या के लिए सबसे उपयुक्त विकल्प का चयन कीजिए।
मनुष्य को गुण, कर्म और स्वभाव से 1. _____ प्रकृति वाला प्राणी माना जाता है; यद्यपि हर आदमी के 2. _____ कोने में अज्ञात रूप से एक 3. _____ प्राणी भी छिपा रहा करता है। प्रायः मनुष्य भरसक चेष्टा कर के भी उसे जागने नहीं देता। जब किसी कारणवश वह जाग ही पड़ता है, तभी 4. _____ संघर्षात्मक क्रिया-प्रतिक्रियाओं का भी 5. _____ हुआ करता है। उन्हीं के घर्षण-प्रत्याघर्षण से उत्पन्न हुआ करती है युद्धों की ज्वाला।

SubQuestion No : 17

Q.17 रिक्त स्थान 2 की पूर्ति के लिए सबसे उपयुक्त विकल्प का चयन करें।

- Ans 1. बाहारी
 2. भीतरी
 3. बाहरी
 4. बाह्य

Question ID : 264330110910

Status : Answered

Chosen Option : 2

Comprehension:

निम्नलिखित गद्यांश में कुछ शब्दों को हटा दिया गया है। दिए गए विकल्पों की सहायता से रिक्त स्थानों की पूर्ति कीजिए। प्रत्येक संख्या के लिए सबसे उपयुक्त विकल्प का चयन कीजिए।
मनुष्य को गुण, कर्म और स्वभाव से 1. _____ प्रकृति वाला प्राणी माना जाता है; यद्यपि हर आदमी के 2. _____ कोने में अज्ञात रूप से एक 3. _____ प्राणी भी छिपा रहा करता है। प्रायः मनुष्य भरसक चेष्टा कर के भी उसे जागने नहीं देता। जब किसी कारणवश वह जाग ही पड़ता है, तभी 4. _____ संघर्षात्मक क्रिया-प्रतिक्रियाओं का भी 5. _____ हुआ करता है। उन्हीं के घर्षण-प्रत्याघर्षण से उत्पन्न हुआ करती है युद्धों की ज्वाला।

SubQuestion No : 18

Q.18 रिक्त स्थान 3 की पूर्ति के लिए सबसे उपयुक्त विकल्प का चयन करें।

- Ans 1. नभचर
 2. थलचर
 3. जलचर
 4. हिंसक

Question ID : 264330110911

Status : Answered

Chosen Option : 4

Comprehension:

निम्नलिखित गद्यांश में कुछ शब्दों को हटा दिया गया है। दिए गए विकल्पों की सहायता से रिक्त स्थानों की पूर्ति कीजिए। प्रत्येक संख्या के लिए सबसे उपयुक्त विकल्प का चयन कीजिए।
मनुष्य को गुण, कर्म और स्वभाव से 1. _____ प्रकृति वाला प्राणी माना जाता है; यद्यपि हर आदमी के 2. _____ कोने में अज्ञात रूप से एक 3. _____ प्राणी भी छिपा रहा करता है। प्रायः मनुष्य भरसक चेष्टा कर के भी उसे जागने नहीं देता। जब किसी कारणवश वह जाग ही पड़ता है, तभी 4. _____ संघर्षात्मक क्रिया-प्रतिक्रियाओं का भी 5. _____ हुआ करता है। उन्हीं के घर्षण-प्रत्याघर्षण से उत्पन्न हुआ करती है युद्धों की ज्वाला।

SubQuestion No : 19

Q.19 रिक्त स्थान 4 की पूर्ति के लिए सबसे उपयुक्त विकल्प का चयन करें।

- Ans 1. कभी कभी
 2. तरह-तरह के
 3. इधर-उधर
 4. आस-पास

Question ID : 264330110912

Status : Answered

Chosen Option : 1

Comprehension:

निम्नलिखित गद्यांश में कुछ शब्दों को हटा दिया गया है। दिए गए विकल्पों की सहायता से रिक्त स्थानों की पूर्ति कीजिए। प्रत्येक संख्या के लिए सबसे उपयुक्त विकल्प का चयन कीजिए।
मनुष्य को गुण, कर्म और स्वभाव से 1. _____ प्रकृति वाला प्राणी माना जाता है; यद्यपि हर आदमी के 2. _____ कोने में अज्ञात रूप से एक 3. _____ प्राणी भी छिपा रहा करता है। प्रायः मनुष्य भरसक चेष्टा कर के भी उसे जागने नहीं देता। जब किसी कारणवश वह जाग ही पड़ता है, तभी 4. _____ संघर्षात्मक क्रिया-प्रतिक्रियाओं का भी 5. _____ हुआ करता है। उन्हीं के घर्षण-प्रत्याघर्षण से उत्पन्न हुआ करती है युद्धों की ज्वाला।

SubQuestion No : 20

Q.20 रिक्त स्थान 5 की पूर्ति के लिए सबसे उपयुक्त विकल्प का चयन करें।

- Ans 1. मृत्यु
 2. जन्म
 3. समाप्त
 4. अंत

Question ID : 264330110913

Status : Answered

Chosen Option : 1