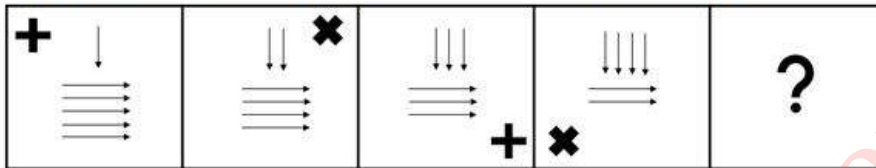


Constable GD in CAPFs SSF Rifleman GD in Assam Rifles and Sepoy in NCB Examination 2022

Roll Number	www.govtjobsalert.in
Candidate Name	www.govtjobsalert.in
Venue Name	iON Digital Zone iDZ Anantapur
Exam Date	23/01/2023
Exam Time	5:15 PM - 6:15 PM
Subject	Constable GD Examination 2022

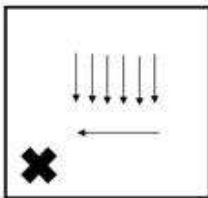
Section : Part-A-General Intelligence and Reasoning

Q.1 Select the figure that will come next in the following figure series.

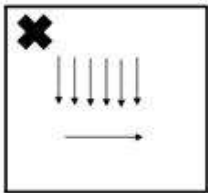


Ans

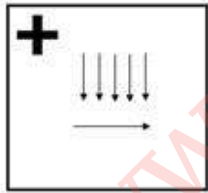
✗ 1.



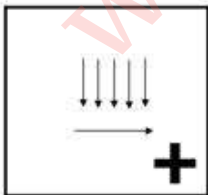
✗ 2.



✓ 3.



✗ 4.



Question ID : 26433076492

Status : Answered

Chosen Option : 3

Q.2 Which of the following letters will replace the question mark (?) and complete the following letter series?
F, P, I, S, L, V, ?

- Ans 1. O
 2. N
 3. L
 4. M

Question ID : 26433067282
Status : Answered
Chosen Option : 1

Q.3 In a certain code language, 'BUS' is coded as 42 and 'COT' is coded as 38. How will 'DRUM' be coded in that language?

- Ans 1. 57
 2. 65
 3. 83
 4. 56

Question ID : 26433074519
Status : Answered
Chosen Option : 4

Q.4 Select the option that is related to the third word in the same way as the second word is related to the first word (The words must be considered as meaningful English words and must not be related to each other based on the number of letters/consonants/vowels in the word).
January: 31::March: _____

- Ans 1. 29
 2. 28
 3. 30
 4. 31

Question ID : 26433078824
Status : Answered
Chosen Option : 4

Q.5 Which of the following terms will replace the question mark (?) in the given series?
EHGD, FGHC, GFIB, ?

- Ans 1. SEHA
 2. REJA
 3. HEJA
 4. BEJA

Question ID : 26433068632
Status : Answered
Chosen Option : 3

Q.6 Which option represents the correct order of the given words as they would appear in the English dictionary?

- 1 Book
- 2 Bowl
- 3 Board
- 4 Boundary
- 5 Botanical

- Ans
- 1. 3,1,4,2,5
 - 2. 3,1,5,4,2
 - 3. 3,5,1,4,2
 - 4. 3,4,5,1,2

Question ID : 26433069268

Status : Answered

Chosen Option : 2

Q.7 A @ B means 'A is the husband of B'.

A & B means 'A is the mother of B'.

A # B means 'A is the daughter of B'.

A % B means 'A is the sibling of B'.

If R % Y & D @ G # M, then M's son-in-law is the _____ of R.

- Ans
- 1. son
 - 2. sister's son
 - 3. brother
 - 4. grandson

Question ID : 26433069615

Status : Answered

Chosen Option : 2

Q.8 Select the correct mirror image of the given figure when the mirror is placed at MN as shown below.

metaMoRphoSis

M

|

N

- Ans
- 1. mEtA MoRphoSis
 - 2. SiZonqRoMεTεm
 - 3. siZonqRοMεTεm
 - 4. siZonqRοMεTεm

Question ID : 26433085546

Status : Answered

Chosen Option : 3

Q.9 In a certain code language, 'candy grass' is coded as 'producer dog', 'feature cable' is coded as 'bug remote', 'grass feature' is coded as 'dog bug', and 'candy cable' is coded as 'producer remote'. What is the code for 'candy'?

- Ans
- 1. remote
 - 2. dog
 - 3. producer
 - 4. bug

Question ID : 26433069042
Status : Answered
Chosen Option : 3

Q.10 Which two signs should be interchanged to make the below equation mathematically correct?

$$12 \times 6 + 9 \div 3 - 4 = 25$$

- Ans
- 1. \times and $+$
 - 2. $+$ and $-$
 - 3. \div and $-$
 - 4. \times and \div

Question ID : 264330114180
Status : Answered
Chosen Option : 4

Q.11 Select the option that is related to the fifth term in the same way as the second term is related to the first term and the fourth term is related to the third term.

FUNS : JZJN :: STOP : WYKK :: DISK : ?

- Ans
- 1. GNOG
 - 2. HNOF
 - 3. HMPG
 - 4. GMPF

Question ID : 26433058011
Status : Answered
Chosen Option : 2

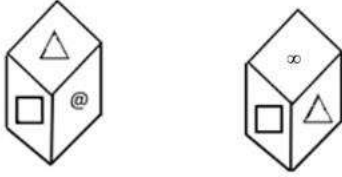
Q.12 Which of the following numbers will replace the question mark (?) in the given series?

2, 6, 12, 20, 30, 42, 56, 72, ?

- Ans
- 1. 78
 - 2. 84
 - 3. 90
 - 4. 80

Question ID : 26433069046
Status : Answered
Chosen Option : 3

Q.13 Two different positions of the same dice are shown having symbols- @, Δ, □, Ω, ∞ and *. Find the symbol on the face opposite the face showing '@'.



- Ans
- 1. ∞
 - 2. Δ
 - 3. Ω
 - 4. *

Question ID : 26433085509
Status : Answered
Chosen Option : 1

Q.14 Seven people, A, B, C, D, E, F and G are sitting in a straight row, facing north. A sits second from the left. Only two people sit between A and C. Only three people sit between D and F and D is an immediate neighbour of A. B is an immediate neighbour of D and E is not an immediate neighbour of C. Who sits to the extreme right?

- Ans
- 1. D
 - 2. E
 - 3. G
 - 4. F

Question ID : 26433056932
Status : Answered
Chosen Option : 4

Q.15 Which two signs should be interchanged to make the below equation mathematically correct?
 $24 + 54 \div 18 - 48 \times 16 = 40$

- Ans
- 1. × and +
 - 2. ÷ and ×
 - 3. ÷ and +
 - 4. + and -

Question ID : 264330117506
Status : Answered
Chosen Option : 1

Q.16 Three statements are given followed by three conclusions numbered I, II and III. Assuming the statements to be true, even if they seem to be at variance with commonly known facts, decide which of the conclusions logically follow(s) from the statements.

Statements:

All hands are fingers.

All legs are fingers.

All fingers are toes.

Conclusions:

I. All toes are fingers.

II. Some toes are hands.

III. Some toes are legs.

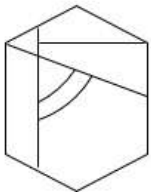
- Ans**
- 1. Only conclusions I and II follow
 - 2. Only conclusions II and III follow
 - 3. All conclusions follow
 - 4. Only conclusions I and III follow

Question ID : 26433082312

Status : Answered

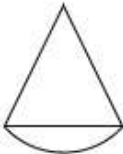
Chosen Option : 2

Q.17 Select the option figure which is embedded in the given figure. (Rotation is NOT allowed)



Ans

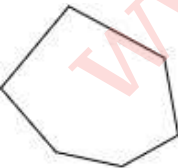
1.



2.



3.



4.



Question ID : 26433069350

Status : Answered

Chosen Option : 2

Q.18 Select the option that is related to the third term in the same way as the second term is related to the first term and the sixth term is related to the fifth term.
4 : 250 :: 5 : ? :: 6 : 1290

- Ans 1. 619
 2. 433
 3. 555
 4. 535

Question ID : 26433069095
Status : Answered
Chosen Option : 1

Q.19 Which of the following numbers will replace the question mark(?) in the given series?
286, 231, ?, 151, 126, 111

- Ans 1. 166
 2. 186
 3. 201
 4. 111

Question ID : 26433068097
Status : Answered
Chosen Option : 2

Q.20 Six girls D, K, M, P, R and S are sitting around a circular table, facing the centre. S is sitting third to the left of R. P is sitting to the immediate right of R and to the immediate left of D. M is sitting to the immediate left of R. K is sitting to the immediate right of S and to the immediate left of M. If D and K exchange their places, Who will be sitting to the immediate right of D?

- Ans 1. R
 2. M
 3. P
 4. S

Question ID : 26433080473
Status : Answered
Chosen Option : 2

Section : Part-B-General Knowledge and General awareness

Q.1 When exports are higher than imports, it is known as a situation of _____.

- Ans 1. trade surplus
 2. trade deficit
 3. fiscal deficit
 4. revenue surplus

Question ID : 26433054782
Status : Answered
Chosen Option : 1

Q.2 Articles _____ to _____ enunciates the qualifications, functions of the President and his/her tenure, election, method of re-election, and impeachment among others.

- Ans 1. 52; 62
 2. 50; 55
 3. 50; 60
 4. 19; 21

Question ID : 26433089907
Status : Answered
Chosen Option : 3

Q.3 A _____ balance of trade is one in which the value of domestic goods exported exceeds the value of foreign goods imported.

- Ans 1. unfavorable
 2. poor
 3. undesirable
 4. favorable

Question ID : 264330115293
Status : Answered
Chosen Option : 4

Q.4 What is the minimum age required to become a member of the Lok Sabha?

- Ans 1. 18 years
 2. 22 years
 3. 25 years
 4. 23 years

Question ID : 26433074910
Status : Answered
Chosen Option : 3

Q.5 Khelo India Youth Games was formerly known as _____.

- Ans 1. Jeeto India Youth Games
 2. Khelo Bharat
 3. Khelo India School Games
 4. Khelo India Jeeto India

Question ID : 264330115914
Status : Not Answered
Chosen Option : --

Q.6 The public sector was the focus of the _____ and planned on bringing rapid industrialization in the country.

- Ans
- 1. third five year plan in India
 - 2. fifth five year plan in India
 - 3. first five year plan in India
 - 4. second five year plan in India

Question ID : 264330115365
Status : Answered
Chosen Option : 4

Q.7 Who among the following political leaders became Member of Parliament from Sangrur constituency, Punjab in June 2022?

- Ans
- 1. Arvind Kejriwal
 - 2. Simranjit Singh Mann
 - 3. Bhagwant Mann
 - 4. Azam Khan

Question ID : 264330114899
Status : Answered
Chosen Option : 3

Q.8 The 23rd National Youth Festival to commemorate the birthday of Swami Vivekanand was held at_____.

- Ans
- 1. Mumbai
 - 2. Delhi
 - 3. Lucknow
 - 4. Dehradun

Question ID : 264330116276
Status : Not Answered
Chosen Option : --

Q.9 Who was named as the new Chief Secretary of Delhi in April 2022?

- Ans
- 1. Keshav Prasad Maurya
 - 2. Sanjay Prasad
 - 3. Naresh Kumar
 - 4. Amit Singh

Question ID : 264330114996
Status : Not Answered
Chosen Option : --

Q.10 According to which of the following laws, heat produced by an electric current is directly proportional to the resistance of the conductor, the square of the current, and the time for which it flows?

- Ans
- 1. Hooke's Law
 - 2. Joule's Law
 - 3. Coulomb's Law
 - 4. Faraday's Law

Question ID : 264330115147
Status : Not Answered
Chosen Option : --

Q.11 How many Indian dances have been recognised by the Sangeet NatakAkademi as classical dance forms as of May 2022?

- Ans
- 1. 10
 - 2. 12
 - 3. 8
 - 4. 5

Question ID : 26433074071
Status : Answered
Chosen Option : 3

Q.12 The Indian National Congress was founded in:

- Ans
- 1. 1865
 - 2. 1875
 - 3. 1885
 - 4. 1895

Question ID : 26433090583
Status : Answered
Chosen Option : 3

Q.13 At the age of _____, Mahavira left home and went to live in a forest in search of enlightenment.

- Ans
- 1. thirty-two
 - 2. thirty
 - 3. twenty-eight
 - 4. twenty-nine

Question ID : 26433085210
Status : Not Answered
Chosen Option : --

Q.14 Dree, an agricultural festival of Arunachal Pradesh, is celebrated in the month of _____.

- Ans
- 1. June
 - 2. July
 - 3. August
 - 4. May

Question ID : 264330115085
Status : Not Answered
Chosen Option : --

Q.15 The nucleus is separated from _____ by a nuclear membrane.

- Ans
- 1. vacuole
 - 2. gene
 - 3. cytoplasm
 - 4. cell

Question ID : 264330115241
Status : Answered
Chosen Option : 3

Q.16 National Film Award for Best Choreography for the movie Vishwaroopam was awarded to _____.

- Ans
- 1. Amala Akkineni
 - 2. M.R Krishnamurthy
 - 3. Pandit Birju Maharaj
 - 4. Kalamandalam Gopi

Question ID : 264330115862
Status : Not Answered
Chosen Option : --

Q.17 The Companies (Amendment) Bill, 2020 was introduced in Lok Sabha by which minister?

- Ans
- 1. Anurag Singh Thakur
 - 2. Ramesh Bidhuri
 - 3. Nitin Gadkari
 - 4. Gautam Gambhir

Question ID : 264330116208
Status : Not Answered
Chosen Option : --

Q.18 Burmese is the official language of which neighbouring country of India?

- Ans
- 1. Tibet
 - 2. Nepal
 - 3. Bhutan
 - 4. Myanmar

Question ID : 264330116100
Status : Answered
Chosen Option : 4

Q.19 Autumn season in India comes under which among the following month interval?

- Ans
- 1. June to September
 - 2. December to February
 - 3. October to November
 - 4. March to May

Question ID : 264330115540
Status : Not Answered
Chosen Option : --

Q.20 On what does the pressure and wind system of any area depend?

- Ans
- 1. Distance from the sea and latitude
 - 2. Latitude and altitude of the place
 - 3. Altitude and longitude
 - 4. Longitude and distance from the sea

Question ID : 26433087881
Status : Not Answered
Chosen Option : --

Section : Part-C-Elementary Mathematics

Q.1 The HCF and LCM of two numbers are 6 and 3024, respectively. If one of the numbers is 54, then find the other number.

- Ans
- 1. 334
 - 2. 336
 - 3. 504
 - 4. 506

Question ID : 26433080088
Status : Answered
Chosen Option : 2

Q.2 The volume of a right circular cylinder is 180 cm^3 , the area of its base is 30 cm^2 and the height is 6 cm then the diameter of the cylinder is (in cm):

Ans

1. $2\sqrt{\frac{30}{\pi}}$

2. $\sqrt{30}$

3. $2\sqrt{30}$

4. $\sqrt{\frac{30}{\pi}}$

Question ID : 26433079974

Status : Answered

Chosen Option : 1

Q.3 Two trains A and B are 155 km apart on a straight line. One train starts from A at 7:00 A.M. and travels towards B at 20 km/h. Another train starts from B at 8:00 A.M. and travels towards A at a speed of 25 km/h. At what time will they meet?

Ans

1. 10:00 A.M.

2. 9:00 A.M.

3. 12:00 A.M.

4. 11:00 A.M.

Question ID : 26433075506

Status : Answered

Chosen Option : 4

Q.4 Which of the following is divisible by 24?

Ans

1. 2940

2. 2856

3. 1458

4. 1860

Question ID : 26433079901

Status : Answered

Chosen Option : 2

Q.5 Priyank buys an unfurnished flat for Rs. 6000000. He furnished it and eventually sells it for Rs. 12000000. The percent increase in the price of the flat is:

Ans

1. 40 percent

2. 50 percent

3. 100 percent

4. 60 percent

Question ID : 264330116812

Status : Answered

Chosen Option : 3

Q.6 A and B together can complete a work in 8 days. A alone can complete it in 16 days. If B works at 50 percent efficiency, then in how many days A and B together will complete the work?

- Ans
- 1. $32/3$ days
 - 2. $55/7$ days
 - 3. $47/3$ days
 - 4. $34/3$ days

Question ID : 264330116892
Status : Answered
Chosen Option : 1

Q.7 A sum of money is to be distributed among A, B and C in proportion of 5 : 7 : 11. If B gets ₹1,500 more than A, what is B's share?

- Ans
- 1. ₹5,250
 - 2. ₹6,750
 - 3. ₹3,750
 - 4. ₹8,250

Question ID : 26433080115
Status : Answered
Chosen Option : 1

Q.8 Find the average of the first 9 prime numbers.

- Ans
- 1. $\frac{98}{9}$
 - 2. $10\frac{2}{9}$
 - 3. $11\frac{1}{9}$
 - 4. $11\frac{2}{9}$

Question ID : 26433075716
Status : Answered
Chosen Option : 3

Q.9 If the third proportion to 8 and 18 is same as the fourth proportion to 2, 81 and $x^2 + 2x + 2$, then find the value of x.

- Ans
- 1. -1
 - 2. 1
 - 3. 2
 - 4. -2

Question ID : 26433079944
Status : Answered
Chosen Option : 1

Q.10 Two persons P and Q working together can do a piece of work in 18 days. Q alone can do it in 36 days. Q started the work, and after working for 6 days he left the work. P then took up the remaining work. How many days will P take to complete the remaining work?

- Ans 1. 50
 2. 30
 3. 20
 4. 40

Question ID : 26433074463
Status : Answered
Chosen Option : 2

Q.11 Ratnesh purchased a bike for Rs.64,000 and sold it for Rs.60,000. What is the percentage loss faced by Ratnesh?

- Ans 1. 6.25%
 2. 6.00%
 3. 5.65%
 4. 5.25%

Question ID : 26433080301
Status : Answered
Chosen Option : 1

Q.12 A shopkeeper has found that the selling price of the product is 90% of the cost price. The selling price is Rs.90 per kg, so in order to get a profit, he weighs only 800 grams in place of 1 kg. Determine the profit (in Rs.) earned by the shopkeeper on selling 1 kg of this product?

- Ans 1. 15
 2. 10
 3. 25
 4. 20

Question ID : 26433071314
Status : Answered
Chosen Option : 3

Q.13 The average of six consecutive odd numbers is 68. What is the cube of the difference between the highest and the lowest numbers?

- Ans 1. 1000
 2. 729
 3. 512
 4. 1331

Question ID : 26433075755
Status : Answered
Chosen Option : 1

Q.14 A seller announced 30% discount on the marked price of a fan. If the selling price of the fan is Rs.2,800, then the marked price of the fan was:

- Ans 1. Rs.4,000
 2. Rs.3,500
 3. Rs.3,000
 4. Rs.2,930

Question ID : 26433083038
Status : Answered
Chosen Option : 1

Q.15 Four cows are tied at 4 corners (one at each corner) of a rectangular field of length 30 m and width 20m. The length of the rope is 7 m. What is the area of the field that cows CANNOT graze? (Use $\pi = 22/7$)

- Ans 1. 446 m²
 2. 434 m²
 3. 424 m²
 4. 414 m²

Question ID : 26433075478
Status : Answered
Chosen Option : 1

Q.16 In an election between two candidates, the one who gets 58% of the votes polled is elected by a majority of 4,032 votes. What is the total number of votes polled?

- Ans 1. 25,200
 2. 24,800
 3. 24,600
 4. 25,800

Question ID : 26433080358
Status : Answered
Chosen Option : 1

Q.17 After a discount of 15% on the marked price, the profit is 5%. What percent discount on the marked price be there to have 8% profit (rounded off to one decimal place)?

- Ans 1. 12.6%
 2. 10.2%
 3. 11.5%
 4. 9.2%

Question ID : 26433085448
Status : Answered
Chosen Option : 1

Q.18 The difference between compound and simple interests on a certain sum of money at the interest rate of 20% per annum for $1\frac{1}{2}$ years is Rs.6,200, when the interest is compounded semi-annually. Find the sum of money.

- Ans 1. Rs. 2,00,000
 2. Rs. 2,10,300
 3. Rs. 2,12,000
 4. Rs. 2,15,520

Question ID : 26433083046
Status : Answered
Chosen Option : 1

Q.19 A man borrows a certain sum of money and pays it back in 2 years in two equal instalments. If Compound Interest is reckoned at 5% per annum in case of annual compounding and he pays back annually Rs.882, what sum did he borrow?

- Ans 1. Rs.1,600
 2. Rs.1,640
 3. Rs.1,682
 4. Rs.1,650

Question ID : 26433075502
Status : Answered
Chosen Option : 2

Q.20 In 4 h, a boat goes 12 km along the stream. It covers 6 km against the stream in the same time. The speed of the boat in still water (in km/h) is:

- Ans 1. 2.25
 2. 1.16
 3. 3.12
 4. 1.11

Question ID : 26433080050
Status : Answered
Chosen Option : 1

Section : Part-D-English

Q.1 Select the most appropriate ANTONYM of the given word.

Alienate

- Ans 1. Alternate
 2. Alter
 3. Reconcile
 4. Renounce

Question ID : 26433074440
Status : Answered
Chosen Option : 3

Q.2 Select the most appropriate option that can substitute the underlined segment in the given sentence.

The collision was witnessed by the pedestrians.

- Ans
- 1. powerful blast
 - 2. funeral procession
 - 3. violent accident
 - 4. protest march

Question ID : 26433099871
Status : Answered
Chosen Option : 3

Q.3 Select the most appropriate option that can substitute the underlined segment in the given sentence.

Dogs are the most adorable and lovable beings to tie.

- Ans
- 1. beings to see
 - 2. animals to play
 - 3. organisms to watch
 - 4. pets to keep

Question ID : 26433088504
Status : Answered
Chosen Option : 4

Q.4 Select the correctly spelt word.

- Ans
- 1. Ricipit
 - 2. Reicipit
 - 3. Reciept
 - 4. Receipt

Question ID : 26433086495
Status : Answered
Chosen Option : 4

Q.5 Select the most appropriate synonym of the given word.

Eligible

- Ans
- 1. Efficient
 - 2. Qualified
 - 3. Sufficient
 - 4. Disinterested

Question ID : 26433073394
Status : Answered
Chosen Option : 2

Q.6 Select the INCORRECTLY spelt word.

- Ans 1. Thankful
 2. Dutiful
 3. Merciful
 4. Plentiful

Question ID : 26433073502
Status : Answered
Chosen Option : 2

Q.7 Select the most appropriate ANTONYM of the given word.

Ponderous

- Ans 1. Obligated
 2. Graceful
 3. Swollen
 4. Adverse

Question ID : 26433071837
Status : Answered
Chosen Option : 2

Q.8 Select the most appropriate meaning of the given idiom.

Bear a grudge

- Ans 1. To consider people with kindness and care
 2. To feel angry against somebody for a past incident
 3. To entertain the guests with utmost happiness
 4. To feel satisfied with the achievements

Question ID : 26433073480
Status : Answered
Chosen Option : 2

Q.9 Select the most appropriate option to fill in the blank.

He is usually calm but today he appears rather _____.

- Ans 1. quiet
 2. undisturbed
 3. disturbed
 4. relaxed

Question ID : 26433074065
Status : Answered
Chosen Option : 3

Q.10 Select the option that expresses the given sentence in past tense form.

Aksa Thomas comes to attend the session so early.

- Ans 1. Aksa Thomas came to attend the session so early.
 2. Aksa Thomas has come to attend the session so early.
 3. Aksa Thomas may come to attend the session so early.
 4. Aksa Thomas will come to attend the session so early.

Question ID : 26433089297
Status : Answered
Chosen Option : 1

Q.11 Select the most appropriate meaning of the given idiom.

Gate-crasher

- Ans 1. Thick grass
 2. A person who enters an event without any invitation
 3. A blind person
 4. A cobra that lives in gardens

Question ID : 26433072575
Status : Answered
Chosen Option : 2

Q.12 Select the most appropriate ANTONYM to substitute the underlined word in the given sentence.

This certainly was a feeble attempt to capture the culprit.

- Ans 1. enviable
 2. refraining
 3. powerful
 4. treble

Question ID : 26433074011
Status : Answered
Chosen Option : 3

Q.13 Select the most appropriate synonym of the given word.

Ample

- Ans 1. Entertain
 2. Sample
 3. Temple
 4. Sufficient

Question ID : 26433072188
Status : Answered
Chosen Option : 4

Q.14 Select the most appropriate synonym of the word given in the brackets to fill in the blank.

The increasing population of a country can be a _____ (affliction) for the development of a country.

- Ans
- 1. boom
 - 2. bane
 - 3. boon
 - 4. brittleness

Question ID : 26433071890
Status : Answered
Chosen Option : 3

Q.15 Select the most appropriate option to fill in the blank.

APJ Abdul Kalam was born in a middle class family. He was a short boy _____ ordinary looks.

- Ans
- 1. with either
 - 2. with as
 - 3. with rather
 - 4. neither

Question ID : 26433072728
Status : Answered
Chosen Option : 3

Comprehension:

In the following passage, some words have been deleted. Read the passage carefully and select the most appropriate option to fill in each blank.

Reaching the stall from which the sound was emanating, he saw that it was deserted. It was festooned (1) _____ flowers: blue-bells and foxgloves and harebells and daffodils, but also with violets and lilies. The use and function of these flowers is chiefly (2) _____; they bring pleasure; they can be given to a loved one as a token of admiration and affection, and the sound they make is pleasing (3) _____ the ear. Also, they catch the light (4) _____ delightfully. Dustan could not but observe that the colour of sunlight glittering through the purple crystal was inferior in both (5) _____ to that of her eyes.

SubQuestion No : 16

Q.16 Select the most appropriate option to fill in blank number 1.

- Ans
- 1. on
 - 2. with
 - 3. by
 - 4. upon

Question ID : 26433060871
Status : Answered
Chosen Option : 2

Comprehension:

In the following passage, some words have been deleted. Read the passage carefully and select the most appropriate option to fill in each blank.

Reaching the stall from which the sound was emanating, he saw that it was deserted. It was festooned (1)_____ flowers: blue-bells and foxgloves and harebells and daffodils, but also with violets and lilies. The use and function of these flowers is chiefly (2)_____; they bring pleasure; they can be given to a loved one as a token of admiration and affection, and the sound they make is pleasing (3) _____ the ear. Also, they catch the light (4) _____ delightfully. Dustan could not but observe that the colour of sunlight glittering through the purple crystal was inferior in both (5) _____ to that of her eyes.

SubQuestion No : 17

Q.17 Select the most appropriate option to fill in blank number 2.

- Ans 1. admiration and affection
 2. decorative and recreational
 3. glittering
 4. repellent and frivolous

Question ID : 26433060872

Status : Answered

Chosen Option : 2

Comprehension:

In the following passage, some words have been deleted. Read the passage carefully and select the most appropriate option to fill in each blank.

Reaching the stall from which the sound was emanating, he saw that it was deserted. It was festooned (1)_____ flowers: blue-bells and foxgloves and harebells and daffodils, but also with violets and lilies. The use and function of these flowers is chiefly (2)_____; they bring pleasure; they can be given to a loved one as a token of admiration and affection, and the sound they make is pleasing (3) _____ the ear. Also, they catch the light (4) _____ delightfully. Dustan could not but observe that the colour of sunlight glittering through the purple crystal was inferior in both (5) _____ to that of her eyes.

SubQuestion No : 18

Q.18 Select the most appropriate option to fill in blank number 3.

- Ans 1. upon
 2. for
 3. to
 4. as far as

Question ID : 26433060873

Status : Answered

Chosen Option : 3

Comprehension:

In the following passage, some words have been deleted. Read the passage carefully and select the most appropriate option to fill in each blank.

Reaching the stall from which the sound was emanating, he saw that it was deserted. It was festooned (1)_____ flowers: blue-bells and foxgloves and harebells and daffodils, but also with violets and lilies. The use and function of these flowers is chiefly (2)_____; they bring pleasure; they can be given to a loved one as a token of admiration and affection, and the sound they make is pleasing (3) _____ the ear. Also, they catch the light (4) _____ delightfully. Dustan could not but observe that the colour of sunlight glittering through the purple crystal was inferior in both (5) _____ to that of her eyes.

SubQuestion No : 19

Q.19 Select the most appropriate option to fill in blank number 4.

- Ans 1. so
 2. much
 3. such
 4. more

Question ID : 26433060874

Status : Answered

Chosen Option : 2

Comprehension:

In the following passage, some words have been deleted. Read the passage carefully and select the most appropriate option to fill in each blank.

Reaching the stall from which the sound was emanating, he saw that it was deserted. It was festooned (1)_____ flowers: blue-bells and foxgloves and harebells and daffodils, but also with violets and lilies. The use and function of these flowers is chiefly (2)_____; they bring pleasure; they can be given to a loved one as a token of admiration and affection, and the sound they make is pleasing (3) _____ the ear. Also, they catch the light (4) _____ delightfully. Dustan could not but observe that the colour of sunlight glittering through the purple crystal was inferior in both (5) _____ to that of her eyes.

SubQuestion No : 20

Q.20 Select the most appropriate option to fill in blank number 5.

- Ans 1. aroma and fragrance
 2. shape and size
 3. texture and touch
 4. hue and shade

Question ID : 26433060875

Status : Answered

Chosen Option : 4

Section : Part-D-Hindi

Q.1 'दूसरों की उन्नति को देखकर जलने वाला' इस वाक्यांश के लिए सार्थक शब्द है -

- Ans 1. क्रोधी
 2. गुस्सैल
 3. ईर्ष्यालु
 4. कृपालु

Question ID : 26433062331

Status : Not Answered

Chosen Option : --

Q.2 'अपना हस्ताक्षर लगा दो।' इस वाक्य में रेखांकित शब्द के स्थान पर उपयुक्त शब्द के प्रयोग से वाक्य को शुद्ध करें।

- Ans
- 1. सटा
 - 2. जोड़
 - 3. मिला
 - 4. कर

Question ID : 26433062207
Status : Not Answered
Chosen Option : --

Q.3 निम्नलिखित में से अशुद्ध वाक्य कौन-सा है?

- Ans
- 1. राजीव ने भरपेट खाना खाया।
 - 2. अक्षत पाठशाला से सीधे घर चला गया।
 - 3. केशव रोटी खा लिया है।
 - 4. मेरे प्राण निकल गए।

Question ID : 26433066984
Status : Not Answered
Chosen Option : --

Q.4 'फूंक से पहाड़ उड़ाना' मुहावरे का सही अर्थ है -

- Ans
- 1. असम्भव कार्य करने की कोशिश करना
 - 2. बड़ा काम करना
 - 3. झूठी बातें करना
 - 4. बड़ी-बड़ी बातें करना

Question ID : 26433065928
Status : Not Answered
Chosen Option : --

Q.5 'जो पृथ्वी से संबद्ध हैं' वाक्यांश के लिए इनमें से सही शब्द क्या है?

- Ans
- 1. पठार
 - 2. पहाड़
 - 3. पार्थिव
 - 4. पर्वत

Question ID : 26433070148
Status : Not Answered
Chosen Option : --

Q.6 'रसोईघर _____।' उपर्युक्त वाक्य में रिक्त स्थान के लिए उपयुक्त विकल्प निम्न में से क्या होगा?

- Ans 1. का अर्थ है- रसोई का बनाया हुआ घर
 2. का अर्थ है- रसोई का घर
 3. का अर्थ है- रसोइये का घर
 4. का अर्थ है- रसोई में बना हुआ घर

Question ID : 26433067042
Status : Not Answered
Chosen Option : --

Q.7 "लड़कों ने लड़कियों से साथ नाचा।" उपरोक्त वाक्य में कारक सम्बन्धी त्रुटि पहचानकर निम्नलिखित में से शुद्ध वाक्य का चयन कीजिए।

- Ans 1. लड़के लड़कियों के साथ नाचे।
 2. लड़कों ने लड़कियों के साथ नाचा।
 3. लड़कों ने लड़कियों से नाचे।
 4. लड़के लड़कियों ने साथ नाचे।

Question ID : 26433066968
Status : Not Answered
Chosen Option : --

Q.8 निम्नलिखित में से 'अंतर' का अर्थ नहीं होता है-

- Ans 1. दूरी
 2. आकाश
 3. शेष
 4. हृदय

Question ID : 26433080948
Status : Not Answered
Chosen Option : --

Q.9 "इस विषय पर प्राचार्य ने क्या निर्णय किया?" इस वाक्य में क्रिया सम्बन्धी त्रुटि पहचानकर निम्नलिखित में से शुद्ध वाक्य का चयन कीजिए।

- Ans 1. इस विषय पर प्राचार्य ने क्या निर्णय प्रदान किया?
 2. इस विषय पर प्राचार्य ने क्या निर्णय दिया?
 3. इस विषय पर प्राचार्य ने क्या निर्णय कहा?
 4. इस विषय पर प्राचार्य ने क्या निर्णय लिया?

Question ID : 26433066972
Status : Not Answered
Chosen Option : --

Q.10 'भेट' के दो अर्थों में से एक अर्थ 'मुलाकात' है। दूसरे अर्थ से निम्न वाक्य को पूर्ण कीजिए।
अतिथि को _____ देकर सम्मानित किया गया।

- Ans
- 1. पुष्पगुच्छ
 - 2. एक लाख रुपए
 - 3. मानपत्र
 - 4. उपहार

Question ID : 26433079239
Status : Not Answered
Chosen Option : --

Q.11 'जो अपना भोजन स्वयं पकाता है' वाक्यांश के लिए उचित शब्द क्या होगा?

- Ans
- 1. स्वयंपाकी
 - 2. स्वयंभू
 - 3. स्वयंपाठी
 - 4. स्वयंसेवक

Question ID : 26433067065
Status : Not Answered
Chosen Option : --

Q.12 'मुसीबत में और मुसीबत आना' किस मुहावरे का अर्थ है?

- Ans
- 1. कंगाली में आटा गीला
 - 2. एक अनार सौ बीमार
 - 3. ओछे की प्रीति बालू की भीति
 - 4. ककड़ी चोर और फांसी की सजा

Question ID : 26433062607
Status : Not Answered
Chosen Option : --

Q.13 'रामू बेहद गरीब है।'
उपरोक्त वाक्य में रेखांकित शब्द के उपयुक्त पर्यायवाची शब्द का चयन कीजिए।

- Ans
- 1. निस्सार
 - 2. निर्धन
 - 3. निर्बाध
 - 4. निबद्ध

Question ID : 26433079719
Status : Not Answered
Chosen Option : --

Q.14 'संपन्न को सब सुख प्राप्त हो जाते हैं और _____ सदा तरसता ही रह जाता है।' 'संपन्न' के विलोम शब्द से उक्त वाक्य पूर्ण करें।

- Ans
- 1. वीर
 - 2. अपंग
 - 3. विपन्न
 - 4. शाही

Question ID : 26433080874
Status : Not Answered
Chosen Option : --

Q.15 वर्तनी की दृष्टि से शुद्ध वाक्य का चयन कीजिए-

- Ans
- 1. विनय चुसत न हो पर है समझदार।
 - 2. यदि वह घर पर मिलेगा तो मैं अवशय जाऊँगा।
 - 3. ज्यों ही मैं वहाँ पहुँचा त्यों ही घंटा बजा।
 - 4. वह मरणासन्न था, इसीलिए मैंने उसे छमा कर दिया।

Question ID : 26433062896
Status : Not Answered
Chosen Option : --

Comprehension:

निम्नलिखित गद्यांश में कुछ शब्दों को हटा दिया गया है। दिए गए विकल्पों की सहायता से रिक्त स्थानों की पूर्ति कीजिए। प्रत्येक संख्या के लिए सबसे उपयुक्त विकल्प का चयन करें।
सुख 1. _____ से उत्पन्न होता है। सुख जड़ता से भी उत्पन्न होता है। पुराने जमाने के लोग सुखी इसलिए थे, क्योंकि 2. _____ में उन्हें विश्वास था। उस जमाने के नमूने आज भी हैं, मगर वे 3. _____ में कम मिलते हैं। उनका जमघट गाँवों, कस्बों या छोटे-छोटे नगरों में है। इनके बहुत अधिक असंतुष्ट न होने का कारण यह है कि जो 4. _____ उनके बस में नहीं है, उन्हें वे अदृश्य की इच्छा पर छोड़कर निश्चित हो जाते हैं। इसी प्रकार सुखी वे लोग भी होते हैं, जो सच्चे अर्थों में जड़तावादी हैं, क्योंकि उनकी 5. _____ पर कठखोदी चिड़िया चोंच नहीं मारा करती, किंतु जो न जड़ता को स्वीकार करता है, न ईश्वर के अस्तित्व को तथा जो पूरे मन से न तो जड़ता का त्याग करता है और न ईश्वर के अस्तित्व को।

SubQuestion No : 16

Q.16 रिक्त स्थान 1 की पूर्ति के लिए सबसे उपयुक्त विकल्प का चयन करें।

- Ans
- 1. विश्वास
 - 2. अविश्वास
 - 3. शंका
 - 4. संदेह

Question ID : 264330110891
Status : Not Answered
Chosen Option : --

Comprehension:

निम्नलिखित गद्यांश में कुछ शब्दों को हटा दिया गया है। दिए गए विकल्पों की सहायता से रिक्त स्थानों की पूर्ति कीजिए। प्रत्येक संख्या के लिए सबसे उपयुक्त विकल्प का चयन करें।

सुख 1. _____ से उत्पन्न होता है। सुख जड़ता से भी उत्पन्न होता है। पुराने जमाने के लोग सुखी इसलिए थे, क्योंकि 2. _____ में उन्हें विश्वास था। उस जमाने के नमूने आज भी हैं, मगर वे 3. _____ में कम मिलते हैं। उनका जमघट गाँवों, कस्बों या छोटे-छोटे नगरों में है। इनके बहुत अधिक असंतुष्ट न होने का कारण यह है कि जो 4. _____ उनके बस में नहीं है, उन्हें वे अदृश्य की इच्छा पर छोड़कर निश्चित हो जाते हैं। इसी प्रकार सुखी वे लोग भी होते हैं, जो सच्चे अर्थों में जड़तावादी हैं, क्योंकि उनकी 5. _____ पर कठखोदी चिड़िया चोंच नहीं मारा करती, किंतु जो न जड़ता को स्वीकार करता है, न ईश्वर के अस्तित्व को तथा जो पूरे मन से न तो जड़ता का त्याग करता है और न ईश्वर के अस्तित्व को।

SubQuestion No : 17

Q.17 रिक्त स्थान 2 की पूर्ति के लिए सबसे उपयुक्त विकल्प का चयन करें।

- Ans 1. ईश्वर की सत्ता
 2. राज सत्ता
 3. मानव की सत्ता
 4. असुर की सत्ता

Question ID : 264330110892

Status : Not Answered

Chosen Option : --

Comprehension:

निम्नलिखित गद्यांश में कुछ शब्दों को हटा दिया गया है। दिए गए विकल्पों की सहायता से रिक्त स्थानों की पूर्ति कीजिए। प्रत्येक संख्या के लिए सबसे उपयुक्त विकल्प का चयन करें।

सुख 1. _____ से उत्पन्न होता है। सुख जड़ता से भी उत्पन्न होता है। पुराने जमाने के लोग सुखी इसलिए थे, क्योंकि 2. _____ में उन्हें विश्वास था। उस जमाने के नमूने आज भी हैं, मगर वे 3. _____ में कम मिलते हैं। उनका जमघट गाँवों, कस्बों या छोटे-छोटे नगरों में है। इनके बहुत अधिक असंतुष्ट न होने का कारण यह है कि जो 4. _____ उनके बस में नहीं है, उन्हें वे अदृश्य की इच्छा पर छोड़कर निश्चित हो जाते हैं। इसी प्रकार सुखी वे लोग भी होते हैं, जो सच्चे अर्थों में जड़तावादी हैं, क्योंकि उनकी 5. _____ पर कठखोदी चिड़िया चोंच नहीं मारा करती, किंतु जो न जड़ता को स्वीकार करता है, न ईश्वर के अस्तित्व को तथा जो पूरे मन से न तो जड़ता का त्याग करता है और न ईश्वर के अस्तित्व को।

SubQuestion No : 18

Q.18 रिक्त स्थान 3 की पूर्ति के लिए सबसे उपयुक्त विकल्प का चयन करें।

- Ans 1. महानगरों
 2. नुक्कड़ों
 3. गलियों
 4. गांवों

Question ID : 264330110893

Status : Not Answered

Chosen Option : --

Comprehension:

निम्नलिखित गद्यांश में कुछ शब्दों को हटा दिया गया है। दिए गए विकल्पों की सहायता से रिक्त स्थानों की पूर्ति कीजिए। प्रत्येक संख्या के लिए सबसे उपयुक्त विकल्प का चयन करें।

सुख 1. _____ से उत्पन्न होता है। सुख जड़ता से भी उत्पन्न होता है। पुराने जमाने के लोग सुखी इसलिए थे, क्योंकि 2. _____ में उन्हें विश्वास था। उस जमाने के नमूने आज भी हैं, मगर वे 3. _____ में कम मिलते हैं। उनका जमघट गाँवों, कस्बों या छोटे-छोटे नगरों में है। इनके बहुत अधिक असंतुष्ट न होने का कारण यह है कि जो 4. _____ उनके बस में नहीं है, उन्हें वे अदृश्य की इच्छा पर छोड़कर निश्चित हो जाते हैं। इसी प्रकार सुखी वे लोग भी होते हैं, जो सच्चे अर्थों में जड़तावादी हैं, क्योंकि उनकी 5. _____ पर कठखोदी चिड़िया चोंच नहीं मारा करती, किंतु जो न जड़ता को स्वीकार करता है, न ईश्वर के अस्तित्व को तथा जो पूरे मन से न तो जड़ता का त्याग करता है और न ईश्वर के अस्तित्व को।

SubQuestion No : 19

Q.19 रिक्त स्थान 4 की पूर्ति के लिए सबसे उपयुक्त विकल्प का चयन करें।

- Ans
- 1. सूखा
 - 2. चीज़
 - 3. कुसुम
 - 4. रचना

Question ID : 264330110894

Status : Not Answered

Chosen Option : --

Comprehension:

निम्नलिखित गद्यांश में कुछ शब्दों को हटा दिया गया है। दिए गए विकल्पों की सहायता से रिक्त स्थानों की पूर्ति कीजिए। प्रत्येक संख्या के लिए सबसे उपयुक्त विकल्प का चयन करें।

सुख 1. _____ से उत्पन्न होता है। सुख जड़ता से भी उत्पन्न होता है। पुराने जमाने के लोग सुखी इसलिए थे, क्योंकि 2. _____ में उन्हें विश्वास था। उस जमाने के नमूने आज भी हैं, मगर वे 3. _____ में कम मिलते हैं। उनका जमघट गाँवों, कस्बों या छोटे-छोटे नगरों में है। इनके बहुत अधिक असंतुष्ट न होने का कारण यह है कि जो 4. _____ उनके बस में नहीं है, उन्हें वे अदृश्य की इच्छा पर छोड़कर निश्चित हो जाते हैं। इसी प्रकार सुखी वे लोग भी होते हैं, जो सच्चे अर्थों में जड़तावादी हैं, क्योंकि उनकी 5. _____ पर कठखोदी चिड़िया चोंच नहीं मारा करती, किंतु जो न जड़ता को स्वीकार करता है, न ईश्वर के अस्तित्व को तथा जो पूरे मन से न तो जड़ता का त्याग करता है और न ईश्वर के अस्तित्व को।

SubQuestion No : 20

Q.20 रिक्त स्थान 5 की पूर्ति के लिए सबसे उपयुक्त विकल्प का चयन करें।

- Ans
- 1. आत्मा
 - 2. आँखें
 - 3. हाथ
 - 4. बालों

Question ID : 264330110895

Status : Not Answered

Chosen Option : --