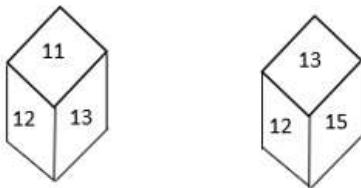


Constable GD in CAPFs SSF Rifleman GD in Assam Rifles and Sepoy in NCB Examination 2022

Roll Number	www.govtjobsalert.in
Candidate Name	www.govtjobsalert.in
Venue Name	iON Digital Zone iDZ 1 Patliputra
Exam Date	09/02/2023
Exam Time	9:00 AM - 10:00 AM
Subject	Constable GD Examination 2022

Section : Part-A-General Intelligence and Reasoning

Q.1 Two different positions of the same dice are shown. Find the number on the face opposite the face showing '11'.



- Ans
- 1. 12
 - 2. 14
 - 3. 16
 - 4. 15

Question ID : 26433089506

Status : Answered

Chosen Option : 4

Q.2 K, L, M, N, O and P are six friends sitting around a circular table facing opposite to the centre. M is sitting to the immediate left of O and immediate right of K. K is sitting to the immediate right of N. L is sitting to the immediate left of N. P is sitting between L and O. Who is sitting to the immediate right of P?

- Ans
- 1. L
 - 2. O
 - 3. P
 - 4. M

Question ID : 26433074610

Status : Answered

Chosen Option : 1

Q.3 'A + B' means 'A is the sister of B'.
'A - B' means 'A is the husband of B'.
'A × B' means 'A is the father of B'.
'A ÷ B' means 'A is the daughter of B'.
If $R + T \div P - M$, then how is P related to R?

- Ans
- 1. Daughter
 - 2. Father
 - 3. Mother
 - 4. Son

Question ID : 26433069174
Status : Answered
Chosen Option : 1

Q.4 Select the correct mirror image of the given figure when the mirror is placed at MN as shown below.

eDuCaTionAL



- Ans
- 1. eDucATionAL
 - 2. eDucATionAL
 - 3. eDucATionAL
 - 4. eDucATionAL

Question ID : 26433085552
Status : Answered
Chosen Option : 1

Q.5 Select the option that is related to the fifth number in the same way as the second number is related to the first number and the fourth number is related to the third number.

441 : 7 :: 225 : 5 :: 729 : ?

- Ans
- 1. 9
 - 2. 3
 - 3. 6
 - 4. 12

Question ID : 26433069408
Status : Answered
Chosen Option : 1

Q.6 Seven people, M, N, O, P, Q, R and S are sitting in a straight row, facing north. P is sitting third to the right of M. Only four people sit between Q and S. O is sitting third to the right of Q. R is sitting to the immediate left of Q. Who is sitting at the centre of the row?

- Ans
- 1. Q
 - 2. N
 - 3. M
 - 4. O

Question ID : 26433068281
Status : Answered
Chosen Option : 2

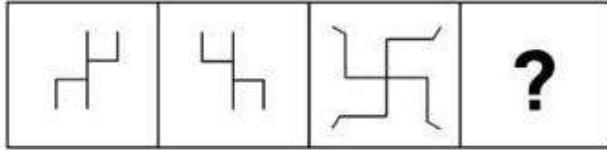
Q.7 Which of the following numbers will replace the question mark (?) in the given series?
216, 343, ?, 729, 1000

- Ans
- 1. 512
 - 2. 470
 - 3. 525
 - 4. 624

Question ID : 26433068093
Status : Answered
Chosen Option : 1

WWW.GOVtJOBSAlert.in

Q.8 Find the options which is related to the third figure in the same manner as second figure is related with the first figure.
(First figure is the leftmost figure.)



Ans

- 1.
- 2.
- 3.
- 4.

Question ID : 26433078859
Status : Answered
Chosen Option : 2

Q.9 In a certain code language, 'HOUSE' is written as 'JUWYG' and 'BEARD' is written as 'DKCXF'. How will 'CRAVE' be written in the same code language?

- 1. EXCBG
- 2. ANDAG
- 3. DMCEG
- 4. FLBEG

Question ID : 26433079488
Status : Answered
Chosen Option : 1

Q.10 Which letter-cluster will replace the question mark (?) to complete the given series?
CEGI, JLNP, QSUW, XZBD, ?

- 1. EGIK
- 2. EGKI
- 3. EDHI
- 4. EHIK

Question ID : 26433067720
Status : Answered
Chosen Option : 1

Q.11 Which option represents the correct order of the given words as they would appear in the English dictionary?

- 1 finish
- 2 fight
- 3 figure
- 4 fire
- 5 finger

- Ans
- 1. 2,4,5,3,1
 - 2. 4,3,2,5,1
 - 3. 3,2,4,5,1
 - 4. 2,3,5,1,4

Question ID : 26433069292

Status : Answered

Chosen Option : 4

Q.12 In a code language, 'make time' is coded as 'bo ho', 'time never stops' is coded as 'ho ru du', 'she stops work' is coded as 'vu du ya', and 'never make mistakes' is coded as 'ru bo tu'. What is the code for the word 'never'?

- Ans
- 1. ho
 - 2. ya
 - 3. bo
 - 4. ru

Question ID : 26433069468

Status : Answered

Chosen Option : 4

Q.13 Read the given statements and conclusions carefully. Assuming that the information given in the statements is true, even if it appears to be at variance with commonly known facts, decide which of the given conclusions logically follow(s) from the statements.

Statements:

- All cats are dogs.
- Some dogs are elephants
- All elephants are camels.

Conclusions:

- I. All cats are elephants.
- II. Some cats are elephants.
- III. Some elephants are dogs
- IV. Some camels are dogs.

- Ans
- 1. None of the conclusions follow
 - 2. Conclusion III and IV follow
 - 3. Only conclusion II follows
 - 4. Only conclusion I follows

Question ID : 26433082663

Status : Answered

Chosen Option : 2

Q.14 Which two numbers(not digits), from the given options, should be interchanged to make the given equation correct?
 $(60 \div 2) \times 3 - 100 + 400 = 560$

- Ans 1. 400 and 60
 2. 60 and 100
 3. 400 and 560
 4. 100 and 560

Question ID : 26433082482
Status : Answered
Chosen Option : 1

Q.15 Which of the following numbers will replace the question mark (?) in the given series?
5, 11, 21, ?, 85, 171

- Ans 1. 43
 2. 36
 3. 59
 4. 55

Question ID : 26433076741
Status : Answered
Chosen Option : 1

Q.16 Which of the following terms will replace the question mark (?) in the given series?
UWAR, OUEP, ISIN, EQOL, ?

- Ans 1. AOUJ
 2. AOVK
 3. BOUK
 4. BOVJ

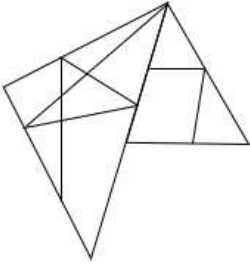
Question ID : 26433068311
Status : Answered
Chosen Option : 1

Q.17 Select the option that is related to the fifth letter-cluster in the same way as the second letter-cluster is related to the first letter-cluster and the fourth letter-cluster is related to the third letter-cluster.
CERAMIC : ACPYKGA :: GLASSES : EJYQCQ :: PLASTIC : ?

- Ans 1. NJRGAYQ
 2. NJYQRGA
 3. NYQRGAJ
 4. NGAJYQR

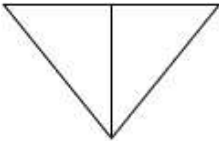
Question ID : 26433070324
Status : Answered
Chosen Option : 2

Q.18 Select the option figure which is embedded in the given figure. (Rotation is NOT allowed)

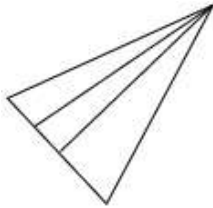


Ans

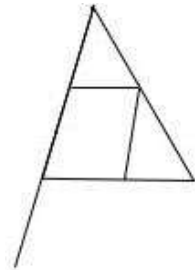
✗ 1.



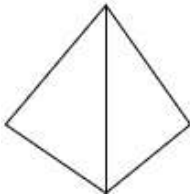
✗ 2.



✓ 3.



✗ 4.



Question ID : 26433069346

Status : Answered

Chosen Option : 3

Q.19 Which two signs should be interchanged to make the below equation mathematically correct?

$$24 + 18 \times 40 - 10 \div 20 = 76$$

Ans ✗ 1. - and +

✗ 2. + and ÷

✓ 3. ÷ and -

✗ 4. + and ×

Question ID : 264330117502

Status : Answered

Chosen Option : 3

Q.20 Select the option that is related to the fifth term in the same way as the second term is related to the first term and fourth term is related to the third term.
RAYMOND : MYARDNO :: COMMAND : MMOCDNA :: COMPARE : ?

- Ans
- 1. ERAPMOC
 - 2. AECORMP
 - 3. PARECOM
 - 4. PMOCERA

Question ID : 26433067266
Status : Answered
Chosen Option : 4

Section : Part-B-General Knowledge and General awareness

Q.1 The main items of _____ expenditure are interest payments, defence services, subsidies.

- Ans
- 1. waste
 - 2. plan
 - 3. household
 - 4. non-plan

Question ID : 264330115289
Status : Answered
Chosen Option : 4

Q.2 Which classical dance generally narrates the story of the feminine form of Vishnu?

- Ans
- 1. Sattriya
 - 2. Kathak
 - 3. Manipuri
 - 4. Mohiniattam

Question ID : 26433072920
Status : Answered
Chosen Option : 2

Q.3 India has a parliamentary form of government which is a feature borrowed from the _____ Constitution.

- Ans
- 1. Britain
 - 2. South Africa
 - 3. United States of America
 - 4. Australia

Question ID : 26433089178
Status : Answered
Chosen Option : 1

Q.4 Savitribai, together with her husband Jyotirao Phule, founded one of India's first girls' schools in Pune, at Bhide Wada in _____.

- Ans
- 1. 1855
 - 2. 1844
 - 3. 1857
 - 4. 1848

Question ID : 26433089886
Status : Answered
Chosen Option : 1

Q.5 Except for the deep sea hydrothermal ecosystem, sun is the only source of energy for all ecosystems on Earth. What comes next in the energy food chain?

- Ans
- 1. herbivores
 - 2. man
 - 3. plants
 - 4. carnivores

Question ID : 264330115196
Status : Answered
Chosen Option : 3

Q.6 In India, in the sphere of law making, a Bill does not become an Act unless it receives the assent of the _____.

- Ans
- 1. Attorney General
 - 2. Prime Minister
 - 3. Vice President
 - 4. President

Question ID : 26433086846
Status : Answered
Chosen Option : 4

Q.7 Which sector of Central Reserve Police Force will be headed by Inspector General Seema Dhundiya as announced in November 2022?

- Ans
- 1. Bihar
 - 2. Jharkhand
 - 3. Uttar Pradesh
 - 4. Rajasthan

Question ID : 264330114992
Status : Answered
Chosen Option : 1

Q.8 In _____, Babur defeated Ibrahim Lodi at Panipat.

- Ans
- 1. 1528
 - 2. 1532
 - 3. 1530
 - 4. 1526

Question ID : 26433089190
Status : Answered
Chosen Option : 4

Q.9 The Food Corporation of India procures foodgrains from the farmers at the government announced _____.

- Ans
- 1. maximum retail price
 - 2. competitive price
 - 3. minimum support price
 - 4. discounted price

Question ID : 264330115536
Status : Answered
Chosen Option : 3

Q.10 What is the chemical formula of Propyne?

- Ans
- 1. C_4H_5
 - 2. C_3H_4
 - 3. C_4H_4
 - 4. C_3H_5

Question ID : 264330115158
Status : Not Answered
Chosen Option : --

Q.11 An Act to protect children from offences of sexual assault, sexual harassment and pornography and provide for establishment of Special Courts, referred as _____ (POCSO).

- Ans
- 1. Protection of Children from Sexual Offences Act, 2012
 - 2. Protection of Children from Sexual Offences Act, 2013
 - 3. Prevention of Children from Sexual Offences Act, 2012
 - 4. Protection of Child from Sexual Ordeal Act, 2012

Question ID : 264330116214
Status : Answered
Chosen Option : 1

Q.12 Which of the following scientists is known as the father of the Green revolution in India?

- Ans
- 1. Salim Ali
 - 2. Meghnad Saha
 - 3. P C Mahalanobis
 - 4. M.S. Swaminathan

Question ID : 264330116148
Status : Answered
Chosen Option : 4

Q.13 Indian athlete Somdev Devvarman is associated with, which of the following sports?

- Ans
- 1. Table Tennis
 - 2. Lawn Tennis
 - 3. Hockey
 - 4. Football

Question ID : 264330116282
Status : Not Answered
Chosen Option : --

Q.14 Nearly _____ countries of the world are currently members of the WTO. (as on June 2014)

- Ans
- 1. 225
 - 2. 198
 - 3. 160
 - 4. 128

Question ID : 264330115387
Status : Answered
Chosen Option : 2

Q.15 According to NITI Aayog's Multidimensional Poverty Index (MPI) 2021, which among the following was the poorest state in the country?

- Ans
- 1. Bihar
 - 2. Jharkhand
 - 3. Uttar Pradesh
 - 4. Punjab

Question ID : 264330116068
Status : Answered
Chosen Option : 1

Q.16 Holi is the festival of colours, celebrated in the Hindu month of _____.

- Ans
- 1. Ashvin
 - 2. Kartik
 - 3. Chaitra
 - 4. Phalgun

Question ID : 264330115099
Status : Answered
Chosen Option : 4

Q.17 As of November 2022, who among the following is the Governor of Maharashtra, India?

- Ans
- 1. Bhagat Singh Koshyari
 - 2. Arif Mohammed Khan
 - 3. Ganesh Lal Mathur
 - 4. Mangubhai Chaganbhai Patel

Question ID : 264330114923
Status : Answered
Chosen Option : 1

Q.18 Which place's distribution of pressure influences the weather conditions over India in winter?

- Ans
- 1. Antarctica
 - 2. Central and Western Asia
 - 3. South East Asia
 - 4. North America

Question ID : 26433086706
Status : Answered
Chosen Option : 2

Q.19 'Kalarathnam' from Kerala Kalamandalam 2016 and 'Kalaasree' 2011 from the Kerala Sangeetha Natak Akademi was awarded to_____.

- Ans
- 1. Jatin Goswami
 - 2. Anuradha Pandey
 - 3. Sunanda Nair
 - 4. M.R Krishnamurthy

Question ID : 264330115868
Status : Not Answered
Chosen Option : --

Q.20 2022 Paralympics winter games was held in _____.

- Ans 1. Russia
 2. China
 3. India
 4. Japan

Question ID : 264330115918
Status : Answered
Chosen Option : 2

Section : Part-C-Elementary Mathematics

Q.1 If the slant height and radius of a cone are 12 cm and 7 cm, respectively, then find the total surface area.

- Ans 1. 841 cm^2
 2. 481 cm^2
 3. 418 cm^2
 4. 448 cm^2

Question ID : 26433073047
Status : Answered
Chosen Option : 3

Q.2 A shopkeeper announces a discount of 18% on every item in his store. What price should a customer pay for an item of Rs.5,583? (in Rs., rounded off to the nearest integer)

- Ans 1. 4578
 2. 3980
 3. 4275
 4. 3650

Question ID : 26433075760
Status : Answered
Chosen Option : 1

Q.3 The population of a town is 64,000 which grows by $\frac{1}{8}$ th of its current population every year. What will be the population after two years?

- Ans 1. 81000
 2. 78000
 3. 74000
 4. 72000

Question ID : 26433076040
Status : Answered
Chosen Option : 1

Q.4 Find the principal if the interest compounded at the rate of 12% per annum, compounding annually for 2 years is Rs.1,908.

- Ans
- 1. Rs.6,500
 - 2. Rs.5,400
 - 3. Rs.7,500
 - 4. Rs.4,500

Question ID : 26433066315
Status : Answered
Chosen Option : 3

Q.5 What is the radius of the base of a cylindrical container of volume $2,640 \text{ cm}^3$ with height 21cm?

(Take $\pi = \frac{22}{7}$)

- Ans
- 1. 1.64 cm
 - 2. 5.24 cm
 - 3. 2.46 cm
 - 4. 6.32 cm

Question ID : 26433076255
Status : Answered
Chosen Option : 4

Q.6 Sum of 2 natural numbers is 140 and their HCF and LCM are 28 and 168 respectively. Find the difference between the numbers.

- Ans
- 1. 21
 - 2. 14
 - 3. 7
 - 4. 28

Question ID : 264330116640
Status : Not Answered
Chosen Option : --

Q.7 Find the fourth proportional of $(a^4 - b^4)$, $(a^2 - ab)$ and $(a^2 + b^2)$.

- Ans
- 1. $\frac{a}{a+b}$
 - 2. $(a-b)$
 - 3. $(a+b)$
 - 4. $\frac{b}{a+b}$

Question ID : 26433075554
Status : Answered
Chosen Option : 4

Q.8 Akshit is selling a suitcase marked at Rs.5,000 by offering a 10% discount, and further offers a 10% discount if the payment is made in cash. A customer bought the suitcase from Akshit and paid him in cash. How much amount (in Rs.) did he pay to Akshit?

- Ans
- 1. 4,150
 - 2. 4,200
 - 3. 4,500
 - 4. 4,050

Question ID : 26433080380
Status : Answered
Chosen Option : 4

Q.9 A milkman bought 90 litres of milk for Rs.1,630 and added 15 litres of water. If he sells it at Rs.19.00 per litre, his profit percentage will be:

- Ans
- 1. $22\frac{64}{163}\%$
 - 2. $22\frac{14}{163}\%$
 - 3. $12\frac{64}{163}\%$
 - 4. $20\frac{64}{163}\%$

Question ID : 26433074988
Status : Answered
Chosen Option : 1

Q.10 What is the percentage loss when the cost price and selling price of an article are in the ratio of 5 : 3?

- Ans
- 1. 60 percent
 - 2. 30 percent
 - 3. 40 percent
 - 4. 50 percent

Question ID : 26433079857
Status : Answered
Chosen Option : 3

Q.11 Ranu can finish a piece of work in 10 days while Ruby can finish the same work in 15 days. In how many days the whole work will be finished. If they work on alternate days, starting with Ranu?

- Ans
- 1. 13
 - 2. 12
 - 3. 11
 - 4. 14

Question ID : 26433080342
Status : Answered
Chosen Option : 2

Q.12 The fourth proportional to $a^3 + a^2b + ab^2$, $a + b$ and $a^2 + ab + b^2$ is:

- Ans
- 1. $\frac{b}{a+b}$
 - 2. $1 + \frac{a}{b}$
 - 3. $\frac{a}{a+b}$
 - 4. $1 + \frac{b}{a}$

Question ID : 26433081580
Status : Answered
Chosen Option : 2

Q.13 यदि y का $x\%$, 90 के $\frac{2}{3}$ के बराबर है, तो xy का मान ----- है।

- Ans
- 1. 100
 - 2. 6000
 - 3. 60
 - 4. 90

Question ID : 26433073004
Status : Answered
Chosen Option : 2

Q.14 P takes 12 minutes to complete one round of a circular track and R takes 18 minutes to complete the same round. If they start at the same time from the same point in the same direction at 12:30 p.m., then at which of the following times will they meet at the starting point on the same day?

- Ans
- 1. 2:08 p.m.
 - 2. 2:18 p.m.
 - 3. 2:38 p.m.
 - 4. 2:28 p.m.

Question ID : 26433071264
Status : Answered
Chosen Option : 2

Q.15 A car takes 5 hours to cover a distance, if its speed is 30 km/h. What should be its speed to cover the same distance in 2.5 hours?

- Ans
- 1. 40 km/h
 - 2. 60 km/h
 - 3. 70 km/h
 - 4. 50 km/h

Question ID : 26433066366
Status : Answered
Chosen Option : 2

Q.16 If the average marks of two batches of 45 and 50 students, respectively, are 78 and 65, then the average marks of all the students are:

- Ans
- 1. $\frac{1252}{13}$
 - 2. $\frac{1352}{19}$
 - 3. $\frac{1052}{13}$
 - 4. $\frac{1152}{19}$

Question ID : 26433080100
Status : Answered
Chosen Option : 2

Q.17 If 'a' and 'b' are prime numbers, which of the following CANNOT be the sum of 'a' and 'b'? (Where a and b are distinct prime numbers)

- Ans
- 1. 6
 - 2. 10
 - 3. 28
 - 4. 14

Question ID : 26433082609
Status : Answered
Chosen Option : 3

Q.18 Pramod, Akhil, and Raman can do a piece of work in 14 days. Akhil and Raman can do the same work in 77 days. Find the number of days in which Pramod can complete the same work.

- Ans
- 1. 154/9 days
 - 2. 177/9 days
 - 3. 164/9 days
 - 4. 144/9 days

Question ID : 264330116898
Status : Answered
Chosen Option : 1

Q.19 The average age of husband and wife is 24 years. The age of their son is $\frac{1}{9}$ th of the age of the husband. The wife is 6 years younger to the husband. Find the average age of all three members of family.

- Ans
- 1. 16 years
 - 2. 15 years
 - 3. 18 years
 - 4. 17 years

Question ID : 264330116696
Status : Answered
Chosen Option : 4

Q.20 Due to leakage in a tank, there are 220 liters of water left in the tank which originally held 240 liters. What is percent loss of water?

- Ans
- 1. 6.11 percent
 - 2. 8.33 percent
 - 3. 5.8 percent
 - 4. 7.4 percent

Question ID : 264330116818
Status : Answered
Chosen Option : 2

Section : Part-D-English

Q.1 Select the most appropriate synonym of the word given in brackets to fill in the blank. Their relationship is quite _____ (cordial).

- Ans
- 1. hostile
 - 2. formal
 - 3. warm
 - 4. artful

Question ID : 26433084719
Status : Answered
Chosen Option : 2

Q.2 Select the most appropriate ANTONYM of the given word.

Progressive

- Ans
- 1. Conservative
 - 2. Scanty
 - 3. Repeated
 - 4. Moving

Question ID : 26433072666
Status : Answered
Chosen Option : 1

Q.3 Select the most appropriate synonym of the given word.

Scared

- Ans 1. Reassured
 2. Calm
 3. Confident
 4. Frightened

Question ID : 26433073689
Status : Answered
Chosen Option : 4

Q.4 Select the most appropriate ANTONYM of the given word.

Frankness

- Ans 1. Transparency
 2. Deception
 3. Openness
 4. Strangeness

Question ID : 26433073800
Status : Answered
Chosen Option : 4

Q.5 Select the most appropriate meaning of the given idiom.

Pour out one's heart

- Ans 1. To challenge
 2. To create a record
 3. To ask for something
 4. To express openly

Question ID : 26433073704
Status : Answered
Chosen Option : 4

Q.6 Select the most appropriate meaning of the given idiom.

A chip on one's shoulder

- Ans 1. An attitude that leads one to become easily angered
 2. Being appreciated
 3. Huge achievement
 4. Injured shoulder

Question ID : 26433072437
Status : Answered
Chosen Option : 2

Q.7 Select the most appropriate option that can substitute the underlined segment in the given sentence.

The manager's behaviour was the quintessence of professionalism.

- Ans
- 1. insignificant appearance
 - 2. apparent display
 - 3. perfect example
 - 4. volatile aspect

Question ID : 26433099877
Status : Answered
Chosen Option : 3

Q.8 Select the INCORRECTLY spelt word.

- Ans
- 1. Electrician
 - 2. Artisen
 - 3. Technician
 - 4. Plumber

Question ID : 26433073498
Status : Answered
Chosen Option : 2

Q.9 Select the most appropriate homonym of the given word.

Flea

- Ans
- 1. Flee
 - 2. Fleece
 - 3. Flew
 - 4. Fly

Question ID : 26433086349
Status : Answered
Chosen Option : 3

Q.10 Select the most appropriate ANTONYM of the given word.

Candid

- Ans
- 1. Honest
 - 2. Blunt
 - 3. Tactful
 - 4. Simple

Question ID : 26433085198
Status : Answered
Chosen Option : 3

Q.11 Select the most appropriate word segment for the underlined word in the given sentence.

The wooden miniature that was being shown as the show stopper in the exhibition appealed to my father.

- Ans
- 1. on advertisement
 - 2. on activity
 - 3. on display
 - 4. on arrangement

Question ID : 26433088311
Status : Answered
Chosen Option : 3

Q.12 Parts of the following sentence have been given as options. One of them may contain an error. Select the part that contains the error from the given options. If you don't find any error, mark 'No error' as your answer.

An old man sit down and read his book on his lush green lawn.

- Ans
- 1. An old man sit down
 - 2. and read his book
 - 3. on his lush green lawn
 - 4. No error

Question ID : 26433092134
Status : Answered
Chosen Option : 1

Q.13 Parts of the given sentence have been given as options. One of them contains a spelling error. Select the option that rectifies the error.

Participating in intrnships is a great way to get a taste of changes taking place in the industry.

- Ans
- 1. takeng
 - 2. internships
 - 3. particepating
 - 4. indastry

Question ID : 26433072042
Status : Answered
Chosen Option : 2

Q.14 In the following passage, some words have been deleted. Read the passage carefully and select the most appropriate option to fill in the blanks.

We all get goose bumps which are a reflex reaction by a human (1)_____ to a sudden drop in temperatures or feelings of panic, anger or extreme fear. They are also (2)_____ by itty-bitty muscles in our hair follicles.

- Ans
- 1. figure; generated
 - 2. shape; constructed
 - 3. form; fabricated
 - 4. body; created

Question ID : 26433084743
Status : Answered
Chosen Option : 4

Q.15 Select the most appropriate synonym of the given word.

Bliss

- Ans** 1. Pain
 2. Bane
 3. Joy
 4. Educated

Question ID : 26433072184
Status : Answered
Chosen Option : 3

Comprehension:

In the following passage, some words have been deleted. Read the passage carefully and select the most appropriate option to fill in each blank.

Everybody (1)_____ of age, shape, size and ability needs to become more active every day. We should all be moving more. Did you know that an active life is (2)_____ for physical and mental health and well-being?
Regular physical activity can help (3)_____ our risk of cancer and type 2 diabetes, and conditions like obesity, hypertension and depression. Being active at every age (4)_____ the quality of life and everyone's chances of remaining healthy and (5)_____.

SubQuestion No : 16

Q.16 Select the most appropriate option to fill in blank number 1.

- Ans** 1. regardless
 2. no matter
 3. senseless
 4. careless

Question ID : 26433088174
Status : Answered
Chosen Option : 1

Comprehension:

In the following passage, some words have been deleted. Read the passage carefully and select the most appropriate option to fill in each blank.

Everybody (1)_____ of age, shape, size and ability needs to become more active every day. We should all be moving more. Did you know that an active life is (2)_____ for physical and mental health and well-being?
Regular physical activity can help (3)_____ our risk of cancer and type 2 diabetes, and conditions like obesity, hypertension and depression. Being active at every age (4)_____ the quality of life and everyone's chances of remaining healthy and (5)_____.

SubQuestion No : 17

Q.17 Select the most appropriate option to fill in blank number 2.

- Ans** 1. essential
 2. primary
 3. organic
 4. particular

Question ID : 26433088175
Status : Answered
Chosen Option : 1

Comprehension:

In the following passage, some words have been deleted. Read the passage carefully and select the most appropriate option to fill in each blank.

Everybody (1)_____ of age, shape, size and ability needs to become more active every day. We should all be moving more. Did you know that an active life is (2)_____ for physical and mental health and well-being?

Regular physical activity can help (3)_____ our risk of cancer and type 2 diabetes, and conditions like obesity, hypertension and depression. Being active at every age (4)_____ the quality of life and everyone's chances of remaining healthy and (5)_____.

SubQuestion No : 18

Q.18 Select the most appropriate option to fill in blank number 3.

- Ans 1. change
 2. decrease
 3. increase
 4. interpolate

Question ID : 26433088176

Status : Answered

Chosen Option : 2

Comprehension:

In the following passage, some words have been deleted. Read the passage carefully and select the most appropriate option to fill in each blank.

Everybody (1)_____ of age, shape, size and ability needs to become more active every day. We should all be moving more. Did you know that an active life is (2)_____ for physical and mental health and well-being?

Regular physical activity can help (3)_____ our risk of cancer and type 2 diabetes, and conditions like obesity, hypertension and depression. Being active at every age (4)_____ the quality of life and everyone's chances of remaining healthy and (5)_____.

SubQuestion No : 19

Q.19 Select the most appropriate option to fill in blank number 4.

- Ans 1. manages
 2. grows
 3. increases
 4. decreases

Question ID : 26433088177

Status : Answered

Chosen Option : 3

Comprehension:

In the following passage, some words have been deleted. Read the passage carefully and select the most appropriate option to fill in each blank.

Everybody (1)_____ of age, shape, size and ability needs to become more active every day. We should all be moving more. Did you know that an active life is (2)_____ for physical and mental health and well-being?

Regular physical activity can help (3)_____ our risk of cancer and type 2 diabetes, and conditions like obesity, hypertension and depression. Being active at every age (4)_____ the quality of life and everyone's chances of remaining healthy and (5)_____.

SubQuestion No : 20

Q.20 Select the most appropriate option to fill in blank number 5.

- Ans 1. automatic
 2. adamant
 3. independent
 4. awake

Question ID : 26433088178
Status : Answered
Chosen Option : 3

Section : Part-D-Hindi

Q.1 निम्न में से किरण के पर्यायवाची शब्द का चयन कीजिए।

- Ans 1. आभा
 2. धूमकेतु
 3. प्रभा
 4. ज्योति

Question ID : 26433074414
Status : Not Answered
Chosen Option : --

Q.2 निम्नलिखित विकल्पों में से किस एक वाक्य में क्रिया सम्बन्धी अशुद्धि है?

- Ans 1. माँ बच्चे को खाना खिलाती है।
 2. बच्चा खाना खाता है।
 3. कृपया एक गिलास पानी बुझाइए।
 4. बच्चा पढ़ता है।

Question ID : 26433091234
Status : Not Answered
Chosen Option : --

Q.3 निम्नलिखित वाक्यांश के लिए उपयुक्त सार्थक शब्द क्या होगा?
वह स्त्री जो वेदों का ज्ञान रखती हो

- Ans 1. विदुषी
 2. विदूषक
 3. ग्यात्ति
 4. ज्ञानी

Question ID : 26433073312
Status : Not Answered
Chosen Option : --

Q.4 निम्नलिखित मुहावरे के सही अर्थ का चयन विकल्पों में से कीजिए।
पैरों में मेहंदी लगाकर बैठना

- Ans 1. आलस्य और लाचारी वश घर में पड़े रहना
 2. स्वावलंबी होना
 3. लाभ का अवसर उठाना
 4. मृत्यु को प्राप्त करना

Question ID : 26433070009
Status : Not Answered
Chosen Option : --

Q.5 निम्नलिखित विकल्पों में से 'चुल्लू-भर पानी में डूब मरना' मुहावरे का अर्थ क्या है?

- Ans 1. शर्म या ग्लानि अनुभव करना
 2. असफल साबित होना
 3. गर्व महसूस करना
 4. हताश होना

Question ID : 26433062553
Status : Not Answered
Chosen Option : --

Q.6 संज्ञा या विशेषण के मेल से बनने वाली क्रिया प्रेरणार्थक क्रिया है। रेखांकित पद को बदल कर शुद्ध कीजिए।

- Ans 1. पूर्वकालिक क्रिया
 2. क्रियार्थक संज्ञा
 3. नामबोधक क्रिया
 4. सहायक क्रिया

Question ID : 26433063041
Status : Not Answered
Chosen Option : --

Q.7 रेखांकित शब्द-समूह के लिए सर्वाधिक उपयुक्त विकल्प चुनें।
मेरा घर पर्वत के ऊपर की समतल भूमि पर है।

- Ans
- 1. तराई
 - 2. अधित्यका
 - 3. घाटी
 - 4. उपत्यका

Question ID : 26433062284
Status : Not Answered
Chosen Option : --

Q.8 'सूर्योदय _____।' उपर्युक्त वाक्य में रिक्त स्थान के लिए उपयुक्त विकल्प निम्न में से क्या होगा?

- Ans
- 1. का अर्थ सूर्य का उदय होना होता है
 - 2. का अर्थ सूर्य का छिपना होता है
 - 3. का अर्थ सूर्य की गर्मी से होता है
 - 4. का अर्थ सूर्य का प्रकाश होता है

Question ID : 26433067038
Status : Not Answered
Chosen Option : --

Q.9 निम्न वाक्य को शुद्ध कीजिए।
तुम इस बार अधिक परिश्रम किए हो, इसलिए सफलता का अधिक आसा है।

- Ans
- 1. तुमने बहुत परिश्रम किया है, इसलिए सफलता का आशा है।
 - 2. तुमने इस बार अधिक परिश्रम के कारण सफलता मिलेगी।
 - 3. तुम अधिक परिश्रम किए हो, अतः सफलता की अधिक आशा है।
 - 4. तुमने इस बार अधिक परिश्रम किया है, इसलिए सफलता की आशा है।

Question ID : 26433063078
Status : Not Answered
Chosen Option : --

Q.10 'ईश्वर के प्रति प्रगाढ़ एवं स्थायी आस्था का भाव _____ कहलाता है।' उपरोक्त वाक्य में रिक्त स्थान पर किस शब्द का प्रयोग सर्वाधिक उपयुक्त होगा?

- Ans
- 1. भक्ति
 - 2. मुक्ति
 - 3. विरक्ति
 - 4. आसक्ति

Question ID : 26433067006
Status : Not Answered
Chosen Option : --

Q.11 निम्नलिखित वाक्यांश के लिए सार्थक शब्द का चयन कीजिए।
जिसकी उपमा न हो

- Ans 1. अकथनीय
 2. उपमान
 3. उपमेय
 4. अनुपम

Question ID : 26433069979
Status : Not Answered
Chosen Option : --

Q.12 निम्नलिखित वाक्य में अशुद्धि पहचानें।
हमें हमेशा सच का साथ देना चाहिए।

- Ans 1. हमें
 2. चाहिए
 3. हमेशा
 4. साथ

Question ID : 26433066824
Status : Not Answered
Chosen Option : --

Q.13 गोलियों की बाढ़ हो गई।
उपरोक्त वाक्य में रेखांकित शब्द के स्थान पर उचित शब्द क्या होगा?

- Ans 1. घटा
 2. समुद्र
 3. बहार
 4. बौछार

Question ID : 26433062780
Status : Not Answered
Chosen Option : --

Q.14 निम्न वाक्य में रेखांकित शब्द के विलोम शब्द से रिक्त स्थान की पूर्ति कीजिए।
राग और _____ दोनों विपरीत भाव हैं।

- Ans 1. द्वेष
 2. रहित
 3. रागी
 4. सराग

Question ID : 26433085075
Status : Not Answered
Chosen Option : --

Q.15 आकाश में बिजली चमक रही है।
उपरोक्त वाक्य में रेखांकित शब्द के उचित पर्यायवाची शब्द का चयन विकल्पों में से कीजिए।

- Ans
- 1. खनक
 - 2. वासव
 - 3. चपला
 - 4. धनद

Question ID : 26433079623
Status : Not Answered
Chosen Option : --

Comprehension:

निम्नलिखित गद्यांश में कुछ शब्दों को हटा दिया गया है। दिए गए विकल्पों की सहायता से रिक्त स्थानों की पूर्ति कीजिए। प्रत्येक संख्या के लिए सबसे उपयुक्त विकल्प का चयन कीजिए।
मनुष्य की पहचान उसके आचरण और 1. _____ से होती है। सात्विक व्यवहार तथा धर्म, नीति आदि की 2. _____ से किया जाने वाला अच्छा और शुभ आचरण 'सदाचार' है। इसके ठीक 3. _____ 'भ्रष्टाचार' शब्द है। जो मनुष्य दूषित और 4. _____ आचरण करता हो, वह भ्रष्टाचारी कहलाता है। भ्रष्टाचार एक प्रकार का 5. _____ विकार है।

SubQuestion No : 16

Q.16 रिक्त स्थान 1 की पूर्ति के लिए सबसे उपयुक्त विकल्प का चयन कीजिए।

- Ans
- 1. मित्र
 - 2. परिवार
 - 3. व्यवहार
 - 4. परमार्थ

Question ID : 264330111035
Status : Not Answered
Chosen Option : --

Comprehension:

निम्नलिखित गद्यांश में कुछ शब्दों को हटा दिया गया है। दिए गए विकल्पों की सहायता से रिक्त स्थानों की पूर्ति कीजिए। प्रत्येक संख्या के लिए सबसे उपयुक्त विकल्प का चयन कीजिए।
मनुष्य की पहचान उसके आचरण और 1. _____ से होती है। सात्विक व्यवहार तथा धर्म, नीति आदि की 2. _____ से किया जाने वाला अच्छा और शुभ आचरण 'सदाचार' है। इसके ठीक 3. _____ 'भ्रष्टाचार' शब्द है। जो मनुष्य दूषित और 4. _____ आचरण करता हो, वह भ्रष्टाचारी कहलाता है। भ्रष्टाचार एक प्रकार का 5. _____ विकार है।

SubQuestion No : 17

Q.17 रिक्त स्थान 2 की पूर्ति के लिए सबसे उपयुक्त विकल्प का चयन कीजिए।

- Ans
- 1. संपत्ति
 - 2. सृष्टि
 - 3. दृष्टि
 - 4. कमी

Question ID : 264330111036
Status : Not Answered
Chosen Option : --

Comprehension:

निम्नलिखित गद्यांश में कुछ शब्दों को हटा दिया गया है। दिए गए विकल्पों की सहायता से रिक्त स्थानों की पूर्ति कीजिए। प्रत्येक संख्या के लिए सबसे उपयुक्त विकल्प का चयन कीजिए।
मनुष्य की पहचान उसके आचरण और 1. _____ से होती है। सात्विक व्यवहार तथा धर्म, नीति आदि की 2. _____ से किया जाने वाला अच्छा और शुभ आचरण 'सदाचार' है। इसके ठीक 3. _____ 'भ्रष्टाचार' शब्द है। जो मनुष्य दूषित और 4. _____ आचरण करता हो, वह भ्रष्टाचारी कहलाता है। भ्रष्टाचार एक प्रकार का 5. _____ विकार है।

SubQuestion No : 18

Q.18 रिक्त स्थान 3 की पूर्ति के लिए सबसे उपयुक्त विकल्प का चयन कीजिए।

- Ans 1. विपरीत
 2. अच्छी
 3. मिली
 4. साथ

Question ID : 264330111037
Status : Not Answered
Chosen Option : --

Comprehension:

निम्नलिखित गद्यांश में कुछ शब्दों को हटा दिया गया है। दिए गए विकल्पों की सहायता से रिक्त स्थानों की पूर्ति कीजिए। प्रत्येक संख्या के लिए सबसे उपयुक्त विकल्प का चयन कीजिए।
मनुष्य की पहचान उसके आचरण और 1. _____ से होती है। सात्विक व्यवहार तथा धर्म, नीति आदि की 2. _____ से किया जाने वाला अच्छा और शुभ आचरण 'सदाचार' है। इसके ठीक 3. _____ 'भ्रष्टाचार' शब्द है। जो मनुष्य दूषित और 4. _____ आचरण करता हो, वह भ्रष्टाचारी कहलाता है। भ्रष्टाचार एक प्रकार का 5. _____ विकार है।

SubQuestion No : 19

Q.19 रिक्त स्थान 4 की पूर्ति के लिए सबसे उपयुक्त विकल्प का चयन कीजिए।

- Ans 1. निंदनीय
 2. सम्मानित
 3. विवश
 4. परमार्थी

Question ID : 264330111038
Status : Not Answered
Chosen Option : --

Comprehension:

निम्नलिखित गद्यांश में कुछ शब्दों को हटा दिया गया है। दिए गए विकल्पों की सहायता से रिक्त स्थानों की पूर्ति कीजिए। प्रत्येक संख्या के लिए सबसे उपयुक्त विकल्प का चयन कीजिए।
मनुष्य की पहचान उसके आचरण और 1. _____ से होती है। सात्विक व्यवहार तथा धर्म, नीति आदि की 2. _____ से किया जाने वाला अच्छा और शुभ आचरण 'सदाचार' है। इसके ठीक 3. _____ 'भ्रष्टाचार' शब्द है। जो मनुष्य दूषित और 4. _____ आचरण करता हो, वह भ्रष्टाचारी कहलाता है। भ्रष्टाचार एक प्रकार का 5. _____ विकार है।

SubQuestion No : 20

Q.20 रिक्त स्थान 5 की पूर्ति के लिए सबसे उपयुक्त विकल्प का चयन कीजिए।

- Ans 1. स्वस्थ
 2. मानसिक
 3. व्यवहारिक
 4. पारिवारिक

Question ID : 264330111039

Status : Not Answered

Chosen Option : --

WWW.GOVtjobsalert.in