

Constable GD in CAPFs SSF Rifleman GD in Assam Rifles and Sepoy in NCB Examination 2022

Roll Number	www.govtjobsalert.in
Candidate Name	www.govtjobsalert.in
Venue Name	iON Digital Zone iDZ 1 Sector 62
Exam Date	31/01/2023
Exam Time	5:15 PM - 6:15 PM
Subject	Constable GD Examination 2022

Section : Part-A-General Intelligence and Reasoning

Q.1 Which number will replace the question mark (?) in the following series?

7, 21, 35, ?, 63

- Ans
- 1. 40
 - 2. 50
 - 3. 62
 - 4. 49

Question ID : 26433067839

Status : Answered

Chosen Option : 4

Q.2 Which of the following numbers will replace the question mark (?) in the given series?

235, 271, ?, 349, 391, 435

- Ans
- 1. 311
 - 2. 307
 - 3. 313
 - 4. 309

Question ID : 26433069395

Status : Answered

Chosen Option : 4

Q.3 Which option represents the correct order of the given words as they would appear in the English dictionary?

- 1 Fountain
- 2 Found
- 3 Fond
- 4 Focus
- 5 Follow

- Ans
- 1. 4,5,1,2,3
 - 2. 4,5,3,2,1
 - 3. 5,4,3,2,1
 - 4. 4,3,5,1,2

Question ID : 26433069282

Status : Answered

Chosen Option : 2

Q.4 Which of the mathematical signs should be interchanged in the below equation to make it mathematically correct?

$$17 + 98 \div 14 - 8 \times 68 = 179$$

- Ans
- 1. + and \times
 - 2. + and -
 - 3. \div and \times
 - 4. + and \div

Question ID : 264330117490

Status : **Not Attempted and Marked For Review**

Chosen Option : --

Q.5 Which two signs should be interchanged to make the below equation mathematically correct?

$$120 \div 15 + 60 - 4 \times 2 = 135$$

- Ans
- 1. + and \times
 - 2. \div and -
 - 3. \div and \times
 - 4. \times and -

Question ID : 264330114194

Status : **Not Attempted and Marked For Review**

Chosen Option : --

Q.6 In a certain code language, 'EARTH' is written as 'AERHT' and 'VENUS' is written as 'EVNSU'. How will 'PLANT' be written in that language?

- Ans
- 1. LPATN
 - 2. LPTAN
 - 3. LAPT N
 - 4. LPANT

Question ID : 26433068225

Status : **Answered**

Chosen Option : 1

Q.7 Read the given statements and conclusions carefully. Assuming that the information given in the statements is true, even if it appears to be at variance with commonly known facts, decide which of the given conclusions logically follow(s) from the statements.

STATEMENTS:

- A. All boxes are pans.
- B. Some boxes are jugs.
- C. Some jugs are glasses.

CONCLUSIONS:

- I. Some glasses are boxes.
- II. No glass is a box.
- III. Some jugs are pans.

- Ans**
- 1. Only conclusion I follows.
 - 2. Both conclusions I and II follow.
 - 3. All three conclusions follow.
 - 4. Only conclusion III follows.

Question ID : 26433081634

Status : Not Answered

Chosen Option : --

Q.8 Select the option that is related to the fifth letter-cluster in the same way as the second letter-cluster is related to the first letter-cluster and the fourth letter-cluster is related to the third letter-cluster.

PJM : LHM :: NSV : UQK :: JTW : ?

- Ans**
- 1. VPG
 - 2. USH
 - 3. WRG
 - 4. VRG

Question ID : 26433057715

Status : Answered

Chosen Option : 4

Q.9 8 friends A, B, C, D, E, F, G, and H are sitting around a circular table facing the centre. A is the immediate neighbour of B and C. H is the immediate neighbour of F and G. D is sitting to the immediate left of B. E is sitting to the immediate right of C. A and H are sitting opposite each other. Who is sitting immediate right of B?

- Ans**
- 1. A
 - 2. F
 - 3. H
 - 4. E

Question ID : 26433080435

Status : Answered

Chosen Option : 1

Q.10 Anil, Bunty, Choubey, Dishant, and Eshan are five students sitting around a circular table facing the centre. Dishant sits to the immediate right of Anil. Choubey is not sitting next to Dishant or Anil. Eshan is sitting to the immediate right of Choubey. Who is sitting to the immediate right of Dishant?

- Ans 1. Bunty
 2. Anil
 3. Choubey
 4. Eshan

Question ID : 264330114207
Status : Answered
Chosen Option : 1

Q.11 Select the set in which the numbers are related in the same way as are the numbers of the following sets.

(NOTE : Operations should be performed on the whole numbers, without breaking down the numbers into its constituent digits. E.g. 13 – Operations on 13 such as adding/subtracting/multiplying etc. to 13 can be performed. Breaking down 13 into 1 and 3 and then performing mathematical operations on 1 and 3 is not allowed)
(13, 150, 17)
(10, 130, 16)

- Ans 1. (8, 135, 19)
 2. (11, 150, 15)
 3. (12, 116, 17)
 4. (11, 110, 19)

Question ID : 26433076543
Status : Answered
Chosen Option : 2

Q.12 Which of the following letter-clusters will replace the question mark (?) and complete the following letter-cluster series?
EU, CS, YQ, SO, ?

- Ans 1. KE
 2. KM
 3. KL
 4. JM

Question ID : 26433067297
Status : Answered
Chosen Option : 2

Q.13 Which figure should replace the question mark (?) if the series were to be continued?

PICTER	REICTP	IREPCT	TCREPI	?
--------	--------	--------	--------	---

Ans

✗ 1. RTCPIE

✗ 2. ITCREP

✗ 3. CREPIT

✓ 4. RTCI EP

Question ID : 26433076634

Status : Not Attempted and Marked For Review

Chosen Option : --

Q.14 'A - B' means 'B is the mother of A'
'A # B' means 'B is the sister of A'
'A \$ B' means 'B is the husband of A'
If A - B # C - D \$ E, then how is E related to A?

- Ans
- ✗ 1. Husband
 - ✓ 2. Mother's father
 - ✗ 3. Mother's brother
 - ✗ 4. Father

Question ID : 26433068530

Status : Answered

Chosen Option : 2

Q.15 Select the option that is related to the third word in the same way as the second word is related to the first word. (The words must be considered as meaningful English words and must not be related to each other based on the number of letters/number of consonants/vowels in the word.)

Slavery : Liberty :: Hate : ?

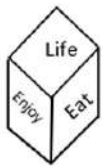
- Ans
- 1. Person
 - 2. Marriage
 - 3. Swim
 - 4. Love

Question ID : 26433069579

Status : Answered

Chosen Option : 4

Q.16 Two different positions of the same dice are shown having six different words – Life, Eat, Enjoy, Sleep, Love and Care. Find the word on the face opposite the face showing 'Life'.



- Ans
- 1. Enjoy
 - 2. Love
 - 3. Sleep
 - 4. Care

Question ID : 26433085523

Status : Answered

Chosen Option : 3

Q.17 Which letter-cluster will replace the question mark (?) to complete the given series?
PBXJ, TFJX, ?, BNJX, FRXJ

- Ans
- 1. WKJX
 - 2. VKJX
 - 3. VLXJ
 - 4. XJXJ

Question ID : 26433068037

Status : Answered

Chosen Option : 4

Q.18 In a certain code language, 'cat pen' is coded 'tin de', 'animal tiger' is coded as 'sin xe', and 'pen tiger' is coded as 'de xe', What is the code word for 'cat'?

- Ans
- 1. xe
 - 2. pen
 - 3. tin
 - 4. de

Question ID : 26433079364

Status : Answered

Chosen Option : 3

Q.19 Select the Correct mirror image of the given figure when the figure is placed at MN as shown below.



Ans

✗ 1. y j 3 6 j 5 t A

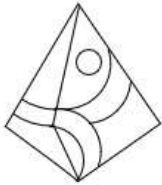
✓ 2. y 6 3 j 6 t A

✗ 3. y 6 3 j 6 t A

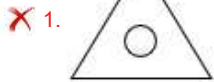
✗ 4. y 6 3 j 6 t A

Question ID : 26433082328
 Status : Answered
 Chosen Option : 2

Q.20 Select the option figure which is embedded in the given figure. (Rotation is NOT allowed)



Ans



Question ID : 26433069332
 Status : Answered
 Chosen Option : 3

Q.1 What is the SI unit of the electric potential difference?

- Ans
- 1. Watt
 - 2. Ampere
 - 3. Joules
 - 4. Volt

Question ID : 26433089646
Status : Answered
Chosen Option : 4

Q.2 Name the movement that started at Naxalbari in Darjeeling district in West Bengal in 1967.

- Ans
- 1. The Bhoodan Movement
 - 2. The Chipko movement
 - 3. The Quit India Movement
 - 4. The Naxalite Movement

Question ID : 264330115686
Status : Marked For Review
Chosen Option : 1

Q.3 Sudip Roy Barman became Member of Legislative Assembly from _____ constituency in June 2022.

- Ans
- 1. Mysore
 - 2. Bilaspur
 - 3. Hajipur
 - 4. Agartala

Question ID : 264330114913
Status : Not Answered
Chosen Option : --

Q.4 During which season do North-east trade winds dominate India?

- Ans
- 1. Autumn
 - 2. Monsoon
 - 3. Summer
 - 4. Winter

Question ID : 264330115979
Status : Not Attempted and Marked For Review
Chosen Option : --

Q.5 Which of the following is a summer cropping season in India?

- Ans 1. zaid
 2. monsoon
 3. kharif
 4. rabi

Question ID : 264330115524
Status : Answered
Chosen Option : 3

Q.6 Which of the following Union Territories does NOT have a lieutenant governor?

- Ans 1. New Delhi
 2. Daman and Diu
 3. Andaman and Nicobar Islands
 4. Puducherry

Question ID : 26433086832
Status : Marked For Review
Chosen Option : 3

Q.7 Name the disorder tied to body image distortion in adolescence.

- Ans 1. schizophrenia
 2. depression
 3. Alzheimer's disease
 4. anorexia nervosa

Question ID : 264330115224
Status : Answered
Chosen Option : 1

Q.8 What was the birth rate of India in 2017?

- Ans 1. 26.4
 2. 16.6
 3. 24.8
 4. 20.2

Question ID : 264330116136
Status : Not Answered
Chosen Option : --

Q.9 Who among the following players received the Arjuna Award for the year 2001?

- Ans 1. Prashanti Singh
 2. Sarabjeet Singh
 3. Manmohan Singh Lodhi
 4. Parminder Singh

Question ID : 26433089921
Status : Not Answered
Chosen Option : --

Q.10 A situation in which the government may spend an amount equal to the revenue it collects is :

- Ans 1. deficit budget
 2. balanced budget
 3. surplus budget
 4. capital budget

Question ID : 264330115277
Status : Answered
Chosen Option : 2

Q.11 The central theme of which of the following classical dance forms are the love stories of Krishna and Radha?

- Ans 1. Odissi
 2. Sattriya
 3. Kuchipudi
 4. Manipuri

Question ID : 264330115063
Status : Not Attempted and Marked For Review
Chosen Option : --

Q.12 Who among the following Mauryan emperors was known by the name of Piyadassi?

- Ans 1. Bindusara
 2. Dasaratha
 3. Ashoka
 4. Brihadratha

Question ID : 264330115451
Status : Answered
Chosen Option : 3

Q.13 Startup India Seed Fund Scheme (SISFS) was launched by _____ on 19th April 2021.

- Ans 1. Narendra Modi
 2. Smriti Irani
 3. Piyush Goyal
 4. Amit Shah

Question ID : 264330116187
Status : Not Answered
Chosen Option : --

Q.14 Geographically, which is the smallest state of India?

- Ans 1. Mizoram
 2. Goa
 3. Tripura
 4. Sikkim

Question ID : 264330116050
Status : Answered
Chosen Option : 4

Q.15 The Halda festival is primarily celebrated in which of the following states of India?

- Ans 1. Andhra Pradesh
 2. West Bengal
 3. Himachal Pradesh
 4. Rajasthan

Question ID : 26433094884
Status : Not Answered
Chosen Option : --

Q.16 In which year was the Target Olympic Podium Scheme (TOPS) established by the Ministry of Youth Affairs and Sports?

- Ans 1. 2016
 2. 2014
 3. 2012
 4. 2018

Question ID : 26433092326
Status : Answered
Chosen Option : 4

Q.17 Yamini Krishnamurthy has won various accolades in which form of dance?

- Ans 1. Kathak and Kuchipudi
 2. Bharatanatyam and Mohiniattam
 3. Kuchipudi and Mohiniattam
 4. Kuchipudi and Bharatanatyam

Question ID : 264330115841
Status : Answered
Chosen Option : 2

Q.18 The main focus of the First Five Year Plan was to develop the _____ sector like agriculture.

- Ans
- 1. primary
 - 2. tertiary
 - 3. secondary
 - 4. multi

Question ID : 264330115379
Status : Answered
Chosen Option : 1

Q.19 How many Fundamental rights are provided by Indian Constitution?

- Ans
- 1. 7
 - 2. 8
 - 3. 5
 - 4. 6

Question ID : 264330115612
Status : Answered
Chosen Option : 4

Q.20 Who has been appointed as India's next High Commissioner to Canada in September 2022?

- Ans
- 1. Gopal Baglay
 - 2. Sanjay Kumar Verma
 - 3. Pranay Kumar Verma
 - 4. Prabhat Prakash Shukla

Question ID : 264330114980
Status : Answered
Chosen Option : 2

Section : Part-C-Elementary Mathematics

Q.1 If $2P = 3Q = 5R$ and $P + Q + R = 6200$, then the difference between P and R is:

- Ans
- 1. 3000
 - 2. 2000
 - 3. 1200
 - 4. 1800

Question ID : 26433075491
Status : Answered
Chosen Option : 4

Q.2 Anil and Bablu can do a given piece of work in 50 days, Bablu and Candy can do the same work in 60 days, and Anil, Bablu, and Candy complete it in 30 days. Find the number of days required by Bablu to finish the total work.

- Ans
- 1. 400 days
 - 2. 450 days
 - 3. 550 days
 - 4. 300 days

Question ID : 264330116871
Status : Answered
Chosen Option : 4

Q.3 From place A to B, which are 50 km apart, T covers half of the distance in 20 minutes. What should be his speed (in km/h) in the second half so that his average speed from A to B is 80 km/h?

- Ans
- 1. 57.8
 - 2. 87.5
 - 3. 75.8
 - 4. 85.7

Question ID : 26433071260
Status : Answered
Chosen Option : 2

Q.4 A buys 150 gm gold for Rs.6,00,000 and gives 6% as making charges. What should be the selling price per 10 gm to have a profit of 6%?

- Ans
- 1. Rs.49,444
 - 2. Rs.44,449
 - 3. Rs.44,494
 - 4. Rs.44,944

Question ID : 26433071254
Status : Answered
Chosen Option : 1

Q.5 The population of a country increases by 8% in the first year, depreciates by 10% in the second year and again increases by 6% in the third year. If the present population is 6 crore, find the population growth after 3 years.

- Ans
- 1. 18,19,200
 - 2. 18,99,500
 - 3. 19,19,200
 - 4. 20,35,000

Question ID : 26433075118
Status : Answered
Chosen Option : 1

Q.6 A lady spends 20 percent of her total income on house rent, and 75 percent of the rest on household items. If she saves ₹600, then what is her income?

- Ans
- 1. ₹2,000
 - 2. ₹1500
 - 3. ₹4,000
 - 4. ₹3,000

Question ID : 26433079853
Status : Answered
Chosen Option : 4

Q.7 Due to delay in submission of an assignment the marks of Suhani were decreased by 10 percent and she got 135 marks. What could have been her marks in the assignment, if there was no delay in submission?

- Ans
- 1. 145
 - 2. 155
 - 3. 150
 - 4. 140

Question ID : 264330116791
Status : Answered
Chosen Option : 3

Q.8 An aeroplane flies along the four sides of a square field at the speeds of 150 km/h, 300 km/h, 450 km/h and 600 km/h. Find the average speed of the plane around the field.

- Ans
- 1. 350 km/h
 - 2. 288 km/h
 - 3. 228 km/h
 - 4. 225 km/h

Question ID : 26433073035
Status : Answered
Chosen Option : 1

Q.9 The average of the following numbers is 25. Find the value of X.
24, 30, 12, 18, 20, 10, 40, X

- Ans
- 1. 46
 - 2. 48
 - 3. 47
 - 4. 45

Question ID : 264330116684
Status : Answered
Chosen Option : 1

Q.10 If a conical vessel has a radius of 4 cm and volume of $16\pi \text{ cm}^3$, then its curved surface area is:

- Ans
- 1. $16\pi \text{ cm}^2$
 - 2. $4\pi \text{ cm}^2$
 - 3. $12\pi \text{ cm}^2$
 - 4. $20\pi \text{ cm}^2$

Question ID : 26433073048
Status : Answered
Chosen Option : 4

Q.11 A class teacher conducted a unit test in the class. If out of 30 students, 14 students scored 80 and rest 16 students scored 65, then what is the weighted average score?

- Ans
- 1. 75
 - 2. 70
 - 3. 72
 - 4. 76

Question ID : 26433075640
Status : Answered
Chosen Option : 3

Q.12 Find the total surface area of a cylindrical container with lid, whose base diameter is $k \text{ cm}$, and height is $\frac{k}{2} \text{ cm}$ (in cm^2).

- Ans
- 1. $\frac{\pi k^2}{4}$
 - 2. $\frac{\pi k^2}{2}$
 - 3. $2\pi k^2$
 - 4. πk^2

Question ID : 26433079975
Status : Answered
Chosen Option : 1

Q.13 What will be the remainder when 3^{27} is divided by 26?

- Ans
- 1. 1
 - 2. 3
 - 3. 2
 - 4. 0

Question ID : 26433080214
Status : Answered
Chosen Option : 1

Q.14 The product of 2 numbers is 1890 and the numbers differ by 3. Find the LCM of the numbers.

- Ans
- 1. 450
 - 2. 540
 - 3. 720
 - 4. 630

Question ID : 264330116630
Status : Answered
Chosen Option : 4

Q.15 A and B alone take 4 and 6 hours, respectively, to complete a certain work. If they work alternatively each hour, starting with A first, how long will it take them to complete the work?

- Ans
- 1. $\frac{11}{3}$ hours
 - 2. $\frac{14}{3}$ hours
 - 3. $\frac{17}{3}$ hours
 - 4. $\frac{13}{3}$ hours

Question ID : 26433076110
Status : Answered
Chosen Option : 1

Q.16 Seema purchased a boat that cost her for Rs.3200 and marked price is Rs.4000. How much discount she get ?

- Ans
- 1. Rs. 600
 - 2. Rs. 700
 - 3. Rs. 500
 - 4. Rs. 800

Question ID : 264330116716
Status : Answered
Chosen Option : 4

Q.17 The marked price of a product is Rs. 1000. If it is sold at 7 percent discount and the dealer earns 50 percent profit, then what is the cost price of the product?

- Ans
- 1. Rs. 930
 - 2. Rs. 840
 - 3. Rs. 620
 - 4. Rs. 720

Question ID : 264330116756
Status : Answered
Chosen Option : 3

Q.18 Find the compound interest on Rs.1,000 at 20% per annum for one year if interest is compounded half-yearly.

- Ans
- 1. Rs.211
 - 2. Rs.210
 - 3. Rs.209
 - 4. Rs.208

Question ID : 26433082980
Status : Answered
Chosen Option : 1

Q.19 If $\frac{a}{6} = \frac{b}{10} = \frac{c}{4}$, then $\frac{a+b+c}{a}$ is equal to:

- Ans
- 1. $\frac{20}{3}$
 - 2. 4
 - 3. $\frac{10}{3}$
 - 4. 2

Question ID : 26433075813
Status : Not Answered
Chosen Option : --

Q.20 By selling 50 fruits, a fruit seller gains the selling price of 10 fruits. Find the gain percentage.

- Ans
- 1. 28%
 - 2. 25%
 - 3. 30%
 - 4. 32%

Question ID : 26433074277
Status : Answered
Chosen Option : 2

Q.1 Select the INCORRECTLY spelt word.

- Ans 1. Mischief
 2. Perceive
 3. Acheive
 4. Receive

Question ID : 26433072364
Status : Answered
Chosen Option : 3

Q.2 Select the most appropriate meaning of the given idiom.

Pull yourself together

- Ans 1. Brew new problems
 2. Transform society
 3. Enervate the downtrodden
 4. Calm down

Question ID : 26433073994
Status : Answered
Chosen Option : 4

Q.3 Select the most appropriate option to fill in the blank.

Arun has experienced severe mental and emotional turmoil, as well as interpersonal _____ at times.

- Ans 1. dizziness
 2. symptoms
 3. numbness
 4. fatigue

Question ID : 26433073618
Status : Answered
Chosen Option : 3

Q.4 Select the most appropriate synonym of the given word.

Early

- Ans 1. Beforehand
 2. Complex
 3. Late
 4. Tardy

Question ID : 26433088927
Status : Answered
Chosen Option : 1

Q.5 Select the most appropriate ANTONYM of the given word.

Flatter

- Ans 1. Soil
 2. Insult
 3. Adulate
 4. Cajole

Question ID : 26433072213
Status : Answered
Chosen Option : 2

Q.6 Select the most appropriate ANTONYM of the word given in brackets to fill in the blank.

Watching the singer perform live at the concert _____ (alert) the audience for a moment.

- Ans 1. shunned
 2. distracted
 3. called
 4. summoned

Question ID : 26433092930
Status : Answered
Chosen Option : 2

Q.7 Select the INCORRECTLY spelt word.

- Ans 1. Volunter
 2. Raisin
 3. Quotable
 4. Pamphlet

Question ID : 26433073735
Status : Answered
Chosen Option : 1

Q.8 Select the most appropriate option to fill in the blanks and make the sentence meaningful.

I taught my son the _____ way to tie a _____.

- Ans 1. right; not
 2. write; knot
 3. right; knot
 4. write; not

Question ID : 26433092098
Status : Answered
Chosen Option : 3

Q.9 Select the most appropriate option that can substitute the underlined segment in the given sentence. If there is no need to substitute it, select 'No substitution'.
When I was young, I can memorise lessons faster than Mohan.

- Ans
- 1. I could memorise lessons faster to Mohan
 - 2. I could memorise lessons faster than Mohan
 - 3. No substitution
 - 4. I can memorise lessons faster to Mohan

Question ID : 26433093074
Status : Answered
Chosen Option : 2

Q.10 Select the most appropriate synonym of the given word.

Obstruct

- Ans
- 1. Separate
 - 2. Block
 - 3. Magnify
 - 4. Obey

Question ID : 26433073464
Status : Answered
Chosen Option : 2

Q.11 Select the most appropriate option that can substitute the underlined segment in the given sentence.

I was very much surprised to see Mariam at the party.

- Ans
- 1. bowled
 - 2. astonished
 - 3. stalked
 - 4. aghast

Question ID : 26433086461
Status : Answered
Chosen Option : 2

Q.12 Select the most appropriate ANTONYM of the given word.

Encircle

- Ans
- 1. Entire
 - 2. Entice
 - 3. Embrace
 - 4. Exclude

Question ID : 26433072207
Status : Answered
Chosen Option : 4

Q.13 Select the most appropriate meaning of the underlined idiom in the given sentence.

Even though his car was badly damaged in the accident, Rohan did not turn a hair.

- Ans
- 1. Change the hairstyle
 - 2. Demand compensation
 - 3. Understand anything
 - 4. To show no outward emotion

Question ID : 26433071997
Status : Answered
Chosen Option : 4

Q.14 Parts of the following sentence have been given as options. Select the option that contains an error.

Dad, will you get me a box of crayons / on your way home? Teacher told us yesterday, "You must bring / a box of crayons with you to the drawing class./ Or I will not be let you stay in the class."

- Ans
- 1. Or I will not be let you stay in the class".
 - 2. on your way home? Teacher said yesterday, "You must bring
 - 3. Dad, will you get me a box of crayons
 - 4. a box of crayons with you to the drawing class.

Question ID : 26433099126
Status : Answered
Chosen Option : 1

Q.15 Select the most appropriate ANTONYM of the word given in brackets to fill in the blank.

Those who have _____ (humility) will definitely fall down.

- Ans
- 1. weakness
 - 2. pride
 - 3. disrespect
 - 4. veracity

Question ID : 26433070458
Status : Answered
Chosen Option : 4

Comprehension:

In the following passage, some words have been deleted. Read the passage carefully and select the most appropriate option to fill in each blank.

Advertising (1) _____ initially meant to make people aware of the goods available in the market. It was as simple as announcing what you have in your store or the services you offer on your (2) _____. Over the years, advertising has evolved into a major industry that goes beyond informing, persuading and influencing. It is a form of brainwashing consumers. Advertising has become a type of culture with ardent followers. In the process, it attracts enviable attention from manufacturers and service providers who fancy an (3) _____ over their competitors. Unfortunately, in keeping with the ever-increasing demands of the manufacturers, the advertisers have resulted in creating unnecessary wants and (4) _____ consumption in most of us. This is a craving for harmful products that we are better off without. It (5) _____ on our minds rendering us completely irrational. The billboards (hoardings), television and radio advertisements target us from a very early age, forming our view of the world as we grow into adults. The buzzwords in advertising are, 'you are cool and sophisticated' if you use this or that product.

SubQuestion No : 16

Q.16 Select the most appropriate option to fill in blank number 1.

- Ans
- 1. are
 - 2. will
 - 3. is
 - 4. was

Question ID : 26433072023

Status : Answered

Chosen Option : 4

Comprehension:

In the following passage, some words have been deleted. Read the passage carefully and select the most appropriate option to fill in each blank.

Advertising (1) _____ initially meant to make people aware of the goods available in the market. It was as simple as announcing what you have in your store or the services you offer on your (2) _____. Over the years, advertising has evolved into a major industry that goes beyond informing, persuading and influencing. It is a form of brainwashing consumers. Advertising has become a type of culture with ardent followers. In the process, it attracts enviable attention from manufacturers and service providers who fancy an (3) _____ over their competitors. Unfortunately, in keeping with the ever-increasing demands of the manufacturers, the advertisers have resulted in creating unnecessary wants and (4) _____ consumption in most of us. This is a craving for harmful products that we are better off without. It (5) _____ on our minds rendering us completely irrational. The billboards (hoardings), television and radio advertisements target us from a very early age, forming our view of the world as we grow into adults. The buzzwords in advertising are, 'you are cool and sophisticated' if you use this or that product.

SubQuestion No : 17

Q.17 Select the most appropriate option to fill in blank number 2.

- Ans
- 1. estate
 - 2. abode
 - 3. places
 - 4. premises

Question ID : 26433072024

Status : Answered

Chosen Option : 2

Comprehension:

In the following passage, some words have been deleted. Read the passage carefully and select the most appropriate option to fill in each blank.

Advertising (1) _____ initially meant to make people aware of the goods available in the market. It was as simple as announcing what you have in your store or the services you offer on your (2) _____. Over the years, advertising has evolved into a major industry that goes beyond informing, persuading and influencing. It is a form of brainwashing consumers. Advertising has become a type of culture with ardent followers. In the process, it attracts enviable attention from manufacturers and service providers who fancy an (3) _____ over their competitors. Unfortunately, in keeping with the ever-increasing demands of the manufacturers, the advertisers have resulted in creating unnecessary wants and (4) _____ consumption in most of us. This is a craving for harmful products that we are better off without. It (5) _____ on our minds rendering us completely irrational. The billboards (hoardings), television and radio advertisements target us from a very early age, forming our view of the world as we grow into adults. The buzzwords in advertising are, 'you are cool and sophisticated' if you use this or that product.

SubQuestion No : 18

Q.18 Select the most appropriate option to fill in blank number 3.

- Ans 1. edge
 2. authority
 3. empire
 4. mastery

Question ID : 26433072025
Status : Answered
Chosen Option : 1

Comprehension:

In the following passage, some words have been deleted. Read the passage carefully and select the most appropriate option to fill in each blank.

Advertising (1) _____ initially meant to make people aware of the goods available in the market. It was as simple as announcing what you have in your store or the services you offer on your (2) _____. Over the years, advertising has evolved into a major industry that goes beyond informing, persuading and influencing. It is a form of brainwashing consumers. Advertising has become a type of culture with ardent followers. In the process, it attracts enviable attention from manufacturers and service providers who fancy an (3) _____ over their competitors. Unfortunately, in keeping with the ever-increasing demands of the manufacturers, the advertisers have resulted in creating unnecessary wants and (4) _____ consumption in most of us. This is a craving for harmful products that we are better off without. It (5) _____ on our minds rendering us completely irrational. The billboards (hoardings), television and radio advertisements target us from a very early age, forming our view of the world as we grow into adults. The buzzwords in advertising are, 'you are cool and sophisticated' if you use this or that product.

SubQuestion No : 19

Q.19 Select the most appropriate option to fill in blank number 4.

- Ans 1. excess
 2. unneeded
 3. redundant
 4. ample

Question ID : 26433072026
Status : Answered
Chosen Option : 1

Comprehension:

In the following passage, some words have been deleted. Read the passage carefully and select the most appropriate option to fill in each blank.

Advertising (1) _____ initially meant to make people aware of the goods available in the market. It was as simple as announcing what you have in your store or the services you offer on your (2) _____. Over the years, advertising has evolved into a major industry that goes beyond informing, persuading and influencing. It is a form of brainwashing consumers. Advertising has become a type of culture with ardent followers. In the process, it attracts enviable attention from manufacturers and service providers who fancy an (3) _____ over their competitors. Unfortunately, in keeping with the ever-increasing demands of the manufacturers, the advertisers have resulted in creating unnecessary wants and (4) _____ consumption in most of us. This is a craving for harmful products that we are better off without. It (5) _____ on our minds rendering us completely irrational. The billboards (hoardings), television and radio advertisements target us from a very early age, forming our view of the world as we grow into adults. The buzzwords in advertising are, 'you are cool and sophisticated' if you use this or that product.

SubQuestion No : 20

Q.20 Select the most appropriate option to fill in blank number 5.

- Ans
- 1. sacrifices
 - 2. assassinate
 - 3. preys
 - 4. victimises

Question ID : 26433072027
Status : Answered
Chosen Option : 3

Section : Part-D-Hindi

Q.1 'पिताजी ने मिठाई लावेंगे।'
उपरोक्त वाक्य में त्रुटि पहचानकर वाक्य शुद्ध कीजिए।

- Ans
- 1. पिताजी ने मिठाई लाँगे।
 - 2. पिताजी मिठाई लाँगे।
 - 3. पिताजी मिठाइयाँ लावेंगे।
 - 4. पिताजी ने मिठाई लाए।

Question ID : 26433063045
Status : Not Answered
Chosen Option : --

Q.2 'गंगा' के लिए 'मंदाकिनी' शब्द का प्रयोग होता है। इसके बदले में और क्या शब्द हो सकता है?

- Ans
- 1. देवनदी
 - 2. कलानिधि
 - 3. तरंगिनी
 - 4. सलिल

Question ID : 26433062688
Status : Not Answered
Chosen Option : --

Q.3 'जिसका जन्म पहले हुआ हो' वाक्यांश के लिए उचित शब्द बताइए।

- Ans 1. भ्राता
 2. अग्रज
 3. प्रथम
 4. अनुज

Question ID : 26433065903
Status : Not Answered
Chosen Option : --

Q.4 निम्न वाक्य में रेखांकित अंश के स्थान पर आने वाले सबसे उपयुक्त विकल्प का चयन कीजिए।
प्रेम करना तलवार की नोक पर चलना है।

- Ans 1. नाक
 2. किनारे
 3. ऊपर
 4. धार

Question ID : 26433066869
Status : Not Answered
Chosen Option : --

Q.5 'राजा महेंद्र ने हाथी पर सवार होकर नगर भ्रमण किया।' निम्नलिखित में से कौन सा शब्द उपरोक्त वाक्य में प्रयुक्त 'हाथी' शब्द का पर्यायवाची नहीं है?

- Ans 1. गज
 2. करी
 3. सारंग
 4. कुंजर

Question ID : 26433069738
Status : Not Answered
Chosen Option : --

Q.6 निम्नलिखित विकल्पों में से दिए गए वाक्यांश के लिए उपयुक्त शब्द चुनें।
भयभीत करने वाला

- Ans 1. त्रिकांडी
 2. त्रासद
 3. त्रासक
 4. त्रिक

Question ID : 26433069994
Status : Not Answered
Chosen Option : --

Q.7 'बोलने वाला' वाक्यांश के लिए सार्थक शब्द है-

- Ans
- 1. यायावर
 - 2. विचारक
 - 3. वाणी
 - 4. वक्ता

Question ID : 26433062225
Status : Not Answered
Chosen Option : --

Q.8 'मुनाफ़ा' शब्द का विलोम क्या है?

- Ans
- 1. नफ़ा
 - 2. नुक़सान
 - 3. फ़ायदा
 - 4. लाभ

Question ID : 26433067092
Status : Not Answered
Chosen Option : --

Q.9 'दंग रह जाना' मुहावरे का क्या अर्थ है?

- Ans
- 1. बहुत हैरान होना
 - 2. बहुत परेशान होना
 - 3. बहुत खुश होना
 - 4. बहुत सताना

Question ID : 26433066806
Status : Not Answered
Chosen Option : --

Q.10 निम्न वाक्य में त्रुटि पहचानकर वाक्य शुद्ध कीजिए।
'मोहन को मिलो और उससे यह बात बताओ।'

- Ans
- 1. मोहन से मिलिए और उनको यह बताओ।
 - 2. मोहन को मिलकर बात बताओ।
 - 3. मोहन से मिलो और उसे यह बात बताओ।
 - 4. मोहन ने मिलकर बात बोली।

Question ID : 26433063036
Status : Not Answered
Chosen Option : --

Q.11 निम्नलिखित शब्दों में से कौन सा शब्द अनेकार्थी शब्द है?

- Ans 1. भैंस
 2. गाय
 3. हरिण
 4. बंदर

Question ID : 26433091316
Status : Not Answered
Chosen Option : --

Q.12 निम्नलिखित मुहावरे के लिए उपयुक्त सार्थक शब्द क्या होगा?
न जाने ऊंट किस करवट बैठेगा

- Ans 1. विश्वास
 2. बैठना
 3. निराश होना
 4. अनिश्चितता

Question ID : 26433065773
Status : Not Answered
Chosen Option : --

Q.13 निम्नलिखित में से शुद्ध वर्तनी वाला शब्द कौन-सा है?

- Ans 1. अभिनेट
 2. अभीनेता
 3. अभिनेता
 4. अभीनेत्रा

Question ID : 26433066748
Status : Not Answered
Chosen Option : --

Q.14 निम्नलिखित में से अशुद्ध वाक्य कौन-सा है?

- Ans 1. हम भी धूप और पानी में खड़े हो सकते हैं।
 2. साहित्य का आधार जीवन है।
 3. सुनैना आज घर आ रही है।
 4. बाघ और बकरी एक घाट पर पानी पीती हैं।

Question ID : 26433066991
Status : Not Answered
Chosen Option : --

Q.15 निम्नलिखित वाक्य में रेखांकित एकार्थी शब्दों के उपयुक्त अर्थ बताएं।
शमशेर बहुत ही 'विदुर' व्यक्ति हैं, अफसोस कि वे 'विधुर' हैं।

- Ans
- 1. ज्ञानी- अज्ञानी
 - 2. ज्ञानी- जिसकी पत्नी मर गई हो
 - 3. सन्यासी- पंडित
 - 4. जिसकी पत्नी मर गई हो- पंडित

Question ID : 26433091330
Status : Not Answered
Chosen Option : --

Comprehension:

निम्नलिखित गद्यांश में कुछ शब्दों को हटा दिया गया है। दिए गए विकल्पों की सहायता से रिक्त स्थानों की पूर्ति कीजिए। प्रत्येक संख्या के लिए सबसे उपयुक्त विकल्प का चयन कीजिए।
मानव जब जोर लगाता है, पत्थर पानी बन जाता है। मनुष्य के पास इतनी 1. _____ है कि वह सभी कुछ कर सकता है। इसी भरोसे पर वह अपना और अपने 2. _____ का लालन-पालन करता है। समाज में छोटे-बड़े, निर्धन-धनी का होना 3. _____ है। समाज में धनवान का आदर होता है जबकि मजदूर को 4. _____ समझा जाता है। कड़ी मेहनत के बावजूद उसे वह आदर नहीं मिलता जो एक 5. _____ को मिलना चाहिए।

SubQuestion No : 16

Q.16 रिक्त स्थान 1 की पूर्ति के लिए सबसे उपयुक्त विकल्प का चयन कीजिए।

- Ans
- 1. विषय
 - 2. शक्ति
 - 3. आदर
 - 4. कार्य

Question ID : 264330110975
Status : Not Answered
Chosen Option : --

Comprehension:

निम्नलिखित गद्यांश में कुछ शब्दों को हटा दिया गया है। दिए गए विकल्पों की सहायता से रिक्त स्थानों की पूर्ति कीजिए। प्रत्येक संख्या के लिए सबसे उपयुक्त विकल्प का चयन कीजिए।
मानव जब जोर लगाता है, पत्थर पानी बन जाता है। मनुष्य के पास इतनी 1. _____ है कि वह सभी कुछ कर सकता है। इसी भरोसे पर वह अपना और अपने 2. _____ का लालन-पालन करता है। समाज में छोटे-बड़े, निर्धन-धनी का होना 3. _____ है। समाज में धनवान का आदर होता है जबकि मजदूर को 4. _____ समझा जाता है। कड़ी मेहनत के बावजूद उसे वह आदर नहीं मिलता जो एक 5. _____ को मिलना चाहिए।

SubQuestion No : 17

Q.17 रिक्त स्थान 2 की पूर्ति के लिए सबसे उपयुक्त विकल्प का चयन कीजिए।

- Ans
- 1. परिवार
 - 2. पड़ोसी
 - 3. घर
 - 4. आपका

Question ID : 264330110976
Status : Not Answered
Chosen Option : --

Comprehension:

निम्नलिखित गद्यांश में कुछ शब्दों को हटा दिया गया है। दिए गए विकल्पों की सहायता से रिक्त स्थानों की पूर्ति कीजिए। प्रत्येक संख्या के लिए सबसे उपयुक्त विकल्प का चयन कीजिए।
मानव जब जोर लगाता है, पत्थर पानी बन जाता है। मनुष्य के पास इतनी 1. _____ है कि वह सभी कुछ कर सकता है। इसी भरोसे पर वह अपना और अपने 2. _____ का लालन-पालन करता है। समाज में छोटे-बड़े, निर्धन-धनी का होना 3. _____ है। समाज में धनवान का आदर होता है जबकि मज़दूर को 4. _____ समझा जाता है। कड़ी मेहनत के बावजूद उसे वह आदर नहीं मिलता जो एक 5. _____ को मिलना चाहिए।

SubQuestion No : 18

Q.18 रिक्त स्थान 3 की पूर्ति के लिए सबसे उपयुक्त विकल्प का चयन कीजिए।

- Ans 1. अनावश्यक
 2. स्वाभाविक
 3. अकथनीय
 4. ज़रूरी

Question ID : 264330110977

Status : Not Answered

Chosen Option : --

Comprehension:

निम्नलिखित गद्यांश में कुछ शब्दों को हटा दिया गया है। दिए गए विकल्पों की सहायता से रिक्त स्थानों की पूर्ति कीजिए। प्रत्येक संख्या के लिए सबसे उपयुक्त विकल्प का चयन कीजिए।
मानव जब जोर लगाता है, पत्थर पानी बन जाता है। मनुष्य के पास इतनी 1. _____ है कि वह सभी कुछ कर सकता है। इसी भरोसे पर वह अपना और अपने 2. _____ का लालन-पालन करता है। समाज में छोटे-बड़े, निर्धन-धनी का होना 3. _____ है। समाज में धनवान का आदर होता है जबकि मज़दूर को 4. _____ समझा जाता है। कड़ी मेहनत के बावजूद उसे वह आदर नहीं मिलता जो एक 5. _____ को मिलना चाहिए।

SubQuestion No : 19

Q.19 रिक्त स्थान 4 की पूर्ति के लिए सबसे उपयुक्त विकल्प का चयन कीजिए।

- Ans 1. सम्मान
 2. प्रथम
 3. सही
 4. तुच्छ

Question ID : 264330110978

Status : Not Answered

Chosen Option : --

Comprehension:

निम्नलिखित गद्यांश में कुछ शब्दों को हटा दिया गया है। दिए गए विकल्पों की सहायता से रिक्त स्थानों की पूर्ति कीजिए। प्रत्येक संख्या के लिए सबसे उपयुक्त विकल्प का चयन कीजिए।
मानव जब जोर लगाता है, पत्थर पानी बन जाता है। मनुष्य के पास इतनी 1. _____ है कि वह सभी कुछ कर सकता है। इसी भरोसे पर वह अपना और अपने 2. _____ का लालन-पालन करता है। समाज में छोटे-बड़े, निर्धन-धनी का होना 3. _____ है। समाज में धनवान का आदर होता है जबकि मज़दूर को 4. _____ समझा जाता है। कड़ी मेहनत के बावजूद उसे वह आदर नहीं मिलता जो एक 5. _____ को मिलना चाहिए।

SubQuestion No : 20

Q.20 रिक्त स्थान 5 की पूर्ति के लिए सबसे उपयुक्त विकल्प का चयन कीजिए।

- Ans** 1. बच्चों
 2. मनुष्य
 3. परिवार
 4. पड़ोसी

Question ID : 264330110979

Status : Not Answered

Chosen Option : --

WWW.GOV TJOB SALE